



Proporciones de Verano (F)

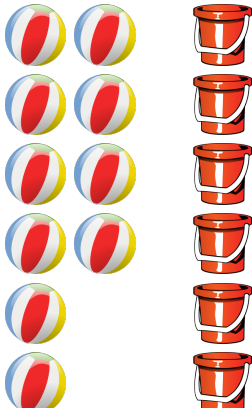
Escriba cada proporción en números, y simplifique de ser necesario.




$1 : 1 =$
 $1 : (1 + 1) =$



$1 : 1 =$
 $1 : (1 + 1) =$




$1 : 1 =$
 $1 : (1 + 1) =$



$1 : 1 =$
 $1 : (1 + 1) =$


Proporciones de Verano (F) Respuestas

Escriba cada proporción en números, y simplifique de ser necesario.



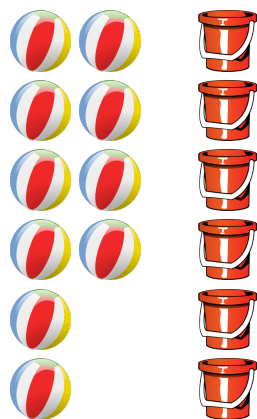
$$\text{Sandcastle} : \text{Sunflower} = 11 : 5$$

$$\text{Sandcastle} : (\text{Sandcastle} + \text{Sunflower}) = 11 : 16$$



$$\text{Sun} : \text{Shovel} = 24 : 11$$

$$\text{Sun} : (\text{Sun} + \text{Shovel}) = 24 : 35$$




$$\text{Beach Ball} : \text{Bucket} = 10 : 6$$

$$= 5 : 3$$

$$\text{Beach Ball} : (\text{Beach Ball} + \text{Bucket}) = 10 : 16$$

$$= 5 : 8$$



$$\text{Sunglasses} : \text{Bicycle} = 16 : 18$$

$$= 8 : 9$$

$$\text{Sunglasses} : (\text{Sunglasses} + \text{Bicycle}) = 16 : 34$$

$$= 8 : 17$$