

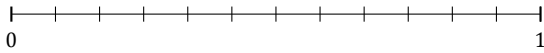
Redondear Fracciones (B)

Nombre: _____

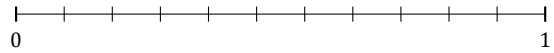
Fecha: _____

Redondee cada fracción hasta el entero más cercano. Redondee por exceso.

1. $\frac{8}{12} \approx$



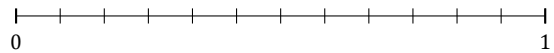
2. $\frac{8}{11} \approx$



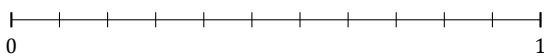
3. $\frac{7}{10} \approx$




4. $\frac{11}{12} \approx$



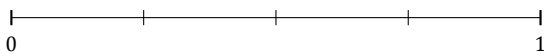
5. $\frac{10}{11} \approx$



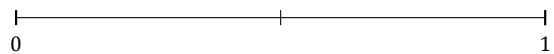
6. $\frac{1}{3} \approx$



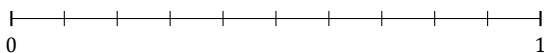
7. $\frac{1}{4} \approx$



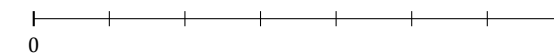
8. $\frac{1}{2} \approx$



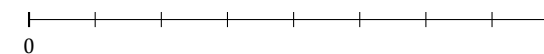
9. $\frac{9}{10} \approx$



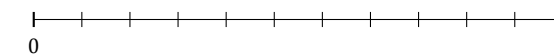
10. $\frac{5}{7} \approx$



11. $\frac{5}{8} \approx$



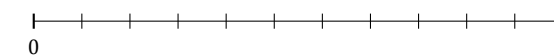
12. $\frac{5}{11} \approx$



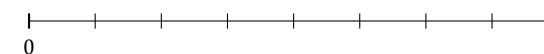
13. $\frac{2}{5} \approx$



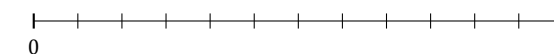
14. $\frac{3}{11} \approx$



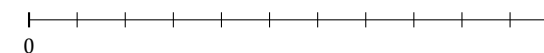
15. $\frac{4}{8} \approx$



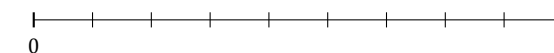
16. $\frac{1}{12} \approx$



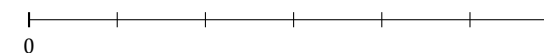
17. $\frac{6}{11} \approx$



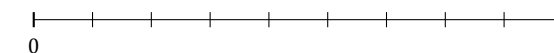
18. $\frac{4}{9} \approx$



19. $\frac{3}{6} \approx$



20. $\frac{7}{9} \approx$



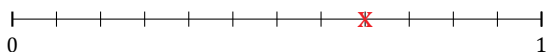
Redondear Fracciones (B) Respuestas

Nombre: _____

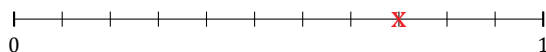
Fecha: _____

Redondee cada fracción hasta el entero más cercano. Redondee por exceso.

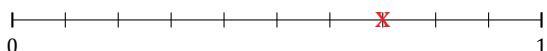
1. $\frac{8}{12} \approx 1$



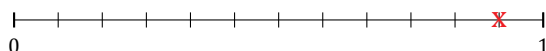
2. $\frac{8}{11} \approx 1$



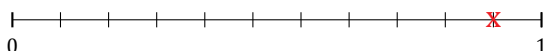
3. $\frac{7}{10} \approx 1$




4. $\frac{11}{12} \approx 1$



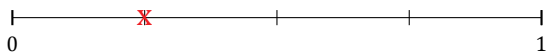
5. $\frac{10}{11} \approx 1$



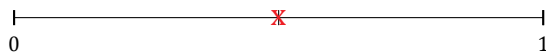
6. $\frac{1}{3} \approx 0$



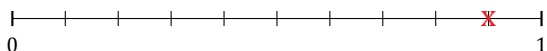
7. $\frac{1}{4} \approx 0$



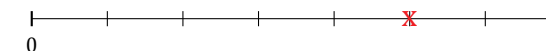
8. $\frac{1}{2} \approx 1$



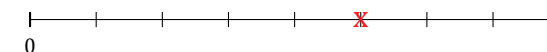
9. $\frac{9}{10} \approx 1$



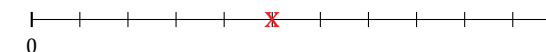
10. $\frac{5}{7} \approx 1$



11. $\frac{5}{8} \approx 1$



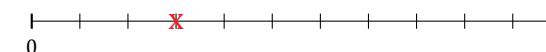
12. $\frac{5}{11} \approx 0$



13. $\frac{2}{5} \approx 0$



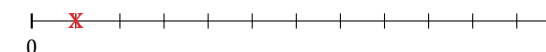
14. $\frac{3}{11} \approx 0$



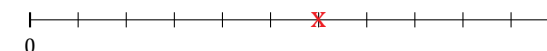
15. $\frac{4}{8} \approx 1$




16. $\frac{1}{12} \approx 0$



17. $\frac{6}{11} \approx 1$



18. $\frac{4}{9} \approx 0$



19. $\frac{3}{6} \approx 1$



20. $\frac{7}{9} \approx 1$

