

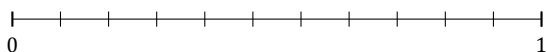
Redondear Fracciones (D)

Nombre: _____

Fecha: _____

Redondee cada fracción hasta el entero más cercano. Redondee por exceso.

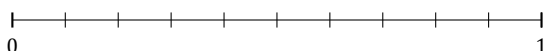
1. $\frac{9}{11} \approx$



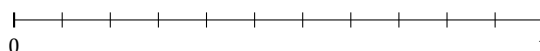
2. $\frac{2}{7} \approx$



3. $\frac{1}{10} \approx$



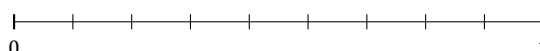
4. $\frac{2}{11} \approx$




5. $\frac{1}{9} \approx$



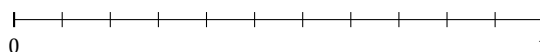
6. $\frac{7}{9} \approx$



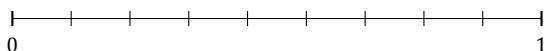
7. $\frac{3}{5} \approx$



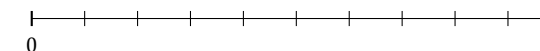
8. $\frac{4}{11} \approx$



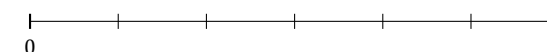
9. $\frac{8}{9} \approx$




10. $\frac{8}{10} \approx$



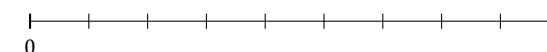
11. $\frac{4}{6} \approx$



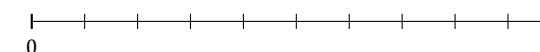
12. $\frac{2}{3} \approx$



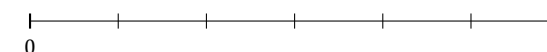
13. $\frac{6}{9} \approx$



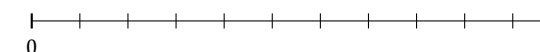
14. $\frac{5}{10} \approx$



15. $\frac{1}{6} \approx$



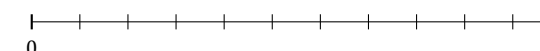
16. $\frac{7}{11} \approx$



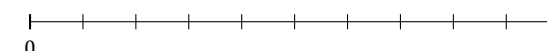
17. $\frac{1}{5} \approx$



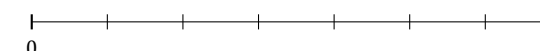
18. $\frac{10}{11} \approx$



19. $\frac{6}{10} \approx$



20. $\frac{5}{7} \approx$



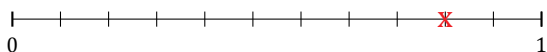
Redondear Fracciones (D) Respuestas

Nombre: _____


Fecha: _____

Redondee cada fracción hasta el entero más cercano. Redondee por exceso.

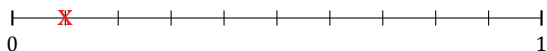
1. $\frac{9}{11} \approx 1$



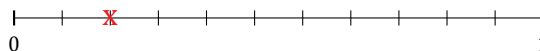
2. $\frac{2}{7} \approx 0$



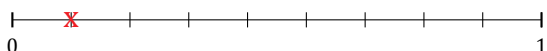
3. $\frac{1}{10} \approx 0$



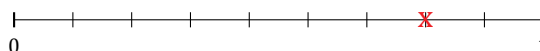
4. $\frac{2}{11} \approx 0$




5. $\frac{1}{9} \approx 0$



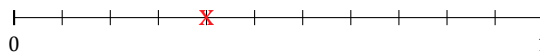
6. $\frac{7}{9} \approx 1$



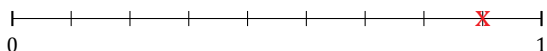
7. $\frac{3}{5} \approx 1$



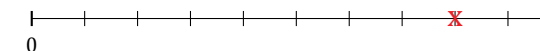
8. $\frac{4}{11} \approx 0$



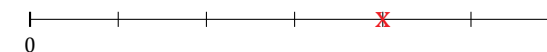
9. $\frac{8}{9} \approx 1$




10. $\frac{8}{10} \approx 1$



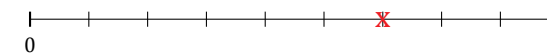
11. $\frac{4}{6} \approx 1$



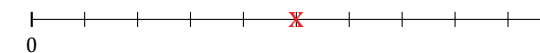
12. $\frac{2}{3} \approx 1$



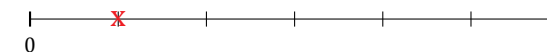
13. $\frac{6}{9} \approx 1$



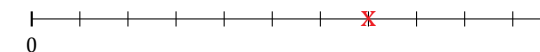
14. $\frac{5}{10} \approx 1$



15. $\frac{1}{6} \approx 0$



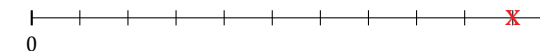
16. $\frac{7}{11} \approx 1$



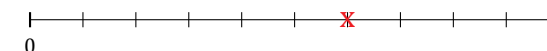
17. $\frac{1}{5} \approx 0$



18. $\frac{10}{11} \approx 1$



19. $\frac{6}{10} \approx 1$



20. $\frac{5}{7} \approx 1$

