

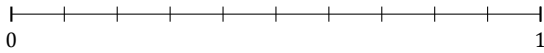
Redondear Fracciones (E)

Nombre: _____

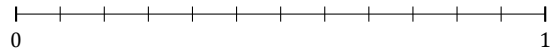
Fecha: _____

Redondee cada fracción hasta el entero más cercano. Redondee por exceso.

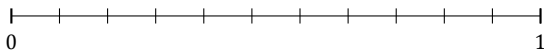
1. $\frac{4}{10} \approx$



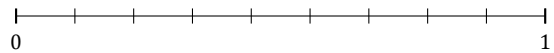
2. $\frac{4}{12} \approx$



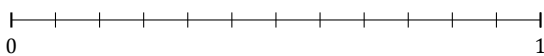
3. $\frac{9}{11} \approx$



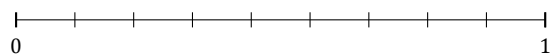
4. $\frac{3}{9} \approx$



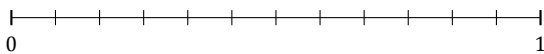
5. $\frac{5}{12} \approx$



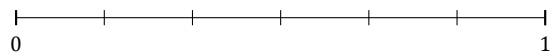
6. $\frac{1}{9} \approx$



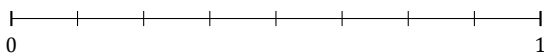
7. $\frac{6}{12} \approx$



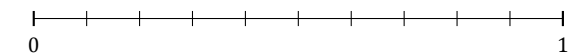
8. $\frac{3}{6} \approx$




9. $\frac{3}{8} \approx$



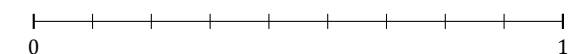
10. $\frac{9}{10} \approx$



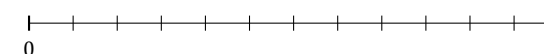
11. $\frac{1}{5} \approx$



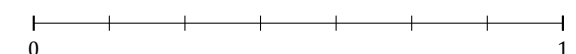
12. $\frac{6}{9} \approx$



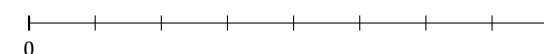
13. $\frac{3}{12} \approx$



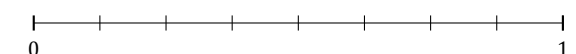
14. $\frac{6}{7} \approx$



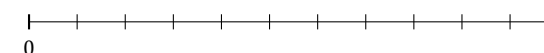
15. $\frac{2}{8} \approx$



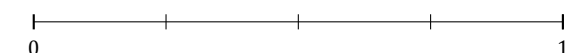
16. $\frac{7}{8} \approx$



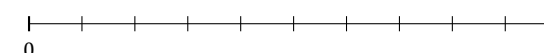
17. $\frac{6}{11} \approx$



18. $\frac{1}{4} \approx$



19. $\frac{2}{10} \approx$



20. $\frac{1}{3} \approx$



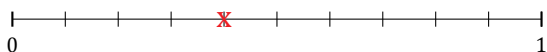
Redondear Fracciones (E) Respuestas

Nombre: _____

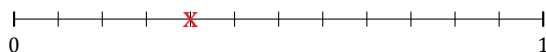
Fecha: _____

Redondee cada fracción hasta el entero más cercano. Redondee por exceso.

1. $\frac{4}{10} \approx 0$



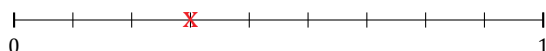
2. $\frac{4}{12} \approx 0$



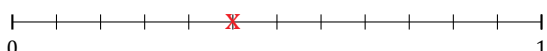
3. $\frac{9}{11} \approx 1$



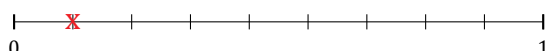
4. $\frac{3}{9} \approx 0$



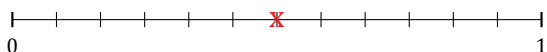
5. $\frac{5}{12} \approx 0$



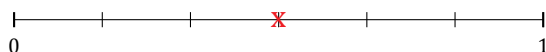
6. $\frac{1}{9} \approx 0$



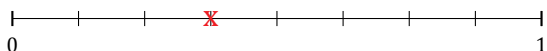
7. $\frac{6}{12} \approx 1$



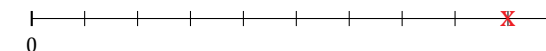
8. $\frac{3}{6} \approx 1$



9. $\frac{3}{8} \approx 0$



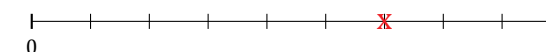
10. $\frac{9}{10} \approx 1$



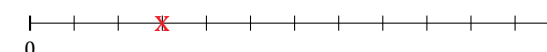
11. $\frac{1}{5} \approx 0$



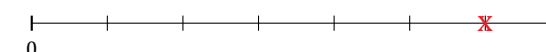
12. $\frac{6}{9} \approx 1$



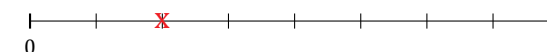
13. $\frac{3}{12} \approx 0$



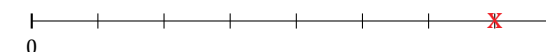
14. $\frac{6}{7} \approx 1$



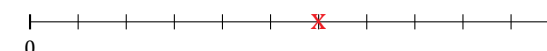
15. $\frac{2}{8} \approx 0$



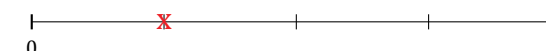
16. $\frac{7}{8} \approx 1$



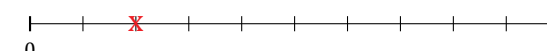
17. $\frac{6}{11} \approx 1$



18. $\frac{1}{4} \approx 0$



19. $\frac{2}{10} \approx 0$



20. $\frac{1}{3} \approx 0$

