

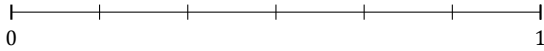
Redondear Fracciones (G)

Nombre: _____

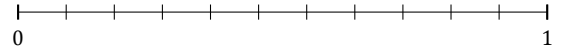
Fecha: _____

Redondee cada fracción hasta el entero más cercano. Redondee por exceso.

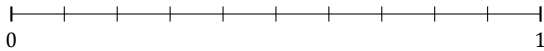
1. $\frac{4}{6} \approx$



2. $\frac{4}{11} \approx$




3. $\frac{3}{10} \approx$



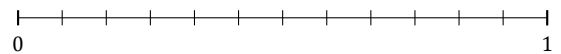
4. $\frac{1}{3} \approx$



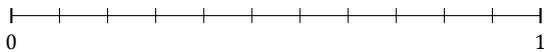
5. $\frac{3}{5} \approx$



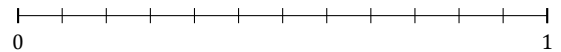
6. $\frac{11}{12} \approx$



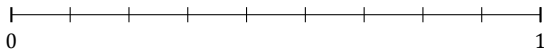
7. $\frac{6}{11} \approx$




8. $\frac{1}{12} \approx$



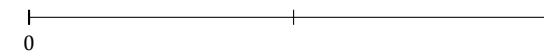
9. $\frac{5}{9} \approx$



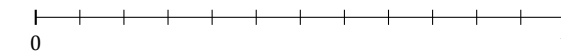
10. $\frac{2}{3} \approx$



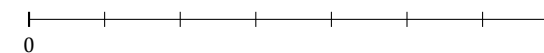
11. $\frac{1}{2} \approx$



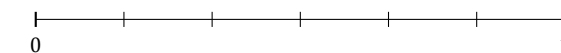
12. $\frac{8}{12} \approx$



13. $\frac{5}{7} \approx$




14. $\frac{5}{6} \approx$



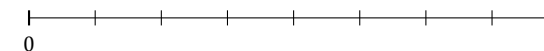
15. $\frac{4}{5} \approx$



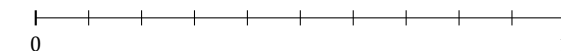
16. $\frac{1}{5} \approx$



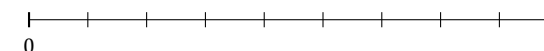
17. $\frac{2}{8} \approx$



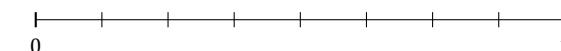
18. $\frac{4}{10} \approx$



19. $\frac{6}{9} \approx$



20. $\frac{1}{8} \approx$



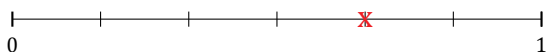
Redondear Fracciones (G) Respuestas

Nombre: _____

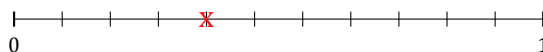
Fecha: _____

Redondee cada fracción hasta el entero más cercano. Redondee por exceso.

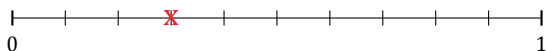
1. $\frac{4}{6} \approx 1$



2. $\frac{4}{11} \approx 0$




3. $\frac{3}{10} \approx 0$



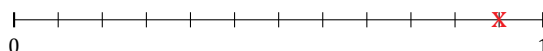
4. $\frac{1}{3} \approx 0$



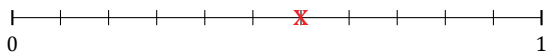
5. $\frac{3}{5} \approx 1$



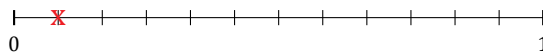
6. $\frac{11}{12} \approx 1$



7. $\frac{6}{11} \approx 1$




8. $\frac{1}{12} \approx 0$



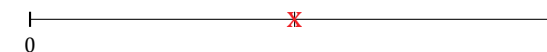
9. $\frac{5}{9} \approx 1$



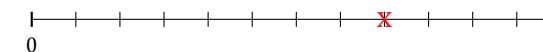
10. $\frac{2}{3} \approx 1$



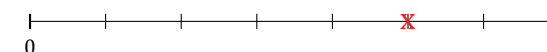
11. $\frac{1}{2} \approx 1$



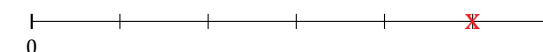
12. $\frac{8}{12} \approx 1$



13. $\frac{5}{7} \approx 1$



14. $\frac{5}{6} \approx 1$



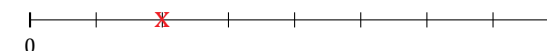
15. $\frac{4}{5} \approx 1$



16. $\frac{1}{5} \approx 0$



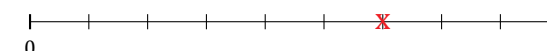
17. $\frac{2}{8} \approx 0$



18. $\frac{4}{10} \approx 0$



19. $\frac{6}{9} \approx 1$



20. $\frac{1}{8} \approx 0$

