

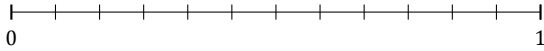
# Redondear Fracciones (H)

Nombre: \_\_\_\_\_


Fecha: \_\_\_\_\_

Redondee cada fracción hasta el entero más cercano. Redondee por exceso.

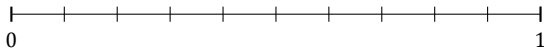
1.  $\frac{4}{12} \approx$



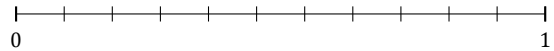
2.  $\frac{5}{7} \approx$



3.  $\frac{5}{10} \approx$



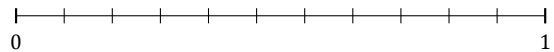
4.  $\frac{8}{11} \approx$



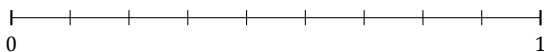
5.  $\frac{5}{6} \approx$



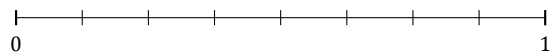
6.  $\frac{4}{11} \approx$



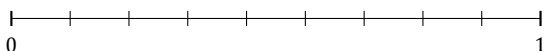
7.  $\frac{3}{9} \approx$



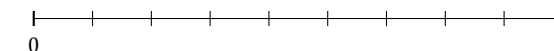
8.  $\frac{2}{8} \approx$



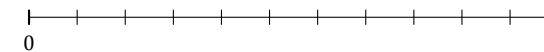
9.  $\frac{7}{9} \approx$



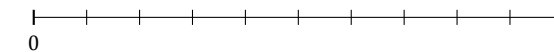
10.  $\frac{2}{9} \approx$



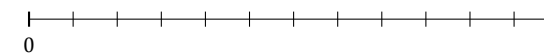
11.  $\frac{7}{11} \approx$



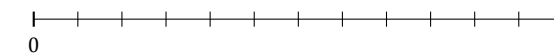
12.  $\frac{2}{10} \approx$



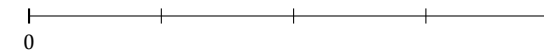
13.  $\frac{1}{12} \approx$



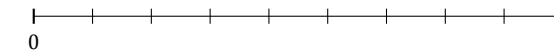
14.  $\frac{2}{12} \approx$



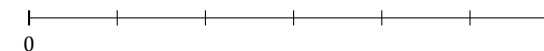
15.  $\frac{2}{4} \approx$



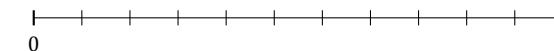
16.  $\frac{5}{9} \approx$



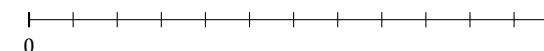
17.  $\frac{2}{6} \approx$



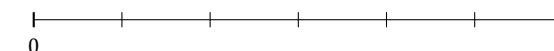
18.  $\frac{9}{11} \approx$



19.  $\frac{8}{12} \approx$



20.  $\frac{1}{6} \approx$



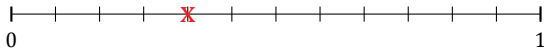
# Redondear Fracciones (H) Respuestas

Nombre: \_\_\_\_\_

Fecha: \_\_\_\_\_

Redondee cada fracción hasta el entero más cercano. Redondee por exceso.

1.  $\frac{4}{12} \approx 0$



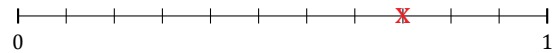
2.  $\frac{5}{7} \approx 1$



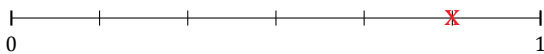
3.  $\frac{5}{10} \approx 1$



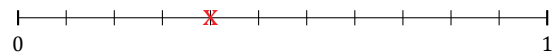
4.  $\frac{8}{11} \approx 1$



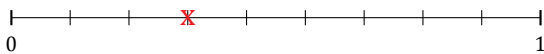
5.  $\frac{5}{6} \approx 1$



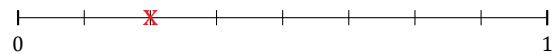
6.  $\frac{4}{11} \approx 0$



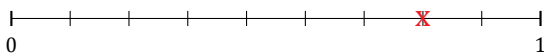
7.  $\frac{3}{9} \approx 0$



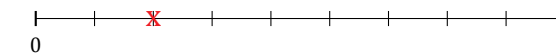
8.  $\frac{2}{8} \approx 0$



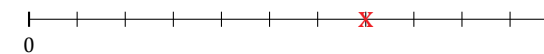
9.  $\frac{7}{9} \approx 1$



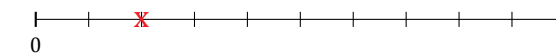
10.  $\frac{2}{9} \approx 0$



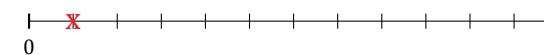
11.  $\frac{7}{11} \approx 1$



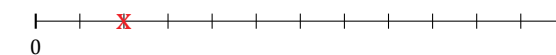
12.  $\frac{2}{10} \approx 0$



13.  $\frac{1}{12} \approx 0$



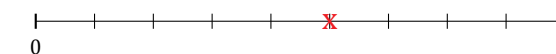
14.  $\frac{2}{12} \approx 0$



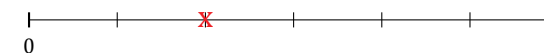
15.  $\frac{2}{4} \approx 1$



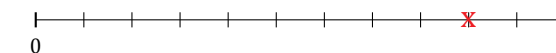
16.  $\frac{5}{9} \approx 1$



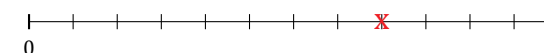
17.  $\frac{2}{6} \approx 0$



18.  $\frac{9}{11} \approx 1$



19.  $\frac{8}{12} \approx 1$



20.  $\frac{1}{6} \approx 0$

