

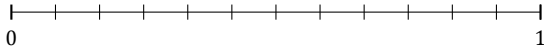
Redondear Fracciones (I)

Nombre: _____

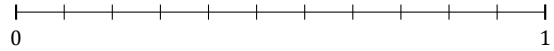
Fecha: _____

Redondee cada fracción hasta el entero más cercano. Redondee por exceso.

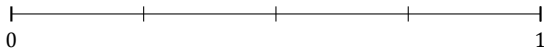
1. $\frac{2}{12} \approx$



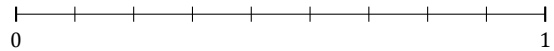
2. $\frac{10}{11} \approx$



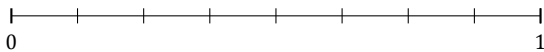
3. $\frac{3}{4} \approx$



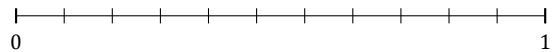
4. $\frac{5}{9} \approx$



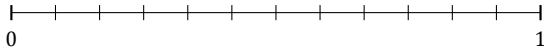
5. $\frac{1}{8} \approx$



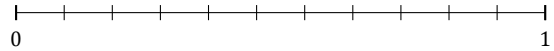
6. $\frac{9}{11} \approx$



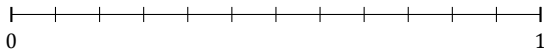
7. $\frac{3}{12} \approx$



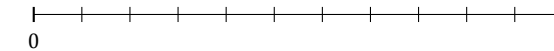
8. $\frac{1}{11} \approx$



9. $\frac{6}{12} \approx$



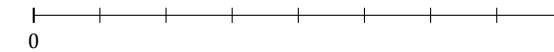
10. $\frac{2}{11} \approx$



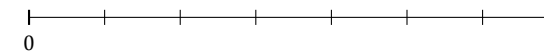
11. $\frac{3}{5} \approx$



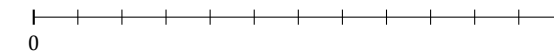
12. $\frac{7}{8} \approx$



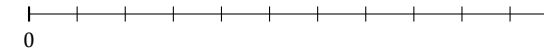
13. $\frac{5}{7} \approx$



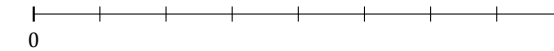
14. $\frac{9}{12} \approx$



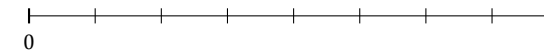
15. $\frac{6}{11} \approx$



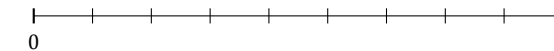
16. $\frac{2}{8} \approx$



17. $\frac{4}{8} \approx$



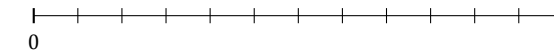
18. $\frac{1}{9} \approx$



19. $\frac{2}{5} \approx$



20. $\frac{10}{12} \approx$



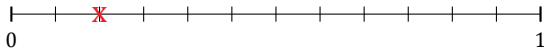
Redondear Fracciones (I) Respuestas

Nombre: _____

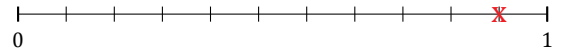
Fecha: _____

Redondee cada fracción hasta el entero más cercano. Redondee por exceso.

1. $\frac{2}{12} \approx 0$



2. $\frac{10}{11} \approx 1$



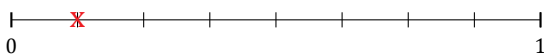
3. $\frac{3}{4} \approx 1$



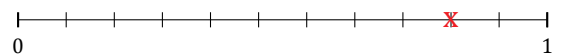
4. $\frac{5}{9} \approx 1$



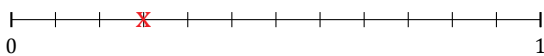
5. $\frac{1}{8} \approx 0$



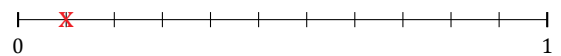
6. $\frac{9}{11} \approx 1$



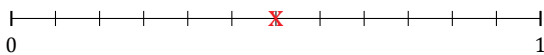
7. $\frac{3}{12} \approx 0$



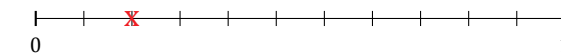
8. $\frac{1}{11} \approx 0$




9. $\frac{6}{12} \approx 1$



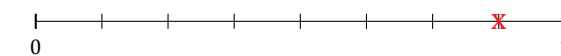
10. $\frac{2}{11} \approx 0$



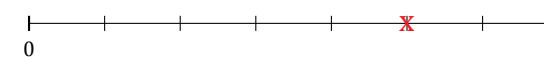
11. $\frac{3}{5} \approx 1$



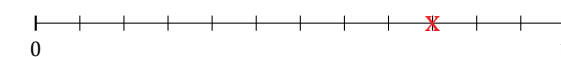
12. $\frac{7}{8} \approx 1$



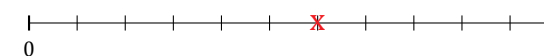
13. $\frac{5}{7} \approx 1$



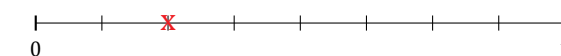
14. $\frac{9}{12} \approx 1$



15. $\frac{6}{11} \approx 1$



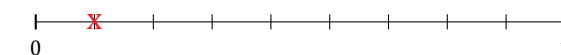
16. $\frac{2}{8} \approx 0$



17. $\frac{4}{8} \approx 1$



18. $\frac{1}{9} \approx 0$



19. $\frac{2}{5} \approx 0$



20. $\frac{10}{12} \approx 1$

