

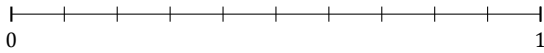
Redondear Fracciones (J)

Nombre: _____

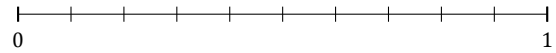
Fecha: _____

Redondee cada fracción hasta el entero más cercano. Redondee por exceso.

1. $\frac{4}{10} \approx$



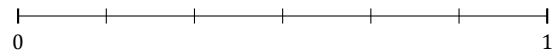
2. $\frac{6}{10} \approx$



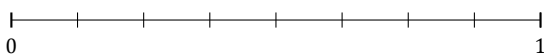
3. $\frac{3}{5} \approx$



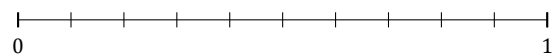
4. $\frac{1}{6} \approx$




5. $\frac{5}{8} \approx$




6. $\frac{1}{10} \approx$




7. $\frac{3}{7} \approx$



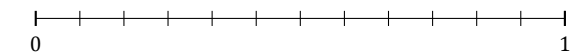
8. $\frac{2}{5} \approx$



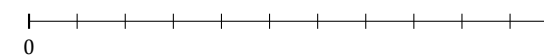
9. $\frac{4}{7} \approx$



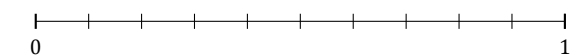
10. $\frac{7}{12} \approx$



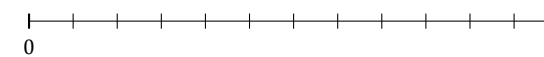
11. $\frac{7}{11} \approx$



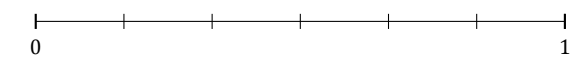
12. $\frac{7}{10} \approx$



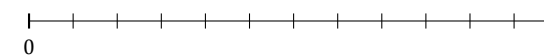
13. $\frac{4}{12} \approx$



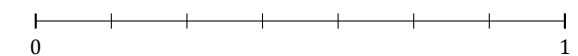
14. $\frac{5}{6} \approx$



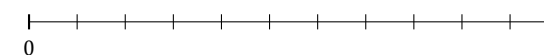
15. $\frac{3}{12} \approx$



16. $\frac{1}{7} \approx$



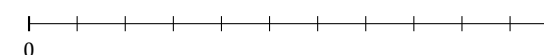
17. $\frac{6}{11} \approx$



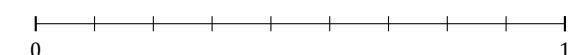
18. $\frac{4}{5} \approx$



19. $\frac{3}{11} \approx$



20. $\frac{2}{9} \approx$



Redondear Fracciones (J) Respuestas

Nombre: _____

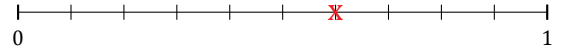
Fecha: _____

Redondee cada fracción hasta el entero más cercano. Redondee por exceso.

1. $\frac{4}{10} \approx 0$



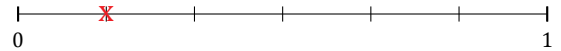
2. $\frac{6}{10} \approx 1$



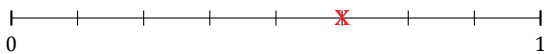
3. $\frac{3}{5} \approx 1$



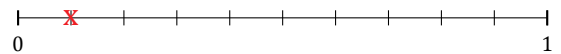
4. $\frac{1}{6} \approx 0$



5. $\frac{5}{8} \approx 1$



6. $\frac{1}{10} \approx 0$




7. $\frac{3}{7} \approx 0$



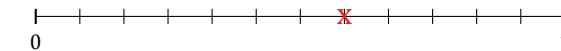
8. $\frac{2}{5} \approx 0$



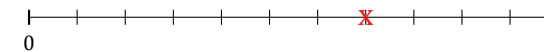
9. $\frac{4}{7} \approx 1$



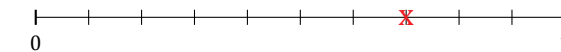
10. $\frac{7}{12} \approx 1$



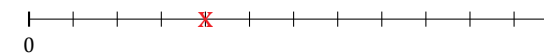
11. $\frac{7}{11} \approx 1$



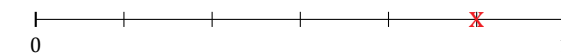
12. $\frac{7}{10} \approx 1$



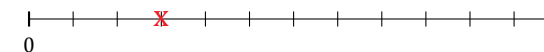
13. $\frac{4}{12} \approx 0$



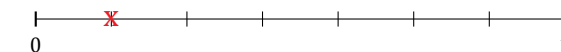
14. $\frac{5}{6} \approx 1$



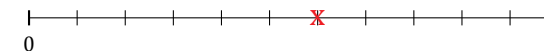
15. $\frac{3}{12} \approx 0$



16. $\frac{1}{7} \approx 0$



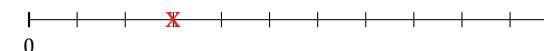
17. $\frac{6}{11} \approx 1$



18. $\frac{4}{5} \approx 1$



19. $\frac{3}{11} \approx 0$



20. $\frac{2}{9} \approx 0$

