

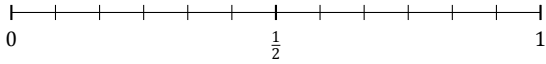
# Redondear Fracciones (C)

Nombre: \_\_\_\_\_

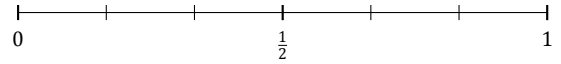
Fecha: \_\_\_\_\_

Redondee cada fracción hasta la mitad más cercana. Redondee por exceso.

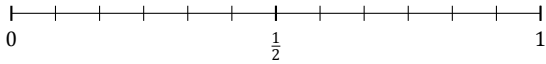
1.  $\frac{6}{12} \approx$



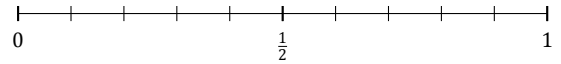
2.  $\frac{4}{6} \approx$



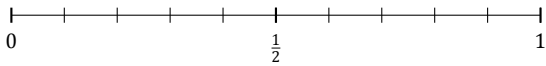
3.  $\frac{2}{12} \approx$



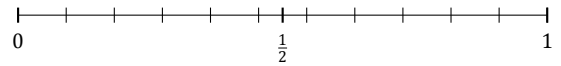
4.  $\frac{5}{10} \approx$



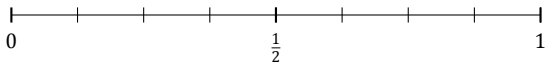
5.  $\frac{4}{10} \approx$



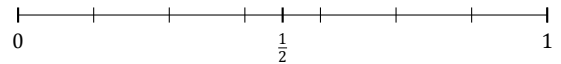
6.  $\frac{6}{11} \approx$



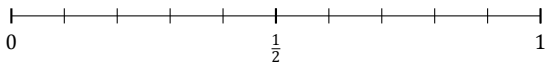
7.  $\frac{7}{8} \approx$



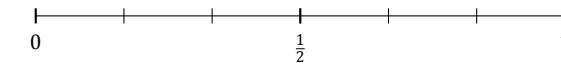
8.  $\frac{6}{7} \approx$



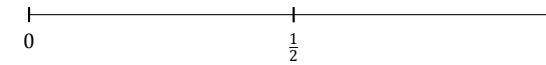
9.  $\frac{6}{10} \approx$



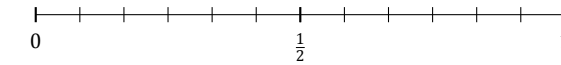
10.  $\frac{3}{6} \approx$



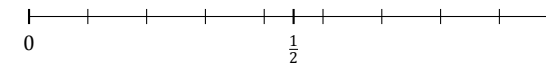
11.  $\frac{1}{2} \approx$



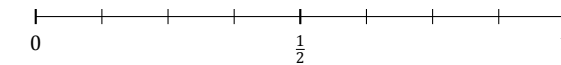
12.  $\frac{9}{12} \approx$



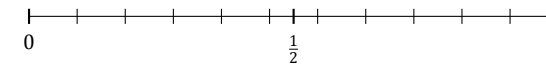
13.  $\frac{7}{9} \approx$



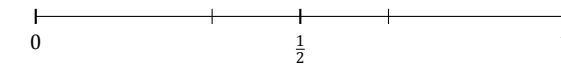
14.  $\frac{1}{8} \approx$



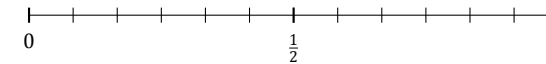
15.  $\frac{8}{11} \approx$



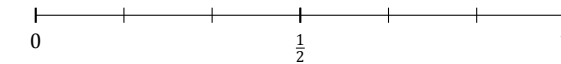
16.  $\frac{1}{3} \approx$



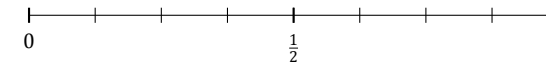
17.  $\frac{3}{12} \approx$



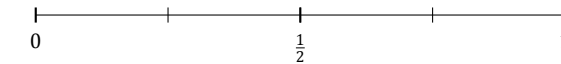
18.  $\frac{1}{6} \approx$



19.  $\frac{5}{8} \approx$



20.  $\frac{3}{4} \approx$



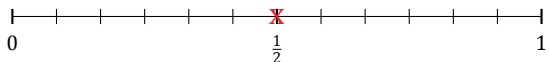
# Redondear Fracciones (C) Respuestas

Nombre: \_\_\_\_\_

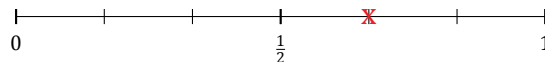
Fecha: \_\_\_\_\_

Redondee cada fracción hasta la mitad más cercana. Redondee por exceso.

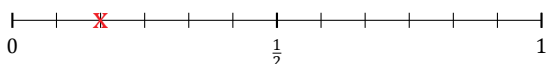
1.  $\frac{6}{12} \approx \frac{1}{2}$



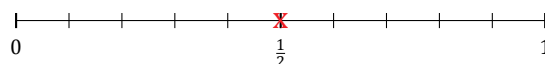
2.  $\frac{4}{6} \approx \frac{1}{2}$



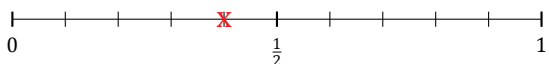
3.  $\frac{2}{12} \approx 0$



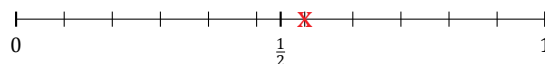
4.  $\frac{5}{10} \approx \frac{1}{2}$



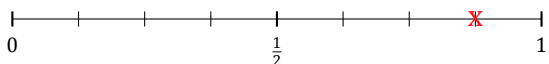
5.  $\frac{4}{10} \approx \frac{1}{2}$



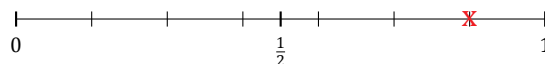
6.  $\frac{6}{11} \approx \frac{1}{2}$



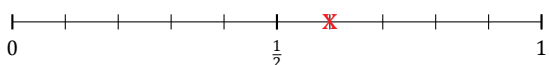
7.  $\frac{7}{8} \approx 1$



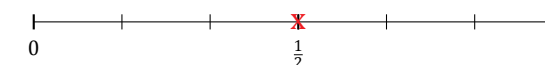
8.  $\frac{6}{7} \approx 1$



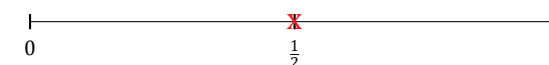
9.  $\frac{6}{10} \approx \frac{1}{2}$



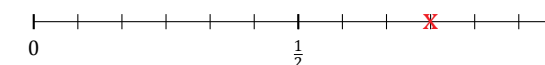
10.  $\frac{3}{6} \approx \frac{1}{2}$



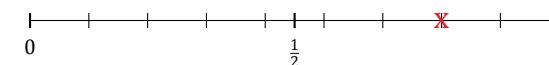
11.  $\frac{1}{2} \approx \frac{1}{2}$



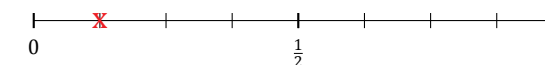
12.  $\frac{9}{12} \approx 1$



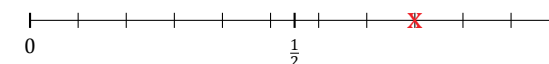
13.  $\frac{7}{9} \approx 1$



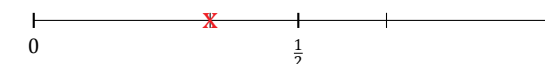
14.  $\frac{1}{8} \approx 0$



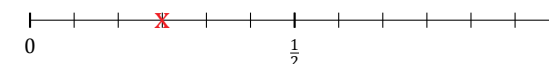
15.  $\frac{8}{11} \approx \frac{1}{2}$



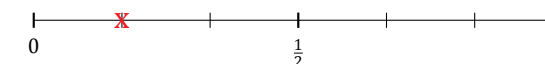
16.  $\frac{1}{3} \approx \frac{1}{2}$



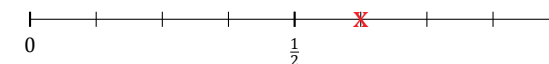
17.  $\frac{3}{12} \approx \frac{1}{2}$



18.  $\frac{1}{6} \approx 0$



19.  $\frac{5}{8} \approx \frac{1}{2}$



20.  $\frac{3}{4} \approx 1$

