

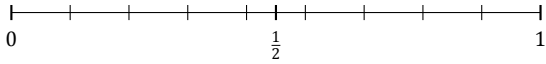
Redondear Fracciones (I)

Nombre: _____

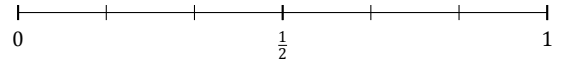
Fecha: _____

Redondee cada fracción hasta la mitad más cercana. Redondee por exceso.

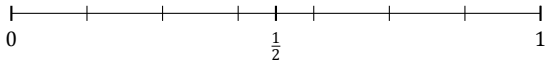
1. $\frac{2}{9} \approx$



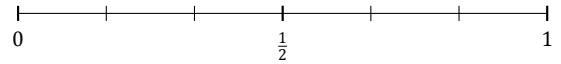
2. $\frac{2}{6} \approx$



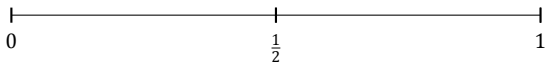
3. $\frac{4}{7} \approx$



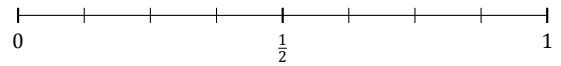
4. $\frac{3}{6} \approx$



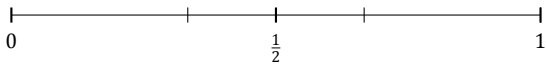
5. $\frac{1}{2} \approx$



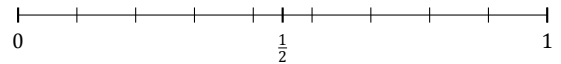
6. $\frac{5}{8} \approx$



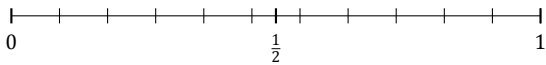
7. $\frac{1}{3} \approx$



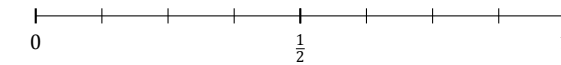
8. $\frac{6}{9} \approx$



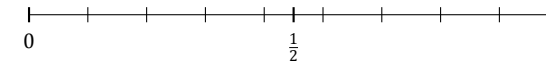
9. $\frac{2}{11} \approx$



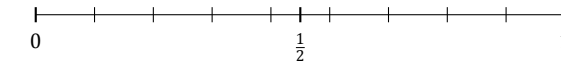
10. $\frac{1}{8} \approx$



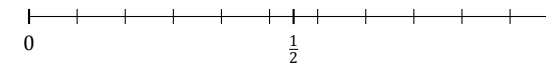
11. $\frac{4}{9} \approx$



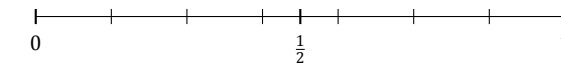
12. $\frac{3}{9} \approx$



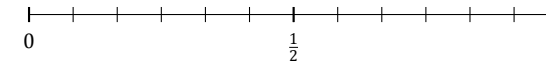
13. $\frac{8}{11} \approx$



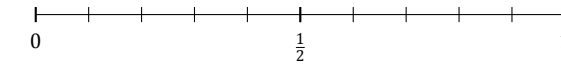
14. $\frac{2}{7} \approx$



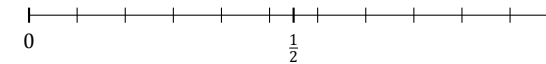
15. $\frac{5}{12} \approx$



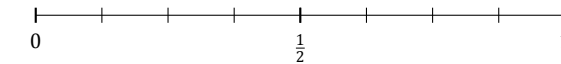
16. $\frac{5}{10} \approx$



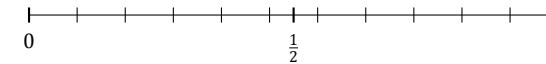
17. $\frac{7}{11} \approx$



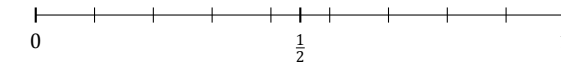
18. $\frac{2}{8} \approx$



19. $\frac{10}{11} \approx$



20. $\frac{7}{9} \approx$



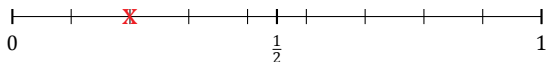
Redondear Fracciones (I) Respuestas

Nombre: _____

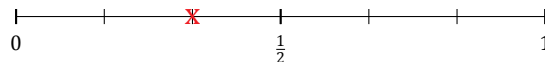
Fecha: _____

Redondee cada fracción hasta la mitad más cercana. Redondee por exceso.

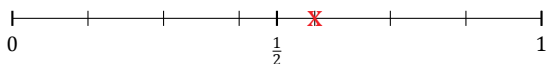
1. $\frac{2}{9} \simeq 0$



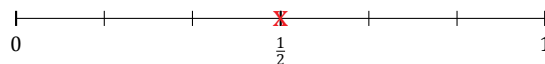
2. $\frac{2}{6} \simeq \frac{1}{2}$



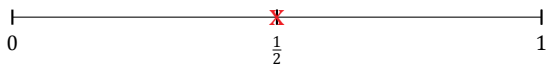
3. $\frac{4}{7} \simeq \frac{1}{2}$



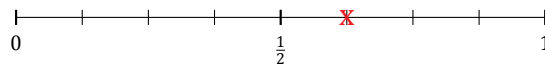
4. $\frac{3}{6} \simeq \frac{1}{2}$



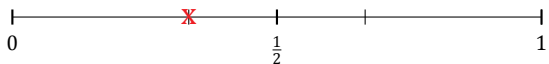
5. $\frac{1}{2} \simeq \frac{1}{2}$



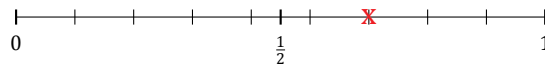
6. $\frac{5}{8} \simeq \frac{1}{2}$



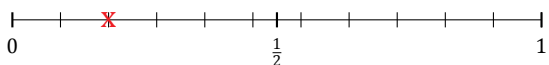
7. $\frac{1}{3} \simeq \frac{1}{2}$



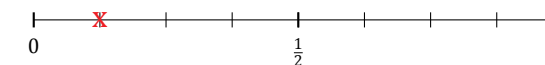
8. $\frac{6}{9} \simeq \frac{1}{2}$



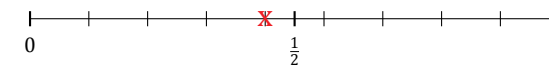
9. $\frac{2}{11} \simeq 0$



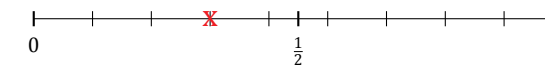
10. $\frac{1}{8} \simeq 0$



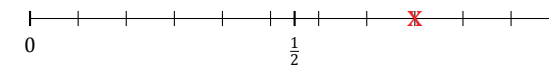
11. $\frac{4}{9} \simeq \frac{1}{2}$



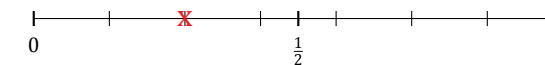
12. $\frac{3}{9} \simeq \frac{1}{2}$



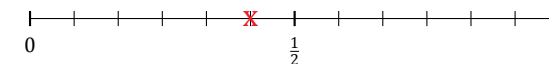
13. $\frac{8}{11} \simeq \frac{1}{2}$



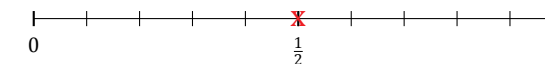
14. $\frac{2}{7} \simeq \frac{1}{2}$



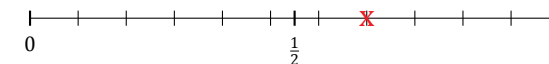
15. $\frac{5}{12} \simeq \frac{1}{2}$



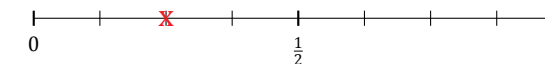
16. $\frac{5}{10} \simeq \frac{1}{2}$



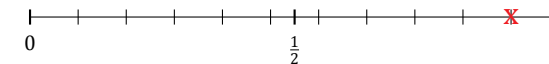
17. $\frac{7}{11} \simeq \frac{1}{2}$



18. $\frac{2}{8} \simeq \frac{1}{2}$



19. $\frac{10}{11} \simeq 1$



20. $\frac{7}{9} \simeq 1$

