

# Redondear Números Mixtos (A)

Nombre: \_\_\_\_\_

Fecha: \_\_\_\_\_

Redondee cada número mixto hasta el entero más cercano. Redondee por exceso.

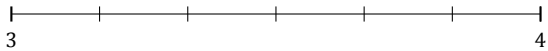
1.  $1\frac{4}{5} \approx$



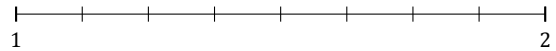
2.  $2\frac{1}{9} \approx$




3.  $3\frac{3}{6} \approx$



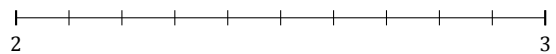
4.  $1\frac{6}{8} \approx$



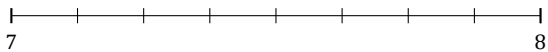
5.  $6\frac{2}{3} \approx$



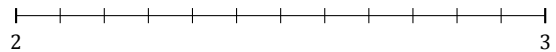
6.  $2\frac{7}{10} \approx$




7.  $7\frac{1}{8} \approx$




8.  $2\frac{6}{12} \approx$



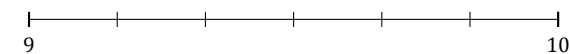
9.  $2\frac{2}{7} \approx$



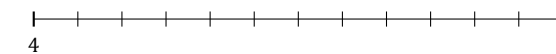
10.  $4\frac{1}{5} \approx$



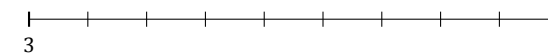
11.  $9\frac{2}{6} \approx$



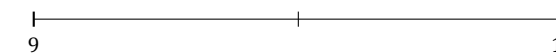
12.  $4\frac{11}{12} \approx$



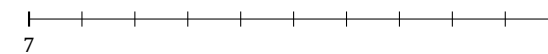
13.  $3\frac{8}{9} \approx$



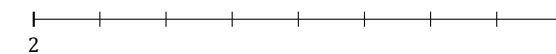
14.  $9\frac{1}{2} \approx$



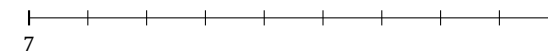
15.  $7\frac{3}{10} \approx$



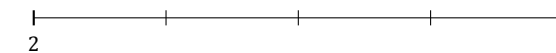
16.  $2\frac{5}{8} \approx$



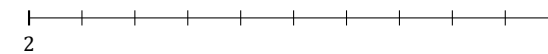
17.  $7\frac{4}{9} \approx$



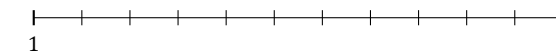
18.  $2\frac{3}{4} \approx$



19.  $2\frac{5}{10} \approx$



20.  $1\frac{4}{11} \approx$



# Redondear Números Mixtos (A) Respuestas

Nombre: \_\_\_\_\_

Fecha: \_\_\_\_\_

Redondee cada número mixto hasta el entero más cercano. Redondee por exceso.

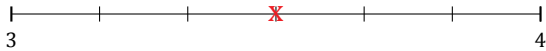
1.  $1\frac{4}{5} \simeq 2$



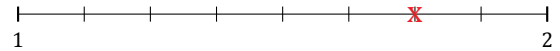
2.  $2\frac{1}{9} \simeq 2$




3.  $3\frac{3}{6} \simeq 4$



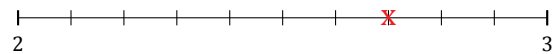
4.  $1\frac{6}{8} \simeq 2$



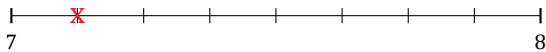
5.  $6\frac{2}{3} \simeq 7$



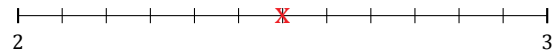
6.  $2\frac{7}{10} \simeq 3$




7.  $7\frac{1}{8} \simeq 7$




8.  $2\frac{6}{12} \simeq 3$



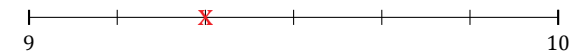
9.  $2\frac{2}{7} \simeq 2$



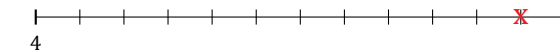
10.  $4\frac{1}{5} \simeq 4$



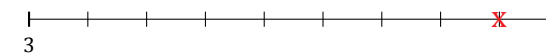
11.  $9\frac{2}{6} \simeq 9$



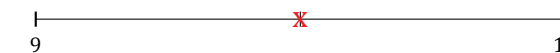
12.  $4\frac{11}{12} \simeq 5$



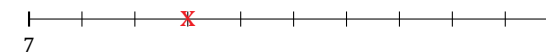
13.  $3\frac{8}{9} \simeq 4$



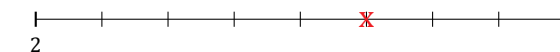
14.  $9\frac{1}{2} \simeq 10$



15.  $7\frac{3}{10} \simeq 7$



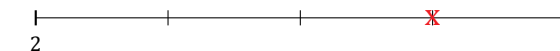
16.  $2\frac{5}{8} \simeq 3$



17.  $7\frac{4}{9} \simeq 7$



18.  $2\frac{3}{4} \simeq 3$



19.  $2\frac{5}{10} \simeq 3$



20.  $1\frac{4}{11} \simeq 1$

