


Redondear Números Mixtos (B)

Nombre: _____

Fecha: _____

Redondee cada número mixto hasta el entero más cercano. Redondee por exceso.

1. $7\frac{5}{9} \approx$



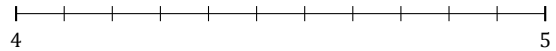
2. $4\frac{3}{7} \approx$



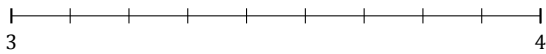
3. $5\frac{1}{9} \approx$



4. $4\frac{7}{11} \approx$



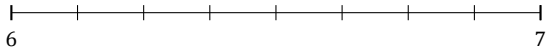
5. $3\frac{3}{9} \approx$



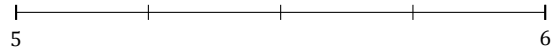
6. $6\frac{1}{7} \approx$




7. $6\frac{6}{8} \approx$



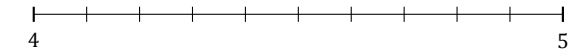
8. $5\frac{3}{4} \approx$



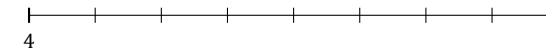
9. $8\frac{4}{7} \approx$



10. $4\frac{2}{10} \approx$



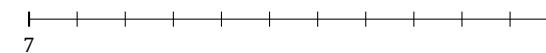
11. $4\frac{5}{8} \approx$



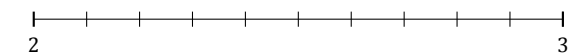
12. $2\frac{1}{5} \approx$



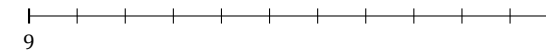
13. $7\frac{2}{11} \approx$



14. $2\frac{4}{10} \approx$



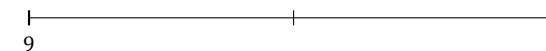
15. $9\frac{8}{11} \approx$



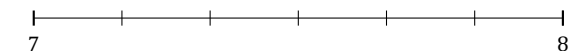
16. $6\frac{1}{3} \approx$



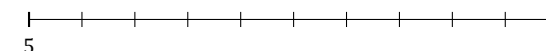
17. $9\frac{1}{2} \approx$



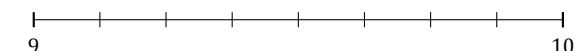
18. $7\frac{5}{6} \approx$



19. $5\frac{6}{10} \approx$



20. $9\frac{3}{8} \approx$



Redondear Números Mixtos (B) Respuestas

Nombre: _____

Fecha: _____

Redondee cada número mixto hasta el entero más cercano. Redondee por exceso.

1. $7\frac{5}{9} \simeq 8$



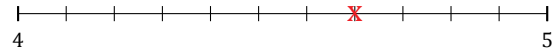
2. $4\frac{3}{7} \simeq 4$



3. $5\frac{1}{9} \simeq 5$



4. $4\frac{7}{11} \simeq 5$



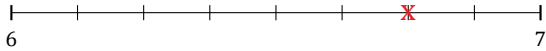
5. $3\frac{3}{9} \simeq 3$



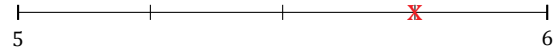
6. $6\frac{1}{7} \simeq 6$




7. $6\frac{6}{8} \simeq 7$



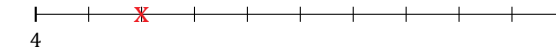
8. $5\frac{3}{4} \simeq 6$



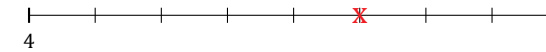
9. $8\frac{4}{7} \simeq 9$



10. $4\frac{2}{10} \simeq 4$



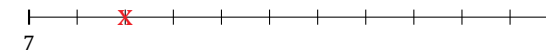
11. $4\frac{5}{8} \simeq 5$



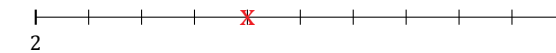
12. $2\frac{1}{5} \simeq 2$



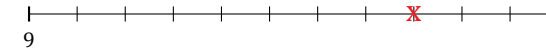
13. $7\frac{2}{11} \simeq 7$



14. $2\frac{4}{10} \simeq 2$



15. $9\frac{8}{11} \simeq 10$



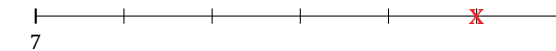
16. $6\frac{1}{3} \simeq 6$



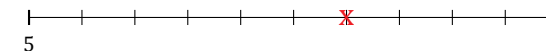
17. $9\frac{1}{2} \simeq 10$



18. $7\frac{5}{6} \simeq 8$



19. $5\frac{6}{10} \simeq 6$



20. $9\frac{3}{8} \simeq 9$

