

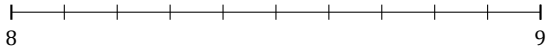
Redondear Números Mixtos (D)

Nombre: _____


Fecha: _____

Redondee cada número mixto hasta el entero más cercano. Redondee por exceso.

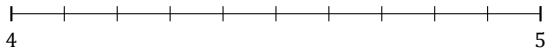
1. $8\frac{1}{10} \approx$



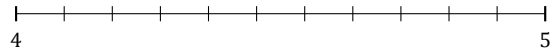
2. $1\frac{5}{7} \approx$



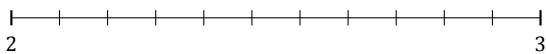
3. $4\frac{4}{10} \approx$




4. $4\frac{9}{11} \approx$



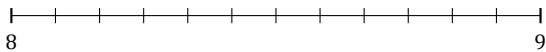
5. $2\frac{10}{11} \approx$




6. $7\frac{1}{7} \approx$




7. $8\frac{4}{12} \approx$



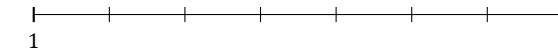
8. $5\frac{1}{9} \approx$



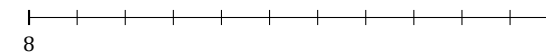
9. $6\frac{4}{5} \approx$



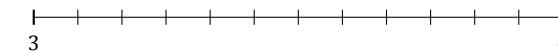
10. $1\frac{4}{7} \approx$



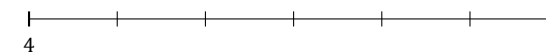
11. $8\frac{5}{11} \approx$



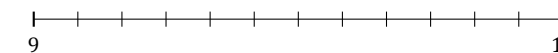
12. $3\frac{7}{12} \approx$



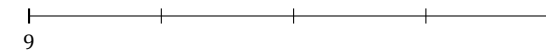
13. $4\frac{1}{6} \approx$



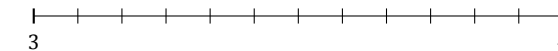
14. $9\frac{3}{12} \approx$



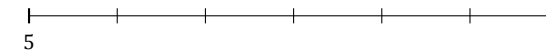
15. $9\frac{2}{4} \approx$



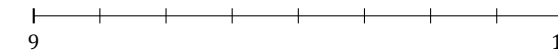
16. $3\frac{2}{12} \approx$



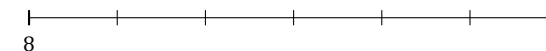
17. $5\frac{5}{6} \approx$



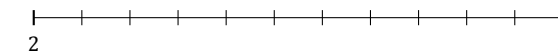
18. $9\frac{7}{8} \approx$



19. $8\frac{3}{6} \approx$



20. $2\frac{3}{11} \approx$



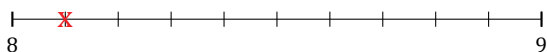
Redondear Números Mixtos (D) Respuestas

Nombre: _____


Fecha: _____

Redondee cada número mixto hasta el entero más cercano. Redondee por exceso.

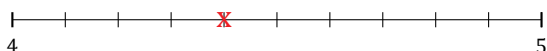
1. $8\frac{1}{10} \simeq 8$



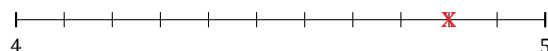
2. $1\frac{5}{7} \simeq 2$



3. $4\frac{4}{10} \simeq 4$



4. $4\frac{9}{11} \simeq 5$



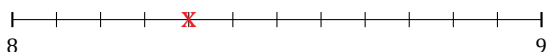
5. $2\frac{10}{11} \simeq 3$



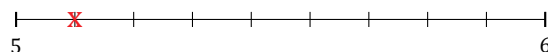
6. $7\frac{1}{7} \simeq 7$




7. $8\frac{4}{12} \simeq 8$



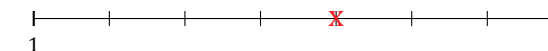
8. $5\frac{1}{9} \simeq 5$



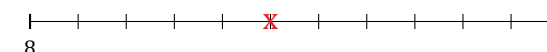
9. $6\frac{4}{5} \simeq 7$



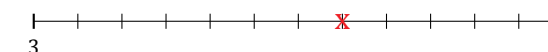
10. $1\frac{4}{7} \simeq 2$



11. $8\frac{5}{11} \simeq 8$



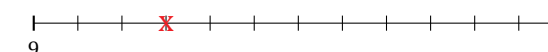
12. $3\frac{7}{12} \simeq 4$



13. $4\frac{1}{6} \simeq 4$



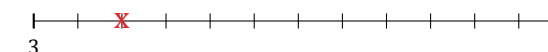
14. $9\frac{3}{12} \simeq 9$



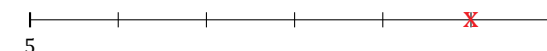
15. $9\frac{2}{4} \simeq 10$



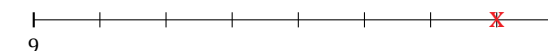
16. $3\frac{2}{12} \simeq 3$



17. $5\frac{5}{6} \simeq 6$



18. $9\frac{7}{8} \simeq 10$



19. $8\frac{3}{6} \simeq 9$



20. $2\frac{3}{11} \simeq 2$

