

# Redondear Números Mixtos (A)

Nombre: \_\_\_\_\_

Fecha: \_\_\_\_\_

Redondee cada número mixto hasta el entero más cercano. Redondee por exceso.

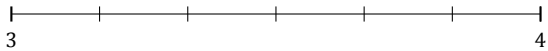
1.  $1\frac{4}{5} \approx$



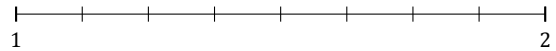
2.  $2\frac{1}{9} \approx$



3.  $3\frac{3}{6} \approx$



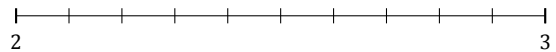
4.  $1\frac{6}{8} \approx$



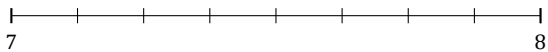
5.  $6\frac{2}{3} \approx$



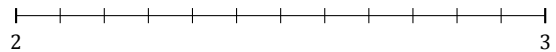
6.  $2\frac{7}{10} \approx$




7.  $7\frac{1}{8} \approx$




8.  $2\frac{6}{12} \approx$



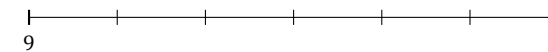
9.  $2\frac{2}{7} \approx$



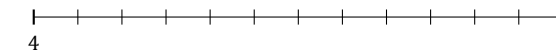
10.  $4\frac{1}{5} \approx$



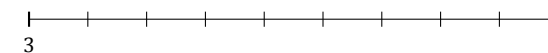
11.  $9\frac{2}{6} \approx$



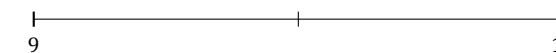
12.  $4\frac{11}{12} \approx$



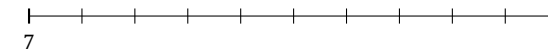
13.  $3\frac{8}{9} \approx$



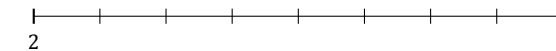
14.  $9\frac{1}{2} \approx$



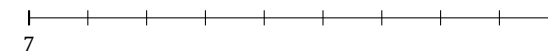
15.  $7\frac{3}{10} \approx$



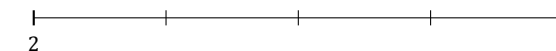
16.  $2\frac{5}{8} \approx$



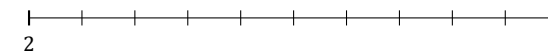
17.  $7\frac{4}{9} \approx$



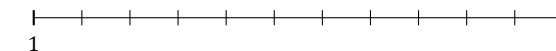
18.  $2\frac{3}{4} \approx$



19.  $2\frac{5}{10} \approx$



20.  $1\frac{4}{11} \approx$



# Redondear Números Mixtos (A) Respuestas

Nombre: \_\_\_\_\_

Fecha: \_\_\_\_\_

Redondee cada número mixto hasta el entero más cercano. Redondee por exceso.

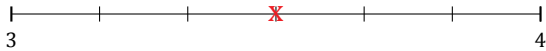
1.  $1\frac{4}{5} \simeq 2$



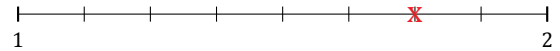
2.  $2\frac{1}{9} \simeq 2$




3.  $3\frac{3}{6} \simeq 4$



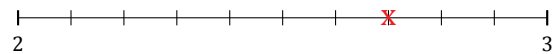
4.  $1\frac{6}{8} \simeq 2$



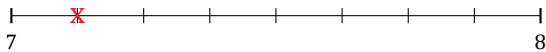
5.  $6\frac{2}{3} \simeq 7$



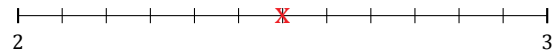
6.  $2\frac{7}{10} \simeq 3$




7.  $7\frac{1}{8} \simeq 7$




8.  $2\frac{6}{12} \simeq 3$



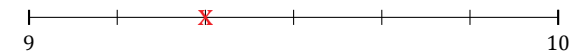
9.  $2\frac{2}{7} \simeq 2$



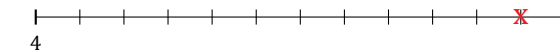
10.  $4\frac{1}{5} \simeq 4$



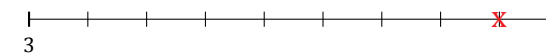
11.  $9\frac{2}{6} \simeq 9$



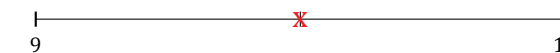
12.  $4\frac{11}{12} \simeq 5$



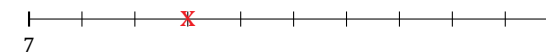
13.  $3\frac{8}{9} \simeq 4$



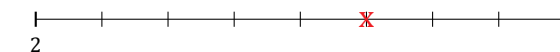
14.  $9\frac{1}{2} \simeq 10$



15.  $7\frac{3}{10} \simeq 7$



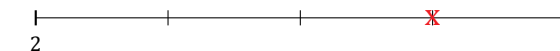
16.  $2\frac{5}{8} \simeq 3$



17.  $7\frac{4}{9} \simeq 7$



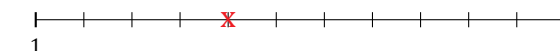
18.  $2\frac{3}{4} \simeq 3$



19.  $2\frac{5}{10} \simeq 3$



20.  $1\frac{4}{11} \simeq 1$




# Redondear Números Mixtos (B)

Nombre: \_\_\_\_\_

Fecha: \_\_\_\_\_

Redondee cada número mixto hasta el entero más cercano. Redondee por exceso.

1.  $7\frac{5}{9} \approx$



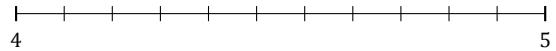
2.  $4\frac{3}{7} \approx$



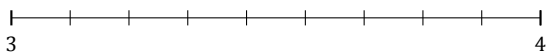
3.  $5\frac{1}{9} \approx$




4.  $4\frac{7}{11} \approx$



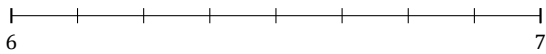
5.  $3\frac{3}{9} \approx$



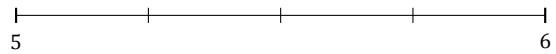
6.  $6\frac{1}{7} \approx$




7.  $6\frac{6}{8} \approx$



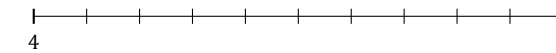
8.  $5\frac{3}{4} \approx$



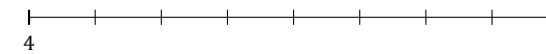
9.  $8\frac{4}{7} \approx$




10.  $4\frac{2}{10} \approx$



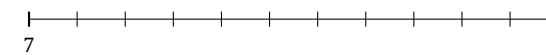
11.  $4\frac{5}{8} \approx$



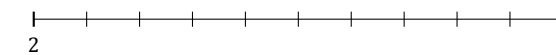
12.  $2\frac{1}{5} \approx$



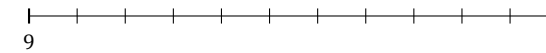
13.  $7\frac{2}{11} \approx$



14.  $2\frac{4}{10} \approx$



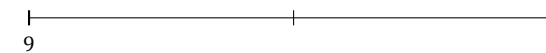
15.  $9\frac{8}{11} \approx$



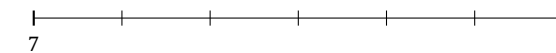
16.  $6\frac{1}{3} \approx$



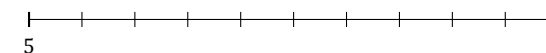
17.  $9\frac{1}{2} \approx$



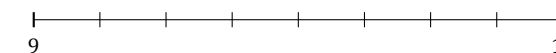
18.  $7\frac{5}{6} \approx$



19.  $5\frac{6}{10} \approx$



20.  $9\frac{3}{8} \approx$



# Redondear Números Mixtos (B) Respuestas

Nombre: \_\_\_\_\_


Fecha: \_\_\_\_\_

Redondee cada número mixto hasta el entero más cercano. Redondee por exceso.

1.  $7\frac{5}{9} \simeq 8$



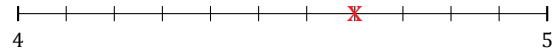
2.  $4\frac{3}{7} \simeq 4$



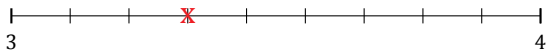
3.  $5\frac{1}{9} \simeq 5$



4.  $4\frac{7}{11} \simeq 5$



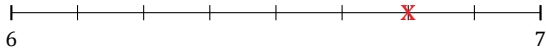
5.  $3\frac{3}{9} \simeq 3$



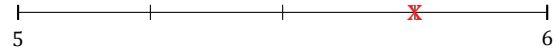
6.  $6\frac{1}{7} \simeq 6$




7.  $6\frac{6}{8} \simeq 7$



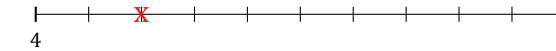
8.  $5\frac{3}{4} \simeq 6$



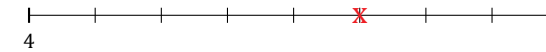
9.  $8\frac{4}{7} \simeq 9$



10.  $4\frac{2}{10} \simeq 4$



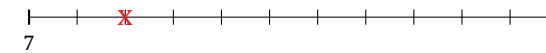
11.  $4\frac{5}{8} \simeq 5$



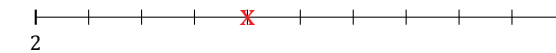
12.  $2\frac{1}{5} \simeq 2$



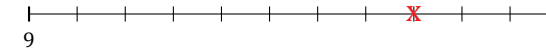
13.  $7\frac{2}{11} \simeq 7$



14.  $2\frac{4}{10} \simeq 2$



15.  $9\frac{8}{11} \simeq 10$



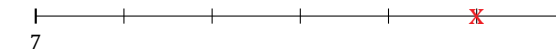
16.  $6\frac{1}{3} \simeq 6$



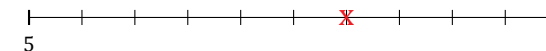
17.  $9\frac{1}{2} \simeq 10$



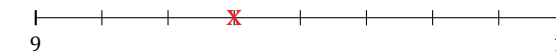
18.  $7\frac{5}{6} \simeq 8$



19.  $5\frac{6}{10} \simeq 6$



20.  $9\frac{3}{8} \simeq 9$



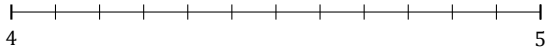
# Redondear Números Mixtos (C)

Nombre: \_\_\_\_\_

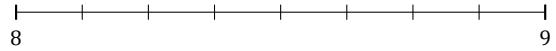
Fecha: \_\_\_\_\_

Redondee cada número mixto hasta el entero más cercano. Redondee por exceso.

1.  $4\frac{5}{12} \approx$



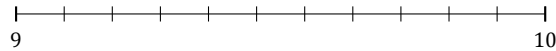
2.  $8\frac{6}{8} \approx$




3.  $1\frac{6}{9} \approx$



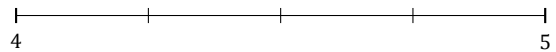
4.  $9\frac{6}{11} \approx$



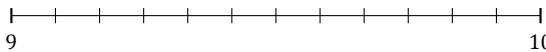
5.  $5\frac{3}{7} \approx$



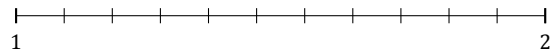
6.  $4\frac{1}{4} \approx$



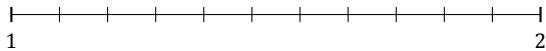
7.  $9\frac{9}{12} \approx$



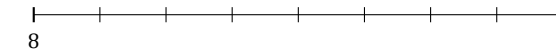
8.  $1\frac{2}{11} \approx$



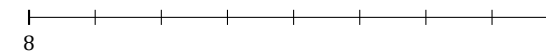
9.  $1\frac{1}{11} \approx$



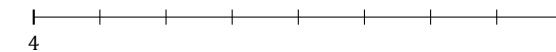
10.  $8\frac{5}{8} \approx$



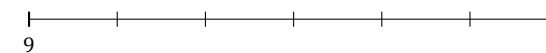
11.  $8\frac{2}{8} \approx$



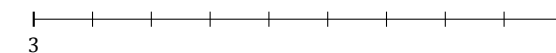
12.  $4\frac{3}{8} \approx$




13.  $9\frac{4}{6} \approx$



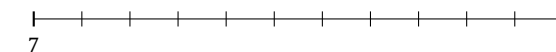
14.  $3\frac{2}{9} \approx$



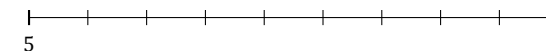
15.  $6\frac{1}{3} \approx$



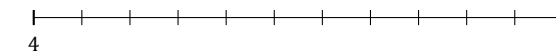
16.  $7\frac{7}{11} \approx$



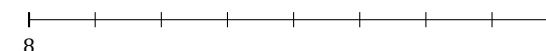
17.  $5\frac{7}{9} \approx$



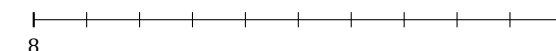
18.  $4\frac{9}{11} \approx$



19.  $8\frac{4}{8} \approx$



20.  $8\frac{1}{10} \approx$



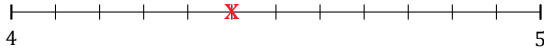
# Redondear Números Mixtos (C) Respuestas

Nombre: \_\_\_\_\_

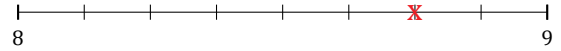
Fecha: \_\_\_\_\_

Redondee cada número mixto hasta el entero más cercano. Redondee por exceso.

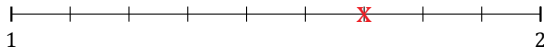
1.  $4\frac{5}{12} \simeq 4$



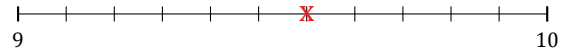
2.  $8\frac{6}{8} \simeq 9$



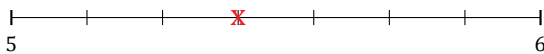
3.  $1\frac{6}{9} \simeq 2$



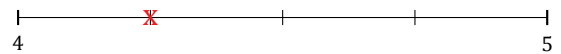
4.  $9\frac{6}{11} \simeq 10$



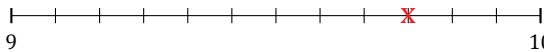
5.  $5\frac{3}{7} \simeq 5$



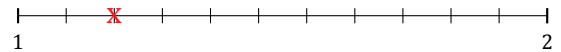
6.  $4\frac{1}{4} \simeq 4$



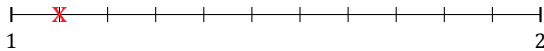
7.  $9\frac{9}{12} \simeq 10$



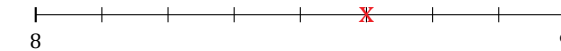
8.  $1\frac{2}{11} \simeq 1$



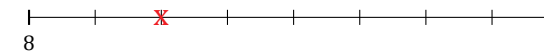
9.  $1\frac{1}{11} \simeq 1$



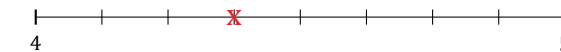
10.  $8\frac{5}{8} \simeq 9$



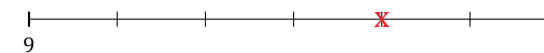
11.  $8\frac{2}{8} \simeq 8$



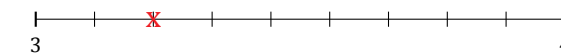
12.  $4\frac{3}{8} \simeq 4$




13.  $9\frac{4}{6} \simeq 10$



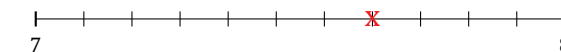
14.  $3\frac{2}{9} \simeq 3$



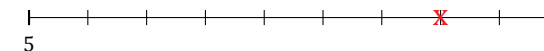
15.  $6\frac{1}{3} \simeq 6$



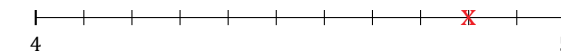
16.  $7\frac{7}{11} \simeq 8$



17.  $5\frac{7}{9} \simeq 6$



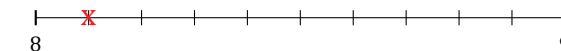
18.  $4\frac{9}{11} \simeq 5$



19.  $8\frac{4}{8} \simeq 9$



20.  $8\frac{1}{10} \simeq 8$



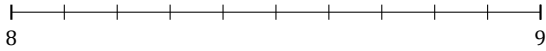
# Redondear Números Mixtos (D)

Nombre: \_\_\_\_\_


Fecha: \_\_\_\_\_

Redondee cada número mixto hasta el entero más cercano. Redondee por exceso.

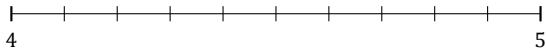
1.  $8\frac{1}{10} \approx$



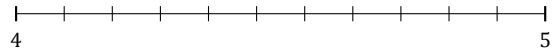
2.  $1\frac{5}{7} \approx$



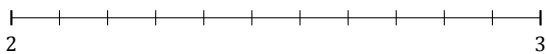
3.  $4\frac{4}{10} \approx$




4.  $4\frac{9}{11} \approx$



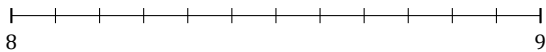
5.  $2\frac{10}{11} \approx$




6.  $7\frac{1}{7} \approx$




7.  $8\frac{4}{12} \approx$



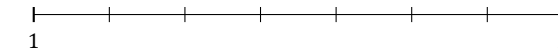
8.  $5\frac{1}{9} \approx$



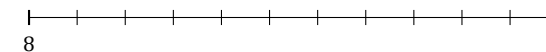
9.  $6\frac{4}{5} \approx$



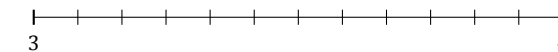
10.  $1\frac{4}{7} \approx$



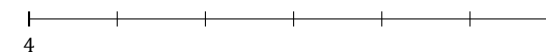
11.  $8\frac{5}{11} \approx$



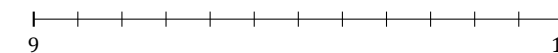
12.  $3\frac{7}{12} \approx$



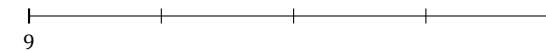
13.  $4\frac{1}{6} \approx$



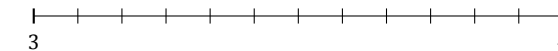
14.  $9\frac{3}{12} \approx$



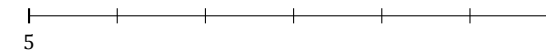
15.  $9\frac{2}{4} \approx$



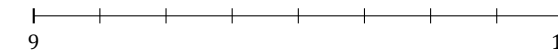
16.  $3\frac{2}{12} \approx$



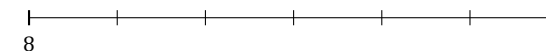
17.  $5\frac{5}{6} \approx$



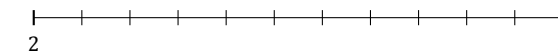
18.  $9\frac{7}{8} \approx$



19.  $8\frac{3}{6} \approx$



20.  $2\frac{3}{11} \approx$



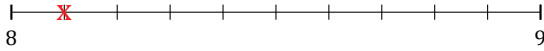
# Redondear Números Mixtos (D) Respuestas

Nombre: \_\_\_\_\_


Fecha: \_\_\_\_\_

Redondee cada número mixto hasta el entero más cercano. Redondee por exceso.

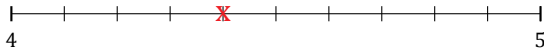
1.  $8\frac{1}{10} \simeq 8$



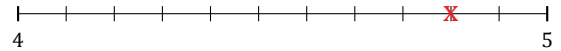
2.  $1\frac{5}{7} \simeq 2$



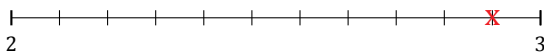
3.  $4\frac{4}{10} \simeq 4$




4.  $4\frac{9}{11} \simeq 5$



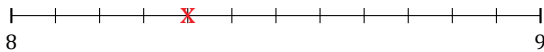
5.  $2\frac{10}{11} \simeq 3$




6.  $7\frac{1}{7} \simeq 7$




7.  $8\frac{4}{12} \simeq 8$



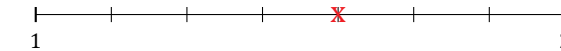
8.  $5\frac{1}{9} \simeq 5$



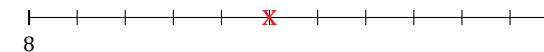
9.  $6\frac{4}{5} \simeq 7$



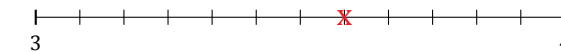
10.  $1\frac{4}{7} \simeq 2$



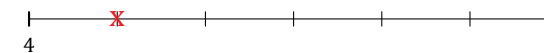
11.  $8\frac{5}{11} \simeq 8$



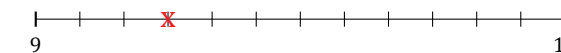
12.  $3\frac{7}{12} \simeq 4$



13.  $4\frac{1}{6} \simeq 4$



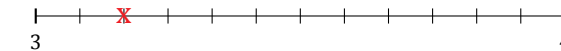
14.  $9\frac{3}{12} \simeq 9$



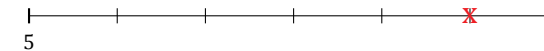
15.  $9\frac{2}{4} \simeq 10$



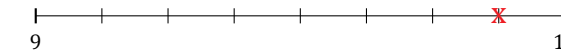
16.  $3\frac{2}{12} \simeq 3$



17.  $5\frac{5}{6} \simeq 6$



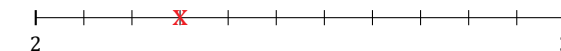
18.  $9\frac{7}{8} \simeq 10$



19.  $8\frac{3}{6} \simeq 9$



20.  $2\frac{3}{11} \simeq 2$





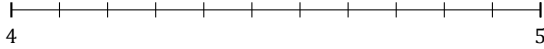
# Redondear Números Mixtos (E)

Nombre: \_\_\_\_\_

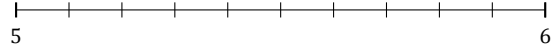
Fecha: \_\_\_\_\_

Redondee cada número mixto hasta el entero más cercano. Redondee por exceso.

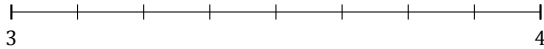
1.  $4\frac{6}{11} \approx$



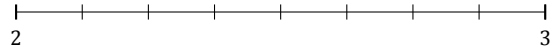
2.  $5\frac{8}{10} \approx$



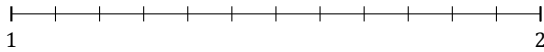
3.  $3\frac{6}{8} \approx$



4.  $2\frac{2}{8} \approx$



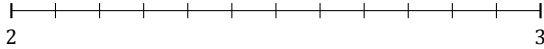
5.  $1\frac{9}{12} \approx$




6.  $2\frac{1}{7} \approx$



7.  $2\frac{1}{12} \approx$



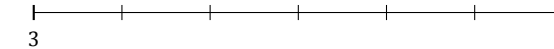
8.  $6\frac{1}{5} \approx$



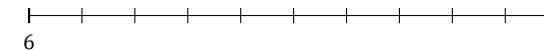
9.  $4\frac{4}{7} \approx$



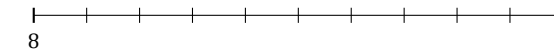
10.  $3\frac{1}{6} \approx$



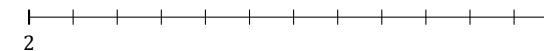
11.  $6\frac{5}{10} \approx$



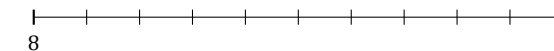
12.  $8\frac{7}{10} \approx$



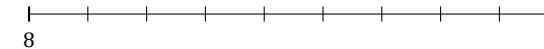
13.  $2\frac{10}{12} \approx$



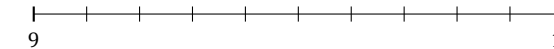
14.  $8\frac{4}{10} \approx$



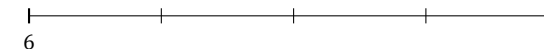
15.  $8\frac{8}{9} \approx$



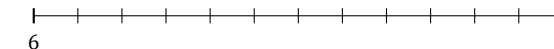
16.  $9\frac{1}{10} \approx$



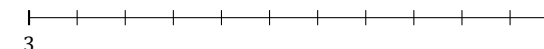
17.  $6\frac{3}{4} \approx$



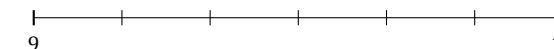
18.  $6\frac{7}{12} \approx$



19.  $3\frac{10}{11} \approx$



20.  $9\frac{2}{6} \approx$



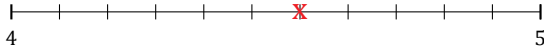
# Redondear Números Mixtos (E) Respuestas

Nombre: \_\_\_\_\_

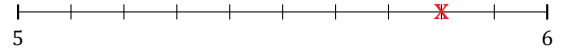
Fecha: \_\_\_\_\_

Redondee cada número mixto hasta el entero más cercano. Redondee por exceso.

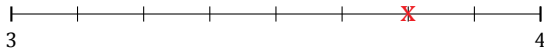
1.  $4\frac{6}{11} \simeq 5$



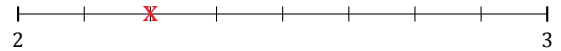
2.  $5\frac{8}{10} \simeq 6$



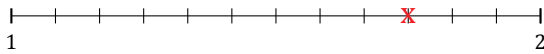
3.  $3\frac{6}{8} \simeq 4$




4.  $2\frac{2}{8} \simeq 2$



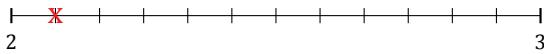
5.  $1\frac{9}{12} \simeq 2$




6.  $2\frac{1}{7} \simeq 2$



7.  $2\frac{1}{12} \simeq 2$



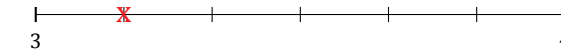
8.  $6\frac{1}{5} \simeq 6$



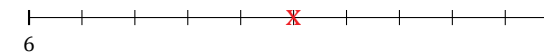
9.  $4\frac{4}{7} \simeq 5$



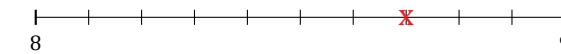
10.  $3\frac{1}{6} \simeq 3$



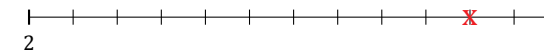
11.  $6\frac{5}{10} \simeq 7$



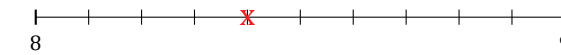
12.  $8\frac{7}{10} \simeq 9$



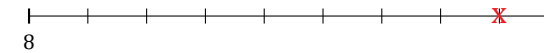
13.  $2\frac{10}{12} \simeq 3$



14.  $8\frac{4}{10} \simeq 8$



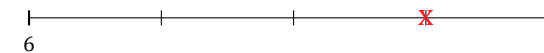
15.  $8\frac{8}{9} \simeq 9$



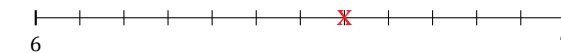
16.  $9\frac{1}{10} \simeq 9$



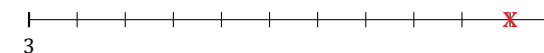
17.  $6\frac{3}{4} \simeq 7$



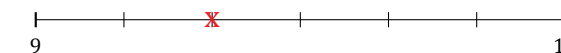
18.  $6\frac{7}{12} \simeq 7$



19.  $3\frac{10}{11} \simeq 4$



20.  $9\frac{2}{6} \simeq 9$



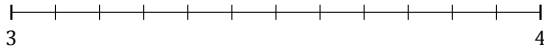
# Redondear Números Mixtos (F)

Nombre: \_\_\_\_\_


Fecha: \_\_\_\_\_

Redondee cada número mixto hasta el entero más cercano. Redondee por exceso.

1.  $3\frac{5}{12} \approx$



2.  $1\frac{5}{9} \approx$



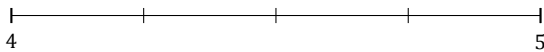
3.  $4\frac{1}{5} \approx$



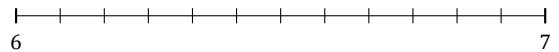
4.  $5\frac{8}{9} \approx$



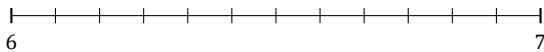
5.  $4\frac{1}{4} \approx$




6.  $6\frac{4}{12} \approx$



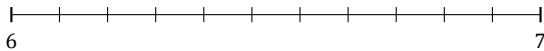
7.  $6\frac{6}{12} \approx$



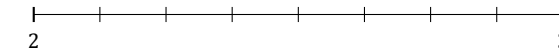
8.  $4\frac{1}{3} \approx$



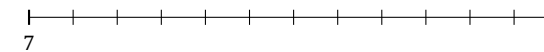
9.  $6\frac{5}{11} \approx$



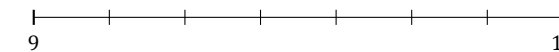
10.  $2\frac{4}{8} \approx$



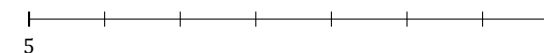
11.  $7\frac{2}{12} \approx$



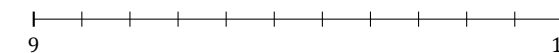
12.  $9\frac{2}{7} \approx$



13.  $5\frac{5}{7} \approx$



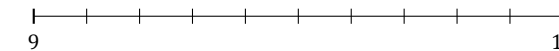
14.  $9\frac{2}{11} \approx$



15.  $8\frac{3}{5} \approx$



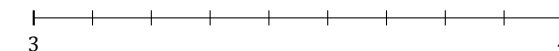
16.  $9\frac{5}{10} \approx$



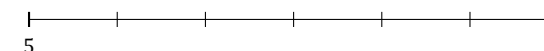
17.  $1\frac{2}{5} \approx$



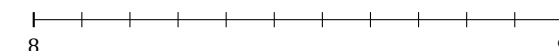
18.  $3\frac{2}{9} \approx$



19.  $5\frac{4}{6} \approx$



20.  $8\frac{3}{11} \approx$



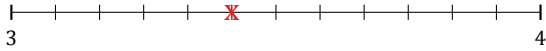
# Redondear Números Mixtos (F) Respuestas

Nombre: \_\_\_\_\_


Fecha: \_\_\_\_\_

Redondee cada número mixto hasta el entero más cercano. Redondee por exceso.

1.  $3\frac{5}{12} \approx 3$



2.  $1\frac{5}{9} \approx 2$



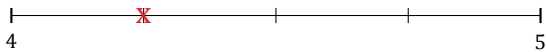
3.  $4\frac{1}{5} \approx 4$



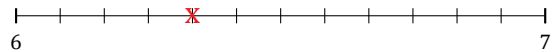
4.  $5\frac{8}{9} \approx 6$



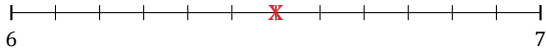
5.  $4\frac{1}{4} \approx 4$




6.  $6\frac{4}{12} \approx 6$




7.  $6\frac{6}{12} \approx 7$



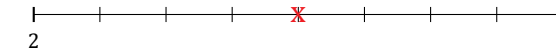
8.  $4\frac{1}{3} \approx 4$



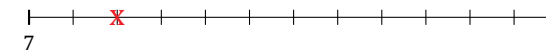
9.  $6\frac{5}{11} \approx 6$



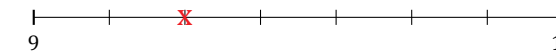
10.  $2\frac{4}{8} \approx 3$



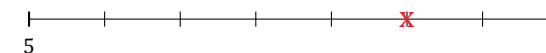
11.  $7\frac{2}{12} \approx 7$



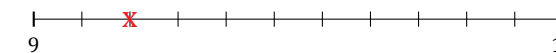
12.  $9\frac{2}{7} \approx 9$




13.  $5\frac{5}{7} \approx 6$



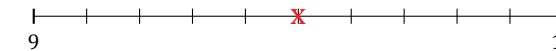
14.  $9\frac{2}{11} \approx 9$



15.  $8\frac{3}{5} \approx 9$



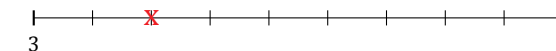
16.  $9\frac{5}{10} \approx 10$



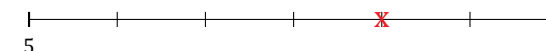
17.  $1\frac{2}{5} \approx 1$



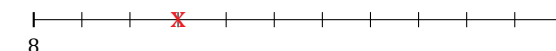
18.  $3\frac{2}{9} \approx 3$



19.  $5\frac{4}{6} \approx 6$



20.  $8\frac{3}{11} \approx 8$



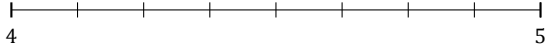
# Redondear Números Mixtos (G)

Nombre: \_\_\_\_\_

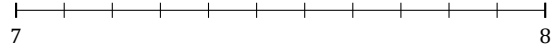
Fecha: \_\_\_\_\_

Redondee cada número mixto hasta el entero más cercano. Redondee por exceso.

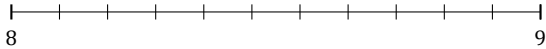
1.  $4\frac{2}{8} \approx$



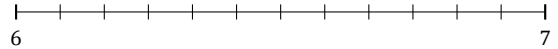
2.  $7\frac{5}{11} \approx$



3.  $8\frac{9}{11} \approx$



4.  $6\frac{6}{12} \approx$



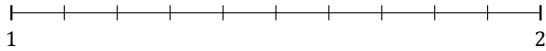
5.  $9\frac{1}{8} \approx$




6.  $3\frac{5}{7} \approx$



7.  $1\frac{2}{10} \approx$



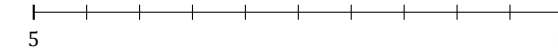
8.  $5\frac{2}{3} \approx$



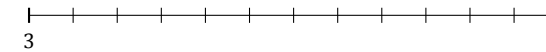
9.  $1\frac{4}{5} \approx$



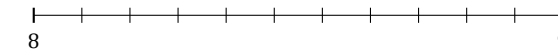
10.  $5\frac{4}{10} \approx$



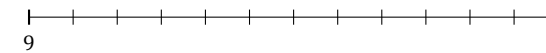
11.  $3\frac{8}{12} \approx$



12.  $8\frac{4}{11} \approx$



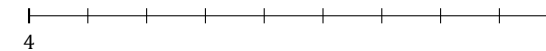
13.  $9\frac{2}{12} \approx$



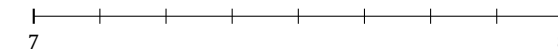
14.  $2\frac{3}{5} \approx$



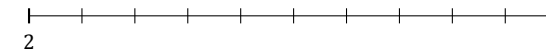
15.  $4\frac{6}{9} \approx$



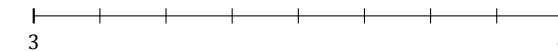
16.  $7\frac{5}{8} \approx$



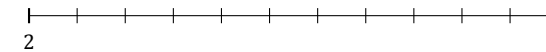
17.  $2\frac{7}{10} \approx$



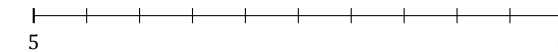
18.  $3\frac{6}{8} \approx$



19.  $2\frac{2}{11} \approx$



20.  $5\frac{5}{10} \approx$



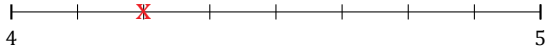
# Redondear Números Mixtos (G) Respuestas

Nombre: \_\_\_\_\_

Fecha: \_\_\_\_\_

Redondee cada número mixto hasta el entero más cercano. Redondee por exceso.

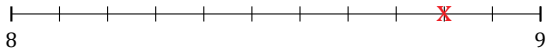
1.  $4\frac{2}{8} \simeq 4$



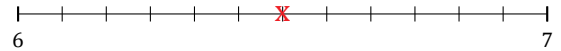
2.  $7\frac{5}{11} \simeq 7$



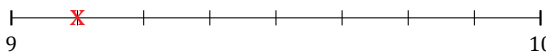
3.  $8\frac{9}{11} \simeq 9$



4.  $6\frac{6}{12} \simeq 7$



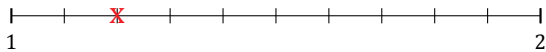
5.  $9\frac{1}{8} \simeq 9$




6.  $3\frac{5}{7} \simeq 4$




7.  $1\frac{2}{10} \simeq 1$



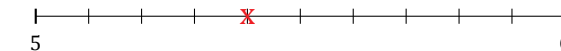
8.  $5\frac{2}{3} \simeq 6$



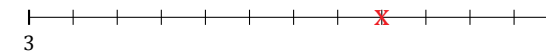
9.  $1\frac{4}{5} \simeq 2$



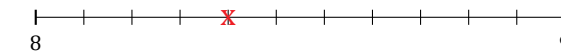
10.  $5\frac{4}{10} \simeq 5$



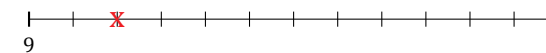
11.  $3\frac{8}{12} \simeq 4$




12.  $8\frac{4}{11} \simeq 8$



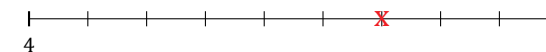
13.  $9\frac{2}{12} \simeq 9$



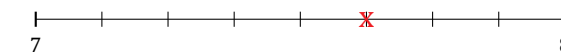
14.  $2\frac{3}{5} \simeq 3$



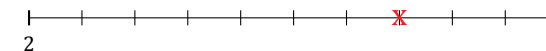
15.  $4\frac{6}{9} \simeq 5$



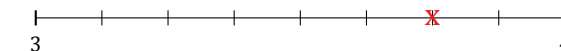
16.  $7\frac{5}{8} \simeq 8$



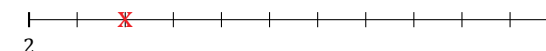
17.  $2\frac{7}{10} \simeq 3$



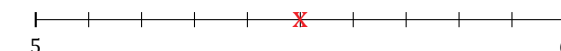
18.  $3\frac{6}{8} \simeq 4$



19.  $2\frac{2}{11} \simeq 2$



20.  $5\frac{5}{10} \simeq 6$



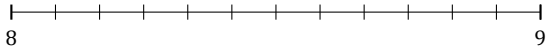
# Redondear Números Mixtos (H)

Nombre: \_\_\_\_\_

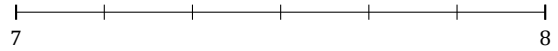
Fecha: \_\_\_\_\_

Redondee cada número mixto hasta el entero más cercano. Redondee por exceso.

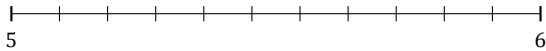
1.  $8\frac{3}{12} \approx$



2.  $7\frac{1}{6} \approx$



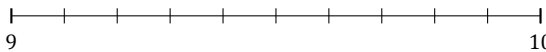
3.  $5\frac{3}{11} \approx$



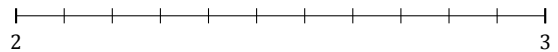
4.  $3\frac{7}{9} \approx$



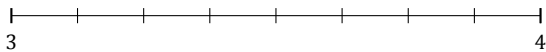
5.  $9\frac{3}{10} \approx$



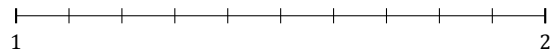
6.  $2\frac{8}{11} \approx$



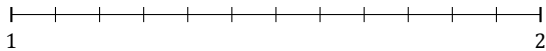
7.  $3\frac{4}{8} \approx$



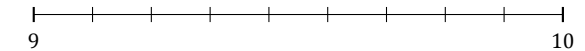
8.  $1\frac{2}{10} \approx$



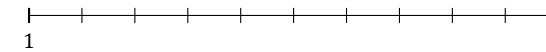
9.  $1\frac{8}{12} \approx$



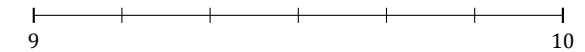
10.  $9\frac{3}{9} \approx$



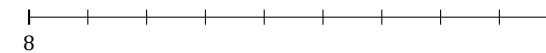
11.  $1\frac{6}{10} \approx$



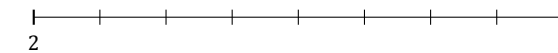
12.  $9\frac{4}{6} \approx$



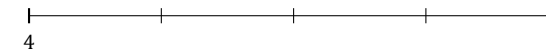
13.  $8\frac{4}{9} \approx$



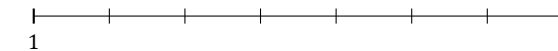
14.  $2\frac{1}{8} \approx$



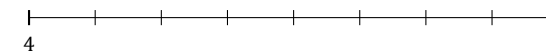
15.  $4\frac{3}{4} \approx$



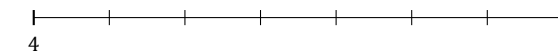
16.  $1\frac{4}{7} \approx$



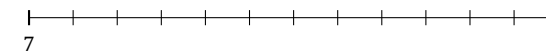
17.  $4\frac{6}{8} \approx$



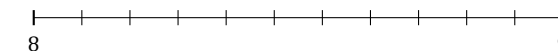
18.  $4\frac{1}{7} \approx$



19.  $7\frac{10}{12} \approx$



20.  $8\frac{2}{11} \approx$



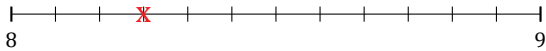
# Redondear Números Mixtos (H) Respuestas

Nombre: \_\_\_\_\_

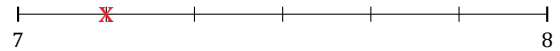
Fecha: \_\_\_\_\_

Redondee cada número mixto hasta el entero más cercano. Redondee por exceso.

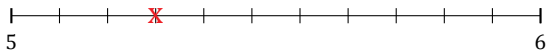
1.  $8\frac{3}{12} \simeq 8$




2.  $7\frac{1}{6} \simeq 7$



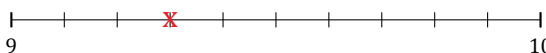
3.  $5\frac{3}{11} \simeq 5$



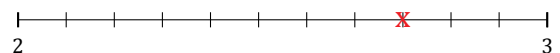
4.  $3\frac{7}{9} \simeq 4$




5.  $9\frac{3}{10} \simeq 9$



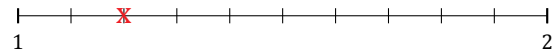
6.  $2\frac{8}{11} \simeq 3$



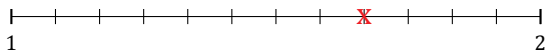
7.  $3\frac{4}{8} \simeq 4$



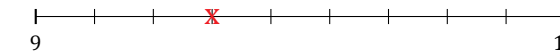
8.  $1\frac{2}{10} \simeq 1$



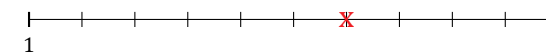
9.  $1\frac{8}{12} \simeq 2$



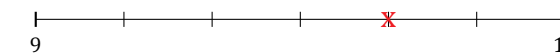
10.  $9\frac{3}{9} \simeq 9$



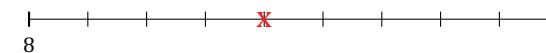
11.  $1\frac{6}{10} \simeq 2$



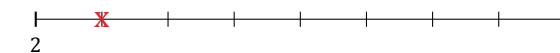
12.  $9\frac{4}{6} \simeq 10$



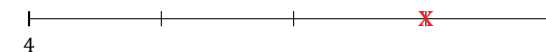
13.  $8\frac{4}{9} \simeq 8$



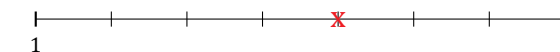
14.  $2\frac{1}{8} \simeq 2$



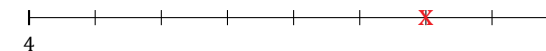
15.  $4\frac{3}{4} \simeq 5$



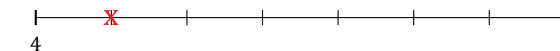
16.  $1\frac{4}{7} \simeq 2$



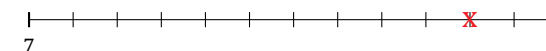
17.  $4\frac{6}{8} \simeq 5$



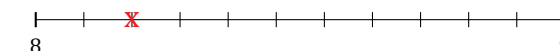
18.  $4\frac{1}{7} \simeq 4$



19.  $7\frac{10}{12} \simeq 8$



20.  $8\frac{2}{11} \simeq 8$





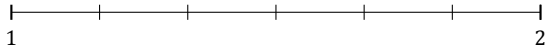
# Redondear Números Mixtos (I)

Nombre: \_\_\_\_\_

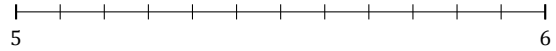
Fecha: \_\_\_\_\_

Redondee cada número mixto hasta el entero más cercano. Redondee por exceso.

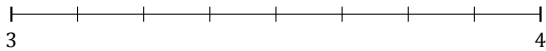
1.  $1\frac{1}{6} \approx$



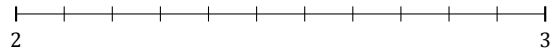
2.  $5\frac{11}{12} \approx$



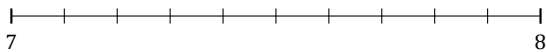
3.  $3\frac{5}{8} \approx$



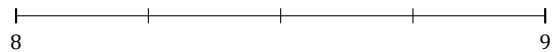
4.  $2\frac{10}{11} \approx$



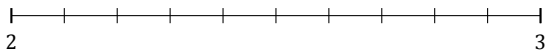
5.  $7\frac{5}{10} \approx$



6.  $8\frac{1}{4} \approx$



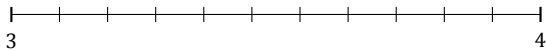
7.  $2\frac{7}{10} \approx$



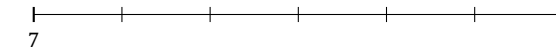
8.  $1\frac{4}{9} \approx$



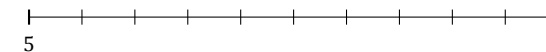
9.  $3\frac{8}{11} \approx$



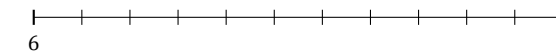
10.  $7\frac{4}{6} \approx$



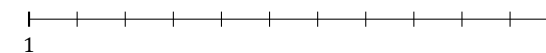
11.  $5\frac{2}{10} \approx$



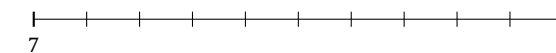
12.  $6\frac{3}{11} \approx$



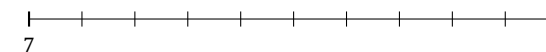
13.  $1\frac{7}{11} \approx$



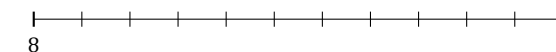
14.  $7\frac{1}{10} \approx$



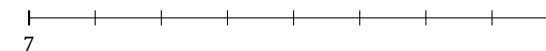
15.  $7\frac{4}{10} \approx$



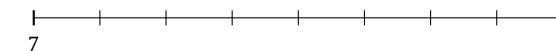
16.  $8\frac{5}{11} \approx$



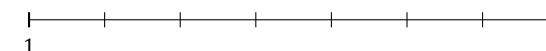
17.  $7\frac{6}{8} \approx$



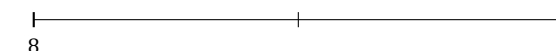
18.  $7\frac{7}{8} \approx$



19.  $1\frac{6}{7} \approx$



20.  $8\frac{1}{2} \approx$



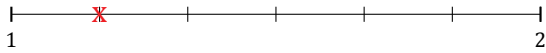
# Redondear Números Mixtos (I) Respuestas

Nombre: \_\_\_\_\_

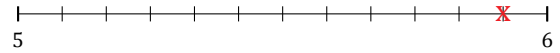
Fecha: \_\_\_\_\_

Redondee cada número mixto hasta el entero más cercano. Redondee por exceso.

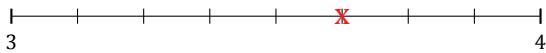
1.  $1\frac{1}{6} \simeq 1$



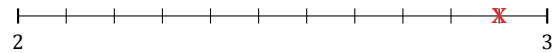
2.  $5\frac{11}{12} \simeq 6$



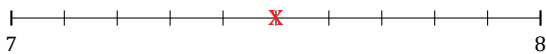
3.  $3\frac{5}{8} \simeq 4$



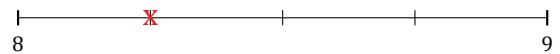
4.  $2\frac{10}{11} \simeq 3$



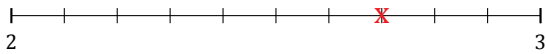
5.  $7\frac{5}{10} \simeq 8$



6.  $8\frac{1}{4} \simeq 8$



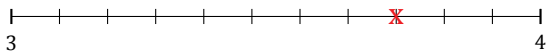
7.  $2\frac{7}{10} \simeq 3$



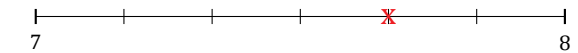
8.  $1\frac{4}{9} \simeq 1$



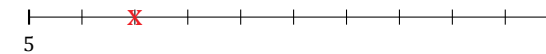
9.  $3\frac{8}{11} \simeq 4$



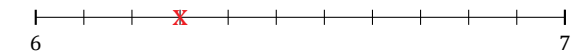
10.  $7\frac{4}{6} \simeq 8$



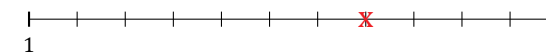
11.  $5\frac{2}{10} \simeq 5$



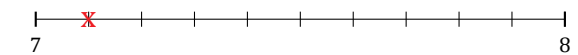
12.  $6\frac{3}{11} \simeq 6$



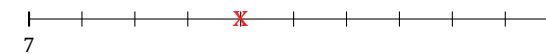
13.  $1\frac{7}{11} \simeq 2$



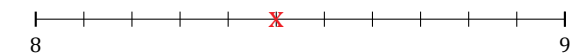
14.  $7\frac{1}{10} \simeq 7$



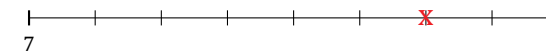
15.  $7\frac{4}{10} \simeq 7$



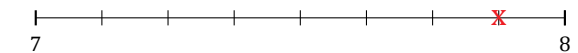
16.  $8\frac{5}{11} \simeq 8$



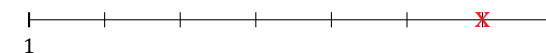
17.  $7\frac{6}{8} \simeq 8$



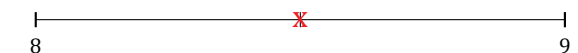
18.  $7\frac{7}{8} \simeq 8$



19.  $1\frac{6}{7} \simeq 2$



20.  $8\frac{1}{2} \simeq 9$



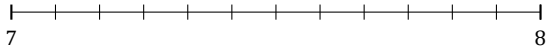
# Redondear Números Mixtos (J)

Nombre: \_\_\_\_\_

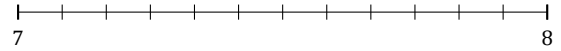
Fecha: \_\_\_\_\_

Redondee cada número mixto hasta el entero más cercano. Redondee por exceso.

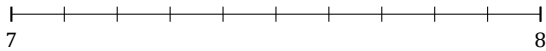
1.  $7\frac{8}{12} \approx$



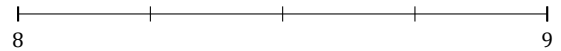
2.  $7\frac{11}{12} \approx$



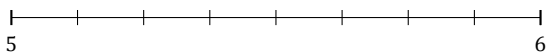
3.  $7\frac{5}{10} \approx$



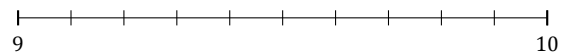
4.  $8\frac{1}{4} \approx$



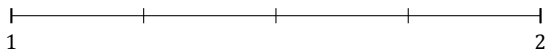
5.  $5\frac{4}{8} \approx$




6.  $9\frac{2}{10} \approx$



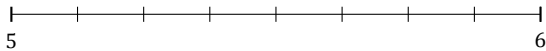
7.  $1\frac{3}{4} \approx$



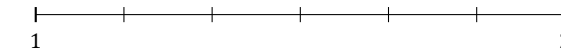
8.  $8\frac{2}{5} \approx$



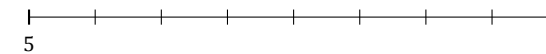
9.  $5\frac{1}{8} \approx$



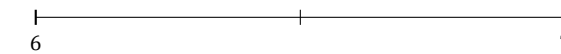
10.  $1\frac{2}{6} \approx$



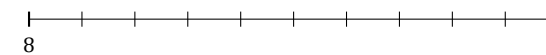
11.  $5\frac{2}{8} \approx$



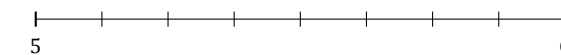
12.  $6\frac{1}{2} \approx$



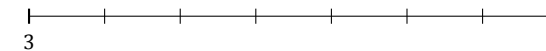
13.  $8\frac{7}{10} \approx$



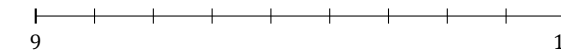
14.  $5\frac{5}{8} \approx$



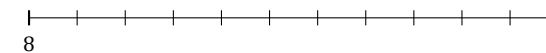
15.  $3\frac{5}{7} \approx$



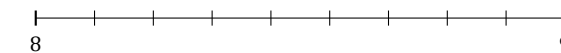
16.  $9\frac{3}{9} \approx$



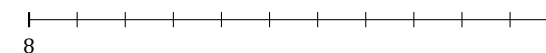
17.  $8\frac{10}{11} \approx$



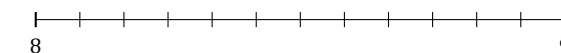
18.  $8\frac{5}{9} \approx$



19.  $8\frac{6}{11} \approx$



20.  $8\frac{4}{12} \approx$



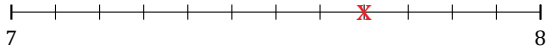
# Redondear Números Mixtos (J) Respuestas

Nombre: \_\_\_\_\_

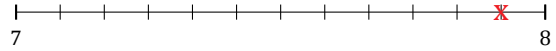
Fecha: \_\_\_\_\_

Redondee cada número mixto hasta el entero más cercano. Redondee por exceso.

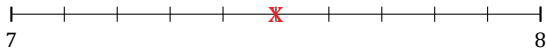
1.  $7\frac{8}{12} \simeq 8$



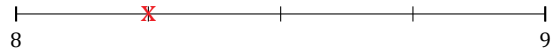
2.  $7\frac{11}{12} \simeq 8$



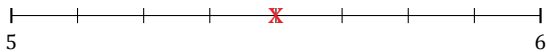
3.  $7\frac{5}{10} \simeq 8$



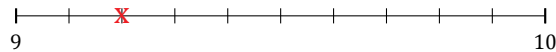
4.  $8\frac{1}{4} \simeq 8$



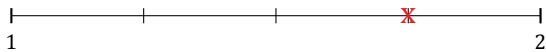
5.  $5\frac{4}{8} \simeq 6$



6.  $9\frac{2}{10} \simeq 9$



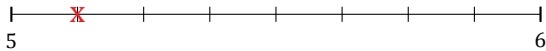
7.  $1\frac{3}{4} \simeq 2$



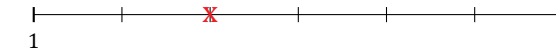
8.  $8\frac{2}{5} \simeq 8$



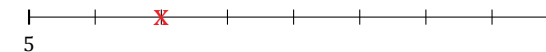
9.  $5\frac{1}{8} \simeq 5$



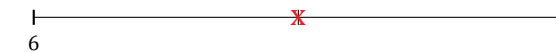
10.  $1\frac{2}{6} \simeq 1$



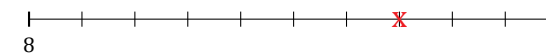
11.  $5\frac{2}{8} \simeq 5$



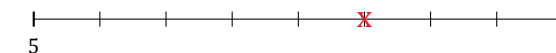
12.  $6\frac{1}{2} \simeq 7$



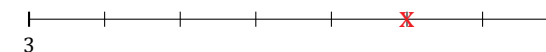
13.  $8\frac{7}{10} \simeq 9$



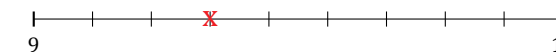
14.  $5\frac{5}{8} \simeq 6$



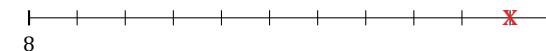
15.  $3\frac{5}{7} \simeq 4$



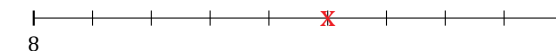
16.  $9\frac{3}{9} \simeq 9$



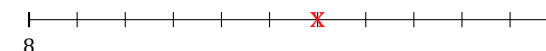
17.  $8\frac{10}{11} \simeq 9$



18.  $8\frac{5}{9} \simeq 9$



19.  $8\frac{6}{11} \simeq 9$



20.  $8\frac{4}{12} \simeq 8$

