

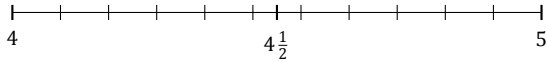
Redondear Números Mixtos (A)

Nombre: _____

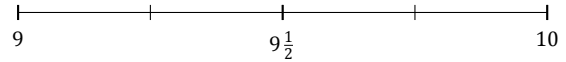
Fecha: _____

Redondee cada número mixto hasta la mitad más cercana. Redondee por exceso.

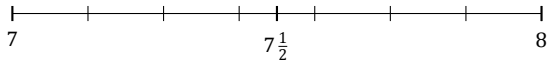
1. $4\frac{6}{11} \approx$



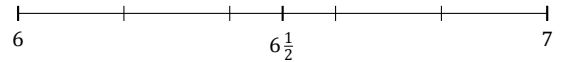
2. $9\frac{2}{4} \approx$



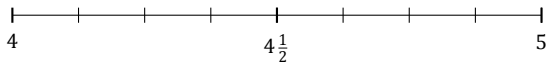
3. $7\frac{5}{7} \approx$



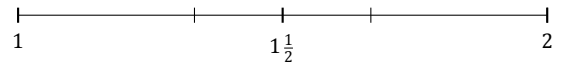
4. $6\frac{2}{5} \approx$



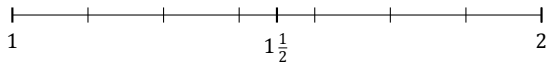
5. $4\frac{1}{8} \approx$



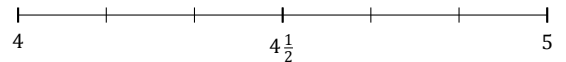
6. $1\frac{1}{3} \approx$



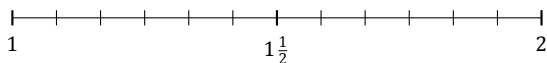
7. $1\frac{3}{7} \approx$



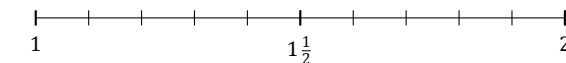
8. $4\frac{1}{6} \approx$



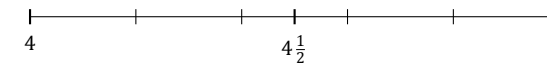
9. $1\frac{4}{12} \approx$



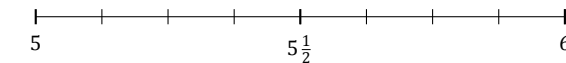
10. $1\frac{6}{10} \approx$



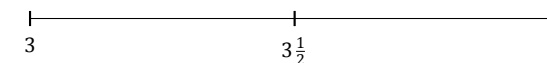
11. $4\frac{3}{5} \approx$



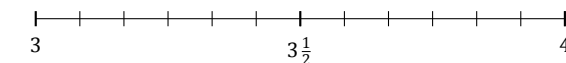
12. $5\frac{2}{8} \approx$



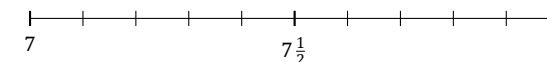
13. $3\frac{1}{2} \approx$



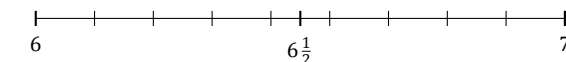
14. $3\frac{5}{12} \approx$



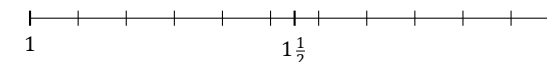
15. $7\frac{8}{10} \approx$



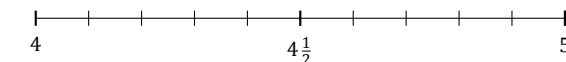
16. $6\frac{1}{9} \approx$



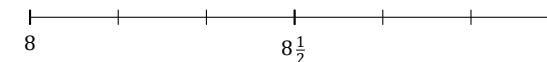
17. $1\frac{10}{11} \approx$



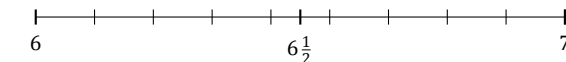
18. $4\frac{2}{10} \approx$



19. $8\frac{5}{6} \approx$



20. $6\frac{7}{9} \approx$



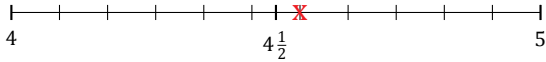
Redondear Números Mixtos (A) Respuestas

Nombre: _____

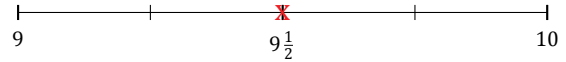
Fecha: _____

Redondee cada número mixto hasta la mitad más cercana. Redondee por exceso.

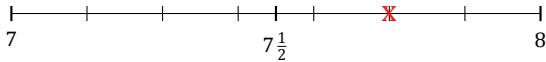
1. $4\frac{6}{11} \simeq 4\frac{1}{2}$



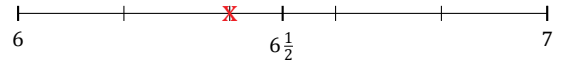
2. $9\frac{2}{4} \simeq 9\frac{1}{2}$



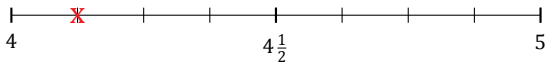
3. $7\frac{5}{7} \simeq 7\frac{1}{2}$



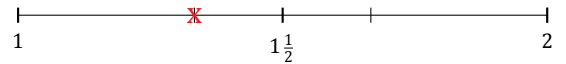
4. $6\frac{2}{5} \simeq 6\frac{1}{2}$



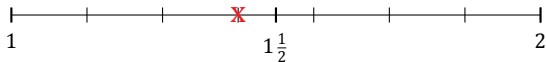
5. $4\frac{1}{8} \simeq 4$



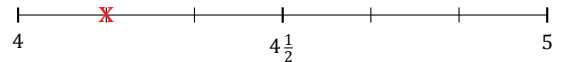
6. $1\frac{1}{3} \simeq 1\frac{1}{2}$



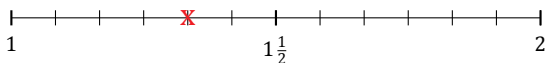
7. $1\frac{3}{7} \simeq 1\frac{1}{2}$



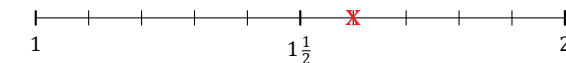
8. $4\frac{1}{6} \simeq 4$



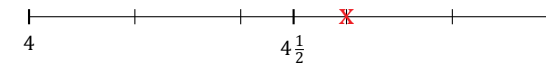
9. $1\frac{4}{12} \simeq 1\frac{1}{2}$



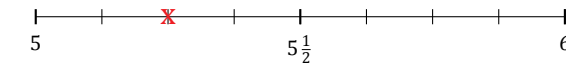
10. $1\frac{6}{10} \simeq 1\frac{1}{2}$



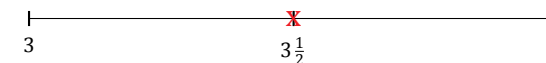
11. $4\frac{3}{5} \simeq 4\frac{1}{2}$



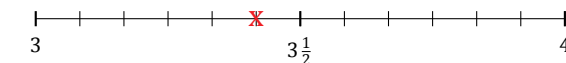
12. $5\frac{2}{8} \simeq 5\frac{1}{2}$



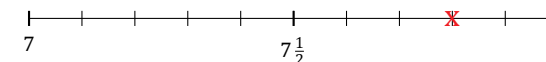
13. $3\frac{1}{2} \simeq 3\frac{1}{2}$



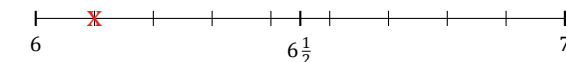
14. $3\frac{5}{12} \simeq 3\frac{1}{2}$



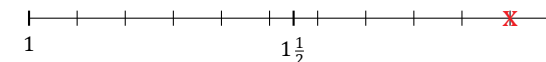
15. $7\frac{8}{10} \simeq 8$



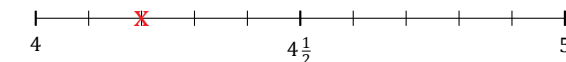
16. $6\frac{1}{9} \simeq 6$



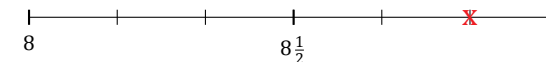
17. $1\frac{10}{11} \simeq 2$



18. $4\frac{2}{10} \simeq 4$



19. $8\frac{5}{6} \simeq 9$



20. $6\frac{7}{9} \simeq 7$

