

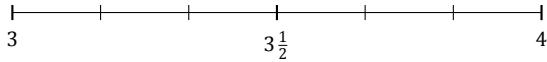
Redondear Números Mixtos (B)

Nombre: _____

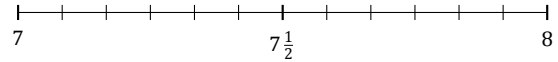
Fecha: _____

Redondee cada número mixto hasta la mitad más cercana. Redondee por exceso.

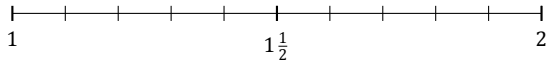
1. $3\frac{3}{6} \approx$



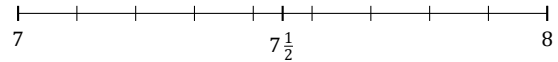
2. $7\frac{1}{12} \approx$



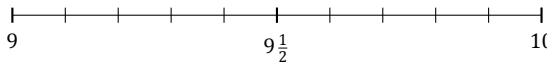
3. $1\frac{4}{10} \approx$



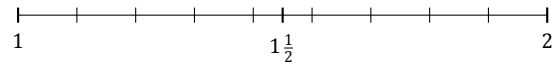
4. $7\frac{1}{9} \approx$



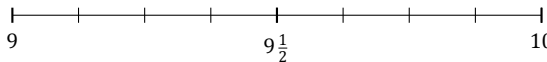
5. $9\frac{7}{10} \approx$



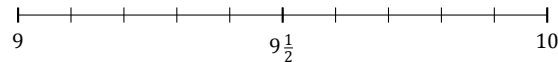
6. $1\frac{7}{9} \approx$



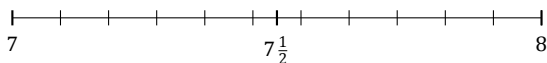
7. $9\frac{5}{8} \approx$



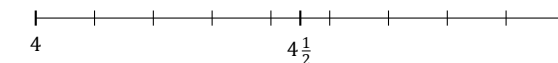
8. $9\frac{6}{10} \approx$



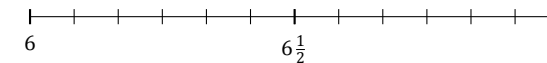
9. $7\frac{4}{11} \approx$



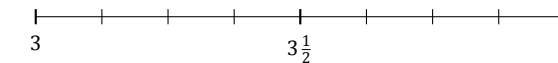
10. $4\frac{5}{9} \approx$



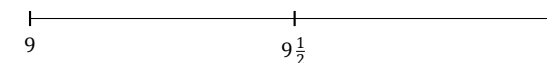
11. $6\frac{2}{12} \approx$



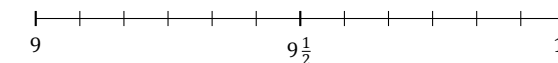
12. $3\frac{2}{8} \approx$



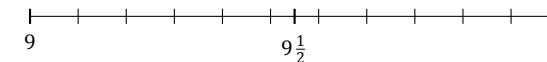
13. $9\frac{1}{2} \approx$



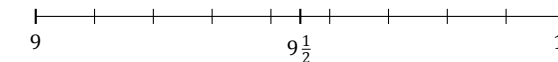
14. $9\frac{6}{12} \approx$



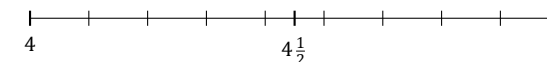
15. $9\frac{6}{11} \approx$



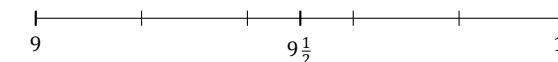
16. $9\frac{2}{9} \approx$



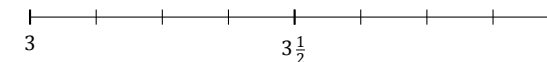
17. $4\frac{4}{9} \approx$



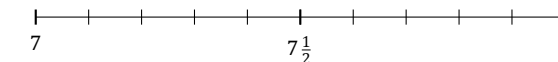
18. $9\frac{1}{5} \approx$



19. $3\frac{3}{8} \approx$



20. $7\frac{3}{10} \approx$



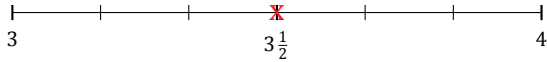
Redondear Números Mixtos (B) Respuestas

Nombre: _____

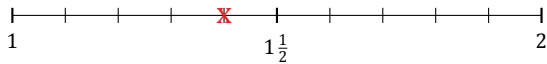
Fecha: _____

Redondee cada número mixto hasta la mitad más cercana. Redondee por exceso.

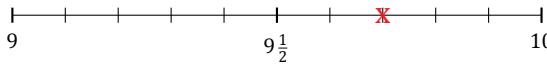
1. $3\frac{3}{6} \simeq 3\frac{1}{2}$



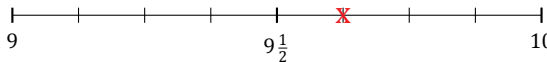
3. $1\frac{4}{10} \simeq 1\frac{1}{2}$



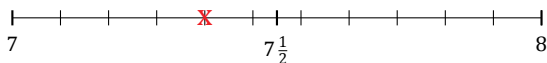
5. $9\frac{7}{10} \simeq 9\frac{1}{2}$



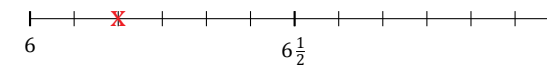
7. $9\frac{5}{8} \simeq 9\frac{1}{2}$



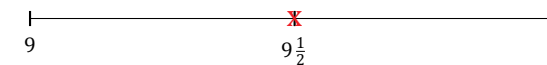
9. $7\frac{4}{11} \simeq 7\frac{1}{2}$



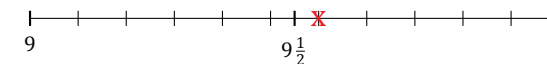
11. $6\frac{2}{12} \simeq 6$



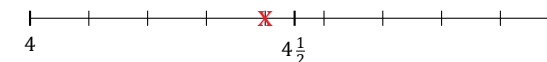
13. $9\frac{1}{2} \simeq 9\frac{1}{2}$



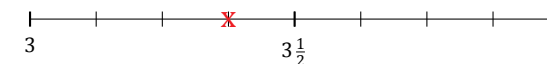
15. $9\frac{6}{11} \simeq 9\frac{1}{2}$



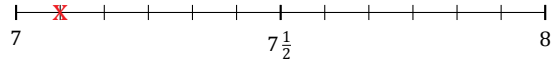
17. $4\frac{4}{9} \simeq 4\frac{1}{2}$



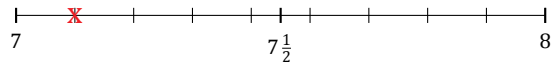
19. $3\frac{3}{8} \simeq 3\frac{1}{2}$



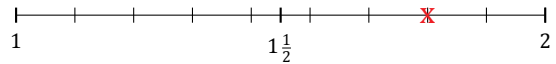
2. $7\frac{1}{12} \simeq 7$



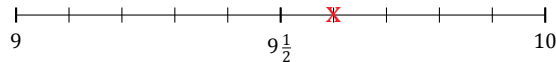
4. $7\frac{1}{9} \simeq 7$



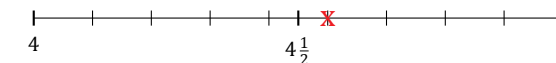
6. $1\frac{7}{9} \simeq 2$



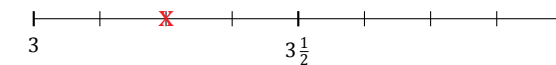
8. $9\frac{6}{10} \simeq 9\frac{1}{2}$



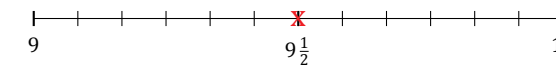
10. $4\frac{5}{9} \simeq 4\frac{1}{2}$



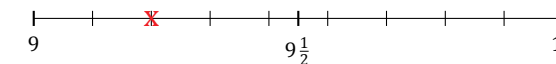
12. $3\frac{2}{8} \simeq 3\frac{1}{2}$



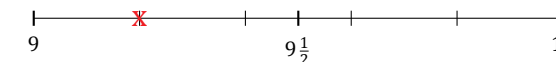
14. $9\frac{6}{12} \simeq 9\frac{1}{2}$



16. $9\frac{2}{9} \simeq 9$



18. $9\frac{1}{5} \simeq 9$



20. $7\frac{3}{10} \simeq 7\frac{1}{2}$

