

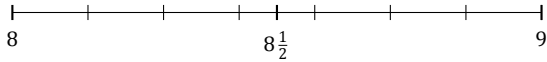
Redondear Números Mixtos (C)

Nombre: _____

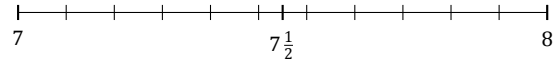
Fecha: _____

Redondee cada número mixto hasta la mitad más cercana. Redondee por exceso.

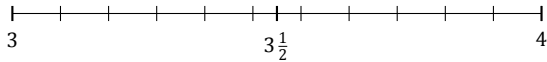
1. $8\frac{6}{7} \approx$



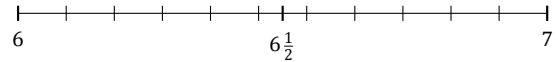
2. $7\frac{10}{11} \approx$



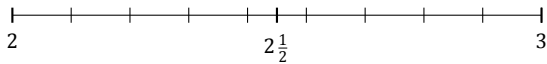
3. $3\frac{5}{11} \approx$



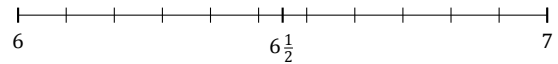
4. $6\frac{8}{11} \approx$



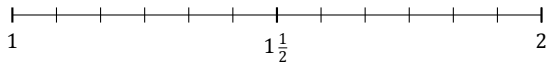
5. $2\frac{4}{9} \approx$



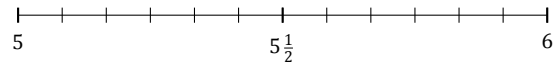
6. $6\frac{3}{11} \approx$



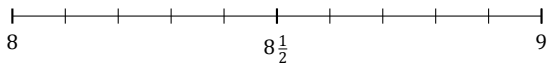
7. $1\frac{8}{12} \approx$



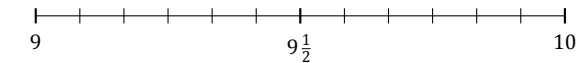
8. $5\frac{5}{12} \approx$



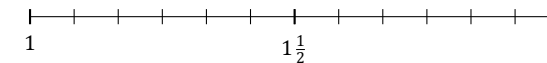
9. $8\frac{5}{10} \approx$



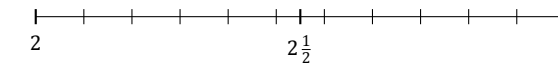
10. $9\frac{1}{12} \approx$



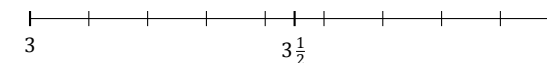
11. $1\frac{6}{12} \approx$



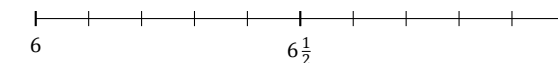
12. $2\frac{2}{11} \approx$



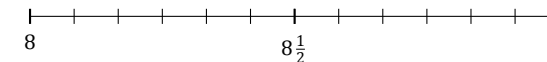
13. $3\frac{1}{9} \approx$



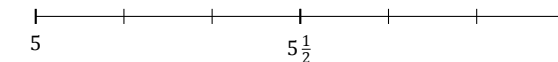
14. $6\frac{8}{10} \approx$



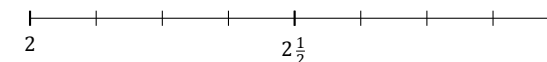
15. $8\frac{11}{12} \approx$



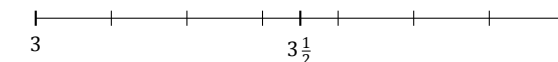
16. $5\frac{4}{6} \approx$



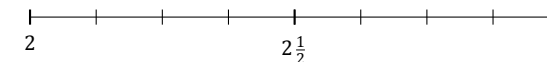
17. $2\frac{4}{8} \approx$



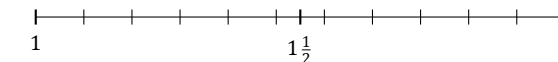
18. $3\frac{1}{7} \approx$



19. $2\frac{1}{8} \approx$



20. $1\frac{4}{11} \approx$



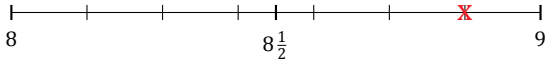
Redondear Números Mixtos (C) Respuestas

Nombre: _____

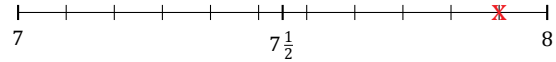
Fecha: _____

Redondee cada número mixto hasta la mitad más cercana. Redondee por exceso.

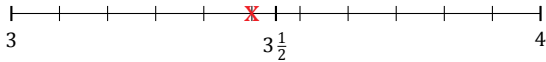
1. $8\frac{6}{7} \simeq 9$



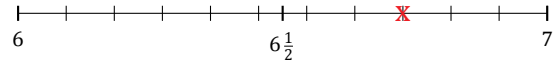
2. $7\frac{10}{11} \simeq 8$



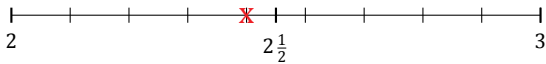
3. $3\frac{5}{11} \simeq 3\frac{1}{2}$



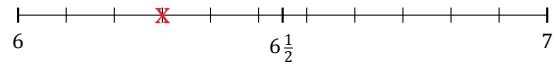
4. $6\frac{8}{11} \simeq 6\frac{1}{2}$



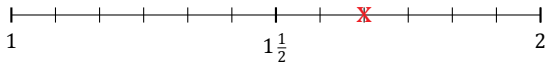
5. $2\frac{4}{9} \simeq 2\frac{1}{2}$



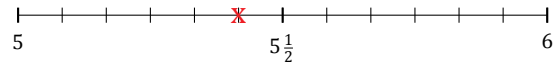
6. $6\frac{3}{11} \simeq 6\frac{1}{2}$



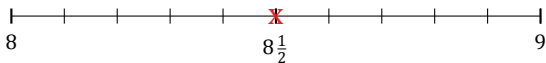
7. $1\frac{8}{12} \simeq 1\frac{1}{2}$



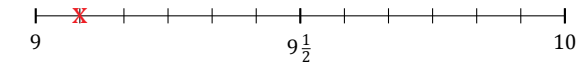
8. $5\frac{5}{12} \simeq 5\frac{1}{2}$



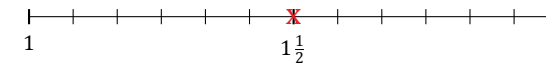
9. $8\frac{5}{10} \simeq 8\frac{1}{2}$



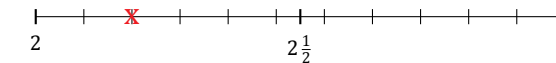
10. $9\frac{1}{12} \simeq 9$



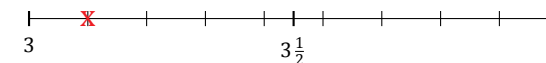
11. $1\frac{6}{12} \simeq 1\frac{1}{2}$



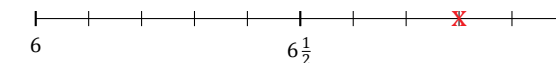
12. $2\frac{2}{11} \simeq 2$



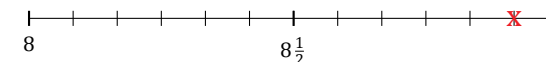
13. $3\frac{1}{9} \simeq 3$



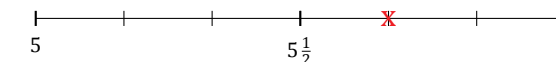
14. $6\frac{8}{10} \simeq 7$



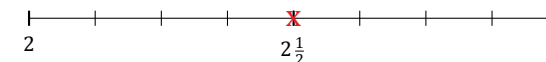
15. $8\frac{11}{12} \simeq 9$



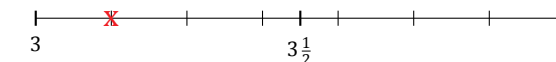
16. $5\frac{4}{6} \simeq 5\frac{1}{2}$



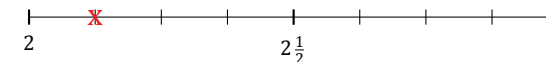
17. $2\frac{4}{8} \simeq 2\frac{1}{2}$



18. $3\frac{1}{7} \simeq 3$



19. $2\frac{1}{8} \simeq 2$



20. $1\frac{4}{11} \simeq 1\frac{1}{2}$

