

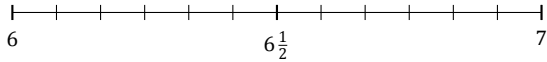
Redondear Números Mixtos (F)

Nombre: _____

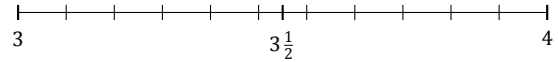
Fecha: _____

Redondee cada número mixto hasta la mitad más cercana. Redondee por exceso.

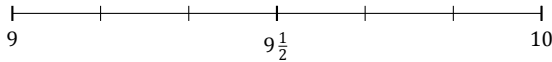
1. $6\frac{10}{12} \approx$



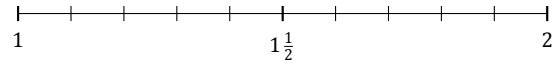
2. $3\frac{9}{11} \approx$



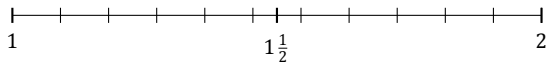
3. $9\frac{3}{6} \approx$



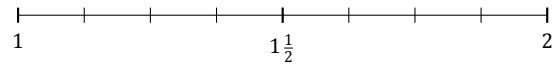
4. $1\frac{5}{10} \approx$



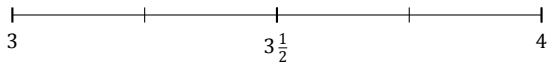
5. $1\frac{5}{11} \approx$



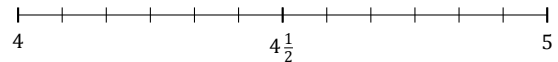
6. $1\frac{4}{8} \approx$



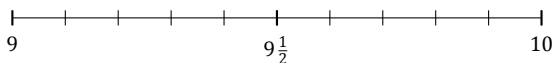
7. $3\frac{3}{4} \approx$



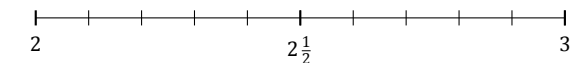
8. $4\frac{6}{12} \approx$



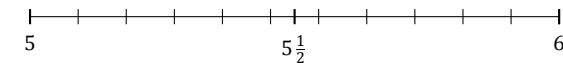
9. $9\frac{8}{10} \approx$



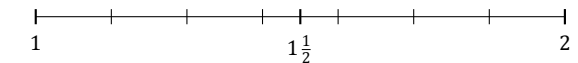
10. $2\frac{3}{10} \approx$



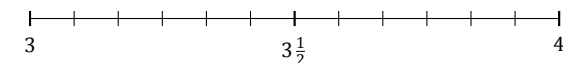
11. $5\frac{7}{11} \approx$



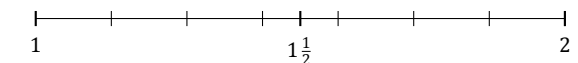
12. $1\frac{2}{7} \approx$



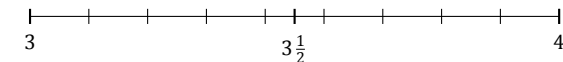
13. $3\frac{3}{12} \approx$



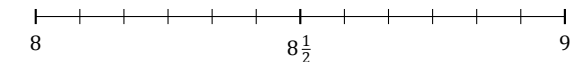
14. $1\frac{4}{7} \approx$



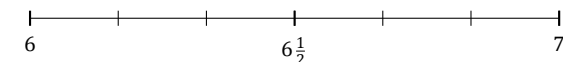
15. $3\frac{1}{9} \approx$



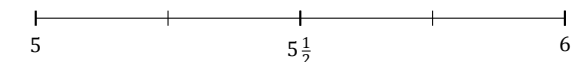
16. $8\frac{5}{12} \approx$



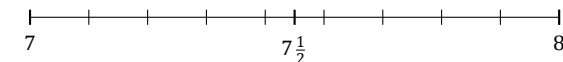
17. $6\frac{2}{6} \approx$



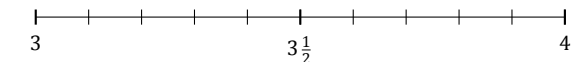
18. $5\frac{1}{4} \approx$



19. $7\frac{5}{9} \approx$



20. $3\frac{4}{10} \approx$



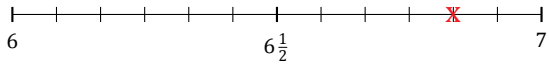
Redondear Números Mixtos (F) Respuestas

Nombre: _____

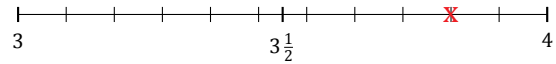
Fecha: _____

Redondee cada número mixto hasta la mitad más cercana. Redondee por exceso.

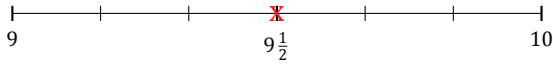
1. $6\frac{10}{12} \simeq 7$



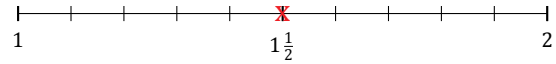
2. $3\frac{9}{11} \simeq 4$



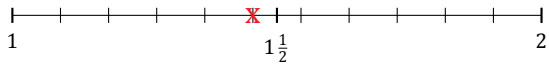
3. $9\frac{3}{6} \simeq 9\frac{1}{2}$



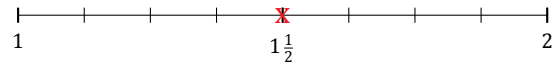
4. $1\frac{5}{10} \simeq 1\frac{1}{2}$



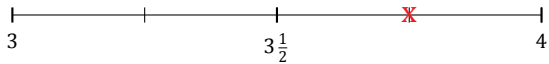
5. $1\frac{5}{11} \simeq 1\frac{1}{2}$



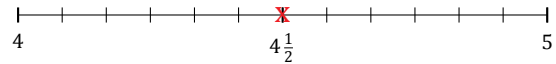
6. $1\frac{4}{8} \simeq 1\frac{1}{2}$



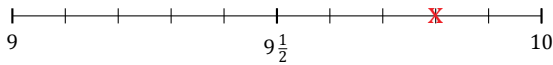
7. $3\frac{3}{4} \simeq 4$



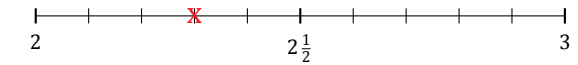
8. $4\frac{6}{12} \simeq 4\frac{1}{2}$



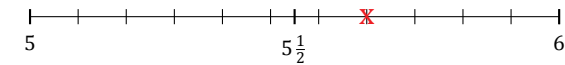
9. $9\frac{8}{10} \simeq 10$



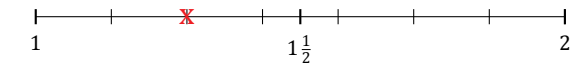
10. $2\frac{3}{10} \simeq 2\frac{1}{2}$



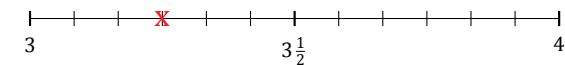
11. $5\frac{7}{11} \simeq 5\frac{1}{2}$



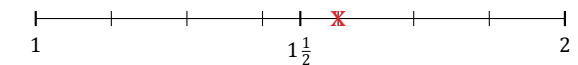
12. $1\frac{2}{7} \simeq 1\frac{1}{2}$



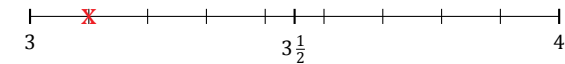
13. $3\frac{3}{12} \simeq 3\frac{1}{2}$



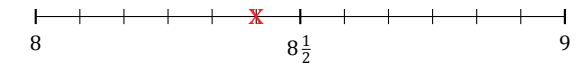
14. $1\frac{4}{7} \simeq 1\frac{1}{2}$



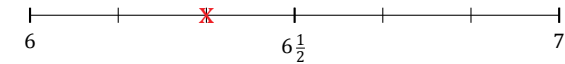
15. $3\frac{1}{9} \simeq 3$



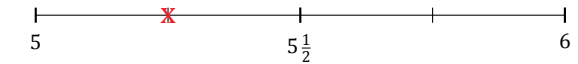
16. $8\frac{5}{12} \simeq 8\frac{1}{2}$



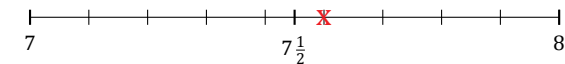
17. $6\frac{2}{6} \simeq 6\frac{1}{2}$



18. $5\frac{1}{4} \simeq 5\frac{1}{2}$



19. $7\frac{5}{9} \simeq 7\frac{1}{2}$



20. $3\frac{4}{10} \simeq 3\frac{1}{2}$

