

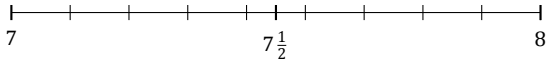
Redondear Números Mixtos (I)

Nombre: _____

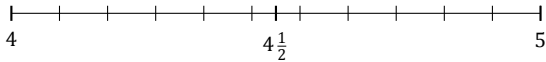
Fecha: _____

Redondee cada número mixto hasta la mitad más cercana. Redondee por exceso.

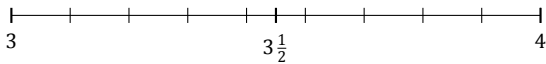
1. $7\frac{4}{9} \approx$



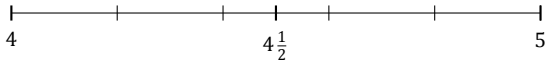
3. $4\frac{10}{11} \approx$



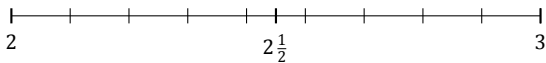
5. $3\frac{5}{9} \approx$



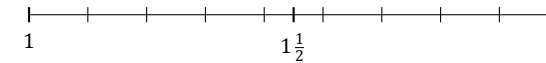
7. $4\frac{4}{5} \approx$



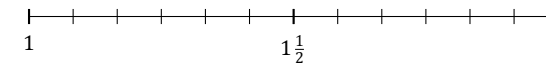
9. $2\frac{7}{9} \approx$



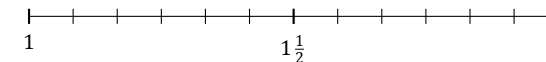
11. $1\frac{6}{9} \approx$



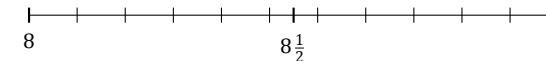
13. $1\frac{10}{12} \approx$



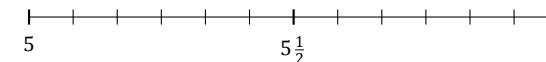
15. $1\frac{6}{12} \approx$



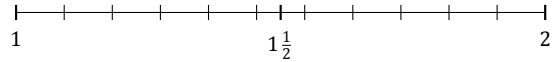
17. $8\frac{7}{11} \approx$



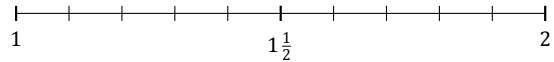
19. $5\frac{2}{12} \approx$



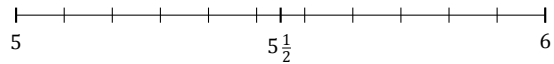
2. $1\frac{3}{11} \approx$



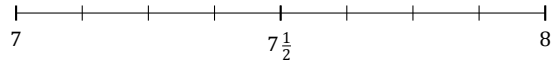
4. $1\frac{7}{10} \approx$



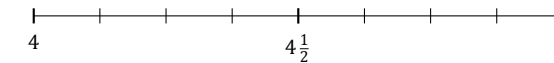
6. $5\frac{2}{11} \approx$



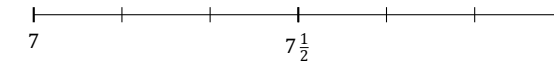
8. $7\frac{6}{8} \approx$



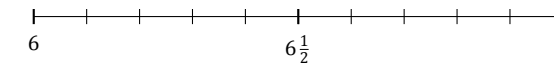
10. $4\frac{2}{8} \approx$



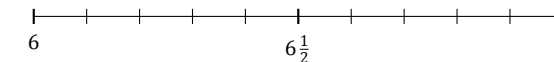
12. $7\frac{1}{6} \approx$



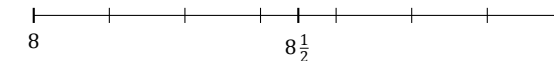
14. $6\frac{9}{10} \approx$



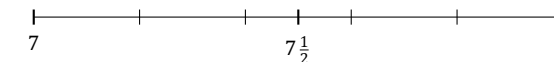
16. $6\frac{4}{10} \approx$



18. $8\frac{5}{7} \approx$



20. $7\frac{1}{5} \approx$



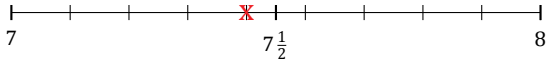
Redondear Números Mixtos (I) Respuestas

Nombre: _____

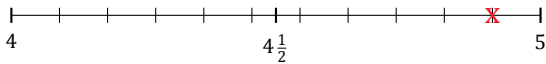
Fecha: _____

Redondee cada número mixto hasta la mitad más cercana. Redondee por exceso.

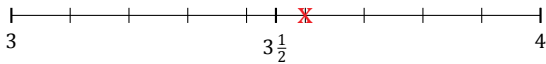
1. $7\frac{4}{9} \simeq 7\frac{1}{2}$



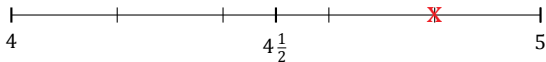
3. $4\frac{10}{11} \simeq 5$



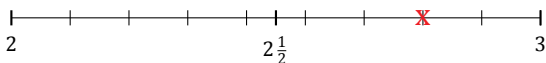
5. $3\frac{5}{9} \simeq 3\frac{1}{2}$



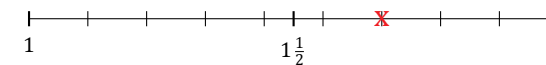
7. $4\frac{4}{5} \simeq 5$



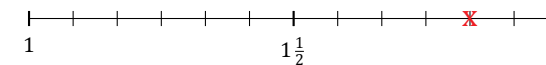
9. $2\frac{7}{9} \simeq 3$



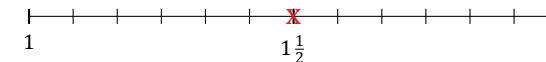
11. $1\frac{6}{9} \simeq 1\frac{1}{2}$



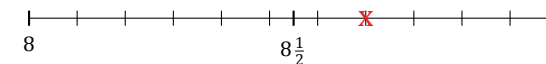
13. $1\frac{10}{12} \simeq 2$



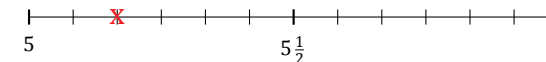
15. $1\frac{6}{12} \simeq 1\frac{1}{2}$



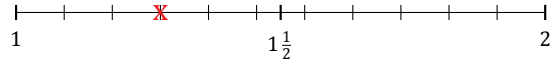
17. $8\frac{7}{11} \simeq 8\frac{1}{2}$



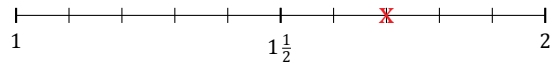
19. $5\frac{2}{12} \simeq 5$



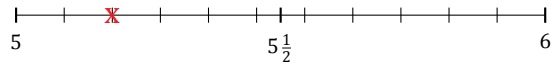
2. $1\frac{3}{11} \simeq 1\frac{1}{2}$



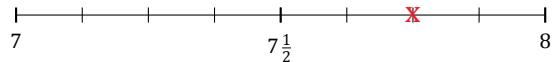
4. $1\frac{7}{10} \simeq 1\frac{1}{2}$



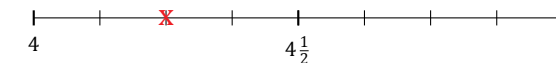
6. $5\frac{2}{11} \simeq 5$



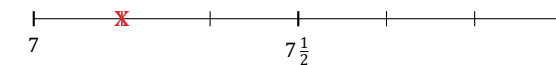
8. $7\frac{6}{8} \simeq 8$



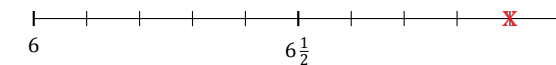
10. $4\frac{2}{8} \simeq 4\frac{1}{2}$



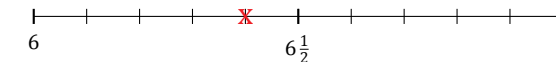
12. $7\frac{1}{6} \simeq 7$



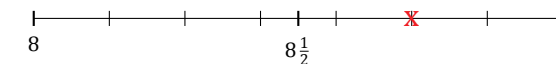
14. $6\frac{9}{10} \simeq 7$



16. $6\frac{4}{10} \simeq 6\frac{1}{2}$



18. $8\frac{5}{7} \simeq 8\frac{1}{2}$



20. $7\frac{1}{5} \simeq 7$

