

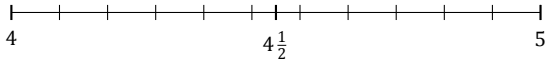
Redondear Números Mixtos (A)

Nombre: _____

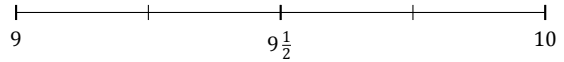
Fecha: _____

Redondee cada número mixto hasta la mitad más cercana. Redondee por exceso.

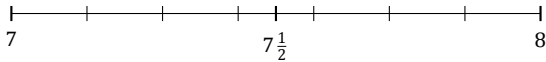
1. $4\frac{6}{11} \approx$



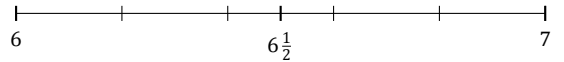
2. $9\frac{2}{4} \approx$



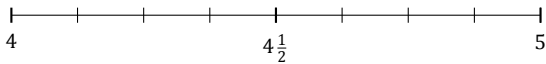
3. $7\frac{5}{7} \approx$



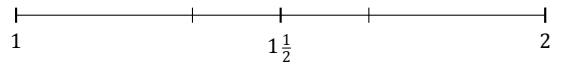
4. $6\frac{2}{5} \approx$



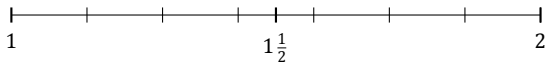
5. $4\frac{1}{8} \approx$



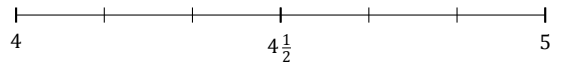
6. $1\frac{1}{3} \approx$



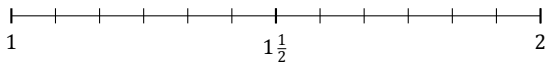
7. $1\frac{3}{7} \approx$



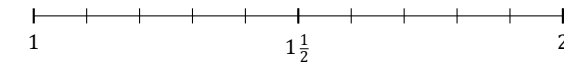
8. $4\frac{1}{6} \approx$



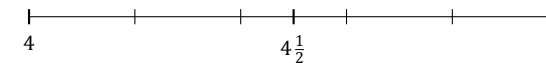
9. $1\frac{4}{12} \approx$



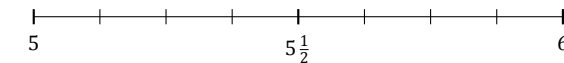
10. $1\frac{6}{10} \approx$



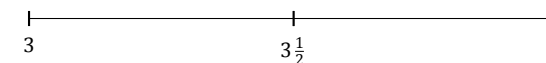
11. $4\frac{3}{5} \approx$



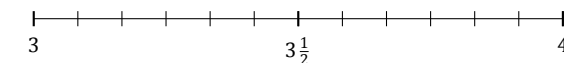
12. $5\frac{2}{8} \approx$



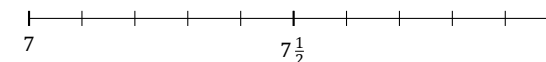
13. $3\frac{1}{2} \approx$



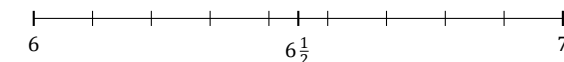
14. $3\frac{5}{12} \approx$



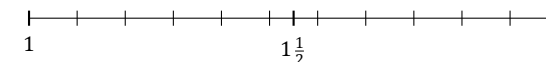
15. $7\frac{8}{10} \approx$



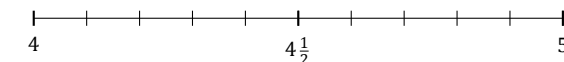
16. $6\frac{1}{9} \approx$



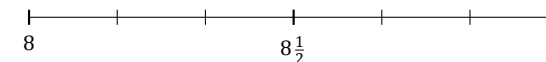
17. $1\frac{10}{11} \approx$



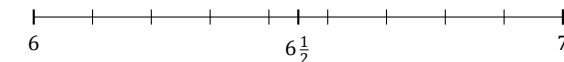
18. $4\frac{2}{10} \approx$



19. $8\frac{5}{6} \approx$



20. $6\frac{7}{9} \approx$



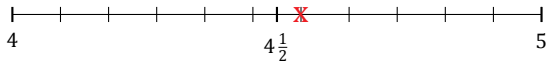
Redondear Números Mixtos (A) Respuestas

Nombre: _____

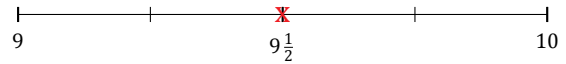
Fecha: _____

Redondee cada número mixto hasta la mitad más cercana. Redondee por exceso.

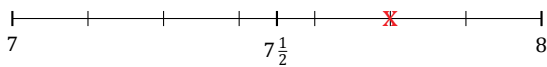
1. $4\frac{6}{11} \simeq 4\frac{1}{2}$



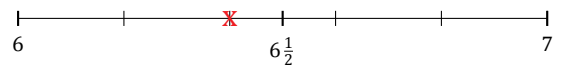
2. $9\frac{2}{4} \simeq 9\frac{1}{2}$



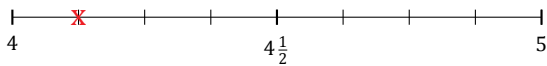
3. $7\frac{5}{7} \simeq 7\frac{1}{2}$



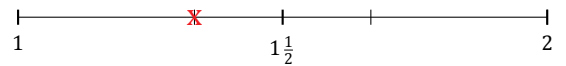
4. $6\frac{2}{5} \simeq 6\frac{1}{2}$



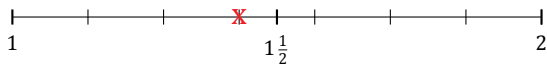
5. $4\frac{1}{8} \simeq 4$



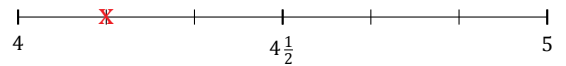
6. $1\frac{1}{3} \simeq 1\frac{1}{2}$



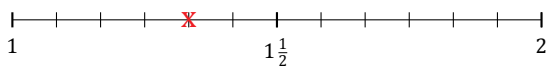
7. $1\frac{3}{7} \simeq 1\frac{1}{2}$



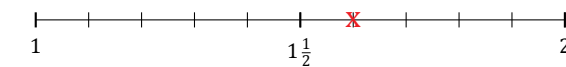
8. $4\frac{1}{6} \simeq 4$



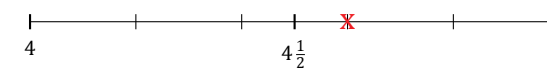
9. $1\frac{4}{12} \simeq 1\frac{1}{2}$



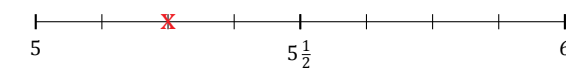
10. $1\frac{6}{10} \simeq 1\frac{1}{2}$



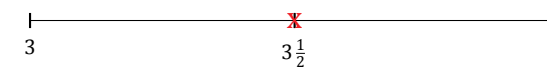
11. $4\frac{3}{5} \simeq 4\frac{1}{2}$



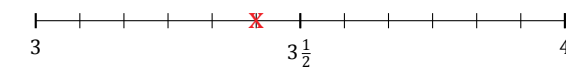
12. $5\frac{2}{8} \simeq 5\frac{1}{2}$



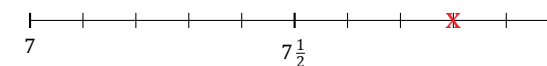
13. $3\frac{1}{2} \simeq 3\frac{1}{2}$



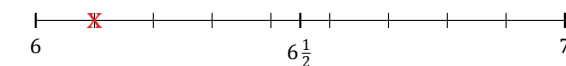
14. $3\frac{5}{12} \simeq 3\frac{1}{2}$



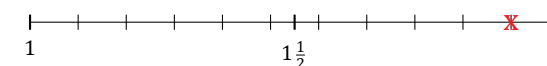
15. $7\frac{8}{10} \simeq 8$



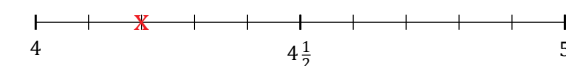
16. $6\frac{1}{9} \simeq 6$



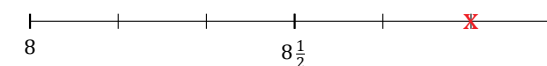
17. $1\frac{10}{11} \simeq 2$



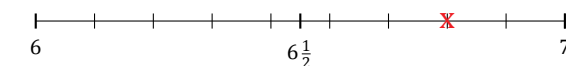
18. $4\frac{2}{10} \simeq 4$



19. $8\frac{5}{6} \simeq 9$



20. $6\frac{7}{9} \simeq 7$



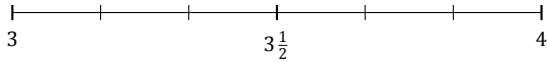
Redondear Números Mixtos (B)

Nombre: _____

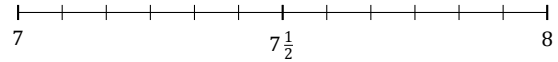
Fecha: _____

Redondee cada número mixto hasta la mitad más cercana. Redondee por exceso.

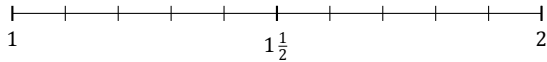
1. $3\frac{3}{6} \approx$



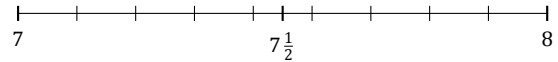
2. $7\frac{1}{12} \approx$



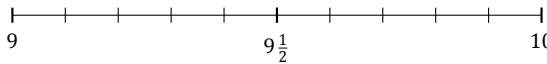
3. $1\frac{4}{10} \approx$



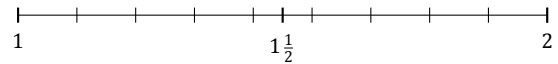
4. $7\frac{1}{9} \approx$



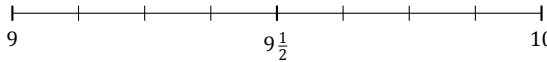
5. $9\frac{7}{10} \approx$



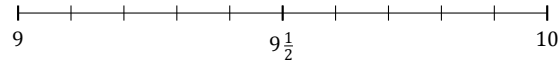
6. $1\frac{7}{9} \approx$



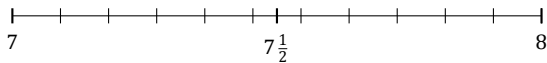
7. $9\frac{5}{8} \approx$



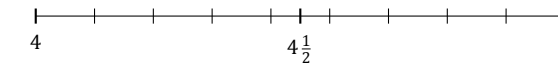
8. $9\frac{6}{10} \approx$



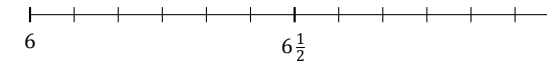
9. $7\frac{4}{11} \approx$



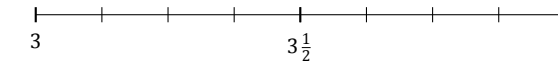
10. $4\frac{5}{9} \approx$



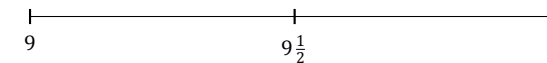
11. $6\frac{2}{12} \approx$



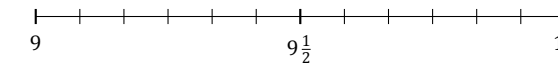
12. $3\frac{2}{8} \approx$



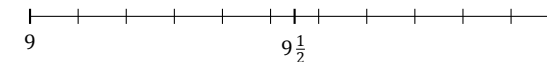
13. $9\frac{1}{2} \approx$



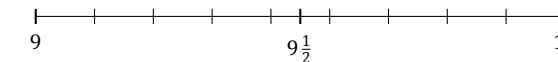
14. $9\frac{6}{12} \approx$



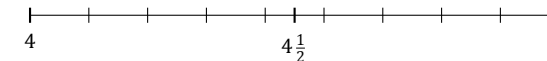
15. $9\frac{6}{11} \approx$



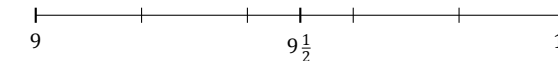
16. $9\frac{2}{9} \approx$



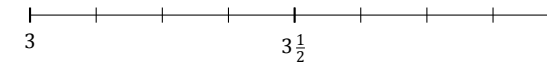
17. $4\frac{4}{9} \approx$



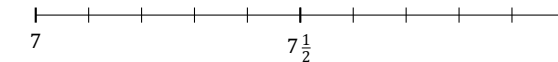
18. $9\frac{1}{5} \approx$



19. $3\frac{3}{8} \approx$



20. $7\frac{3}{10} \approx$



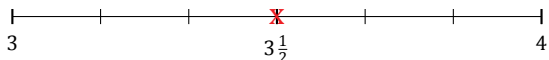
Redondear Números Mixtos (B) Respuestas

Nombre: _____

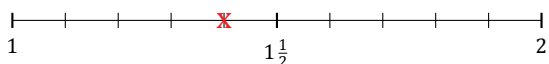
Fecha: _____

Redondee cada número mixto hasta la mitad más cercana. Redondee por exceso.

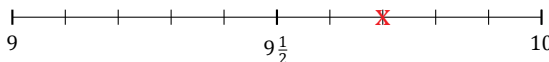
1. $3\frac{3}{6} \simeq 3\frac{1}{2}$



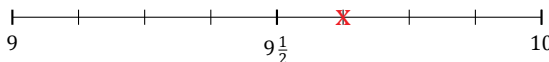
3. $1\frac{4}{10} \simeq 1\frac{1}{2}$



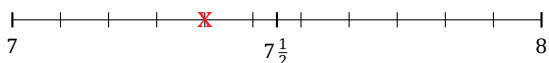
5. $9\frac{7}{10} \simeq 9\frac{1}{2}$



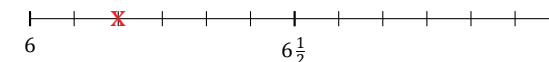
7. $9\frac{5}{8} \simeq 9\frac{1}{2}$



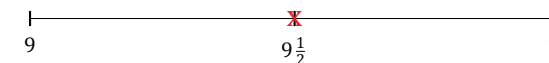
9. $7\frac{4}{11} \simeq 7\frac{1}{2}$



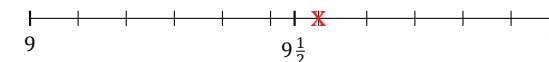
11. $6\frac{2}{12} \simeq 6$



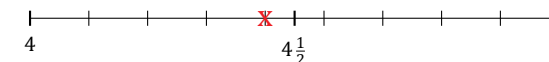
13. $9\frac{1}{2} \simeq 9\frac{1}{2}$



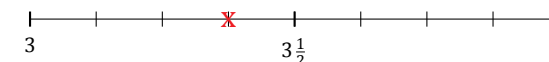
15. $9\frac{6}{11} \simeq 9\frac{1}{2}$



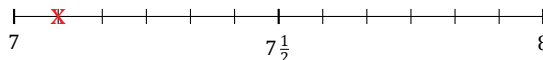
17. $4\frac{4}{9} \simeq 4\frac{1}{2}$



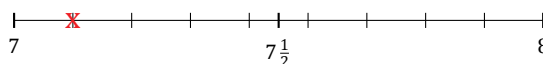
19. $3\frac{3}{8} \simeq 3\frac{1}{2}$



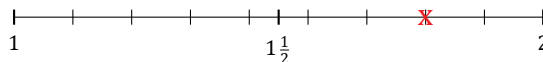
2. $7\frac{1}{12} \simeq 7$



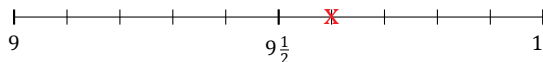
4. $7\frac{1}{9} \simeq 7$



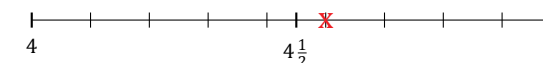
6. $1\frac{7}{9} \simeq 2$



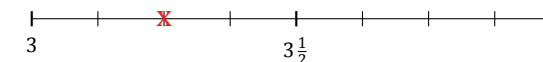
8. $9\frac{6}{10} \simeq 9\frac{1}{2}$



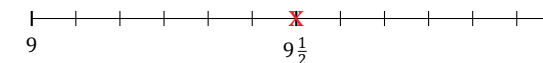
10. $4\frac{5}{9} \simeq 4\frac{1}{2}$



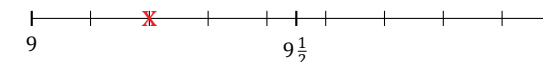
12. $3\frac{2}{8} \simeq 3\frac{1}{2}$



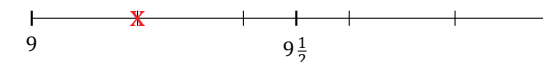
14. $9\frac{6}{12} \simeq 9\frac{1}{2}$



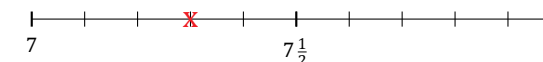
16. $9\frac{2}{9} \simeq 9$



18. $9\frac{1}{5} \simeq 9$



20. $7\frac{3}{10} \simeq 7\frac{1}{2}$



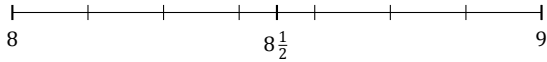
Redondear Números Mixtos (C)

Nombre: _____

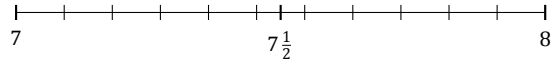
Fecha: _____

Redondee cada número mixto hasta la mitad más cercana. Redondee por exceso.

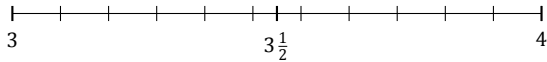
1. $8\frac{6}{7} \approx$



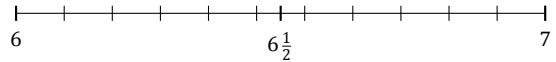
2. $7\frac{10}{11} \approx$



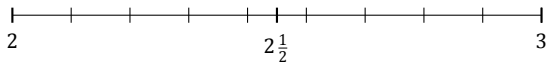
3. $3\frac{5}{11} \approx$



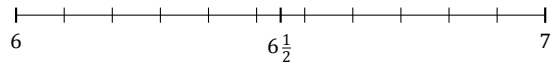
4. $6\frac{8}{11} \approx$



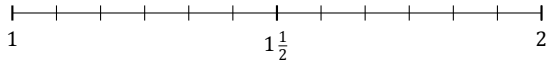
5. $2\frac{4}{9} \approx$



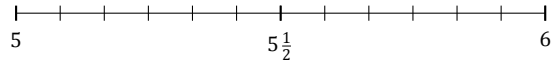
6. $6\frac{3}{11} \approx$



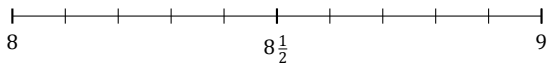
7. $1\frac{8}{12} \approx$



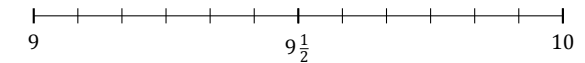
8. $5\frac{5}{12} \approx$



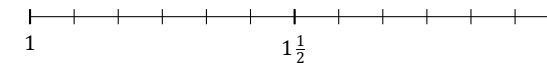
9. $8\frac{5}{10} \approx$



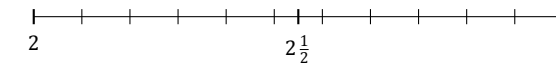
10. $9\frac{1}{12} \approx$



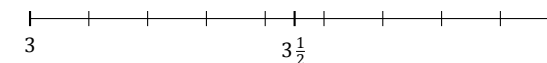
11. $1\frac{6}{12} \approx$



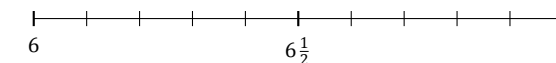
12. $2\frac{2}{11} \approx$



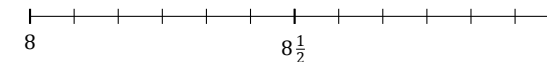
13. $3\frac{1}{9} \approx$



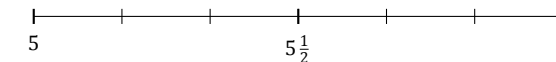
14. $6\frac{8}{10} \approx$



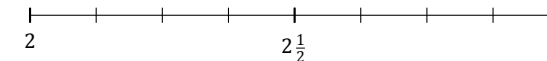
15. $8\frac{11}{12} \approx$



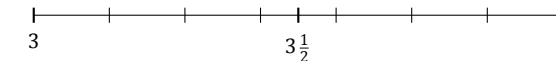
16. $5\frac{4}{6} \approx$



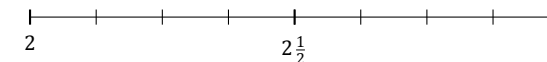
17. $2\frac{4}{8} \approx$



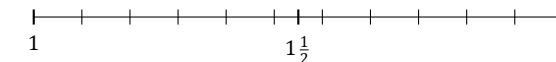
18. $3\frac{1}{7} \approx$



19. $2\frac{1}{8} \approx$



20. $1\frac{4}{11} \approx$



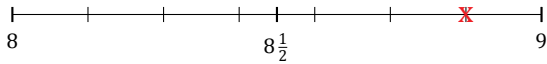
Redondear Números Mixtos (C) Respuestas

Nombre: _____

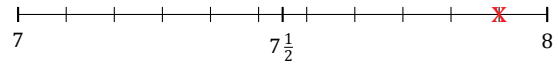
Fecha: _____

Redondee cada número mixto hasta la mitad más cercana. Redondee por exceso.

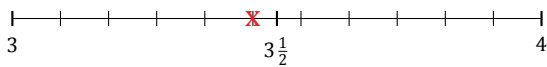
1. $8\frac{6}{7} \simeq 9$



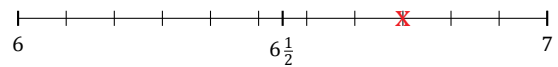
2. $7\frac{10}{11} \simeq 8$



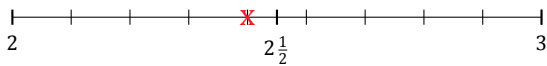
3. $3\frac{5}{11} \simeq 3\frac{1}{2}$



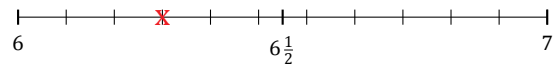
4. $6\frac{8}{11} \simeq 6\frac{1}{2}$



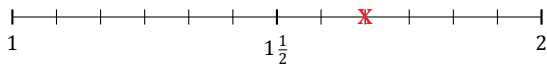
5. $2\frac{4}{9} \simeq 2\frac{1}{2}$



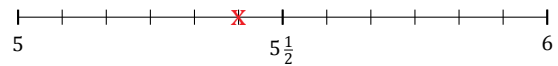
6. $6\frac{3}{11} \simeq 6\frac{1}{2}$



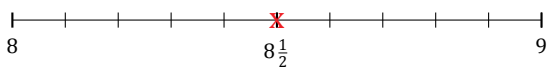
7. $1\frac{8}{12} \simeq 1\frac{1}{2}$



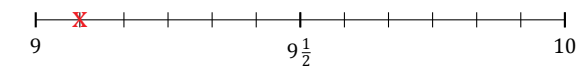
8. $5\frac{5}{12} \simeq 5\frac{1}{2}$



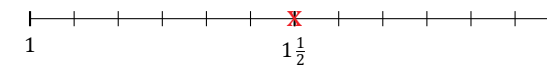
9. $8\frac{5}{10} \simeq 8\frac{1}{2}$



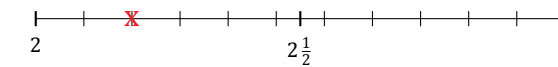
10. $9\frac{1}{12} \simeq 9$



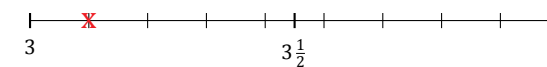
11. $1\frac{6}{12} \simeq 1\frac{1}{2}$



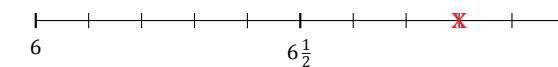
12. $2\frac{2}{11} \simeq 2$



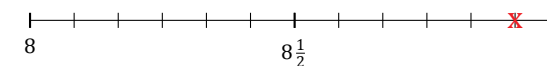
13. $3\frac{1}{9} \simeq 3$



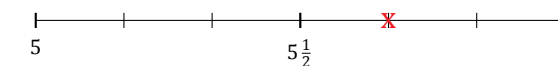
14. $6\frac{8}{10} \simeq 7$



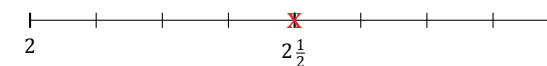
15. $8\frac{11}{12} \simeq 9$



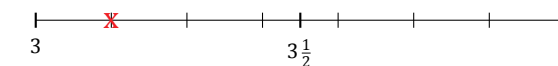
16. $5\frac{4}{6} \simeq 5\frac{1}{2}$



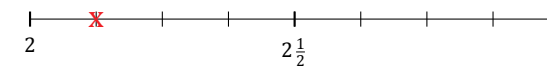
17. $2\frac{4}{8} \simeq 2\frac{1}{2}$



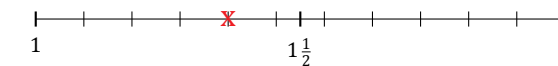
18. $3\frac{1}{7} \simeq 3$



19. $2\frac{1}{8} \simeq 2$



20. $1\frac{4}{11} \simeq 1\frac{1}{2}$



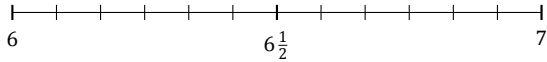
Redondear Números Mixtos (D)

Nombre: _____

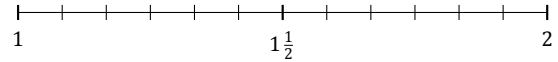
Fecha: _____

Redondee cada número mixto hasta la mitad más cercana. Redondee por exceso.

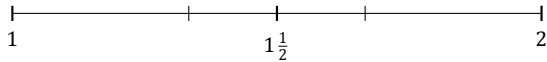
1. $6\frac{6}{12} \approx$



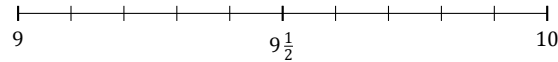
2. $1\frac{10}{12} \approx$



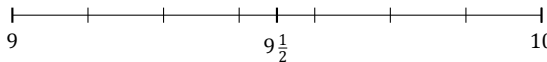
3. $1\frac{2}{3} \approx$



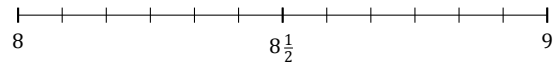
4. $9\frac{6}{10} \approx$



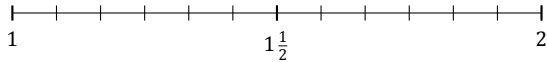
5. $9\frac{3}{7} \approx$



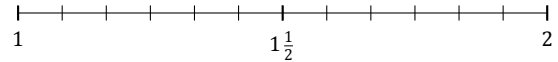
6. $8\frac{7}{12} \approx$



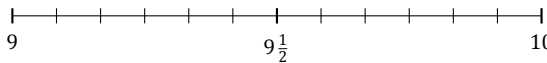
7. $1\frac{3}{12} \approx$



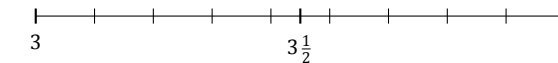
8. $1\frac{8}{12} \approx$



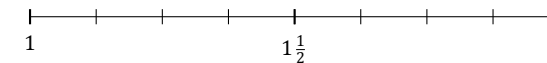
9. $9\frac{9}{12} \approx$



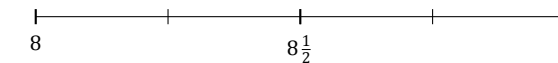
10. $3\frac{5}{9} \approx$



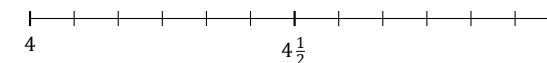
11. $1\frac{6}{8} \approx$



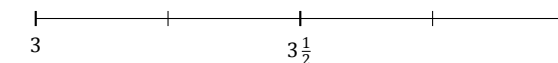
12. $8\frac{3}{4} \approx$



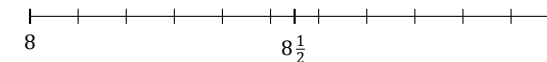
13. $4\frac{11}{12} \approx$



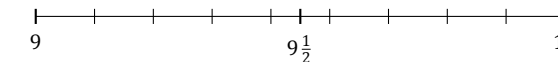
14. $3\frac{1}{4} \approx$



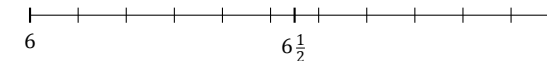
15. $8\frac{4}{11} \approx$



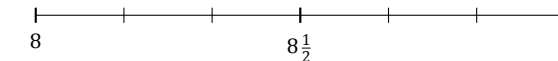
16. $9\frac{3}{9} \approx$



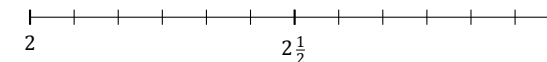
17. $6\frac{3}{11} \approx$



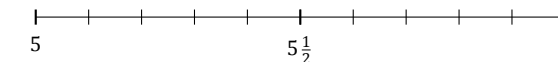
18. $8\frac{3}{6} \approx$



19. $2\frac{5}{12} \approx$



20. $5\frac{4}{10} \approx$



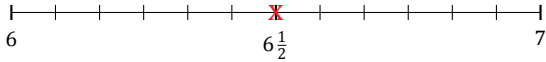
Redondear Números Mixtos (D) Respuestas

Nombre: _____

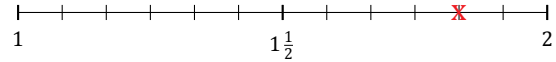
Fecha: _____

Redondee cada número mixto hasta la mitad más cercana. Redondee por exceso.

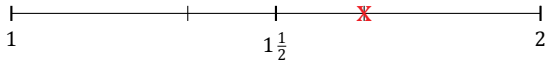
1. $6\frac{6}{12} \approx 6\frac{1}{2}$



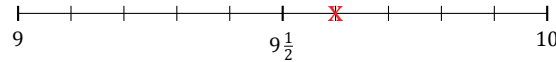
2. $1\frac{10}{12} \approx 2$



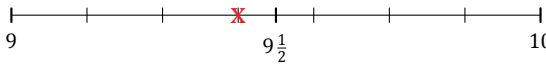
3. $1\frac{2}{3} \approx 1\frac{1}{2}$



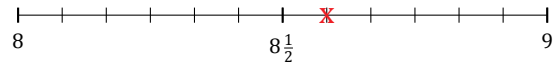
4. $9\frac{6}{10} \approx 9\frac{1}{2}$



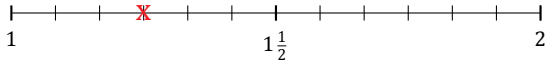
5. $9\frac{3}{7} \approx 9\frac{1}{2}$



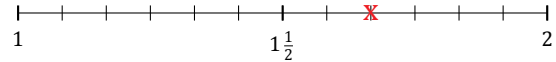
6. $8\frac{7}{12} \approx 8\frac{1}{2}$



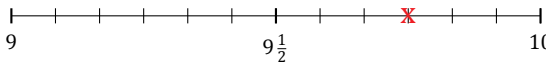
7. $1\frac{3}{12} \approx 1\frac{1}{2}$



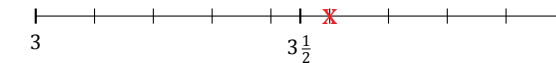
8. $1\frac{8}{12} \approx 1\frac{1}{2}$



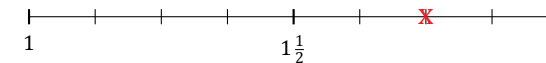
9. $9\frac{9}{12} \approx 10$



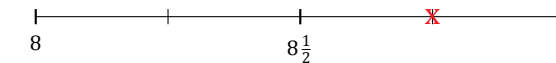
10. $3\frac{5}{9} \approx 3\frac{1}{2}$



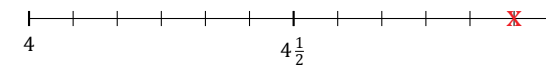
11. $1\frac{6}{8} \approx 2$



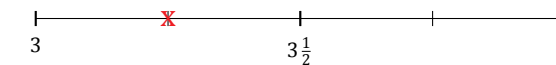
12. $8\frac{3}{4} \approx 9$



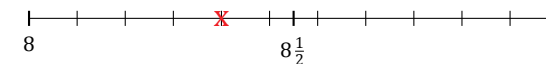
13. $4\frac{11}{12} \approx 5$



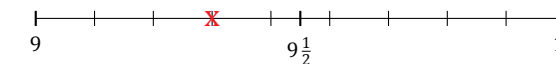
14. $3\frac{1}{4} \approx 3\frac{1}{2}$



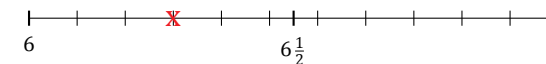
15. $8\frac{4}{11} \approx 8\frac{1}{2}$



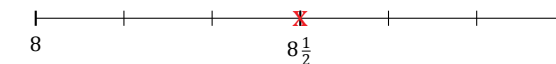
16. $9\frac{3}{9} \approx 9\frac{1}{2}$



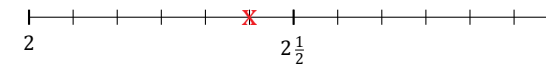
17. $6\frac{3}{11} \approx 6\frac{1}{2}$



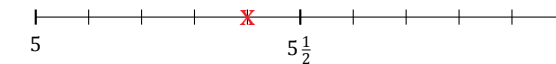
18. $8\frac{3}{6} \approx 8\frac{1}{2}$



19. $2\frac{5}{12} \approx 2\frac{1}{2}$



20. $5\frac{4}{10} \approx 5\frac{1}{2}$



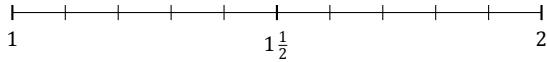
Redondear Números Mixtos (E)

Nombre: _____

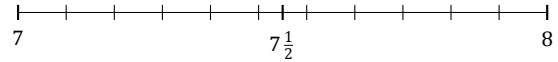
Fecha: _____

Redondee cada número mixto hasta la mitad más cercana. Redondee por exceso.

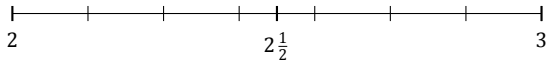
1. $1\frac{3}{10} \approx$



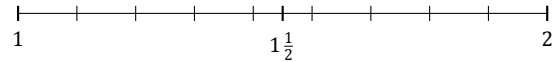
2. $7\frac{9}{11} \approx$



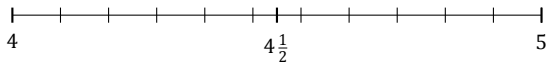
3. $2\frac{5}{7} \approx$



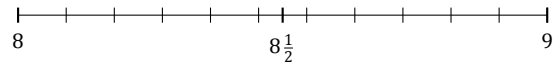
4. $1\frac{3}{9} \approx$



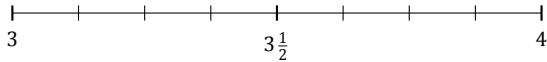
5. $4\frac{8}{11} \approx$



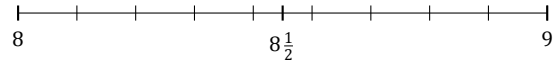
6. $8\frac{2}{11} \approx$



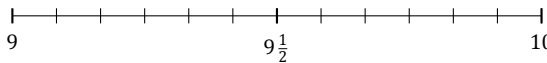
7. $3\frac{6}{8} \approx$



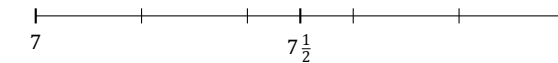
8. $8\frac{4}{9} \approx$



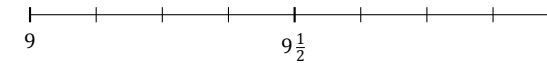
9. $9\frac{8}{12} \approx$



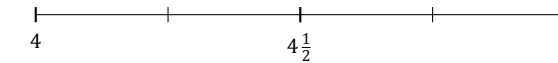
10. $7\frac{2}{5} \approx$



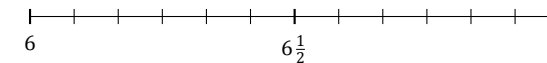
11. $9\frac{1}{8} \approx$



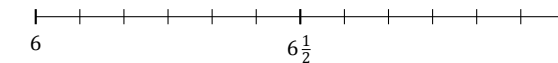
12. $4\frac{1}{4} \approx$



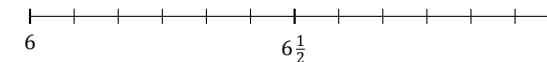
13. $6\frac{11}{12} \approx$



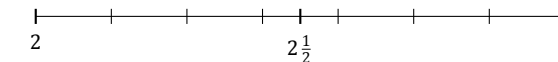
14. $6\frac{5}{12} \approx$



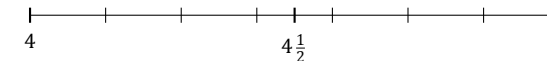
15. $6\frac{9}{12} \approx$



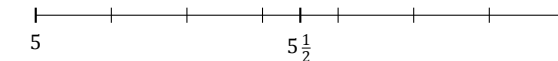
16. $2\frac{2}{7} \approx$



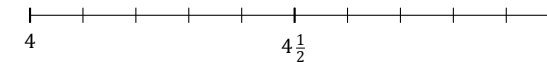
17. $4\frac{1}{7} \approx$



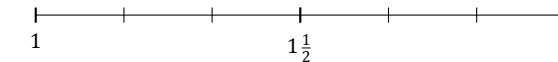
18. $5\frac{3}{7} \approx$



19. $4\frac{5}{10} \approx$



20. $1\frac{3}{6} \approx$



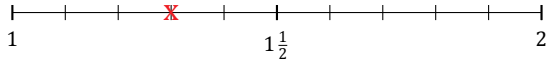
Redondear Números Mixtos (E) Respuestas

Nombre: _____

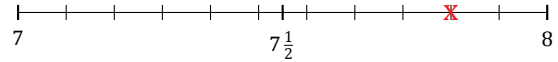
Fecha: _____

Redondee cada número mixto hasta la mitad más cercana. Redondee por exceso.

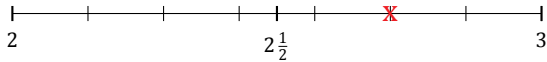
1. $1\frac{3}{10} \simeq 1\frac{1}{2}$



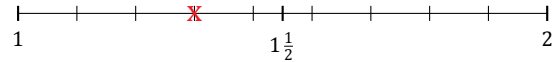
2. $7\frac{9}{11} \simeq 8$



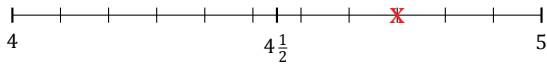
3. $2\frac{5}{7} \simeq 2\frac{1}{2}$



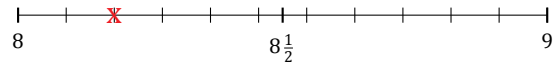
4. $1\frac{3}{9} \simeq 1\frac{1}{2}$



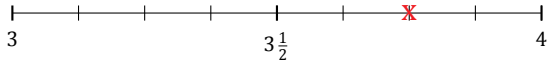
5. $4\frac{8}{11} \simeq 4\frac{1}{2}$



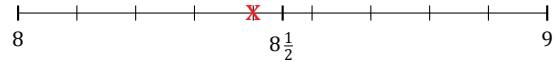
6. $8\frac{2}{11} \simeq 8$



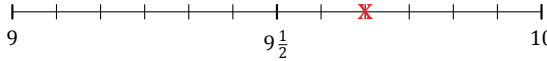
7. $3\frac{6}{8} \simeq 4$



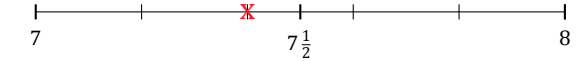
8. $8\frac{4}{9} \simeq 8\frac{1}{2}$



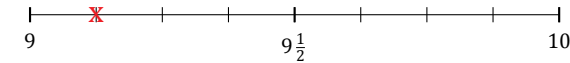
9. $9\frac{8}{12} \simeq 9\frac{1}{2}$



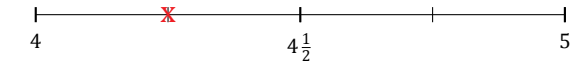
10. $7\frac{2}{5} \simeq 7\frac{1}{2}$



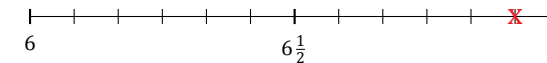
11. $9\frac{1}{8} \simeq 9$



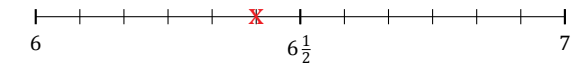
12. $4\frac{1}{4} \simeq 4\frac{1}{2}$



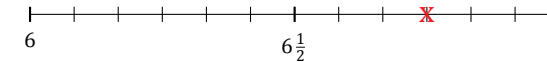
13. $6\frac{11}{12} \simeq 7$



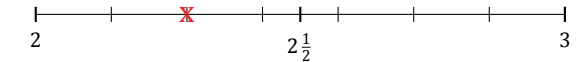
14. $6\frac{5}{12} \simeq 6\frac{1}{2}$



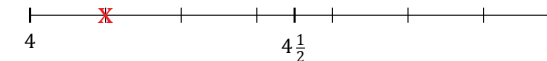
15. $6\frac{9}{12} \simeq 7$



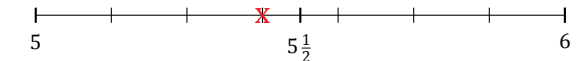
16. $2\frac{2}{7} \simeq 2\frac{1}{2}$



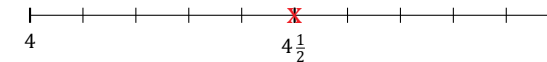
17. $4\frac{1}{7} \simeq 4$



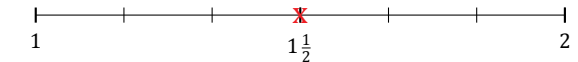
18. $5\frac{3}{7} \simeq 5\frac{1}{2}$



19. $4\frac{5}{10} \simeq 4\frac{1}{2}$



20. $1\frac{3}{6} \simeq 1\frac{1}{2}$



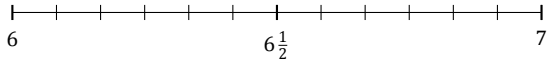
Redondear Números Mixtos (F)

Nombre: _____

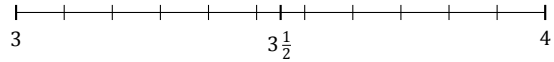
Fecha: _____

Redondee cada número mixto hasta la mitad más cercana. Redondee por exceso.

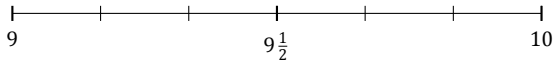
1. $6\frac{10}{12} \approx$



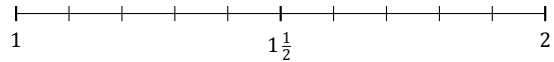
2. $3\frac{9}{11} \approx$



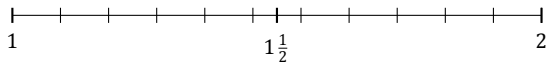
3. $9\frac{3}{6} \approx$



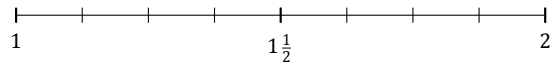
4. $1\frac{5}{10} \approx$



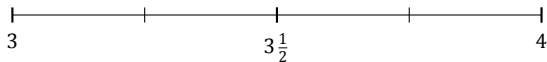
5. $1\frac{5}{11} \approx$



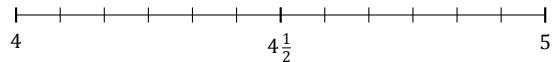
6. $1\frac{4}{8} \approx$



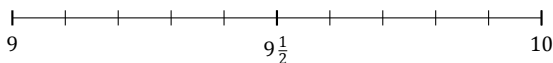
7. $3\frac{3}{4} \approx$



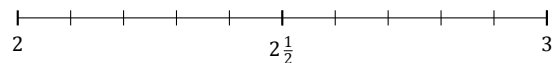
8. $4\frac{6}{12} \approx$



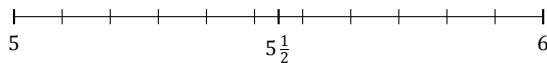
9. $9\frac{8}{10} \approx$



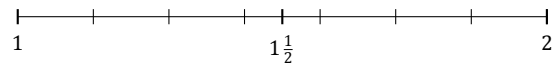
10. $2\frac{3}{10} \approx$



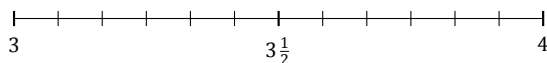
11. $5\frac{7}{11} \approx$



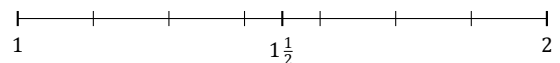
12. $1\frac{2}{7} \approx$



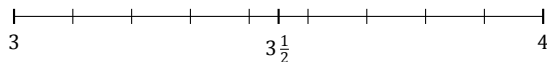
13. $3\frac{3}{12} \approx$



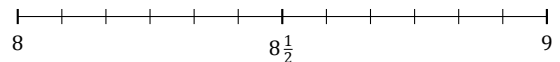
14. $1\frac{4}{7} \approx$



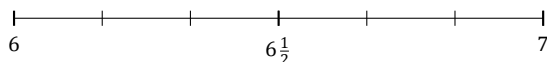
15. $3\frac{1}{9} \approx$



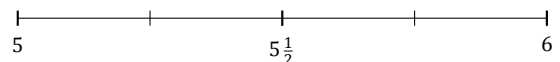
16. $8\frac{5}{12} \approx$



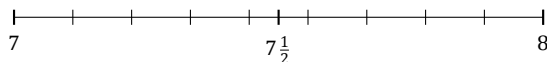
17. $6\frac{2}{6} \approx$



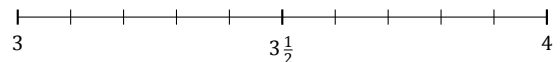
18. $5\frac{1}{4} \approx$



19. $7\frac{5}{9} \approx$



20. $3\frac{4}{10} \approx$



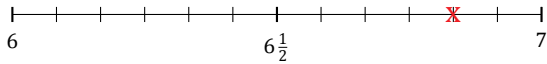
Redondear Números Mixtos (F) Respuestas

Nombre: _____

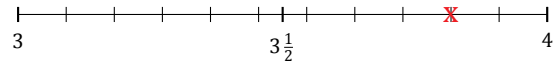
Fecha: _____

Redondee cada número mixto hasta la mitad más cercana. Redondee por exceso.

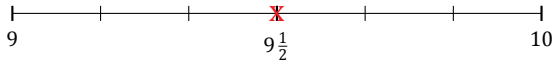
1. $6\frac{10}{12} \simeq 7$



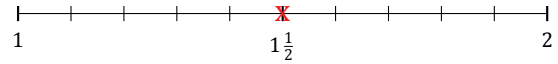
2. $3\frac{9}{11} \simeq 4$



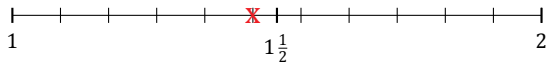
3. $9\frac{3}{6} \simeq 9\frac{1}{2}$



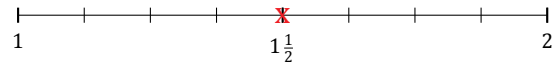
4. $1\frac{5}{10} \simeq 1\frac{1}{2}$



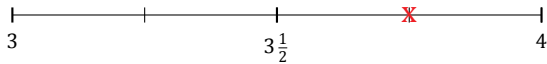
5. $1\frac{5}{11} \simeq 1\frac{1}{2}$



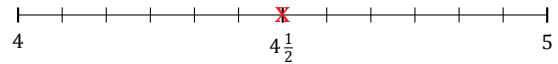
6. $1\frac{4}{8} \simeq 1\frac{1}{2}$



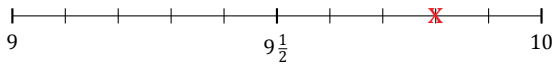
7. $3\frac{3}{4} \simeq 4$



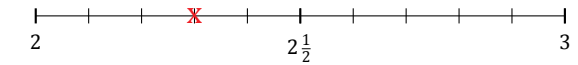
8. $4\frac{6}{12} \simeq 4\frac{1}{2}$



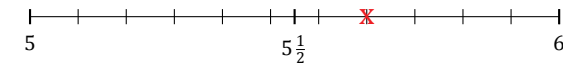
9. $9\frac{8}{10} \simeq 10$



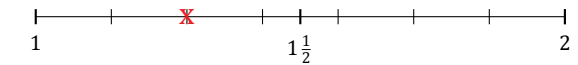
10. $2\frac{3}{10} \simeq 2\frac{1}{2}$



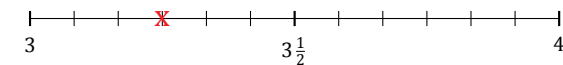
11. $5\frac{7}{11} \simeq 5\frac{1}{2}$



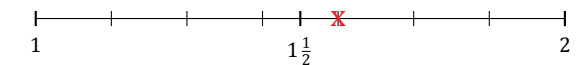
12. $1\frac{2}{7} \simeq 1\frac{1}{2}$



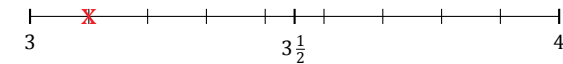
13. $3\frac{3}{12} \simeq 3\frac{1}{2}$



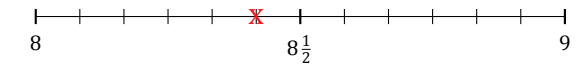
14. $1\frac{4}{7} \simeq 1\frac{1}{2}$



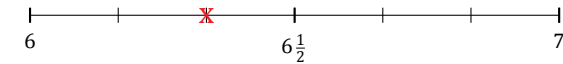
15. $3\frac{1}{9} \simeq 3$



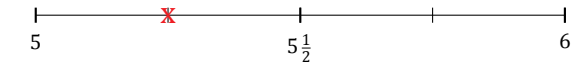
16. $8\frac{5}{12} \simeq 8\frac{1}{2}$



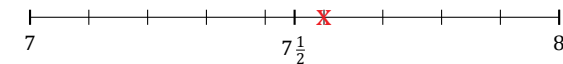
17. $6\frac{2}{6} \simeq 6\frac{1}{2}$



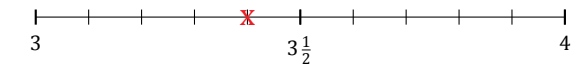
18. $5\frac{1}{4} \simeq 5\frac{1}{2}$



19. $7\frac{5}{9} \simeq 7\frac{1}{2}$



20. $3\frac{4}{10} \simeq 3\frac{1}{2}$



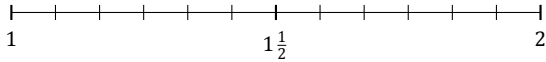
Redondear Números Mixtos (G)

Nombre: _____

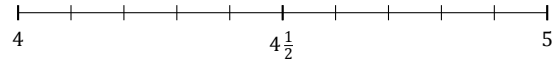
Fecha: _____

Redondee cada número mixto hasta la mitad más cercana. Redondee por exceso.

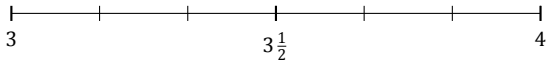
1. $1\frac{1}{12} \approx$



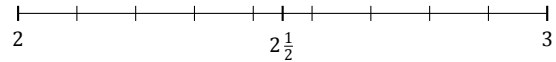
2. $4\frac{5}{10} \approx$



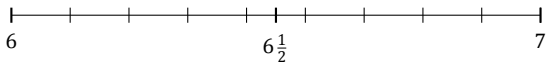
3. $3\frac{3}{6} \approx$



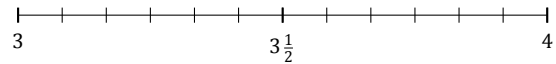
4. $2\frac{8}{9} \approx$



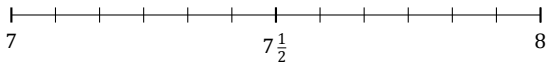
5. $6\frac{3}{9} \approx$



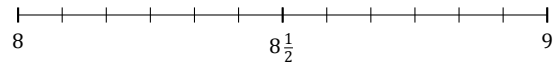
6. $3\frac{11}{12} \approx$



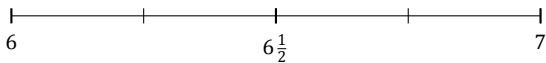
7. $7\frac{4}{12} \approx$



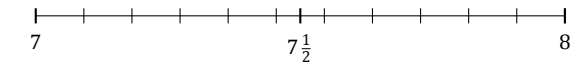
8. $8\frac{3}{12} \approx$



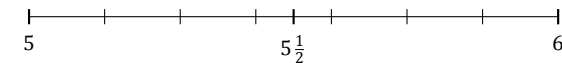
9. $6\frac{1}{4} \approx$



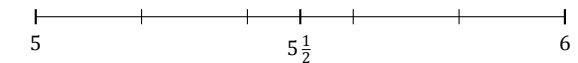
10. $7\frac{1}{11} \approx$



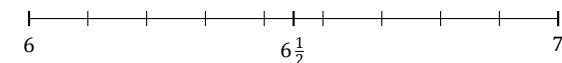
11. $5\frac{4}{7} \approx$



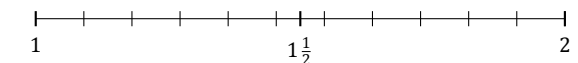
12. $5\frac{1}{5} \approx$



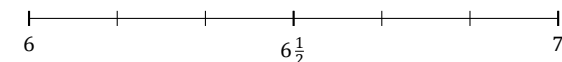
13. $6\frac{2}{9} \approx$



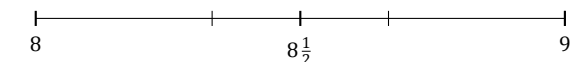
14. $1\frac{5}{11} \approx$



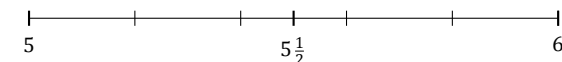
15. $6\frac{2}{6} \approx$



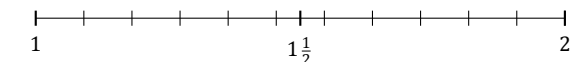
16. $8\frac{1}{3} \approx$



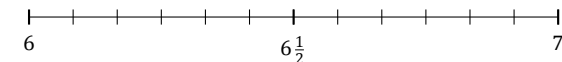
17. $5\frac{2}{5} \approx$



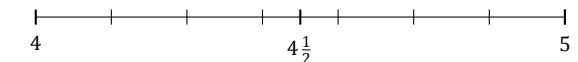
18. $1\frac{9}{11} \approx$



19. $6\frac{8}{12} \approx$



20. $4\frac{6}{7} \approx$



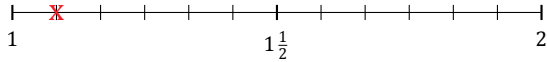
Redondear Números Mixtos (G) Respuestas

Nombre: _____

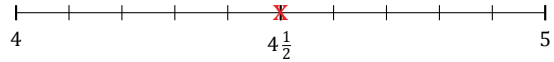
Fecha: _____

Redondee cada número mixto hasta la mitad más cercana. Redondee por exceso.

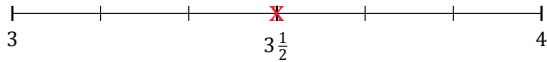
1. $1\frac{1}{12} \simeq 1$



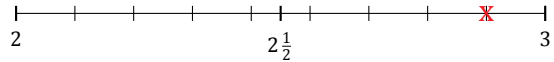
2. $4\frac{5}{10} \simeq 4\frac{1}{2}$



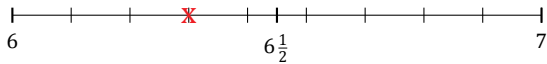
3. $3\frac{3}{6} \simeq 3\frac{1}{2}$



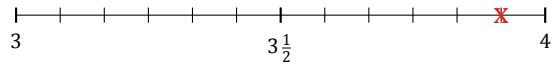
4. $2\frac{8}{9} \simeq 3$



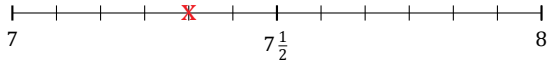
5. $6\frac{3}{9} \simeq 6\frac{1}{2}$



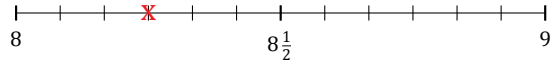
6. $3\frac{11}{12} \simeq 4$



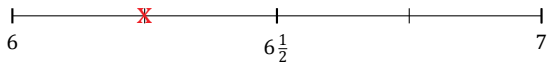
7. $7\frac{4}{12} \simeq 7\frac{1}{2}$



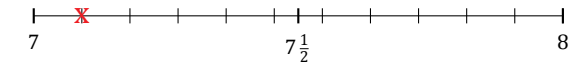
8. $8\frac{3}{12} \simeq 8\frac{1}{2}$



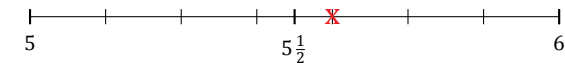
9. $6\frac{1}{4} \simeq 6\frac{1}{2}$



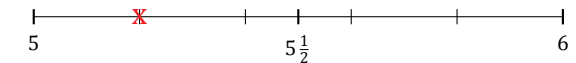
10. $7\frac{1}{11} \simeq 7$



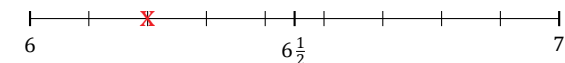
11. $5\frac{4}{7} \simeq 5\frac{1}{2}$



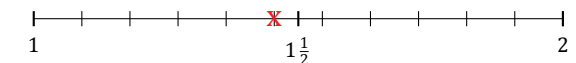
12. $5\frac{1}{5} \simeq 5$



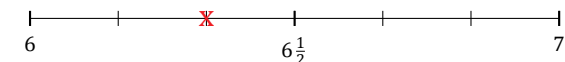
13. $6\frac{2}{9} \simeq 6$



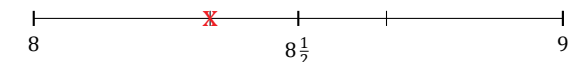
14. $1\frac{5}{11} \simeq 1\frac{1}{2}$



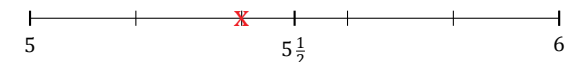
15. $6\frac{2}{6} \simeq 6\frac{1}{2}$



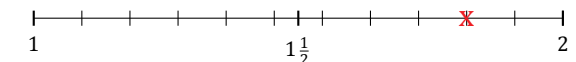
16. $8\frac{1}{3} \simeq 8\frac{1}{2}$



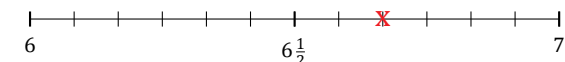
17. $5\frac{2}{5} \simeq 5\frac{1}{2}$



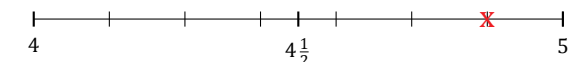
18. $1\frac{9}{11} \simeq 2$



19. $6\frac{8}{12} \simeq 6\frac{1}{2}$



20. $4\frac{6}{7} \simeq 5$



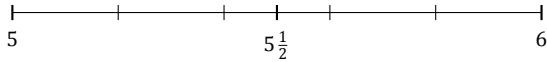
Redondear Números Mixtos (H)

Nombre: _____

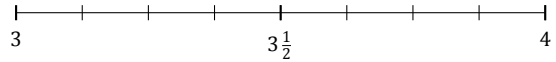
Fecha: _____

Redondee cada número mixto hasta la mitad más cercana. Redondee por exceso.

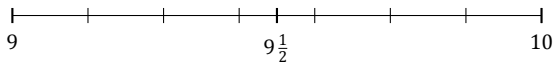
1. $5\frac{2}{5} \approx$



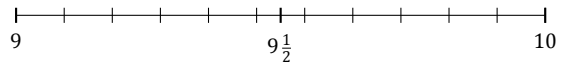
2. $3\frac{5}{8} \approx$



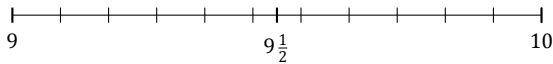
3. $9\frac{5}{7} \approx$



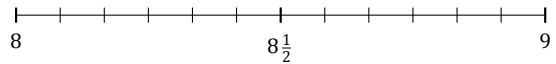
4. $9\frac{6}{11} \approx$



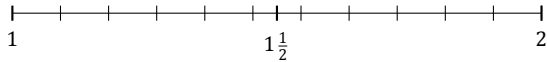
5. $9\frac{8}{11} \approx$



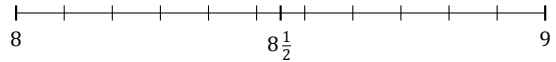
6. $8\frac{2}{12} \approx$



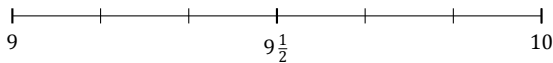
7. $1\frac{5}{11} \approx$



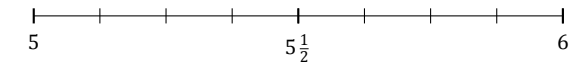
8. $8\frac{2}{11} \approx$



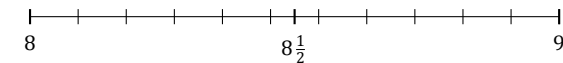
9. $9\frac{2}{6} \approx$



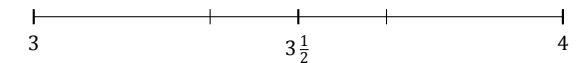
10. $5\frac{6}{8} \approx$



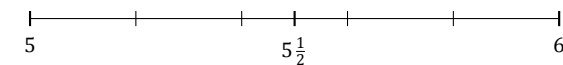
11. $8\frac{3}{11} \approx$



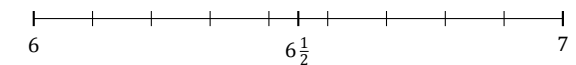
12. $3\frac{2}{3} \approx$



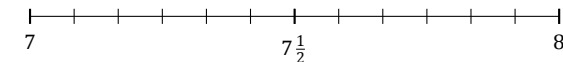
13. $5\frac{3}{5} \approx$



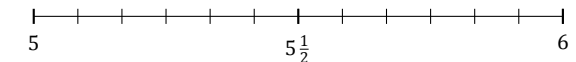
14. $6\frac{1}{9} \approx$



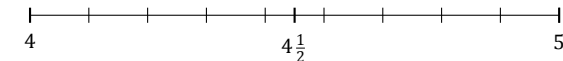
15. $7\frac{3}{12} \approx$



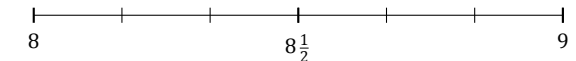
16. $5\frac{10}{12} \approx$



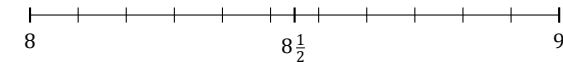
17. $4\frac{2}{9} \approx$



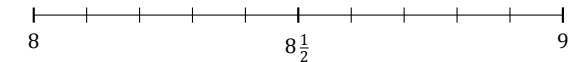
18. $8\frac{4}{6} \approx$



19. $8\frac{9}{11} \approx$



20. $8\frac{6}{10} \approx$



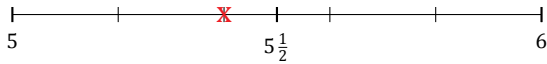
Redondear Números Mixtos (H) Respuestas

Nombre: _____

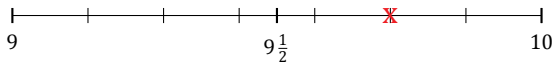
Fecha: _____

Redondee cada número mixto hasta la mitad más cercana. Redondee por exceso.

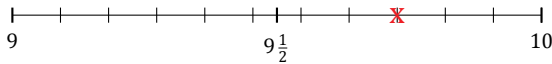
1. $5\frac{2}{5} \approx 5\frac{1}{2}$



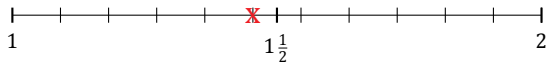
3. $9\frac{5}{7} \approx 9\frac{1}{2}$



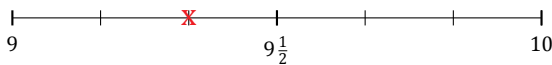
5. $9\frac{8}{11} \approx 9\frac{1}{2}$



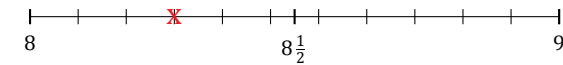
7. $1\frac{5}{11} \approx 1\frac{1}{2}$



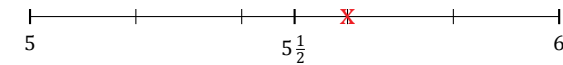
9. $9\frac{2}{6} \approx 9\frac{1}{2}$



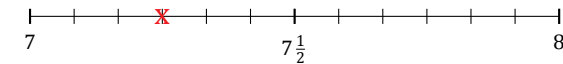
11. $8\frac{3}{11} \approx 8\frac{1}{2}$



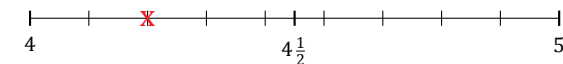
13. $5\frac{3}{5} \approx 5\frac{1}{2}$



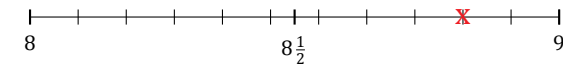
15. $7\frac{3}{12} \approx 7\frac{1}{2}$



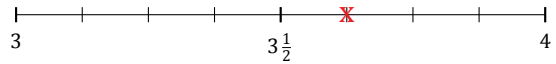
17. $4\frac{2}{9} \approx 4$



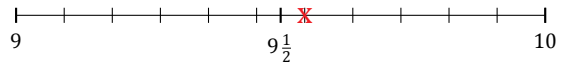
19. $8\frac{9}{11} \approx 9$



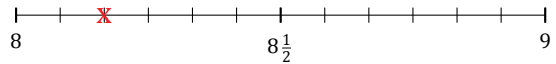
2. $3\frac{5}{8} \approx 3\frac{1}{2}$



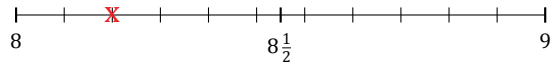
4. $9\frac{6}{11} \approx 9\frac{1}{2}$



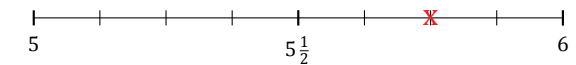
6. $8\frac{2}{12} \approx 8$



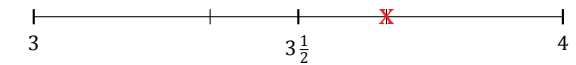
8. $8\frac{2}{11} \approx 8$



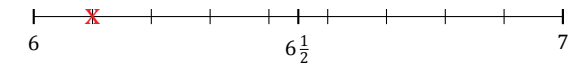
10. $5\frac{6}{8} \approx 6$



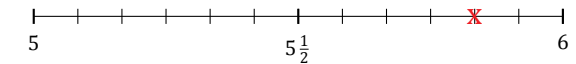
12. $3\frac{2}{3} \approx 3\frac{1}{2}$



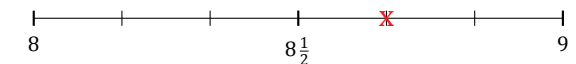
14. $6\frac{1}{9} \approx 6$



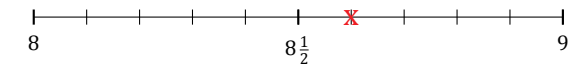
16. $5\frac{10}{12} \approx 6$



18. $8\frac{4}{6} \approx 8\frac{1}{2}$



20. $8\frac{6}{10} \approx 8\frac{1}{2}$



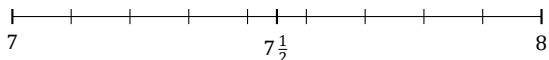
Redondear Números Mixtos (I)

Nombre: _____

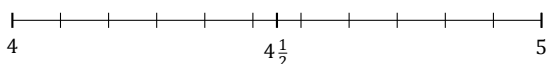
Fecha: _____

Redondee cada número mixto hasta la mitad más cercana. Redondee por exceso.

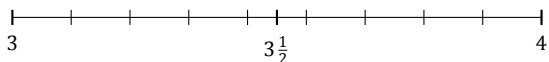
1. $7\frac{4}{9} \approx$



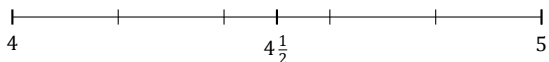
3. $4\frac{10}{11} \approx$



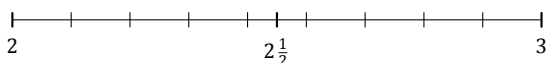
5. $3\frac{5}{9} \approx$



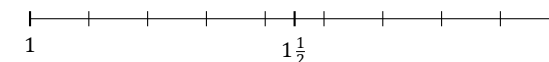
7. $4\frac{4}{5} \approx$



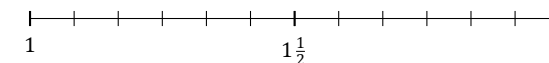
9. $2\frac{7}{9} \approx$



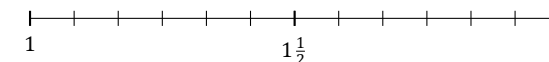
11. $1\frac{6}{9} \approx$



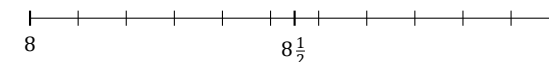
13. $1\frac{10}{12} \approx$



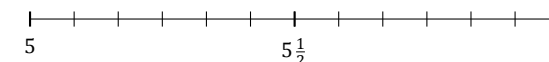
15. $1\frac{6}{12} \approx$



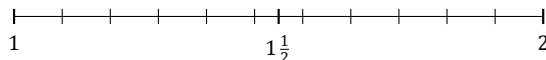
17. $8\frac{7}{11} \approx$



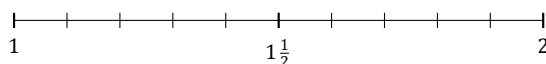
19. $5\frac{2}{12} \approx$



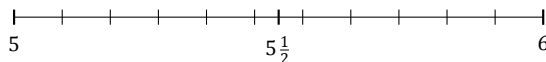
2. $1\frac{3}{11} \approx$



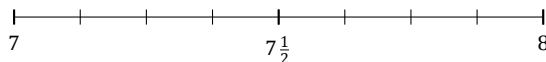
4. $1\frac{7}{10} \approx$



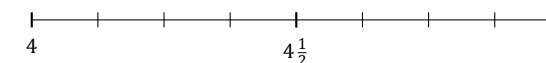
6. $5\frac{2}{11} \approx$



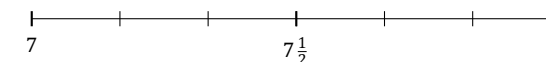
8. $7\frac{6}{8} \approx$



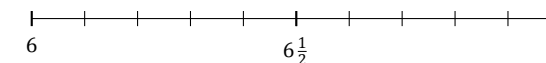
10. $4\frac{2}{8} \approx$



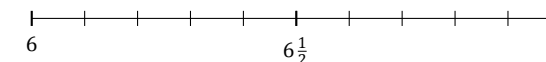
12. $7\frac{1}{6} \approx$



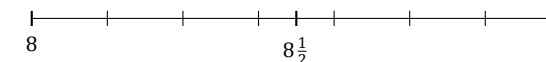
14. $6\frac{9}{10} \approx$



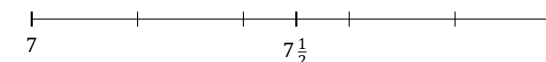
16. $6\frac{4}{10} \approx$



18. $8\frac{5}{7} \approx$



20. $7\frac{1}{5} \approx$



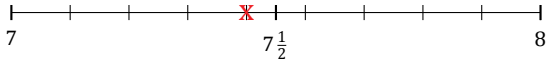
Redondear Números Mixtos (I) Respuestas

Nombre: _____

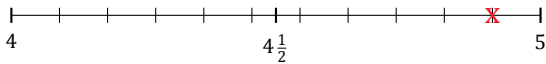
Fecha: _____

Redondee cada número mixto hasta la mitad más cercana. Redondee por exceso.

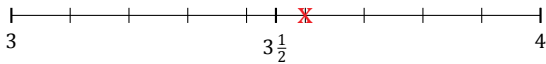
1. $7\frac{4}{9} \simeq 7\frac{1}{2}$



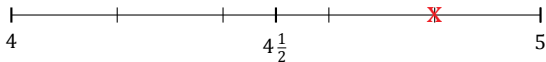
3. $4\frac{10}{11} \simeq 5$



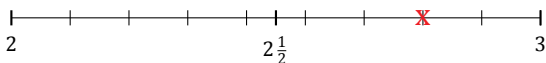
5. $3\frac{5}{9} \simeq 3\frac{1}{2}$



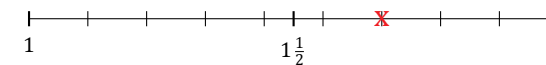
7. $4\frac{4}{5} \simeq 5$



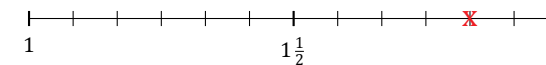
9. $2\frac{7}{9} \simeq 3$



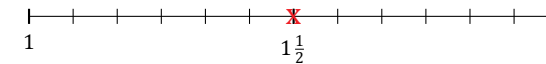
11. $1\frac{6}{9} \simeq 1\frac{1}{2}$



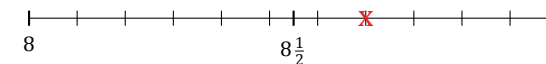
13. $1\frac{10}{12} \simeq 2$



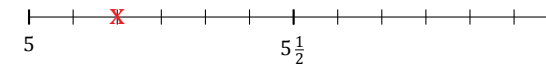
15. $1\frac{6}{12} \simeq 1\frac{1}{2}$



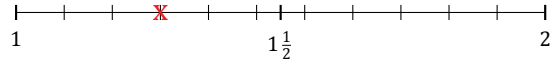
17. $8\frac{7}{11} \simeq 8\frac{1}{2}$



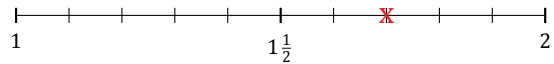
19. $5\frac{2}{12} \simeq 5$



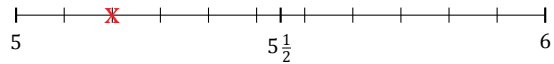
2. $1\frac{3}{11} \simeq 1\frac{1}{2}$



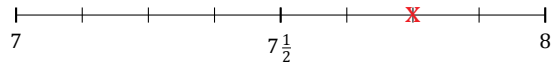
4. $1\frac{7}{10} \simeq 1\frac{1}{2}$



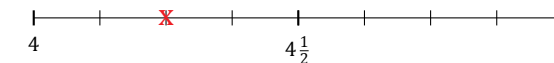
6. $5\frac{2}{11} \simeq 5$



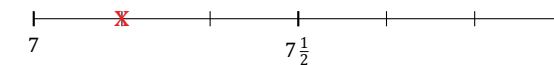
8. $7\frac{6}{8} \simeq 8$



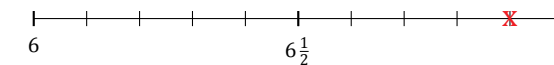
10. $4\frac{2}{8} \simeq 4\frac{1}{2}$



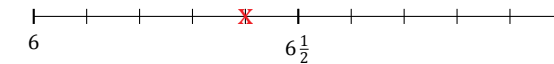
12. $7\frac{1}{6} \simeq 7$



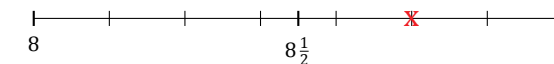
14. $6\frac{9}{10} \simeq 7$



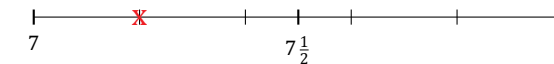
16. $6\frac{4}{10} \simeq 6\frac{1}{2}$



18. $8\frac{5}{7} \simeq 8\frac{1}{2}$



20. $7\frac{1}{5} \simeq 7$



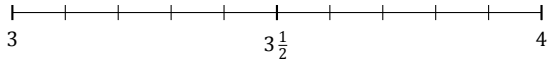
Redondear Números Mixtos (J)

Nombre: _____

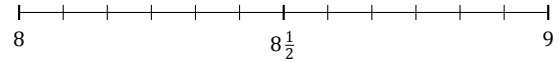
Fecha: _____

Redondee cada número mixto hasta la mitad más cercana. Redondee por exceso.

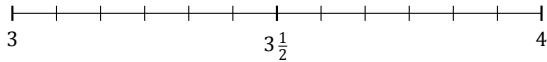
1. $3\frac{9}{10} \approx$



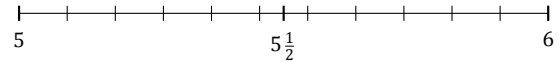
2. $8\frac{10}{12} \approx$



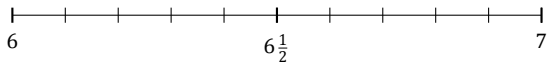
3. $3\frac{4}{12} \approx$



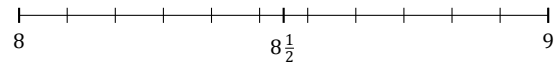
4. $5\frac{3}{11} \approx$



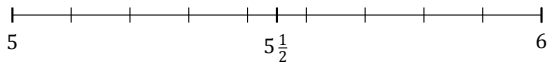
5. $6\frac{6}{10} \approx$



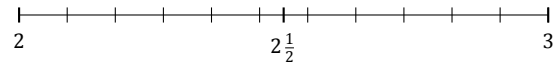
6. $8\frac{5}{11} \approx$



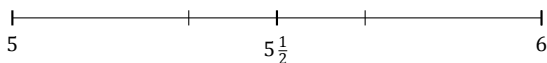
7. $5\frac{3}{9} \approx$



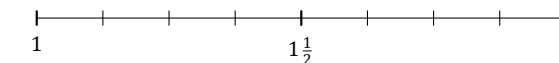
8. $2\frac{2}{11} \approx$



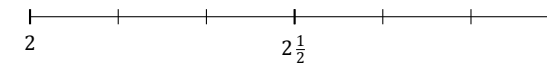
9. $5\frac{2}{3} \approx$



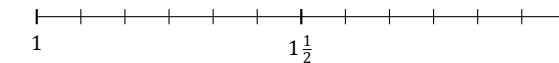
10. $1\frac{5}{8} \approx$



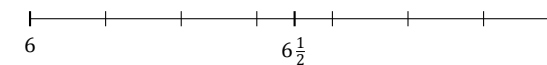
11. $2\frac{4}{6} \approx$



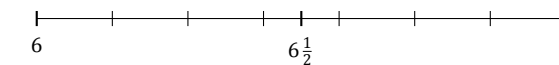
12. $1\frac{9}{12} \approx$



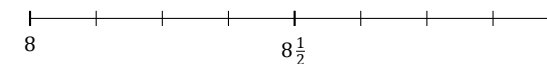
13. $6\frac{5}{7} \approx$



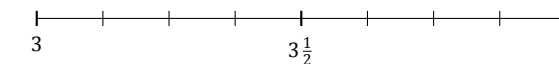
14. $6\frac{3}{7} \approx$



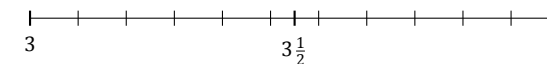
15. $8\frac{1}{8} \approx$



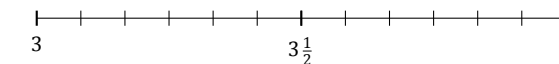
16. $3\frac{6}{8} \approx$



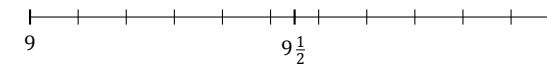
17. $3\frac{8}{11} \approx$



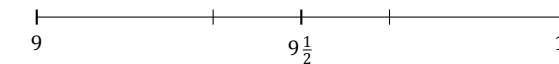
18. $3\frac{8}{12} \approx$



19. $9\frac{4}{11} \approx$



20. $9\frac{1}{3} \approx$



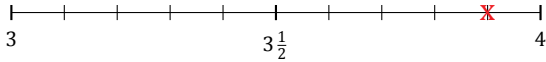
Redondear Números Mixtos (J) Respuestas

Nombre: _____

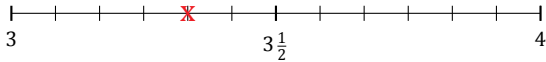
Fecha: _____

Redondee cada número mixto hasta la mitad más cercana. Redondee por exceso.

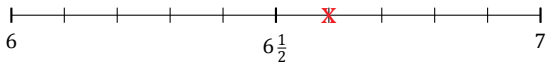
1. $3\frac{9}{10} \simeq 4$



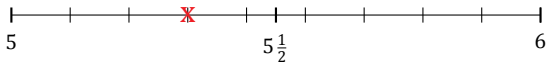
3. $3\frac{4}{12} \simeq 3\frac{1}{2}$



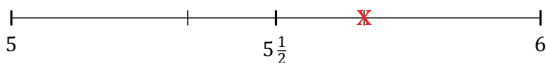
5. $6\frac{6}{10} \simeq 6\frac{1}{2}$



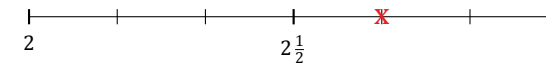
7. $5\frac{3}{9} \simeq 5\frac{1}{2}$



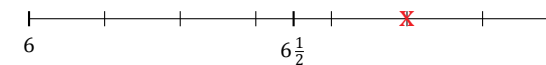
9. $5\frac{2}{3} \simeq 5\frac{1}{2}$



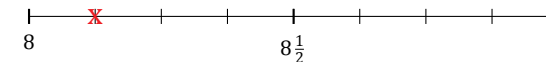
11. $2\frac{4}{6} \simeq 2\frac{1}{2}$



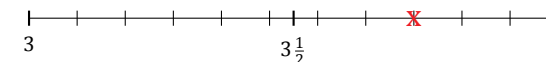
13. $6\frac{5}{7} \simeq 6\frac{1}{2}$



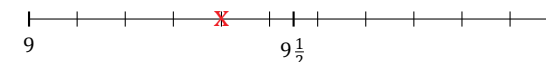
15. $8\frac{1}{8} \simeq 8$



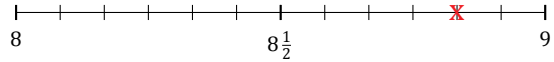
17. $3\frac{8}{11} \simeq 3\frac{1}{2}$



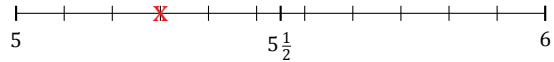
19. $9\frac{4}{11} \simeq 9\frac{1}{2}$



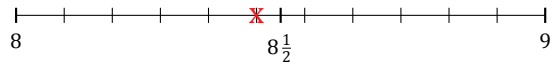
2. $8\frac{10}{12} \simeq 9$



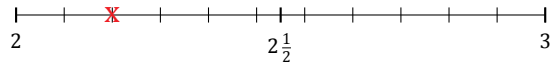
4. $5\frac{3}{11} \simeq 5\frac{1}{2}$



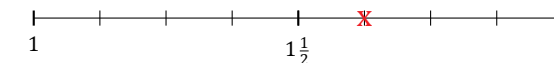
6. $8\frac{5}{11} \simeq 8\frac{1}{2}$



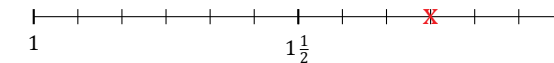
8. $2\frac{2}{11} \simeq 2$



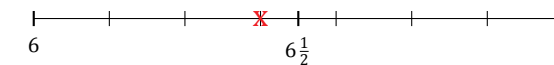
10. $1\frac{5}{8} \simeq 1\frac{1}{2}$



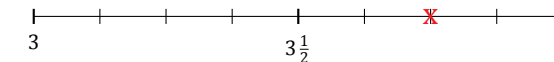
12. $1\frac{9}{12} \simeq 2$



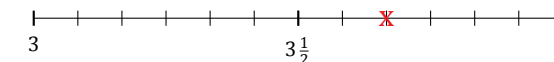
14. $6\frac{3}{7} \simeq 6\frac{1}{2}$



16. $3\frac{6}{8} \simeq 4$



18. $3\frac{8}{12} \simeq 3\frac{1}{2}$



20. $9\frac{1}{3} \simeq 9\frac{1}{2}$

