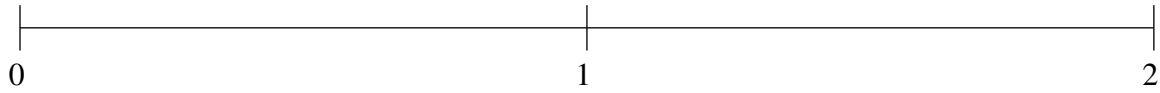


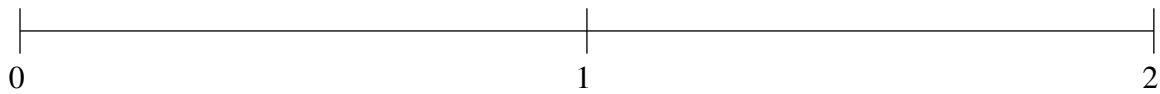
Ordenar Fracciones (C)

Ordene cada conjunto de fracciones usando la recta numérica.

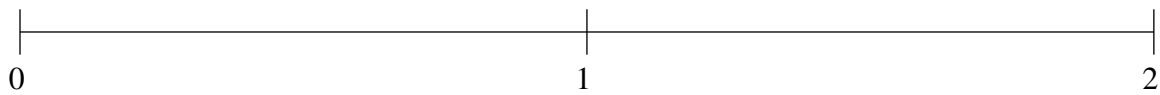
$$\frac{1}{5}, \frac{8}{9}, 1\frac{1}{4}, \frac{2}{3}, 1\frac{4}{5}$$



$$\frac{1}{2}, 1\frac{1}{5}, \frac{5}{7}, 1\frac{2}{3}, \frac{1}{6}$$



$$1\frac{2}{3}, 1\frac{1}{5}, \frac{1}{5}, \frac{2}{3}, \frac{3}{7}$$

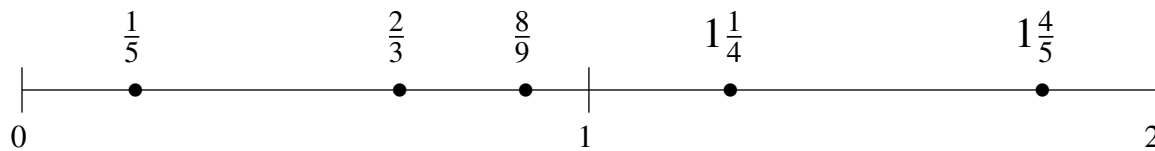


Ordenar Fracciones (C) Respuestas

Ordene cada conjunto de fracciones usando la recta numérica.

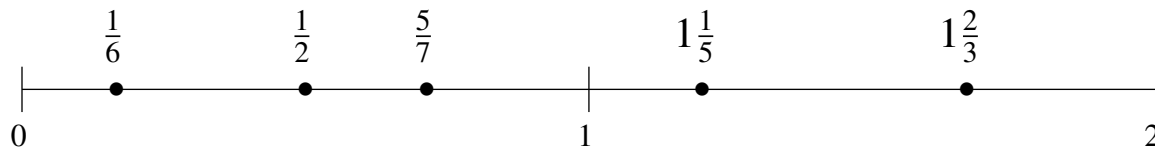
$$\frac{1}{5}, \frac{8}{9}, 1\frac{1}{4}, \frac{2}{3}, 1\frac{4}{5}$$

$$\frac{1}{5}, \frac{2}{3}, \frac{8}{9}, 1\frac{1}{4}, 1\frac{4}{5}$$



$$\frac{1}{2}, 1\frac{1}{5}, \frac{5}{7}, 1\frac{2}{3}, \frac{1}{6}$$

$$\frac{1}{6}, \frac{1}{2}, \frac{5}{7}, 1\frac{1}{5}, 1\frac{2}{3}$$



$$1\frac{2}{3}, 1\frac{1}{5}, \frac{1}{5}, \frac{2}{3}, \frac{3}{7}$$

$$\frac{1}{5}, \frac{3}{7}, \frac{2}{3}, 1\frac{1}{5}, 1\frac{2}{3}$$

