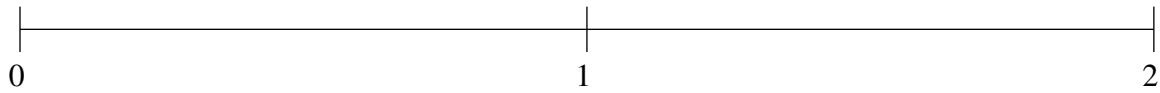


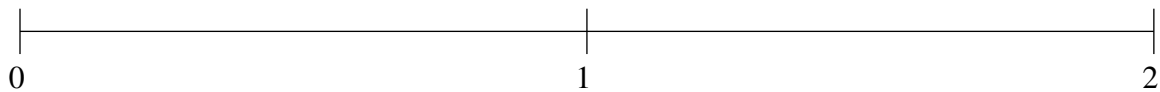
## Ordenar Fracciones (I)

Ordene cada conjunto de fracciones usando la recta numérica.

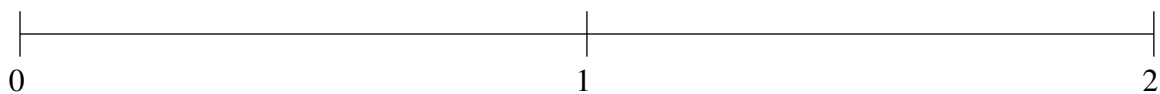
$$\frac{1}{6}, 1\frac{1}{8}, 1\frac{4}{5}, 1\frac{1}{2}, \frac{2}{3}$$



$$\frac{1}{5}, \frac{1}{2}, 1\frac{7}{8}, 1\frac{2}{3}, 1\frac{3}{7}$$



$$\frac{1}{2}, 1\frac{3}{5}, \frac{1}{9}, 1\frac{6}{7}, \frac{9}{10}$$

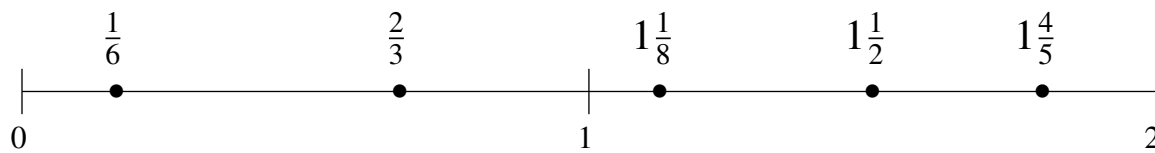


## Ordenar Fracciones (I) Respuestas

Ordene cada conjunto de fracciones usando la recta numérica.

$$\frac{1}{6}, 1\frac{1}{8}, 1\frac{4}{5}, 1\frac{1}{2}, \frac{2}{3}$$

$$\frac{1}{6}, \frac{2}{3}, 1\frac{1}{8}, 1\frac{1}{2}, 1\frac{4}{5}$$



$$\frac{1}{5}, \frac{1}{2}, 1\frac{7}{8}, 1\frac{2}{3}, 1\frac{3}{7}$$

$$\frac{1}{5}, \frac{1}{2}, 1\frac{3}{7}, 1\frac{2}{3}, 1\frac{7}{8}$$



$$\frac{1}{2}, 1\frac{3}{5}, \frac{1}{9}, 1\frac{6}{7}, \frac{9}{10}$$

$$\frac{1}{9}, \frac{1}{2}, \frac{9}{10}, 1\frac{3}{5}, 1\frac{6}{7}$$

