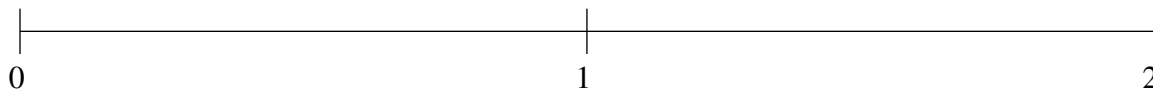


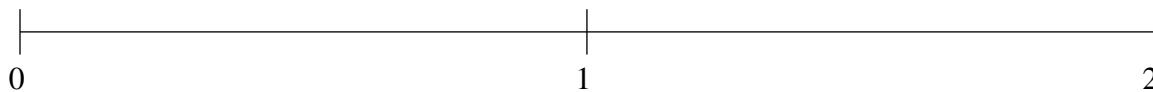
## Ordenar Fracciones (C)

Ordene cada conjunto de fracciones usando la recta numérica.

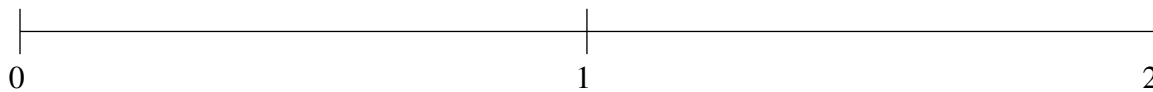
$$1\frac{4}{5}, 1\frac{2}{5}, \frac{1}{5}, \frac{4}{5}, 1\frac{1}{10}$$



$$\frac{1}{2}, \frac{4}{5}, 1\frac{2}{5}, 1\frac{7}{10}, \frac{1}{5}$$



$$\frac{2}{5}, 1\frac{9}{10}, 1\frac{1}{10}, 1\frac{3}{5}, \frac{4}{5}$$

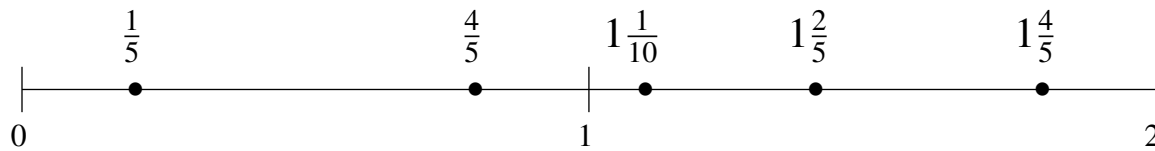


## Ordenar Fracciones (C) Respuestas

Ordene cada conjunto de fracciones usando la recta numérica.

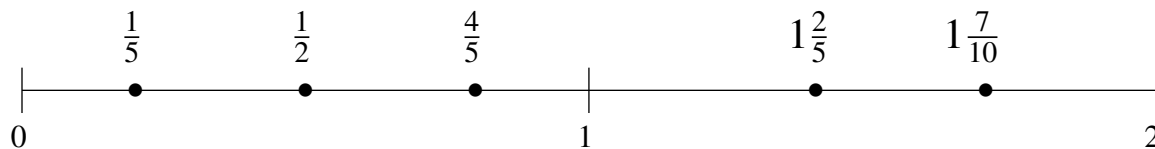
$$1\frac{4}{5}, 1\frac{2}{5}, \frac{1}{5}, \frac{4}{5}, 1\frac{1}{10}$$

$$\frac{1}{5}, \frac{4}{5}, 1\frac{1}{10}, 1\frac{2}{5}, 1\frac{4}{5}$$



$$\frac{1}{2}, \frac{4}{5}, 1\frac{2}{5}, 1\frac{7}{10}, \frac{1}{5}$$

$$\frac{1}{5}, \frac{1}{2}, \frac{4}{5}, 1\frac{2}{5}, 1\frac{7}{10}$$



$$\frac{2}{5}, 1\frac{9}{10}, 1\frac{1}{10}, 1\frac{3}{5}, \frac{4}{5}$$

$$\frac{2}{5}, \frac{4}{5}, 1\frac{1}{10}, 1\frac{3}{5}, 1\frac{9}{10}$$

