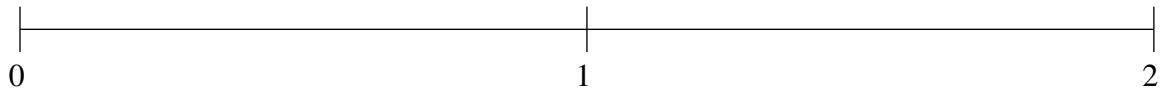


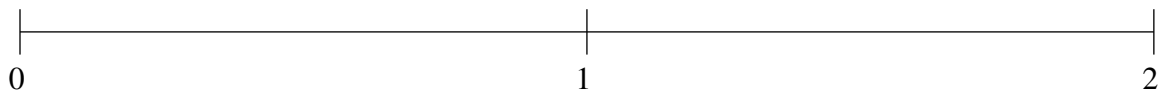
Ordenar Fracciones (E)

Ordene cada conjunto de fracciones usando la recta numérica.

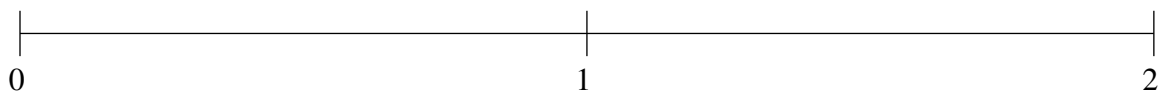
$$\frac{1}{2}, \frac{4}{5}, 1\frac{1}{2}, 1\frac{1}{5}, \frac{1}{5}$$



$$\frac{1}{5}, 1\frac{1}{5}, 1\frac{1}{2}, \frac{4}{5}, \frac{1}{2}$$



$$1\frac{1}{2}, \frac{1}{5}, 1\frac{4}{5}, \frac{4}{5}, 1\frac{1}{5}$$

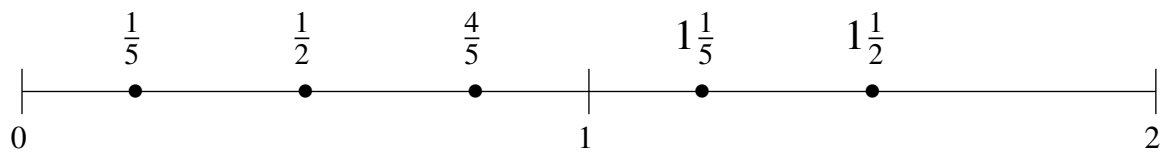


Ordenar Fracciones (E) Respuestas

Ordene cada conjunto de fracciones usando la recta numérica.

$$\frac{1}{2}, \frac{4}{5}, 1\frac{1}{2}, 1\frac{1}{5}, \frac{1}{5}$$

$$\frac{1}{5}, \frac{1}{2}, \frac{4}{5}, 1\frac{1}{5}, 1\frac{1}{2}$$



$$\frac{1}{5}, 1\frac{1}{5}, 1\frac{1}{2}, \frac{4}{5}, \frac{1}{2}$$

$$\frac{1}{5}, \frac{1}{2}, \frac{4}{5}, 1\frac{1}{5}, 1\frac{1}{2}$$



$$1\frac{1}{2}, \frac{1}{5}, 1\frac{4}{5}, \frac{4}{5}, 1\frac{1}{5}$$

$$\frac{1}{5}, \frac{4}{5}, 1\frac{1}{5}, 1\frac{1}{2}, 1\frac{4}{5}$$

