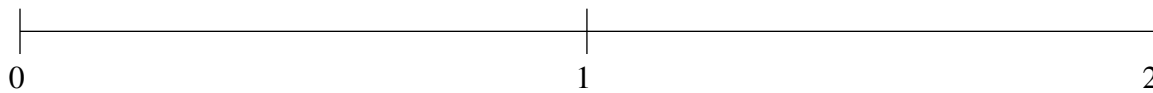


## Ordenar Fracciones (H)

Ordene cada conjunto de fracciones usando la recta numérica.

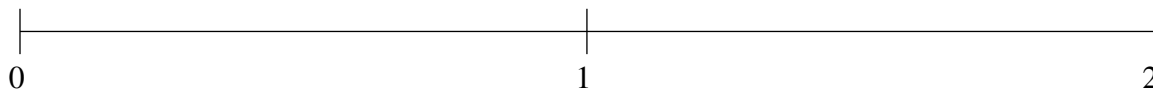
$$1\frac{4}{5}, 1\frac{1}{2}, 1\frac{1}{5}, \frac{4}{5}, \frac{2}{5}$$



$$1\frac{1}{5}, \frac{4}{5}, \frac{1}{2}, 1\frac{1}{2}, \frac{1}{5}$$



$$1\frac{4}{5}, 1\frac{1}{5}, 1\frac{1}{2}, \frac{1}{2}, \frac{4}{5}$$

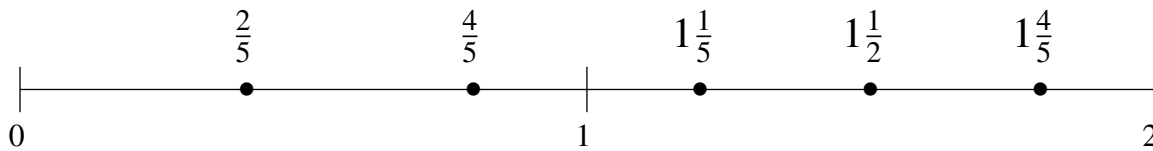


## Ordenar Fracciones (H) Respuestas

Ordene cada conjunto de fracciones usando la recta numérica.

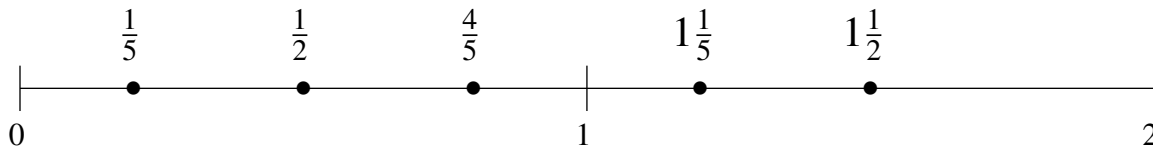
$$1\frac{4}{5}, 1\frac{1}{2}, 1\frac{1}{5}, \frac{4}{5}, \frac{2}{5}$$

$$\frac{2}{5}, \frac{4}{5}, 1\frac{1}{5}, 1\frac{1}{2}, 1\frac{4}{5}$$



$$1\frac{1}{5}, \frac{4}{5}, \frac{1}{2}, 1\frac{1}{2}, \frac{1}{5}$$

$$\frac{1}{5}, \frac{1}{2}, \frac{4}{5}, 1\frac{1}{5}, 1\frac{1}{2}$$



$$1\frac{4}{5}, 1\frac{1}{5}, 1\frac{1}{2}, \frac{1}{2}, \frac{4}{5}$$

$$\frac{1}{2}, \frac{4}{5}, 1\frac{1}{5}, 1\frac{1}{2}, 1\frac{4}{5}$$

