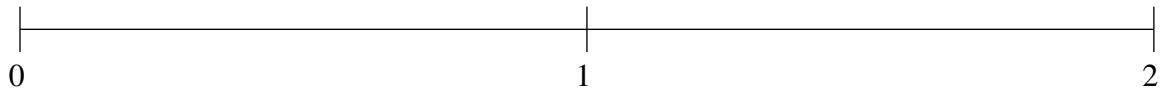


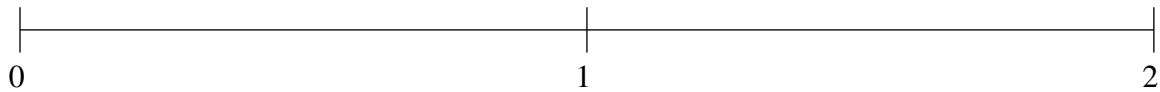
Ordenar Fracciones (I)

Ordene cada conjunto de fracciones usando la recta numérica.

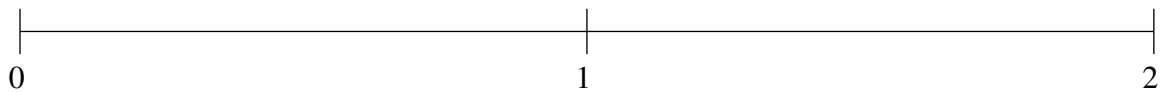
$$1\frac{4}{5}, \frac{1}{5}, 1\frac{1}{2}, \frac{1}{2}, \frac{4}{5}$$



$$1\frac{1}{5}, \frac{4}{5}, \frac{2}{5}, 1\frac{9}{10}, 1\frac{1}{2}$$



$$1\frac{1}{2}, 1\frac{9}{10}, \frac{1}{5}, \frac{3}{5}, 1\frac{1}{5}$$

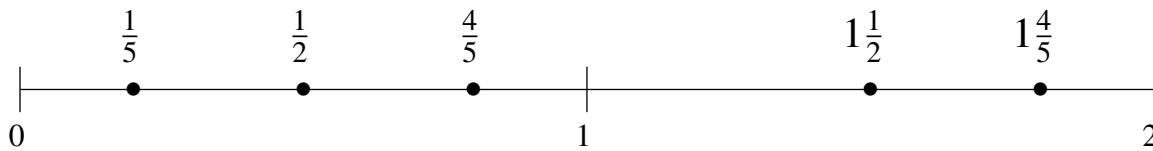


Ordenar Fracciones (I) Respuestas

Ordene cada conjunto de fracciones usando la recta numérica.

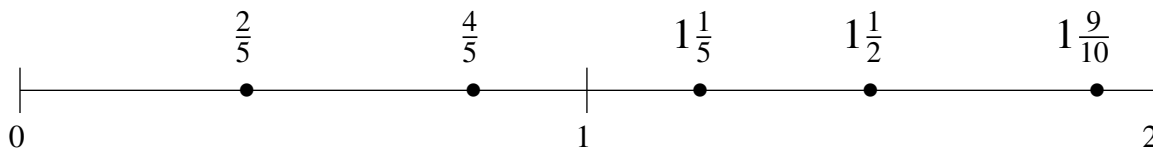
$$1\frac{4}{5}, \frac{1}{5}, 1\frac{1}{2}, \frac{1}{2}, \frac{4}{5}$$

$$\frac{1}{5}, \frac{1}{2}, \frac{4}{5}, 1\frac{1}{2}, 1\frac{4}{5}$$



$$1\frac{1}{5}, \frac{4}{5}, \frac{2}{5}, 1\frac{9}{10}, 1\frac{1}{2}$$

$$\frac{2}{5}, \frac{4}{5}, 1\frac{1}{5}, 1\frac{1}{2}, 1\frac{9}{10}$$



$$1\frac{1}{2}, 1\frac{9}{10}, \frac{1}{5}, \frac{3}{5}, 1\frac{1}{5}$$

$$\frac{1}{5}, \frac{3}{5}, 1\frac{1}{5}, 1\frac{1}{2}, 1\frac{9}{10}$$

