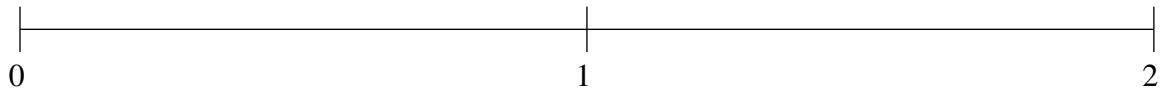


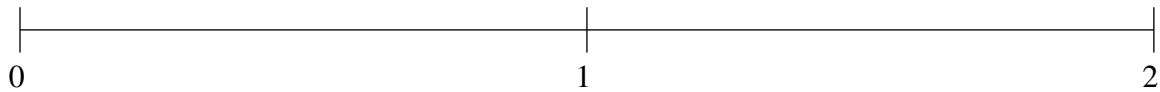
Ordenar Fracciones (J)

Ordene cada conjunto de fracciones usando la recta numérica.

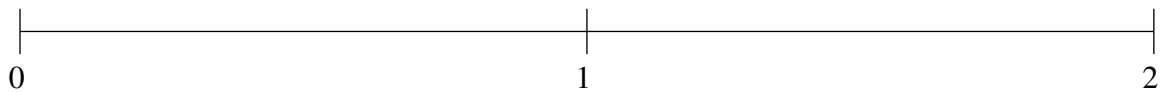
$$\frac{1}{2}, \frac{9}{10}, \frac{1}{5}, 1\frac{1}{2}, 1\frac{4}{5}$$



$$1\frac{1}{2}, \frac{3}{5}, \frac{3}{10}, \frac{9}{10}, 1\frac{4}{5}$$



$$1\frac{1}{2}, 1\frac{1}{5}, \frac{4}{5}, \frac{1}{5}, 1\frac{4}{5}$$

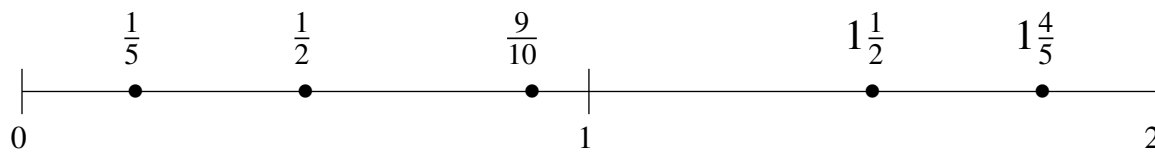


Ordenar Fracciones (J) Respuestas

Ordene cada conjunto de fracciones usando la recta numérica.

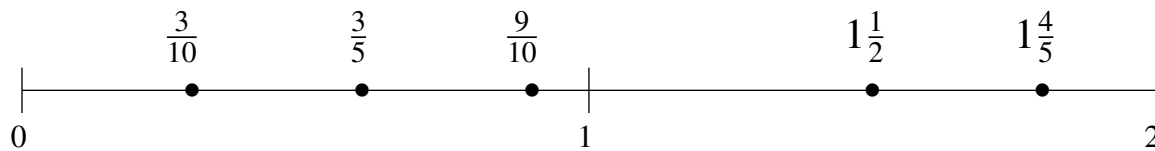
$$\frac{1}{2}, \frac{9}{10}, \frac{1}{5}, 1\frac{1}{2}, 1\frac{4}{5}$$

$$\frac{1}{5}, \frac{1}{2}, \frac{9}{10}, 1\frac{1}{2}, 1\frac{4}{5}$$



$$1\frac{1}{2}, \frac{3}{5}, \frac{3}{10}, \frac{9}{10}, 1\frac{4}{5}$$

$$\frac{3}{10}, \frac{3}{5}, \frac{9}{10}, 1\frac{1}{2}, 1\frac{4}{5}$$



$$1\frac{1}{2}, 1\frac{1}{5}, \frac{4}{5}, \frac{1}{5}, 1\frac{4}{5}$$

$$\frac{1}{5}, \frac{4}{5}, 1\frac{1}{5}, 1\frac{1}{2}, 1\frac{4}{5}$$

