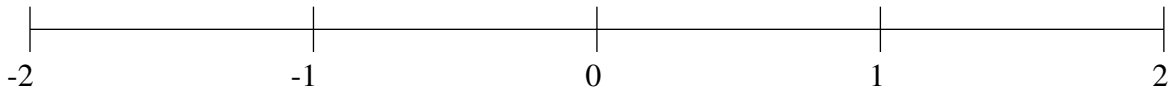


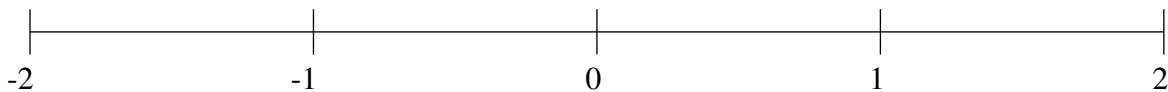
## Ordenar Fracciones (D)

Ordene cada conjunto de fracciones usando la recta numérica.

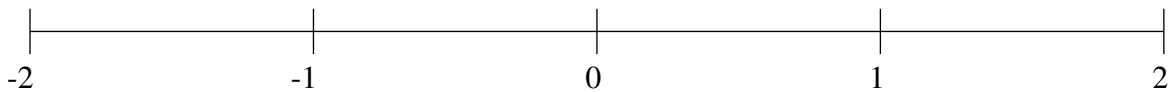
$$\frac{4}{5}, \frac{1}{5}, -\frac{1}{5}, -1\frac{1}{2}, 1\frac{9}{10}, -1\frac{1}{5}, -1\frac{4}{5}, 1\frac{3}{5}$$



$$1\frac{2}{5}, -\frac{4}{5}, \frac{4}{5}, -\frac{2}{5}, \frac{1}{2}, -1\frac{4}{5}, -1\frac{1}{2}, -1\frac{1}{10}$$



$$\frac{1}{2}, 1\frac{1}{2}, -\frac{1}{2}, -1\frac{4}{5}, -1\frac{1}{2}, \frac{1}{10}, \frac{4}{5}, -\frac{1}{5}$$

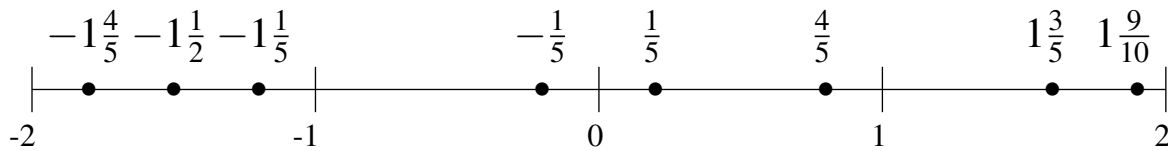


## Ordenar Fracciones (D) Respuestas

Ordene cada conjunto de fracciones usando la recta numérica.

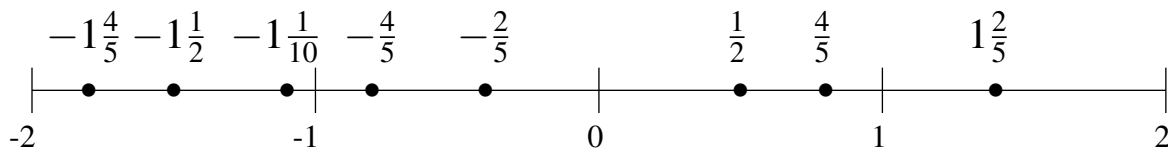
$$\frac{4}{5}, \frac{1}{5}, -\frac{1}{5}, -1\frac{1}{2}, 1\frac{9}{10}, -1\frac{1}{5}, -1\frac{4}{5}, 1\frac{3}{5}$$

$$-1\frac{4}{5}, -1\frac{1}{2}, -1\frac{1}{5}, -\frac{1}{5}, \frac{1}{5}, \frac{4}{5}, 1\frac{3}{5}, 1\frac{9}{10}$$



$$1\frac{2}{5}, -\frac{4}{5}, \frac{4}{5}, -\frac{2}{5}, \frac{1}{2}, -1\frac{4}{5}, -1\frac{1}{2}, -1\frac{1}{10}$$

$$-1\frac{4}{5}, -1\frac{1}{2}, -1\frac{1}{10}, -\frac{4}{5}, -\frac{2}{5}, \frac{1}{2}, \frac{4}{5}, 1\frac{2}{5}$$



$$\frac{1}{2}, 1\frac{1}{2}, -\frac{1}{2}, -1\frac{4}{5}, -1\frac{1}{2}, \frac{1}{10}, \frac{4}{5}, -\frac{1}{5}$$

$$-1\frac{4}{5}, -1\frac{1}{2}, -\frac{1}{2}, -\frac{1}{5}, \frac{1}{10}, \frac{1}{2}, \frac{4}{5}, 1\frac{1}{2}$$

