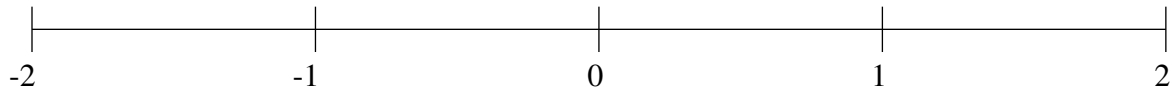


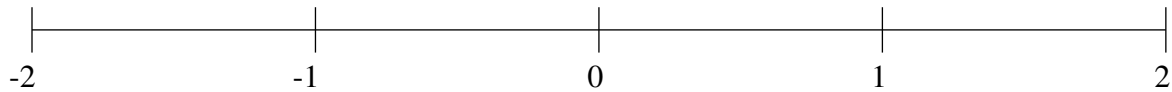
## Ordenar Fracciones (E)

Ordene cada conjunto de fracciones usando la recta numérica.

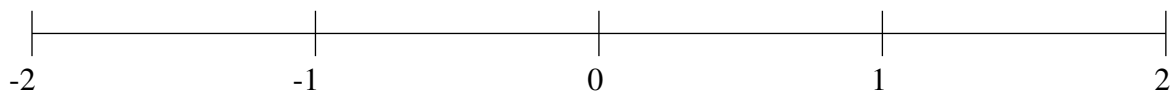
$$-1\frac{1}{2}, -\frac{1}{5}, -1\frac{4}{5}, -\frac{4}{5}, -\frac{1}{2}, 1\frac{1}{5}, 1\frac{1}{2}, \frac{1}{5}$$



$$\frac{1}{2}, -1\frac{1}{5}, 1\frac{4}{5}, -1\frac{1}{2}, 1\frac{1}{2}, -\frac{1}{10}, -1\frac{4}{5}, -\frac{1}{2}$$



$$-\frac{1}{5}, 1\frac{4}{5}, -1\frac{2}{5}, \frac{4}{5}, \frac{1}{5}, -\frac{1}{2}, \frac{1}{2}, -\frac{4}{5}$$

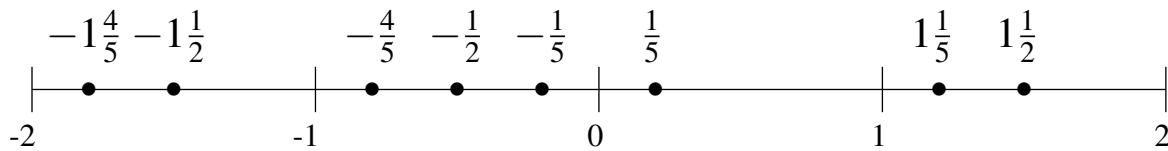


## Ordenar Fracciones (E) Respuestas

Ordene cada conjunto de fracciones usando la recta numérica.

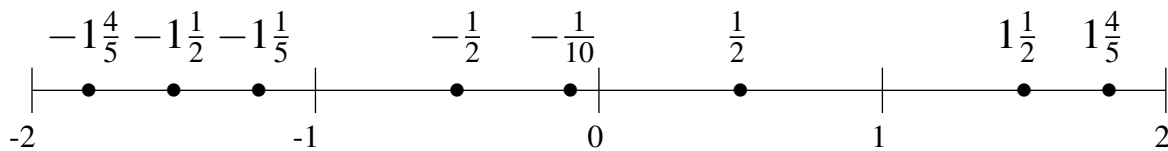
$$-1\frac{1}{2}, -\frac{1}{5}, -1\frac{4}{5}, -\frac{4}{5}, -\frac{1}{2}, 1\frac{1}{5}, 1\frac{1}{2}, \frac{1}{5}$$

$$-1\frac{4}{5}, -1\frac{1}{2}, -\frac{4}{5}, -\frac{1}{2}, -\frac{1}{5}, \frac{1}{5}, 1\frac{1}{5}, 1\frac{1}{2}$$



$$\frac{1}{2}, -1\frac{1}{5}, 1\frac{4}{5}, -1\frac{1}{2}, 1\frac{1}{2}, -\frac{1}{10}, -1\frac{4}{5}, -\frac{1}{2}$$

$$-1\frac{4}{5}, -1\frac{1}{2}, -1\frac{1}{5}, -\frac{1}{2}, -\frac{1}{10}, \frac{1}{2}, 1\frac{1}{2}, 1\frac{4}{5}$$



$$-\frac{1}{5}, 1\frac{4}{5}, -1\frac{2}{5}, \frac{4}{5}, \frac{1}{5}, -\frac{1}{2}, \frac{1}{2}, -\frac{4}{5}$$

$$-1\frac{2}{5}, -\frac{4}{5}, -\frac{1}{2}, -\frac{1}{5}, \frac{1}{5}, \frac{1}{2}, \frac{4}{5}, 1\frac{4}{5}$$

