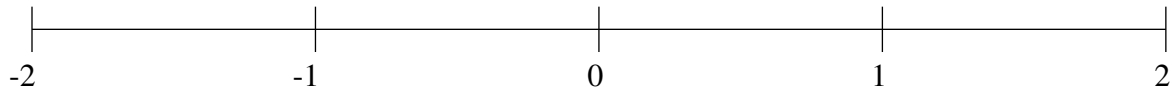


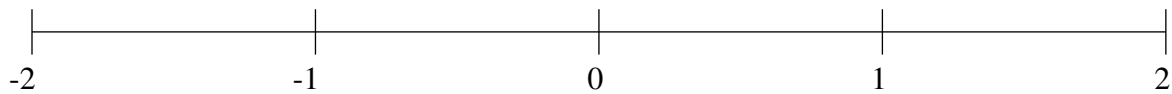
Ordenar Fracciones (G)

Ordene cada conjunto de fracciones usando la recta numérica.

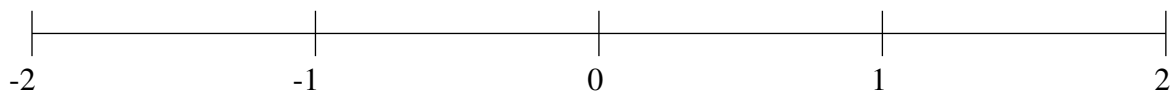
$$1\frac{4}{5}, \frac{4}{5}, -\frac{4}{5}, -1\frac{1}{5}, -1\frac{1}{2}, -\frac{1}{2}, 1\frac{1}{5}, -1\frac{4}{5}$$



$$-1\frac{1}{5}, -\frac{1}{2}, \frac{1}{2}, 1\frac{1}{2}, -\frac{4}{5}, \frac{4}{5}, \frac{1}{5}, -1\frac{1}{2}$$



$$1\frac{4}{5}, \frac{1}{5}, -\frac{3}{5}, 1\frac{1}{2}, -1\frac{4}{5}, -1\frac{2}{5}, \frac{4}{5}, \frac{1}{2}$$

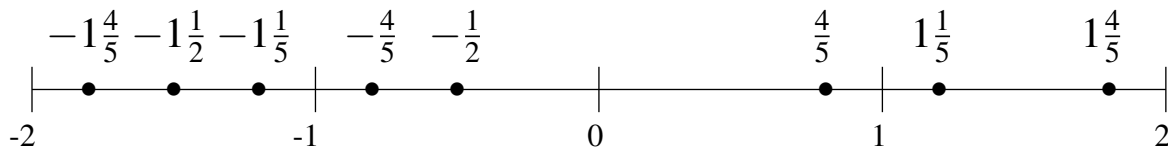


Ordenar Fracciones (G) Respuestas

Ordene cada conjunto de fracciones usando la recta numérica.

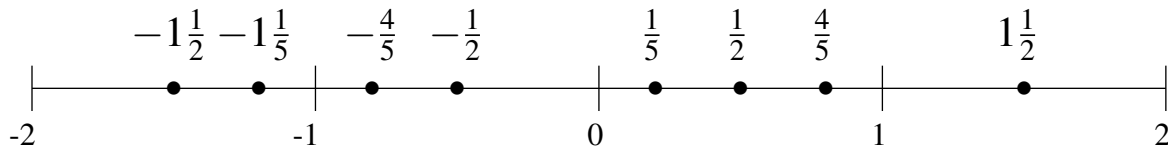
$$1\frac{4}{5}, \frac{4}{5}, -\frac{4}{5}, -1\frac{1}{5}, -1\frac{1}{2}, -\frac{1}{2}, 1\frac{1}{5}, -1\frac{4}{5}$$

$$-1\frac{4}{5}, -1\frac{1}{2}, -1\frac{1}{5}, -\frac{4}{5}, -\frac{1}{2}, \frac{4}{5}, 1\frac{1}{5}, 1\frac{4}{5}$$



$$-1\frac{1}{5}, -\frac{1}{2}, \frac{1}{2}, 1\frac{1}{2}, -\frac{4}{5}, \frac{4}{5}, \frac{1}{5}, -1\frac{1}{2}$$

$$-1\frac{1}{2}, -1\frac{1}{5}, -\frac{4}{5}, -\frac{1}{2}, \frac{1}{5}, \frac{1}{2}, \frac{4}{5}, 1\frac{1}{2}$$



$$1\frac{4}{5}, \frac{1}{5}, -\frac{3}{5}, 1\frac{1}{2}, -1\frac{4}{5}, -1\frac{2}{5}, \frac{4}{5}, \frac{1}{2}$$

$$-1\frac{4}{5}, -1\frac{2}{5}, -\frac{3}{5}, \frac{1}{5}, \frac{1}{2}, \frac{4}{5}, 1\frac{1}{2}, 1\frac{4}{5}$$

