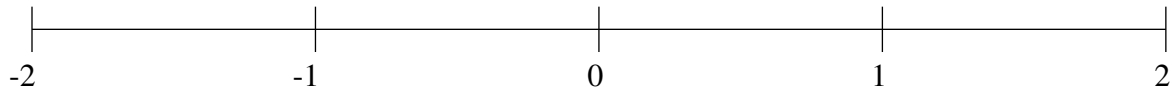


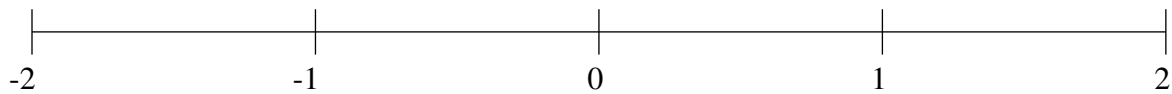
## Ordenar Fracciones (H)

Ordene cada conjunto de fracciones usando la recta numérica.

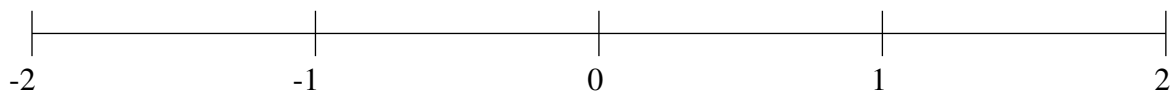
$$1\frac{4}{5}, -1\frac{1}{2}, -\frac{3}{5}, \frac{1}{2}, 1\frac{1}{2}, -1\frac{4}{5}, 1\frac{1}{10}, -\frac{1}{5}$$



$$\frac{2}{5}, -\frac{1}{5}, -1\frac{2}{5}, -1\frac{4}{5}, -\frac{1}{2}, 1\frac{1}{2}, \frac{1}{10}, -\frac{4}{5}$$



$$-1\frac{4}{5}, \frac{4}{5}, \frac{1}{2}, 1\frac{1}{2}, \frac{1}{5}, -1\frac{1}{5}, -\frac{1}{2}, -\frac{4}{5}$$

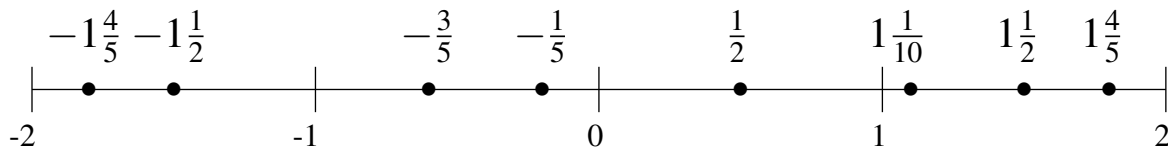


## Ordenar Fracciones (H) Respuestas

Ordene cada conjunto de fracciones usando la recta numérica.

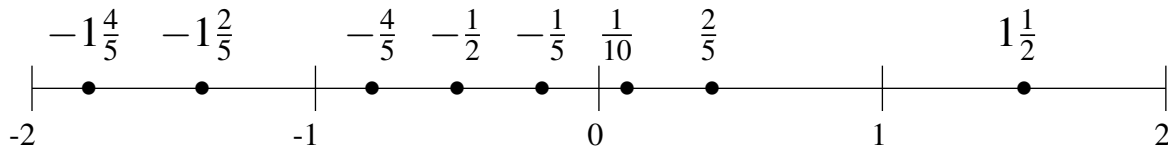
$$1\frac{4}{5}, -1\frac{1}{2}, -\frac{3}{5}, \frac{1}{2}, 1\frac{1}{2}, -1\frac{4}{5}, 1\frac{1}{10}, -\frac{1}{5}$$

$$-1\frac{4}{5}, -1\frac{1}{2}, -\frac{3}{5}, -\frac{1}{5}, \frac{1}{2}, 1\frac{1}{10}, 1\frac{1}{2}, 1\frac{4}{5}$$



$$\frac{2}{5}, -\frac{1}{5}, -1\frac{2}{5}, -1\frac{4}{5}, -\frac{1}{2}, 1\frac{1}{2}, \frac{1}{10}, -\frac{4}{5}$$

$$-1\frac{4}{5}, -1\frac{2}{5}, -\frac{4}{5}, -\frac{1}{2}, -\frac{1}{5}, \frac{1}{10}, \frac{2}{5}, 1\frac{1}{2}$$



$$-1\frac{4}{5}, \frac{4}{5}, \frac{1}{2}, 1\frac{1}{2}, \frac{1}{5}, -1\frac{1}{5}, -\frac{1}{2}, -\frac{4}{5}$$

$$-1\frac{4}{5}, -1\frac{1}{5}, -\frac{4}{5}, -\frac{1}{2}, \frac{1}{5}, \frac{1}{2}, \frac{4}{5}, 1\frac{1}{2}$$

