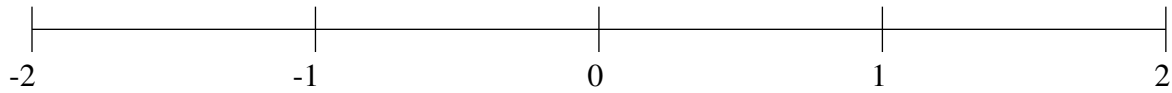


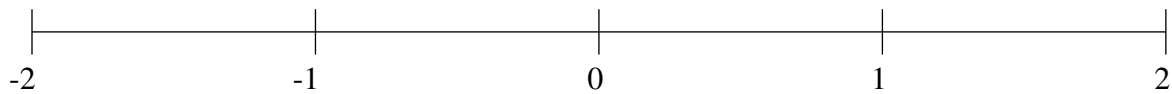
Ordenar Fracciones (J)

Ordene cada conjunto de fracciones usando la recta numérica.

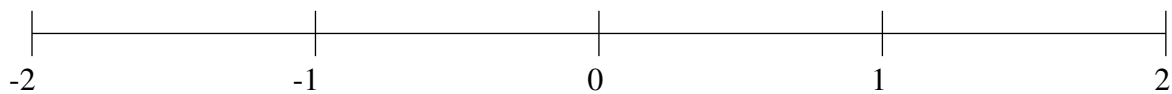
$$1\frac{1}{5}, -1\frac{4}{5}, -\frac{4}{5}, -\frac{1}{5}, 1\frac{4}{5}, \frac{1}{2}, -\frac{1}{2}, 1\frac{1}{2}$$



$$1\frac{1}{5}, 1\frac{1}{2}, \frac{3}{5}, -1\frac{1}{10}, -\frac{1}{5}, 1\frac{4}{5}, -1\frac{2}{5}, -\frac{1}{2}$$



$$-1\frac{1}{5}, 1\frac{3}{5}, -1\frac{1}{2}, \frac{1}{5}, -\frac{4}{5}, -\frac{1}{2}, \frac{3}{5}, -\frac{1}{5}$$

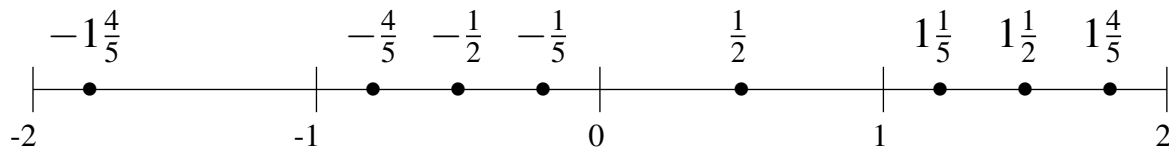


Ordenar Fracciones (J) Respuestas

Ordene cada conjunto de fracciones usando la recta numérica.

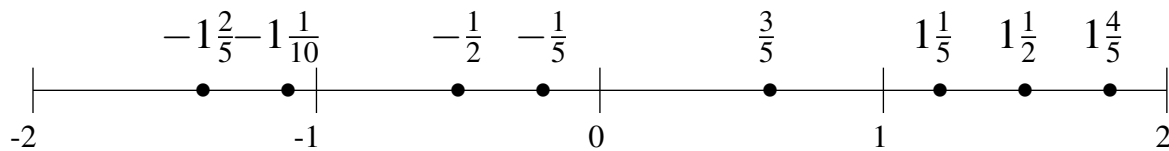
$$1\frac{1}{5}, -1\frac{4}{5}, -\frac{4}{5}, -\frac{1}{5}, 1\frac{4}{5}, \frac{1}{2}, -\frac{1}{2}, 1\frac{1}{2}$$

$$-1\frac{4}{5}, -\frac{4}{5}, -\frac{1}{2}, -\frac{1}{5}, \frac{1}{2}, 1\frac{1}{5}, 1\frac{1}{2}, 1\frac{4}{5}$$



$$1\frac{1}{5}, 1\frac{1}{2}, \frac{3}{5}, -1\frac{1}{10}, -\frac{1}{5}, 1\frac{4}{5}, -1\frac{2}{5}, -\frac{1}{2}$$

$$-1\frac{2}{5}, -1\frac{1}{10}, -\frac{1}{2}, -\frac{1}{5}, \frac{3}{5}, 1\frac{1}{5}, 1\frac{1}{2}, 1\frac{4}{5}$$



$$-1\frac{1}{5}, 1\frac{3}{5}, -1\frac{1}{2}, \frac{1}{5}, -\frac{4}{5}, -\frac{1}{2}, \frac{3}{5}, -\frac{1}{5}$$

$$-1\frac{1}{2}, -1\frac{1}{5}, -\frac{4}{5}, -\frac{1}{2}, -\frac{1}{5}, \frac{1}{5}, \frac{3}{5}, 1\frac{3}{5}$$

