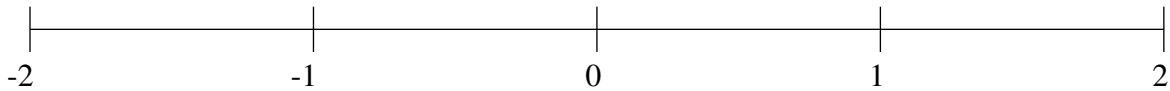


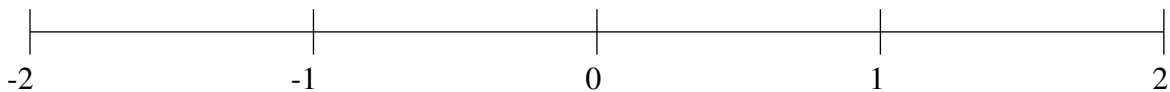
## Ordenar Fracciones (A)

Ordene cada conjunto de fracciones usando la recta numérica.

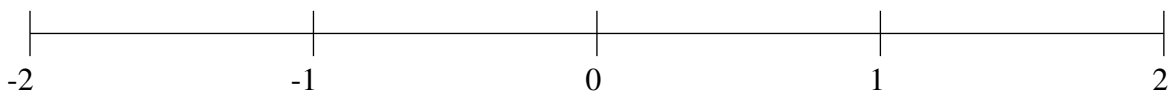
$$\frac{1}{2}, -\frac{1}{2}, -\frac{1}{5}, 1\frac{1}{2}, -1\frac{1}{2}, -1\frac{4}{5}, \frac{1}{5}, \frac{4}{5}$$



$$\frac{7}{10}, \frac{2}{5}, 1\frac{1}{5}, -1\frac{2}{5}, 1\frac{1}{2}, -1\frac{4}{5}, -\frac{1}{2}, 1\frac{4}{5}$$



$$-1\frac{1}{2}, -1\frac{4}{5}, -\frac{4}{5}, -\frac{1}{2}, -1\frac{1}{5}, \frac{1}{2}, 1\frac{3}{5}, -\frac{1}{10}$$

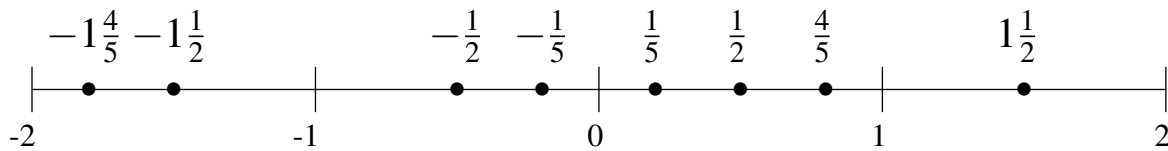


## Ordenar Fracciones (A) Respuestas

Ordene cada conjunto de fracciones usando la recta numérica.

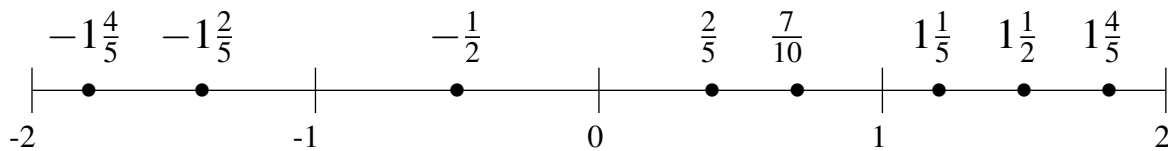
$$\frac{1}{2}, -\frac{1}{2}, -\frac{1}{5}, 1\frac{1}{2}, -1\frac{1}{2}, -1\frac{4}{5}, \frac{1}{5}, \frac{4}{5}$$

$$-1\frac{4}{5}, -1\frac{1}{2}, -\frac{1}{2}, -\frac{1}{5}, \frac{1}{5}, \frac{1}{2}, \frac{4}{5}, 1\frac{1}{2}$$



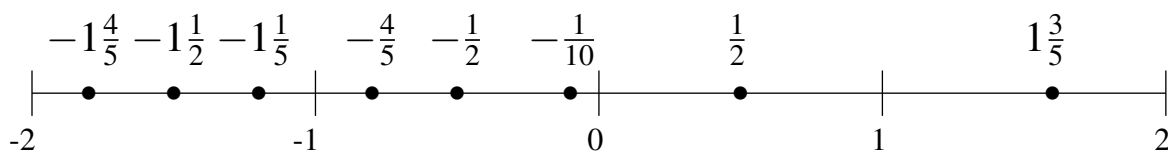
$$\frac{7}{10}, \frac{2}{5}, 1\frac{1}{5}, -1\frac{2}{5}, 1\frac{1}{2}, -1\frac{4}{5}, -\frac{1}{2}, 1\frac{4}{5}$$

$$-1\frac{4}{5}, -1\frac{2}{5}, -\frac{1}{2}, \frac{2}{5}, \frac{7}{10}, 1\frac{1}{5}, 1\frac{1}{2}, 1\frac{4}{5}$$



$$-1\frac{1}{2}, -1\frac{4}{5}, -\frac{4}{5}, -\frac{1}{2}, -1\frac{1}{5}, \frac{1}{2}, 1\frac{3}{5}, -\frac{1}{10}$$

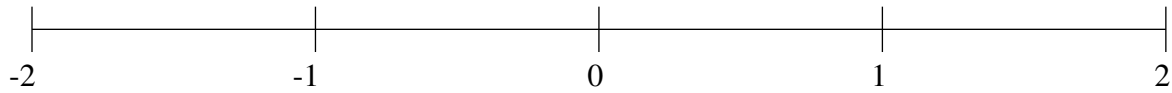
$$-1\frac{4}{5}, -1\frac{1}{2}, -1\frac{1}{5}, -\frac{4}{5}, -\frac{1}{2}, -\frac{1}{10}, \frac{1}{2}, 1\frac{3}{5}$$



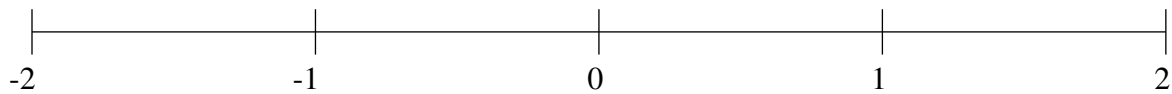
## Ordenar Fracciones (B)

Ordene cada conjunto de fracciones usando la recta numérica.

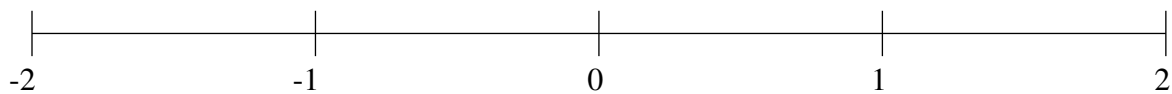
$$1\frac{1}{2}, \frac{1}{5}, \frac{1}{2}, -1\frac{1}{2}, \frac{4}{5}, 1\frac{1}{5}, -\frac{1}{2}, -1\frac{4}{5}$$



$$-1\frac{1}{5}, -\frac{1}{2}, -1\frac{1}{2}, 1\frac{4}{5}, \frac{4}{5}, \frac{1}{2}, \frac{1}{5}, 1\frac{1}{2}$$



$$1\frac{1}{2}, \frac{1}{5}, -\frac{1}{2}, \frac{1}{2}, \frac{4}{5}, 1\frac{1}{5}, -1\frac{4}{5}, -1\frac{1}{2}$$

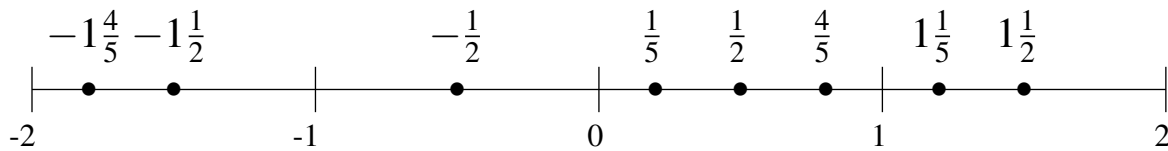


## Ordenar Fracciones (B) Respuestas

Ordene cada conjunto de fracciones usando la recta numérica.

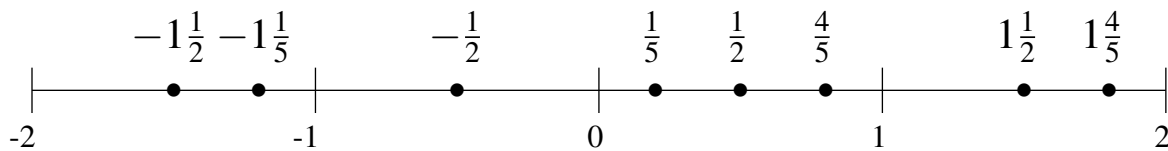
$$1\frac{1}{2}, \frac{1}{5}, \frac{1}{2}, -1\frac{1}{2}, \frac{4}{5}, 1\frac{1}{5}, -\frac{1}{2}, -1\frac{4}{5}$$

$$-1\frac{4}{5}, -1\frac{1}{2}, -\frac{1}{2}, \frac{1}{5}, \frac{1}{2}, \frac{4}{5}, 1\frac{1}{5}, 1\frac{1}{2}$$



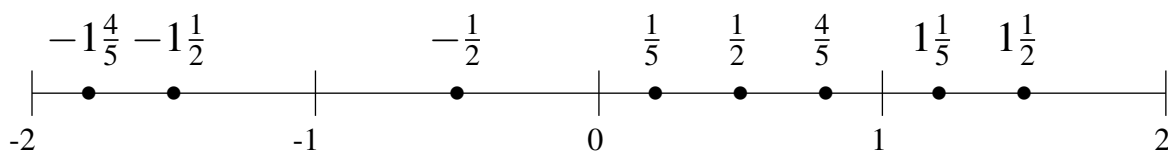
$$-1\frac{1}{5}, -\frac{1}{2}, -1\frac{1}{2}, 1\frac{4}{5}, \frac{4}{5}, \frac{1}{2}, \frac{1}{5}, 1\frac{1}{2}$$

$$-1\frac{1}{2}, -1\frac{1}{5}, -\frac{1}{2}, \frac{1}{5}, \frac{1}{2}, \frac{4}{5}, 1\frac{1}{2}, 1\frac{4}{5}$$



$$1\frac{1}{2}, \frac{1}{5}, -\frac{1}{2}, \frac{1}{2}, \frac{4}{5}, 1\frac{1}{5}, -1\frac{4}{5}, -1\frac{1}{2}$$

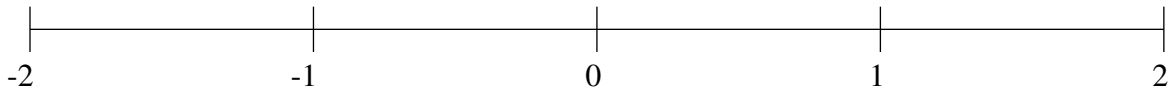
$$-1\frac{4}{5}, -1\frac{1}{2}, -\frac{1}{2}, \frac{1}{5}, \frac{1}{2}, \frac{4}{5}, 1\frac{1}{5}, 1\frac{1}{2}$$



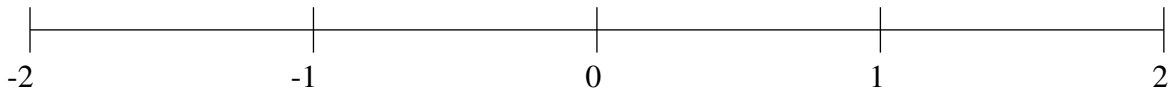
## Ordenar Fracciones (C)

Ordene cada conjunto de fracciones usando la recta numérica.

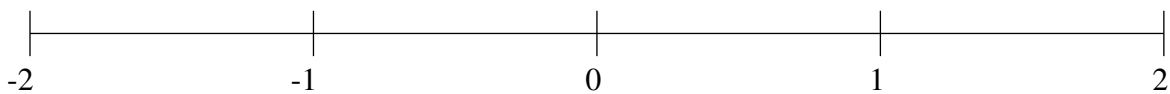
$$1\frac{1}{2}, \frac{1}{5}, \frac{4}{5}, \frac{1}{2}, -1\frac{1}{10}, 1\frac{4}{5}, -1\frac{7}{10}, -\frac{1}{2}$$



$$-\frac{1}{5}, \frac{1}{2}, -1\frac{1}{2}, 1\frac{1}{5}, -1\frac{4}{5}, \frac{4}{5}, \frac{1}{5}, 1\frac{3}{5}$$



$$-\frac{1}{5}, \frac{1}{5}, 1\frac{1}{5}, -1\frac{1}{2}, 1\frac{4}{5}, -\frac{3}{5}, \frac{1}{2}, -1\frac{1}{5}$$

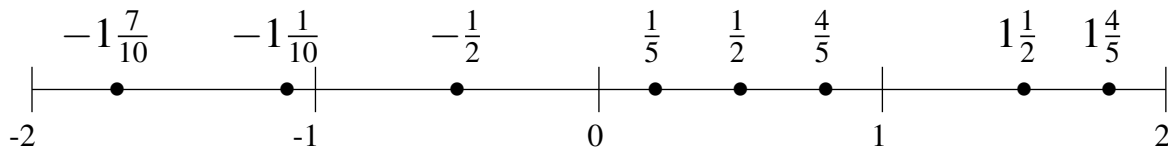


## Ordenar Fracciones (C) Respuestas

Ordene cada conjunto de fracciones usando la recta numérica.

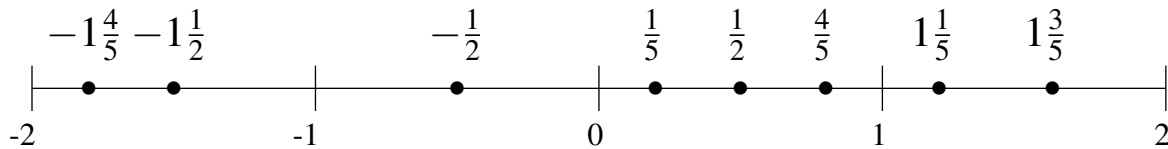
$$1\frac{1}{2}, \frac{1}{5}, \frac{4}{5}, \frac{1}{2}, -1\frac{1}{10}, 1\frac{4}{5}, -1\frac{7}{10}, -\frac{1}{2}$$

$$-1\frac{7}{10}, -1\frac{1}{10}, -\frac{1}{2}, \frac{1}{5}, \frac{1}{2}, \frac{4}{5}, 1\frac{1}{2}, 1\frac{4}{5}$$



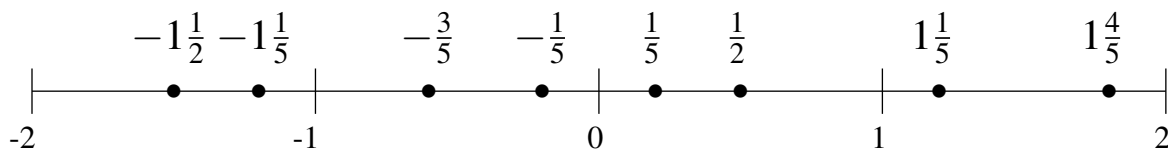
$$-\frac{1}{2}, \frac{1}{2}, -1\frac{1}{2}, 1\frac{1}{5}, -1\frac{4}{5}, \frac{4}{5}, \frac{1}{5}, 1\frac{3}{5}$$

$$-1\frac{4}{5}, -1\frac{1}{2}, -\frac{1}{2}, \frac{1}{5}, \frac{1}{2}, \frac{4}{5}, 1\frac{1}{5}, 1\frac{3}{5}$$



$$-\frac{1}{5}, \frac{1}{5}, 1\frac{1}{5}, -1\frac{1}{2}, 1\frac{4}{5}, -\frac{3}{5}, \frac{1}{2}, -1\frac{1}{5}$$

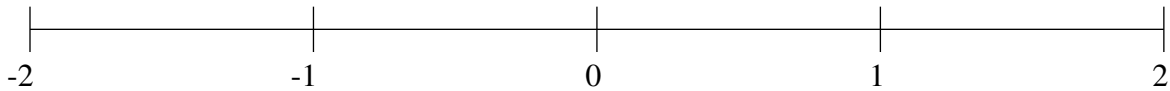
$$-1\frac{1}{2}, -1\frac{1}{5}, -\frac{3}{5}, -\frac{1}{5}, \frac{1}{5}, \frac{1}{2}, 1\frac{1}{5}, 1\frac{4}{5}$$



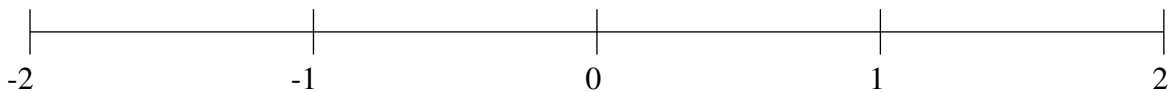
## Ordenar Fracciones (D)

Ordene cada conjunto de fracciones usando la recta numérica.

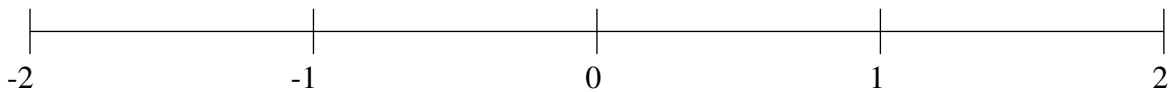
$$\frac{4}{5}, \frac{1}{5}, -\frac{1}{5}, -1\frac{1}{2}, 1\frac{9}{10}, -1\frac{1}{5}, -1\frac{4}{5}, 1\frac{3}{5}$$



$$1\frac{2}{5}, -\frac{4}{5}, \frac{4}{5}, -\frac{2}{5}, \frac{1}{2}, -1\frac{4}{5}, -1\frac{1}{2}, -1\frac{1}{10}$$



$$\frac{1}{2}, 1\frac{1}{2}, -\frac{1}{2}, -1\frac{4}{5}, -1\frac{1}{2}, \frac{1}{10}, \frac{4}{5}, -\frac{1}{5}$$

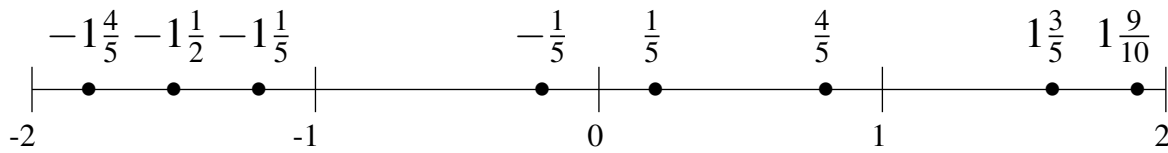


## Ordenar Fracciones (D) Respuestas

Ordene cada conjunto de fracciones usando la recta numérica.

$$\frac{4}{5}, \frac{1}{5}, -\frac{1}{5}, -1\frac{1}{2}, 1\frac{9}{10}, -1\frac{1}{5}, -1\frac{4}{5}, 1\frac{3}{5}$$

$$-1\frac{4}{5}, -1\frac{1}{2}, -1\frac{1}{5}, -\frac{1}{5}, \frac{1}{5}, \frac{4}{5}, 1\frac{3}{5}, 1\frac{9}{10}$$



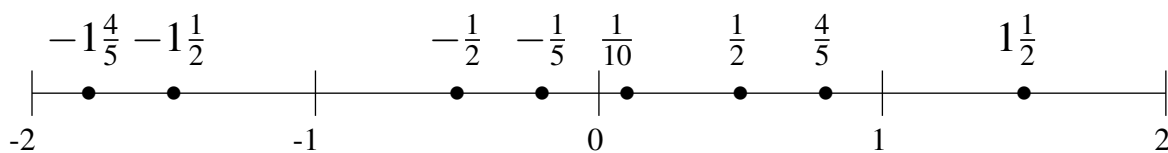
$$1\frac{2}{5}, -\frac{4}{5}, \frac{4}{5}, -\frac{2}{5}, \frac{1}{2}, -1\frac{4}{5}, -1\frac{1}{2}, -1\frac{1}{10}$$

$$-1\frac{4}{5}, -1\frac{1}{2}, -1\frac{1}{10}, -\frac{4}{5}, -\frac{2}{5}, \frac{1}{2}, \frac{4}{5}, 1\frac{2}{5}$$



$$\frac{1}{2}, 1\frac{1}{2}, -\frac{1}{2}, -1\frac{4}{5}, -1\frac{1}{2}, \frac{1}{10}, \frac{4}{5}, -\frac{1}{5}$$

$$-1\frac{4}{5}, -1\frac{1}{2}, -\frac{1}{2}, -\frac{1}{5}, \frac{1}{10}, \frac{1}{2}, \frac{4}{5}, 1\frac{1}{2}$$

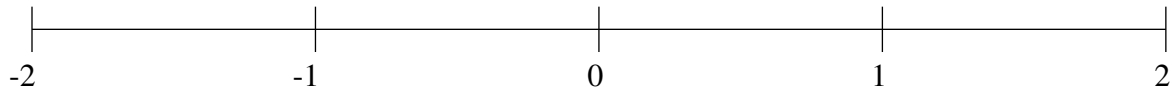




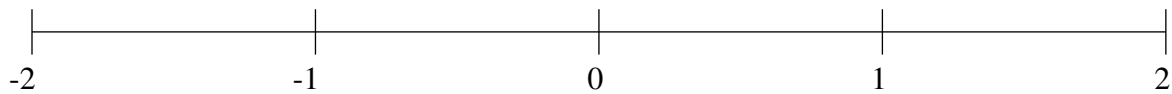
## Ordenar Fracciones (E)

Ordene cada conjunto de fracciones usando la recta numérica.

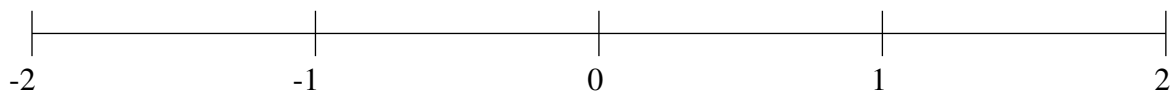
$$-1\frac{1}{2}, -\frac{1}{5}, -1\frac{4}{5}, -\frac{4}{5}, -\frac{1}{2}, 1\frac{1}{5}, 1\frac{1}{2}, \frac{1}{5}$$



$$\frac{1}{2}, -1\frac{1}{5}, 1\frac{4}{5}, -1\frac{1}{2}, 1\frac{1}{2}, -\frac{1}{10}, -1\frac{4}{5}, -\frac{1}{2}$$



$$-\frac{1}{5}, 1\frac{4}{5}, -1\frac{2}{5}, \frac{4}{5}, \frac{1}{5}, -\frac{1}{2}, \frac{1}{2}, -\frac{4}{5}$$

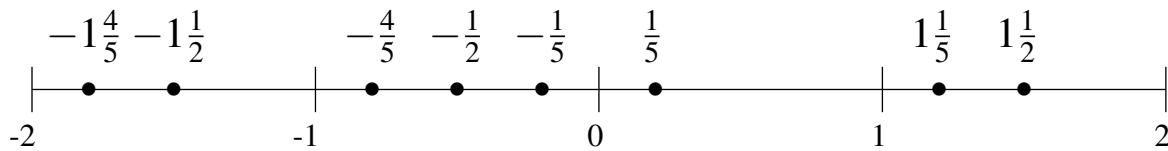


## Ordenar Fracciones (E) Respuestas

Ordene cada conjunto de fracciones usando la recta numérica.

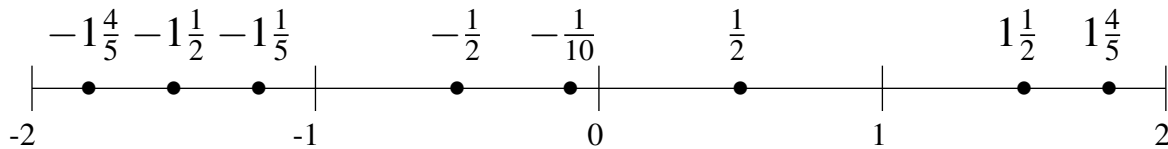
$$-1\frac{1}{2}, -\frac{1}{5}, -1\frac{4}{5}, -\frac{4}{5}, -\frac{1}{2}, 1\frac{1}{5}, 1\frac{1}{2}, \frac{1}{5}$$

$$-1\frac{4}{5}, -1\frac{1}{2}, -\frac{4}{5}, -\frac{1}{2}, -\frac{1}{5}, \frac{1}{5}, 1\frac{1}{5}, 1\frac{1}{2}$$



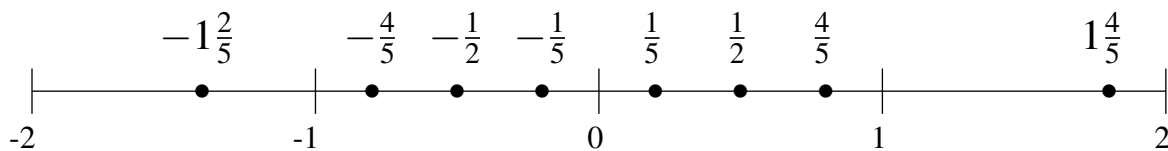
$$\frac{1}{2}, -1\frac{1}{5}, 1\frac{4}{5}, -1\frac{1}{2}, 1\frac{1}{2}, -\frac{1}{10}, -1\frac{4}{5}, -\frac{1}{2}$$

$$-1\frac{4}{5}, -1\frac{1}{2}, -1\frac{1}{5}, -\frac{1}{2}, -\frac{1}{10}, \frac{1}{2}, 1\frac{1}{2}, 1\frac{4}{5}$$



$$-\frac{1}{5}, 1\frac{4}{5}, -1\frac{2}{5}, \frac{4}{5}, \frac{1}{5}, -\frac{1}{2}, \frac{1}{2}, -\frac{4}{5}$$

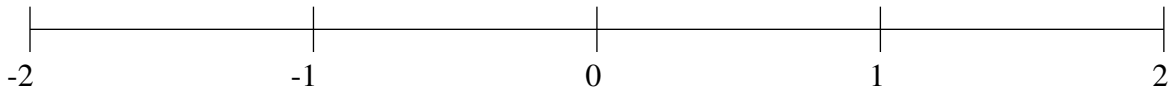
$$-1\frac{2}{5}, -\frac{4}{5}, -\frac{1}{2}, -\frac{1}{5}, \frac{1}{5}, \frac{1}{2}, \frac{4}{5}, 1\frac{4}{5}$$



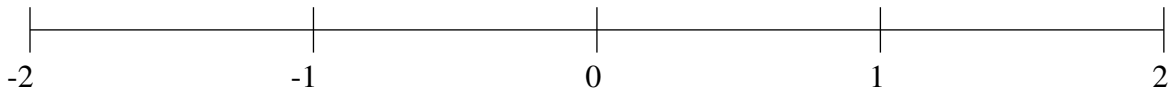
## Ordenar Fracciones (F)

Ordene cada conjunto de fracciones usando la recta numérica.

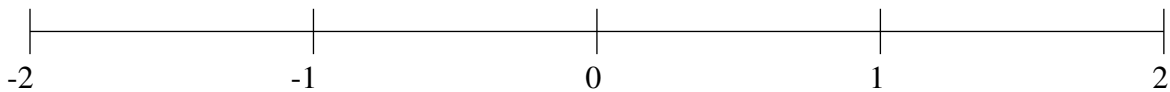
$$-\frac{2}{5}, \frac{1}{2}, -1\frac{1}{2}, \frac{4}{5}, 1\frac{1}{2}, \frac{1}{5}, -1\frac{1}{5}, 1\frac{1}{5}$$



$$1\frac{4}{5}, \frac{4}{5}, -1\frac{4}{5}, \frac{1}{2}, 1\frac{1}{2}, -\frac{3}{5}, -\frac{1}{10}, -1\frac{1}{5}$$



$$-1\frac{3}{5}, -\frac{1}{5}, 1\frac{2}{5}, -\frac{4}{5}, -1\frac{3}{10}, \frac{7}{10}, \frac{1}{5}, -\frac{1}{2}$$

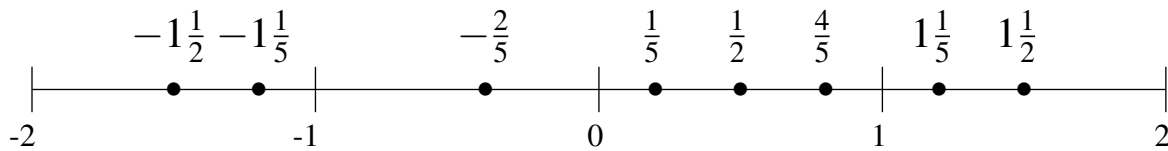


## Ordenar Fracciones (F) Respuestas

Ordene cada conjunto de fracciones usando la recta numérica.

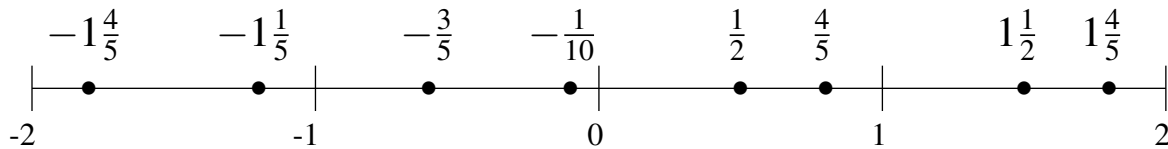
$$-\frac{2}{5}, \frac{1}{2}, -1\frac{1}{2}, \frac{4}{5}, 1\frac{1}{2}, \frac{1}{5}, -1\frac{1}{5}, 1\frac{1}{5}$$

$$-1\frac{1}{2}, -1\frac{1}{5}, -\frac{2}{5}, \frac{1}{5}, \frac{1}{2}, \frac{4}{5}, 1\frac{1}{5}, 1\frac{1}{2}$$



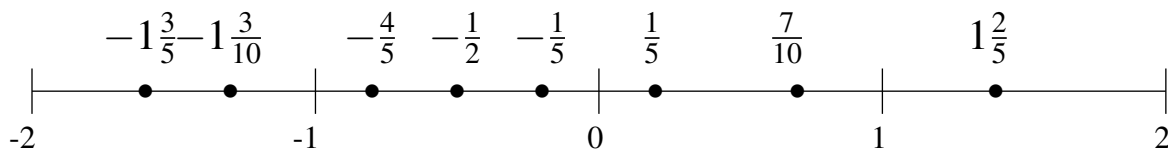
$$1\frac{4}{5}, \frac{4}{5}, -1\frac{4}{5}, \frac{1}{2}, 1\frac{1}{2}, -\frac{3}{5}, -\frac{1}{10}, -1\frac{1}{5}$$

$$-1\frac{4}{5}, -1\frac{1}{5}, -\frac{3}{5}, -\frac{1}{10}, \frac{1}{2}, \frac{4}{5}, 1\frac{1}{2}, 1\frac{4}{5}$$



$$-1\frac{3}{5}, -\frac{1}{5}, 1\frac{2}{5}, -\frac{4}{5}, -1\frac{3}{10}, \frac{7}{10}, \frac{1}{5}, -\frac{1}{2}$$

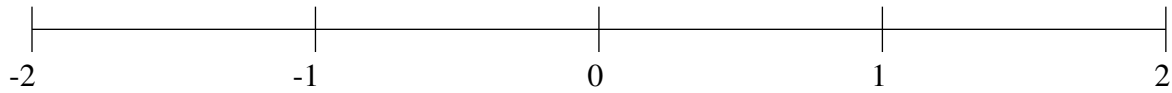
$$-1\frac{3}{5}, -1\frac{3}{10}, -\frac{4}{5}, -\frac{1}{2}, -\frac{1}{5}, \frac{1}{5}, \frac{7}{10}, 1\frac{2}{5}$$



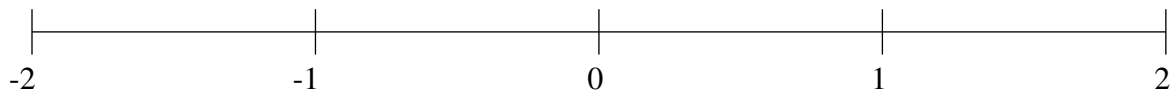
## Ordenar Fracciones (G)

Ordene cada conjunto de fracciones usando la recta numérica.

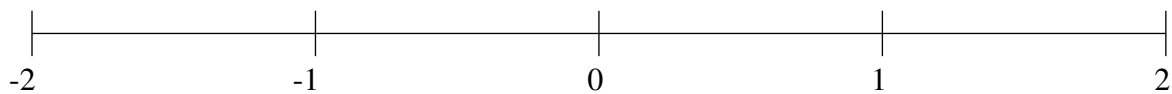
$$1\frac{4}{5}, \frac{4}{5}, -\frac{4}{5}, -1\frac{1}{5}, -1\frac{1}{2}, -\frac{1}{2}, 1\frac{1}{5}, -1\frac{4}{5}$$



$$-1\frac{1}{5}, -\frac{1}{2}, \frac{1}{2}, 1\frac{1}{2}, -\frac{4}{5}, \frac{4}{5}, \frac{1}{5}, -1\frac{1}{2}$$



$$1\frac{4}{5}, \frac{1}{5}, -\frac{3}{5}, 1\frac{1}{2}, -1\frac{4}{5}, -1\frac{2}{5}, \frac{4}{5}, \frac{1}{2}$$

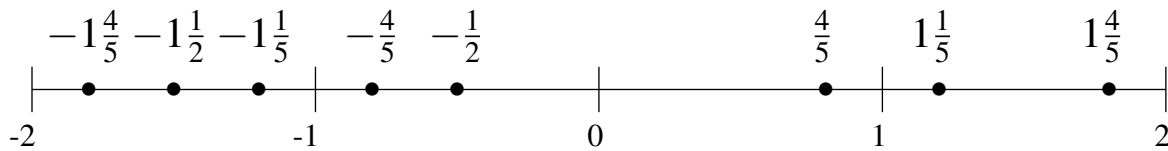


## Ordenar Fracciones (G) Respuestas

Ordene cada conjunto de fracciones usando la recta numérica.

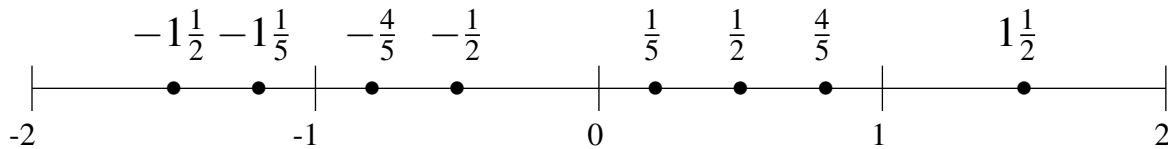
$$1\frac{4}{5}, \frac{4}{5}, -\frac{4}{5}, -1\frac{1}{5}, -1\frac{1}{2}, -\frac{1}{2}, 1\frac{1}{5}, -1\frac{4}{5}$$

$$-1\frac{4}{5}, -1\frac{1}{2}, -1\frac{1}{5}, -\frac{4}{5}, -\frac{1}{2}, \frac{4}{5}, 1\frac{1}{5}, 1\frac{4}{5}$$



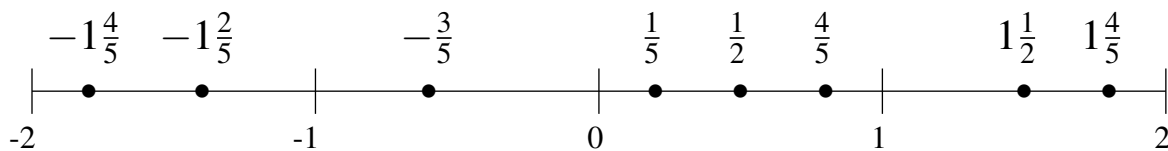
$$-1\frac{1}{5}, -\frac{1}{2}, \frac{1}{2}, 1\frac{1}{2}, -\frac{4}{5}, \frac{4}{5}, \frac{1}{5}, -1\frac{1}{2}$$

$$-1\frac{1}{2}, -1\frac{1}{5}, -\frac{4}{5}, -\frac{1}{2}, \frac{1}{5}, \frac{1}{2}, \frac{4}{5}, 1\frac{1}{2}$$



$$1\frac{4}{5}, \frac{1}{5}, -\frac{3}{5}, 1\frac{1}{2}, -1\frac{4}{5}, -1\frac{2}{5}, \frac{4}{5}, \frac{1}{2}$$

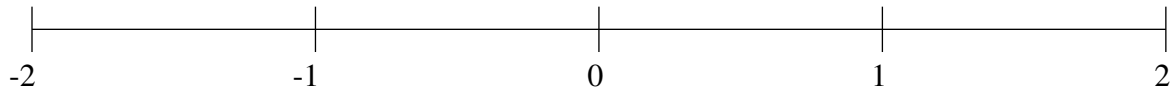
$$-1\frac{4}{5}, -1\frac{2}{5}, -\frac{3}{5}, \frac{1}{5}, \frac{1}{2}, \frac{4}{5}, 1\frac{1}{2}, 1\frac{4}{5}$$



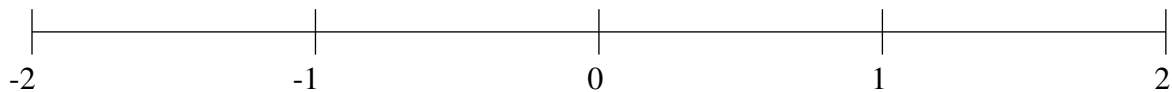
## Ordenar Fracciones (H)

Ordene cada conjunto de fracciones usando la recta numérica.

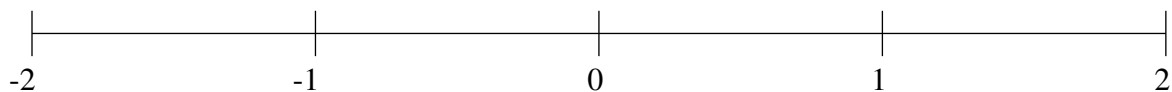
$$1\frac{4}{5}, -1\frac{1}{2}, -\frac{3}{5}, \frac{1}{2}, 1\frac{1}{2}, -1\frac{4}{5}, 1\frac{1}{10}, -\frac{1}{5}$$



$$\frac{2}{5}, -\frac{1}{5}, -1\frac{2}{5}, -1\frac{4}{5}, -\frac{1}{2}, 1\frac{1}{2}, \frac{1}{10}, -\frac{4}{5}$$



$$-1\frac{4}{5}, \frac{4}{5}, \frac{1}{2}, 1\frac{1}{2}, \frac{1}{5}, -1\frac{1}{5}, -\frac{1}{2}, -\frac{4}{5}$$

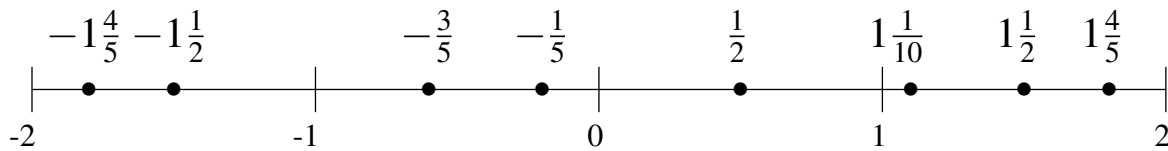


## Ordenar Fracciones (H) Respuestas

Ordene cada conjunto de fracciones usando la recta numérica.

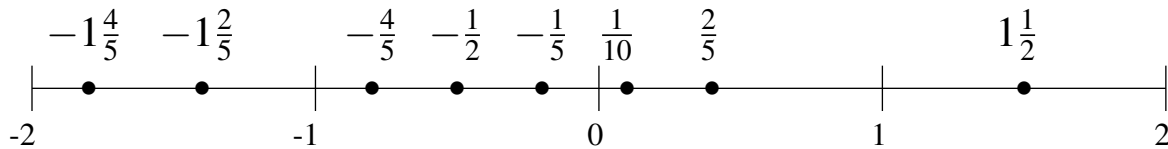
$$1\frac{4}{5}, -1\frac{1}{2}, -\frac{3}{5}, \frac{1}{2}, 1\frac{1}{2}, -1\frac{4}{5}, 1\frac{1}{10}, -\frac{1}{5}$$

$$-1\frac{4}{5}, -1\frac{1}{2}, -\frac{3}{5}, -\frac{1}{5}, \frac{1}{2}, 1\frac{1}{10}, 1\frac{1}{2}, 1\frac{4}{5}$$



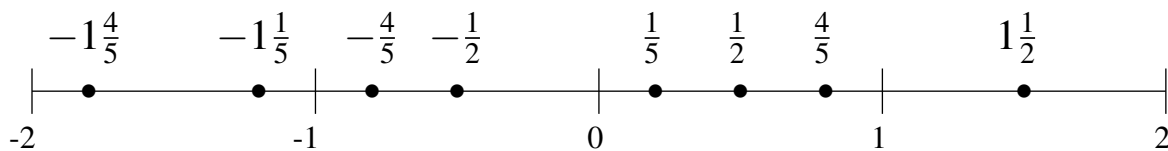
$$\frac{2}{5}, -\frac{1}{5}, -1\frac{2}{5}, -1\frac{4}{5}, -\frac{1}{2}, 1\frac{1}{2}, \frac{1}{10}, -\frac{4}{5}$$

$$-1\frac{4}{5}, -1\frac{2}{5}, -\frac{4}{5}, -\frac{1}{2}, -\frac{1}{5}, \frac{1}{10}, \frac{2}{5}, 1\frac{1}{2}$$



$$-1\frac{4}{5}, \frac{4}{5}, \frac{1}{2}, 1\frac{1}{2}, \frac{1}{5}, -1\frac{1}{5}, -\frac{1}{2}, -\frac{4}{5}$$

$$-1\frac{4}{5}, -1\frac{1}{5}, -\frac{4}{5}, -\frac{1}{2}, \frac{1}{5}, \frac{1}{2}, \frac{4}{5}, 1\frac{1}{2}$$

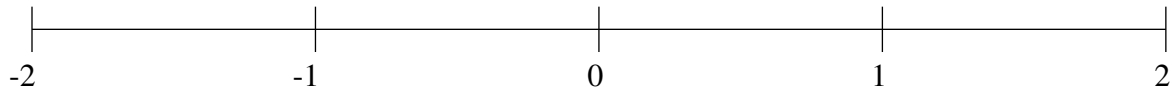




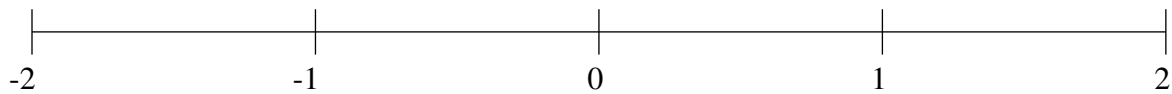
## Ordenar Fracciones (I)

Ordene cada conjunto de fracciones usando la recta numérica.

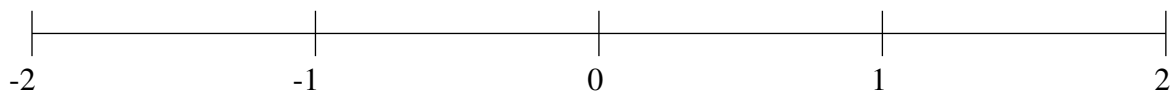
$$-\frac{1}{2}, \frac{7}{10}, 1\frac{1}{5}, \frac{2}{5}, -1\frac{2}{5}, -\frac{1}{5}, 1\frac{3}{5}, 1\frac{9}{10}$$



$$1\frac{1}{2}, \frac{4}{5}, -1\frac{2}{5}, \frac{1}{5}, 1\frac{4}{5}, 1\frac{1}{5}, -1\frac{4}{5}, -\frac{1}{2}$$



$$\frac{1}{2}, 1\frac{1}{5}, -\frac{4}{5}, 1\frac{1}{2}, 1\frac{4}{5}, -1\frac{1}{2}, \frac{4}{5}, -\frac{1}{2}$$

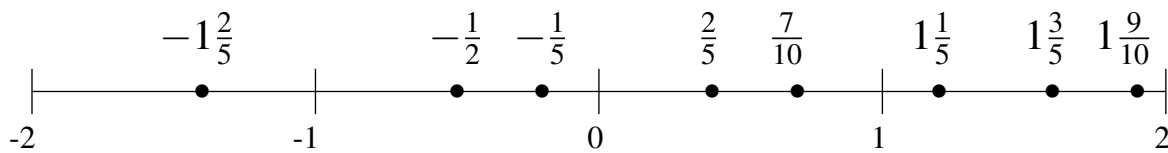


## Ordenar Fracciones (I) Respuestas

Ordene cada conjunto de fracciones usando la recta numérica.

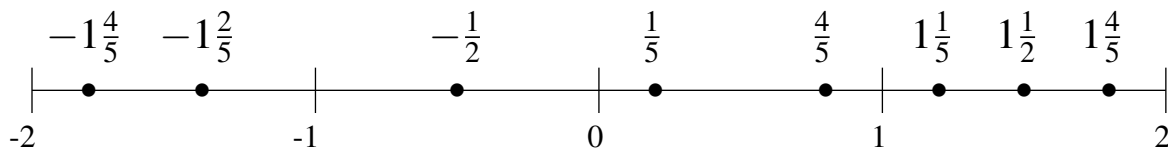
$$-\frac{1}{2}, \frac{7}{10}, 1\frac{1}{5}, \frac{2}{5}, -1\frac{2}{5}, -\frac{1}{5}, 1\frac{3}{5}, 1\frac{9}{10}$$

$$-1\frac{2}{5}, -\frac{1}{2}, -\frac{1}{5}, \frac{2}{5}, \frac{7}{10}, 1\frac{1}{5}, 1\frac{3}{5}, 1\frac{9}{10}$$



$$1\frac{1}{2}, \frac{4}{5}, -1\frac{2}{5}, \frac{1}{5}, 1\frac{4}{5}, 1\frac{1}{5}, -1\frac{4}{5}, -\frac{1}{2}$$

$$-1\frac{4}{5}, -1\frac{2}{5}, -\frac{1}{2}, \frac{1}{5}, \frac{4}{5}, 1\frac{1}{5}, 1\frac{1}{2}, 1\frac{4}{5}$$



$$\frac{1}{2}, 1\frac{1}{5}, -\frac{4}{5}, 1\frac{1}{2}, 1\frac{4}{5}, -1\frac{1}{2}, \frac{4}{5}, -\frac{1}{2}$$

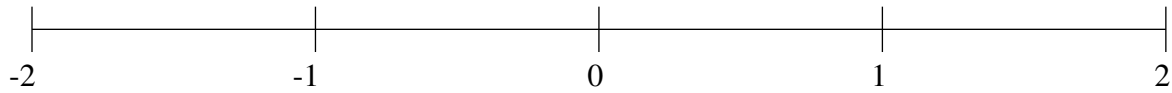
$$-1\frac{1}{2}, -\frac{4}{5}, -\frac{1}{2}, \frac{1}{2}, \frac{4}{5}, 1\frac{1}{5}, 1\frac{1}{2}, 1\frac{4}{5}$$



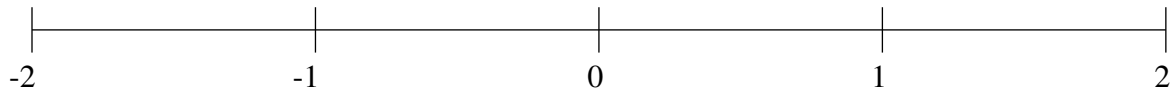
## Ordenar Fracciones (J)

Ordene cada conjunto de fracciones usando la recta numérica.

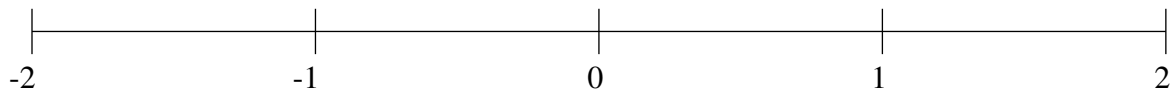
$$1\frac{1}{5}, -1\frac{4}{5}, -\frac{4}{5}, -\frac{1}{5}, 1\frac{4}{5}, \frac{1}{2}, -\frac{1}{2}, 1\frac{1}{2}$$



$$1\frac{1}{5}, 1\frac{1}{2}, \frac{3}{5}, -1\frac{1}{10}, -\frac{1}{5}, 1\frac{4}{5}, -1\frac{2}{5}, -\frac{1}{2}$$



$$-1\frac{1}{5}, 1\frac{3}{5}, -1\frac{1}{2}, \frac{1}{5}, -\frac{4}{5}, -\frac{1}{2}, \frac{3}{5}, -\frac{1}{5}$$

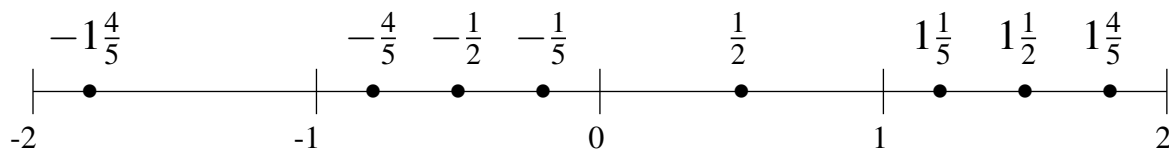


## Ordenar Fracciones (J) Respuestas

Ordene cada conjunto de fracciones usando la recta numérica.

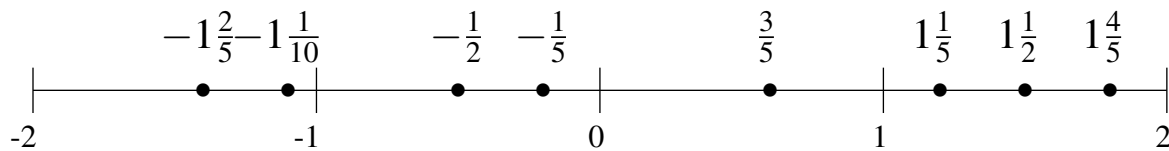
$$1\frac{1}{5}, -1\frac{4}{5}, -\frac{4}{5}, -\frac{1}{5}, 1\frac{4}{5}, \frac{1}{2}, -\frac{1}{2}, 1\frac{1}{2}$$

$$-1\frac{4}{5}, -\frac{4}{5}, -\frac{1}{2}, -\frac{1}{5}, \frac{1}{2}, 1\frac{1}{5}, 1\frac{1}{2}, 1\frac{4}{5}$$



$$1\frac{1}{5}, 1\frac{1}{2}, \frac{3}{5}, -1\frac{1}{10}, -\frac{1}{5}, 1\frac{4}{5}, -1\frac{2}{5}, -\frac{1}{2}$$

$$-1\frac{2}{5}, -1\frac{1}{10}, -\frac{1}{2}, -\frac{1}{5}, \frac{3}{5}, 1\frac{1}{5}, 1\frac{1}{2}, 1\frac{4}{5}$$



$$-1\frac{1}{5}, 1\frac{3}{5}, -1\frac{1}{2}, \frac{1}{5}, -\frac{4}{5}, -\frac{1}{2}, \frac{3}{5}, -\frac{1}{5}$$

$$-1\frac{1}{2}, -1\frac{1}{5}, -\frac{4}{5}, -\frac{1}{2}, -\frac{1}{5}, \frac{1}{5}, \frac{3}{5}, 1\frac{3}{5}$$

