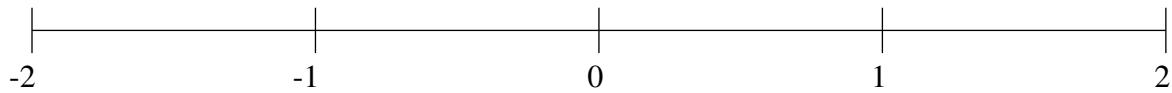


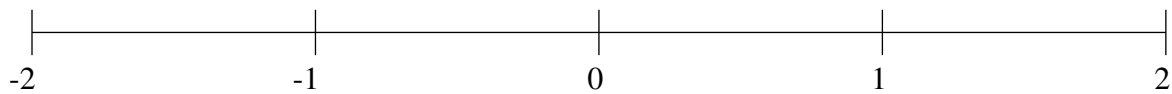
## Ordenar Fracciones (B)

Ordene cada conjunto de fracciones usando la recta numérica.

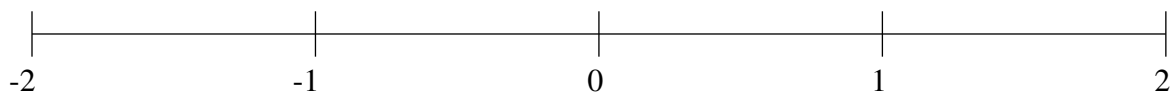
$$\frac{1}{4}, 1\frac{5}{6}, 1\frac{1}{7}, -1\frac{3}{5}, -\frac{5}{6}, -\frac{1}{10}, \frac{5}{6}, -1\frac{1}{7}$$



$$\frac{1}{2}, -1\frac{1}{2}, -\frac{2}{5}, -\frac{2}{3}, -1\frac{1}{5}, \frac{3}{4}, 1\frac{1}{2}, 1\frac{3}{4}$$



$$\frac{3}{4}, 1\frac{1}{5}, -1\frac{8}{9}, 1\frac{1}{2}, -1\frac{1}{6}, -\frac{2}{3}, -\frac{1}{3}, 1\frac{8}{9}$$

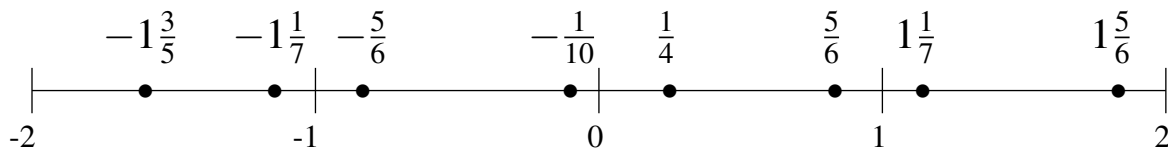


## Ordenar Fracciones (B) Respuestas

Ordene cada conjunto de fracciones usando la recta numérica.

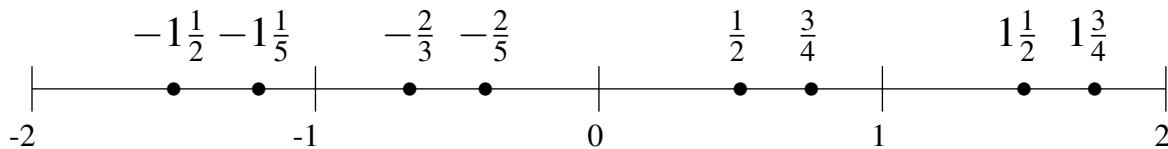
$$\frac{1}{4}, 1\frac{5}{6}, 1\frac{1}{7}, -1\frac{3}{5}, -\frac{5}{6}, -\frac{1}{10}, \frac{5}{6}, -1\frac{1}{7}$$

$$-1\frac{3}{5}, -1\frac{1}{7}, -\frac{5}{6}, -\frac{1}{10}, \frac{1}{4}, \frac{5}{6}, 1\frac{1}{7}, 1\frac{5}{6}$$



$$\frac{1}{2}, -1\frac{1}{2}, -\frac{2}{5}, -\frac{2}{3}, -1\frac{1}{5}, \frac{3}{4}, 1\frac{1}{2}, 1\frac{3}{4}$$

$$-1\frac{1}{2}, -1\frac{1}{5}, -\frac{2}{3}, -\frac{2}{5}, \frac{1}{2}, \frac{3}{4}, 1\frac{1}{2}, 1\frac{3}{4}$$



$$\frac{3}{4}, 1\frac{1}{5}, -1\frac{8}{9}, 1\frac{1}{2}, -1\frac{1}{6}, -\frac{2}{3}, -\frac{1}{3}, 1\frac{8}{9}$$

$$-1\frac{8}{9}, -1\frac{1}{6}, -\frac{2}{3}, -\frac{1}{3}, \frac{3}{4}, 1\frac{1}{5}, 1\frac{1}{2}, 1\frac{8}{9}$$

