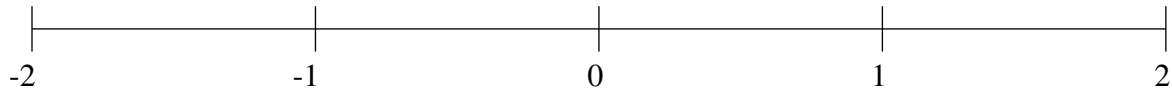


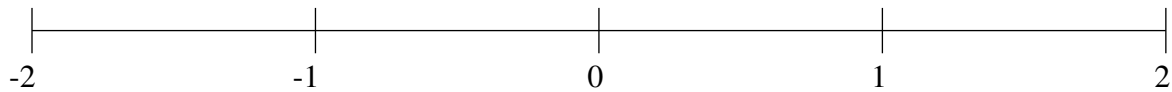
## Ordenar Fracciones (C)

Ordene cada conjunto de fracciones usando la recta numérica.

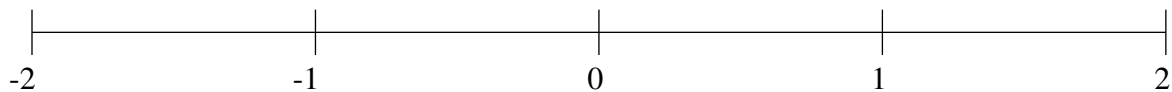
$$-1\frac{3}{4}, \frac{2}{3}, -\frac{2}{3}, 1\frac{5}{8}, 1\frac{1}{3}, -\frac{2}{5}, -\frac{1}{9}, -1\frac{3}{7}$$



$$\frac{1}{2}, -\frac{3}{10}, -1\frac{1}{2}, -1\frac{4}{5}, \frac{2}{7}, 1\frac{1}{4}, 1\frac{1}{2}, 1\frac{7}{8}$$



$$-\frac{1}{4}, 1\frac{1}{2}, \frac{1}{2}, -\frac{5}{6}, \frac{5}{7}, 1\frac{1}{5}, -1\frac{1}{2}, \frac{2}{7}$$

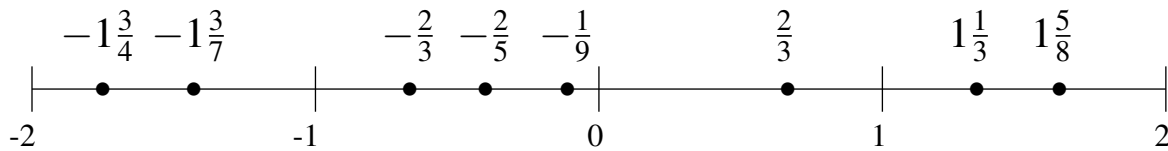


## Ordenar Fracciones (C) Respuestas

Ordene cada conjunto de fracciones usando la recta numérica.

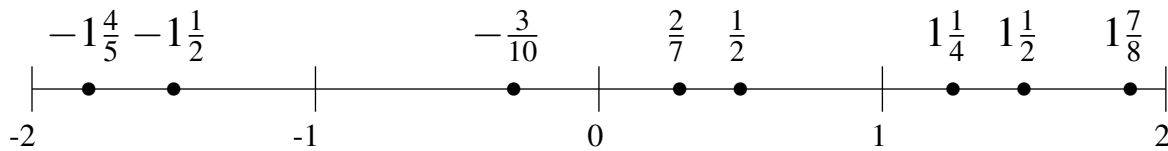
$$-1\frac{3}{4}, \frac{2}{3}, -\frac{2}{3}, 1\frac{5}{8}, 1\frac{1}{3}, -\frac{2}{5}, -\frac{1}{9}, -1\frac{3}{7}$$

$$-1\frac{3}{4}, -1\frac{3}{7}, -\frac{2}{3}, -\frac{2}{5}, -\frac{1}{9}, \frac{2}{3}, 1\frac{1}{3}, 1\frac{5}{8}$$



$$\frac{1}{2}, -\frac{3}{10}, -1\frac{1}{2}, -1\frac{4}{5}, \frac{2}{7}, 1\frac{1}{4}, 1\frac{1}{2}, 1\frac{7}{8}$$

$$-1\frac{4}{5}, -1\frac{1}{2}, -\frac{3}{10}, \frac{2}{7}, \frac{1}{2}, 1\frac{1}{4}, 1\frac{1}{2}, 1\frac{7}{8}$$



$$-\frac{1}{4}, 1\frac{1}{2}, \frac{1}{2}, -\frac{5}{6}, \frac{5}{7}, 1\frac{1}{5}, -1\frac{1}{2}, \frac{2}{7}$$

$$-1\frac{1}{2}, -\frac{5}{6}, -\frac{1}{4}, \frac{2}{7}, \frac{1}{2}, \frac{5}{7}, 1\frac{1}{5}, 1\frac{1}{2}$$

