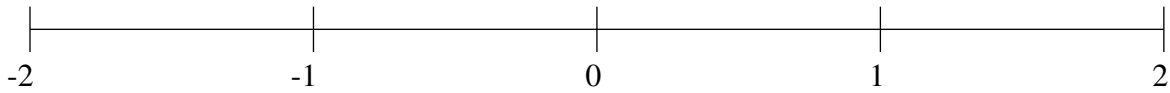


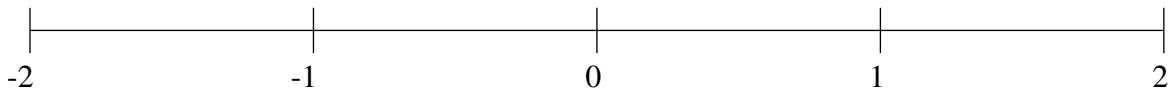
## Ordenar Fracciones (D)

Ordene cada conjunto de fracciones usando la recta numérica.

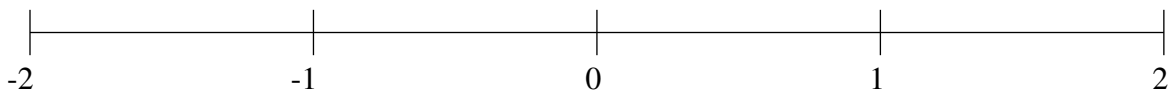
$$-1\frac{3}{4}, \frac{1}{4}, -\frac{3}{4}, \frac{1}{2}, -\frac{1}{3}, -1\frac{1}{2}, 1\frac{4}{5}, 1\frac{1}{4}$$



$$\frac{5}{6}, -1\frac{1}{2}, 1\frac{8}{9}, -\frac{1}{6}, \frac{1}{9}, -1\frac{2}{9}, \frac{5}{8}, -\frac{3}{4}$$



$$-1\frac{2}{9}, \frac{1}{4}, -1\frac{2}{3}, \frac{8}{9}, 1\frac{3}{5}, 1\frac{5}{6}, 1\frac{1}{4}, -\frac{1}{5}$$

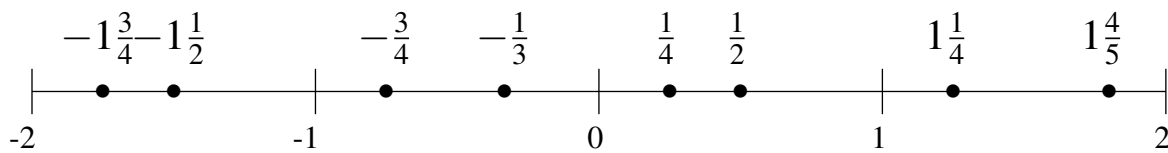


## Ordenar Fracciones (D) Respuestas

Ordene cada conjunto de fracciones usando la recta numérica.

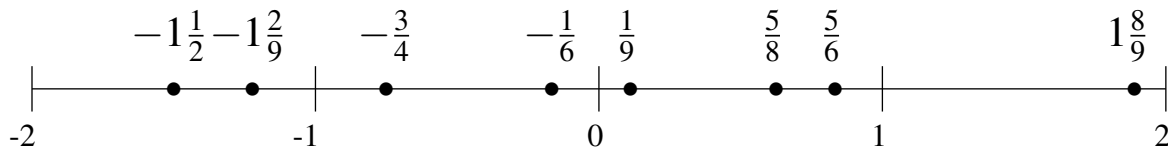
$$-1\frac{3}{4}, \frac{1}{4}, -\frac{3}{4}, \frac{1}{2}, -\frac{1}{3}, -1\frac{1}{2}, 1\frac{4}{5}, 1\frac{1}{4}$$

$$-1\frac{3}{4}, -1\frac{1}{2}, -\frac{3}{4}, -\frac{1}{3}, \frac{1}{4}, \frac{1}{2}, 1\frac{1}{4}, 1\frac{4}{5}$$



$$\frac{5}{6}, -1\frac{1}{2}, 1\frac{8}{9}, -\frac{1}{6}, \frac{1}{9}, -1\frac{2}{9}, \frac{5}{8}, -\frac{3}{4}$$

$$-1\frac{1}{2}, -1\frac{2}{9}, -\frac{3}{4}, -\frac{1}{6}, \frac{1}{9}, \frac{5}{8}, \frac{5}{6}, 1\frac{8}{9}$$



$$-1\frac{2}{9}, \frac{1}{4}, -1\frac{2}{3}, \frac{8}{9}, 1\frac{3}{5}, 1\frac{5}{6}, 1\frac{1}{4}, -\frac{1}{5}$$

$$-1\frac{2}{3}, -1\frac{2}{9}, -\frac{1}{5}, \frac{1}{4}, \frac{8}{9}, 1\frac{1}{4}, 1\frac{3}{5}, 1\frac{5}{6}$$

