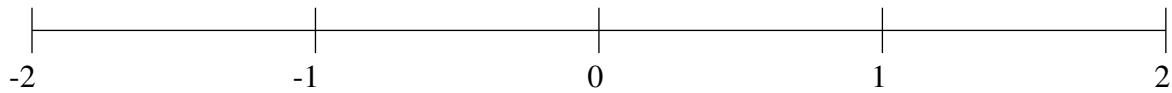


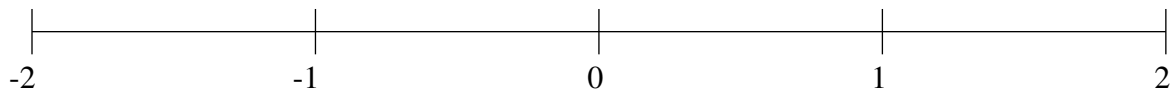
## Ordenar Fracciones (E)

Ordene cada conjunto de fracciones usando la recta numérica.

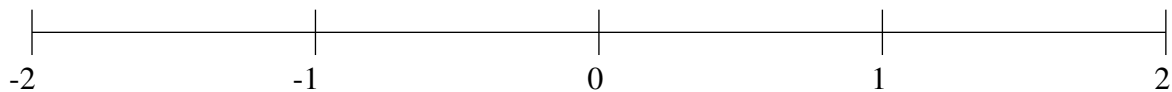
$$-1\frac{2}{5}, -\frac{7}{10}, 1\frac{1}{5}, 1\frac{6}{7}, \frac{1}{4}, -\frac{1}{5}, 1\frac{4}{7}, \frac{3}{4}$$



$$\frac{1}{10}, -1\frac{5}{6}, 1\frac{1}{3}, -\frac{1}{2}, \frac{1}{3}, -1\frac{1}{5}, 1\frac{1}{9}, \frac{7}{9}$$



$$-\frac{1}{3}, -1\frac{3}{4}, \frac{9}{10}, 1\frac{2}{3}, 1\frac{1}{4}, -\frac{2}{3}, -1\frac{1}{2}, \frac{1}{3}$$

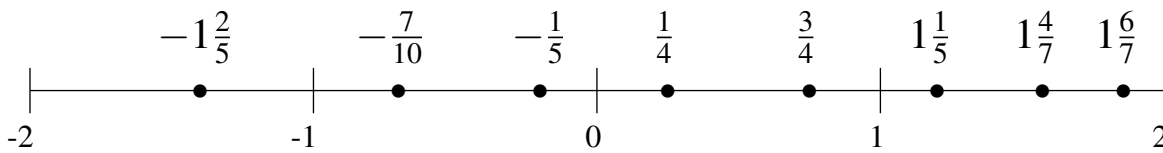


## Ordenar Fracciones (E) Respuestas

Ordene cada conjunto de fracciones usando la recta numérica.

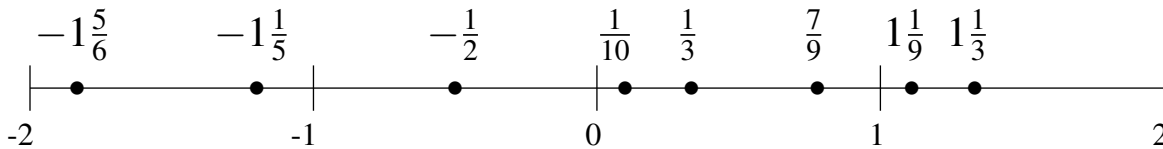
$$-1\frac{2}{5}, -\frac{7}{10}, 1\frac{1}{5}, 1\frac{6}{7}, \frac{1}{4}, -\frac{1}{5}, 1\frac{4}{7}, \frac{3}{4}$$

$$-1\frac{2}{5}, -\frac{7}{10}, -\frac{1}{5}, \frac{1}{4}, \frac{3}{4}, 1\frac{1}{5}, 1\frac{4}{7}, 1\frac{6}{7}$$



$$\frac{1}{10}, -1\frac{5}{6}, 1\frac{1}{3}, -\frac{1}{2}, \frac{1}{3}, -1\frac{1}{5}, 1\frac{1}{9}, \frac{7}{9}$$

$$-1\frac{5}{6}, -1\frac{1}{5}, -\frac{1}{2}, \frac{1}{10}, \frac{1}{3}, \frac{7}{9}, 1\frac{1}{9}, 1\frac{1}{3}$$



$$-\frac{1}{3}, -1\frac{3}{4}, \frac{9}{10}, 1\frac{2}{3}, 1\frac{1}{4}, -\frac{2}{3}, -1\frac{1}{2}, \frac{1}{3}$$

$$-1\frac{3}{4}, -1\frac{1}{2}, -\frac{2}{3}, -\frac{1}{3}, \frac{1}{3}, \frac{9}{10}, 1\frac{1}{4}, 1\frac{2}{3}$$

