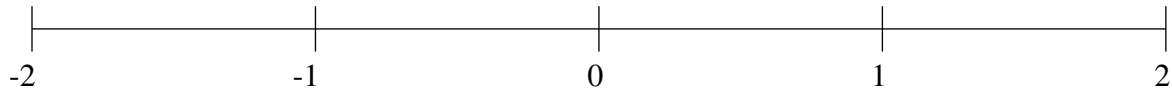


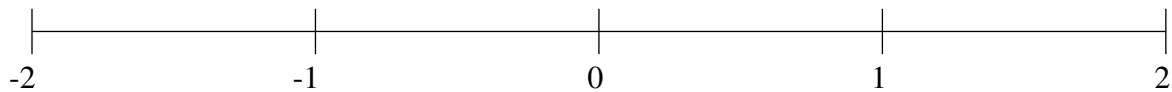
Ordenar Fracciones (F)

Ordene cada conjunto de fracciones usando la recta numérica.

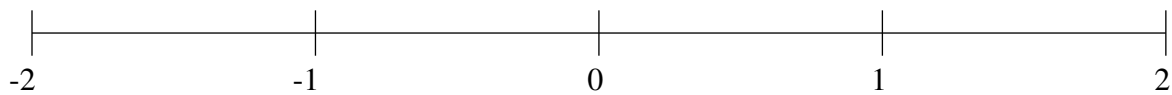
$$-1\frac{1}{8}, \frac{3}{4}, -\frac{1}{7}, \frac{1}{2}, 1\frac{4}{9}, -\frac{1}{2}, -1\frac{2}{5}, -1\frac{6}{7}$$



$$-1\frac{1}{2}, \frac{1}{7}, -1\frac{2}{9}, -\frac{1}{8}, 1\frac{3}{5}, \frac{2}{3}, -\frac{6}{7}, -\frac{4}{9}$$



$$1\frac{3}{7}, \frac{8}{9}, \frac{1}{2}, \frac{1}{4}, -1\frac{1}{2}, -1\frac{5}{6}, 1\frac{1}{6}, -\frac{2}{3}$$

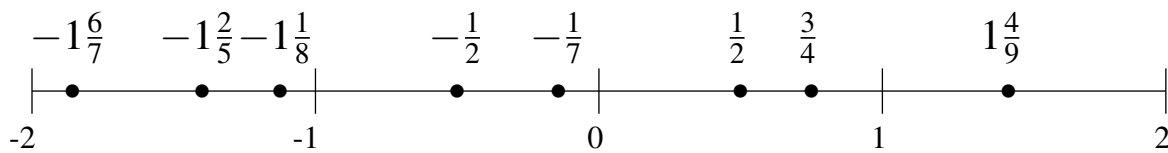


Ordenar Fracciones (F) Respuestas

Ordene cada conjunto de fracciones usando la recta numérica.

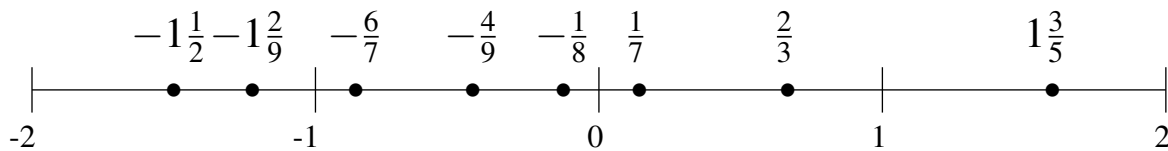
$$-1\frac{1}{8}, \frac{3}{4}, -\frac{1}{7}, \frac{1}{2}, 1\frac{4}{9}, -\frac{1}{2}, -1\frac{2}{5}, -1\frac{6}{7}$$

$$-1\frac{6}{7}, -1\frac{2}{5}, -1\frac{1}{8}, -\frac{1}{2}, -\frac{1}{7}, \frac{1}{2}, \frac{3}{4}, 1\frac{4}{9}$$



$$-1\frac{1}{2}, \frac{1}{7}, -1\frac{2}{9}, -\frac{1}{8}, 1\frac{3}{5}, \frac{2}{3}, -\frac{6}{7}, -\frac{4}{9}$$

$$-1\frac{1}{2}, -1\frac{2}{9}, -\frac{6}{7}, -\frac{4}{9}, -\frac{1}{8}, \frac{1}{7}, \frac{2}{3}, 1\frac{3}{5}$$



$$1\frac{3}{7}, \frac{8}{9}, \frac{1}{2}, \frac{1}{4}, -1\frac{1}{2}, -1\frac{5}{6}, 1\frac{1}{6}, -\frac{2}{3}$$

$$-1\frac{5}{6}, -1\frac{1}{2}, -\frac{2}{3}, \frac{1}{4}, \frac{1}{2}, \frac{8}{9}, 1\frac{1}{6}, 1\frac{3}{7}$$

