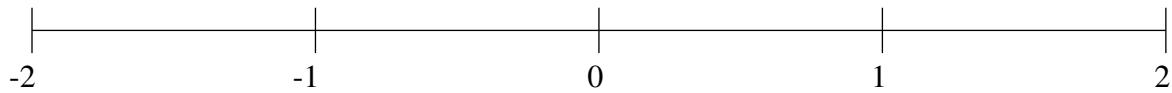


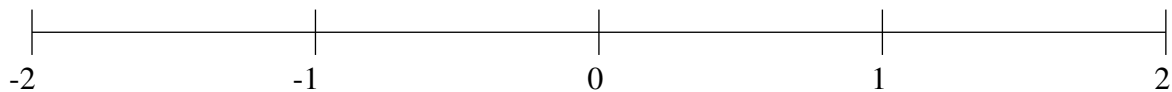
Ordenar Fracciones (H)

Ordene cada conjunto de fracciones usando la recta numérica.

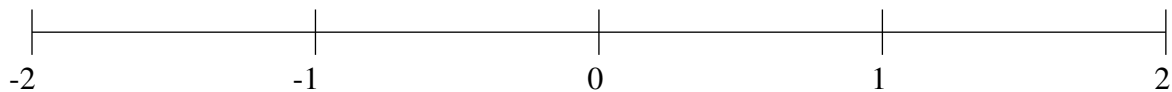
$$\frac{4}{5}, -1\frac{1}{5}, \frac{3}{7}, -1\frac{5}{6}, -\frac{1}{3}, -1\frac{1}{2}, -\frac{3}{5}, 1\frac{6}{7}$$



$$-1\frac{2}{3}, -\frac{1}{4}, -1\frac{1}{6}, 1\frac{2}{3}, 1\frac{1}{8}, -1\frac{3}{7}, \frac{1}{2}, \frac{4}{5}$$



$$\frac{1}{3}, 1\frac{4}{5}, -1\frac{1}{2}, -1\frac{3}{4}, \frac{5}{8}, \frac{5}{6}, -1\frac{1}{4}, 1\frac{2}{7}$$

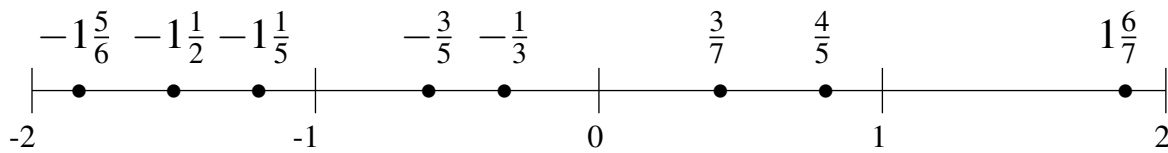


Ordenar Fracciones (H) Respuestas

Ordene cada conjunto de fracciones usando la recta numérica.

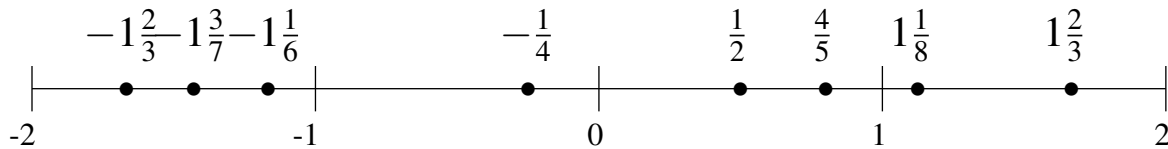
$$\frac{4}{5}, -1\frac{1}{5}, \frac{3}{7}, -1\frac{5}{6}, -\frac{1}{3}, -1\frac{1}{2}, -\frac{3}{5}, 1\frac{6}{7}$$

$$-1\frac{5}{6}, -1\frac{1}{2}, -1\frac{1}{5}, -\frac{3}{5}, -\frac{1}{3}, \frac{3}{7}, \frac{4}{5}, 1\frac{6}{7}$$



$$-1\frac{2}{3}, -\frac{1}{4}, -1\frac{1}{6}, 1\frac{2}{3}, 1\frac{1}{8}, -1\frac{3}{7}, \frac{1}{2}, \frac{4}{5}$$

$$-1\frac{2}{3}, -1\frac{3}{7}, -1\frac{1}{6}, -\frac{1}{4}, \frac{1}{2}, \frac{4}{5}, 1\frac{1}{8}, 1\frac{2}{3}$$



$$\frac{1}{3}, 1\frac{4}{5}, -1\frac{1}{2}, -1\frac{3}{4}, \frac{5}{8}, \frac{5}{6}, -1\frac{1}{4}, 1\frac{2}{7}$$

$$-1\frac{3}{4}, -1\frac{1}{2}, -1\frac{1}{4}, \frac{1}{3}, \frac{5}{8}, \frac{5}{6}, 1\frac{2}{7}, 1\frac{4}{5}$$

