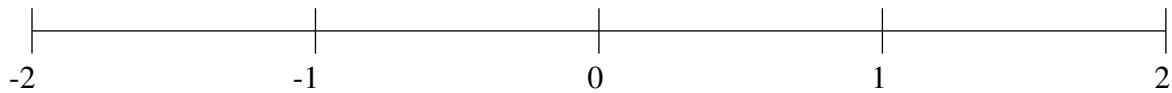


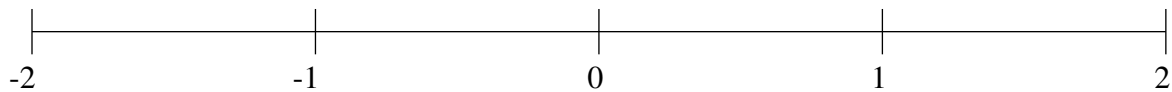
## Ordenar Fracciones (I)

Ordene cada conjunto de fracciones usando la recta numérica.

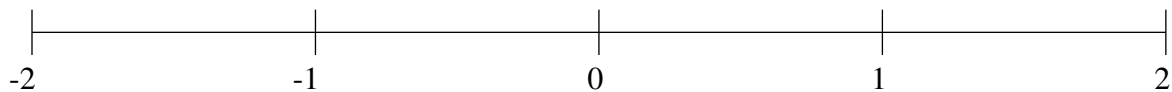
$$\frac{5}{8}, \frac{1}{5}, -1\frac{2}{3}, 1\frac{1}{2}, -1\frac{2}{5}, -\frac{1}{5}, 1\frac{9}{10}, \frac{8}{9}$$



$$1\frac{1}{3}, \frac{3}{4}, -\frac{5}{6}, -1\frac{1}{7}, -\frac{3}{5}, \frac{1}{2}, 1\frac{3}{4}, \frac{1}{4}$$



$$1\frac{3}{7}, \frac{2}{3}, -\frac{3}{5}, -1\frac{4}{5}, -1\frac{1}{5}, 1\frac{3}{4}, 1\frac{1}{8}, \frac{1}{3}$$

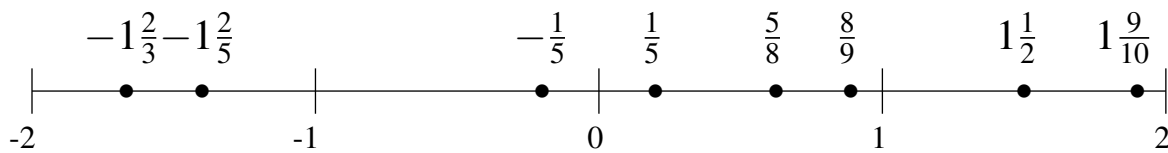


## Ordenar Fracciones (I) Respuestas

Ordene cada conjunto de fracciones usando la recta numérica.

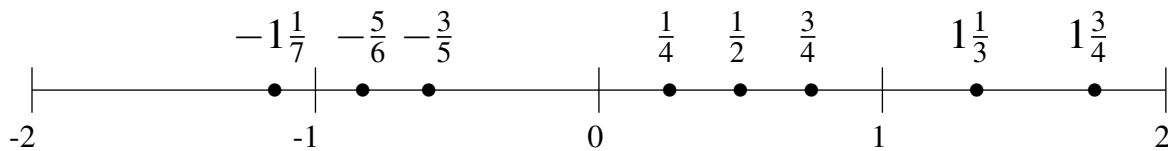
$$\frac{5}{8}, \frac{1}{5}, -1\frac{2}{3}, 1\frac{1}{2}, -1\frac{2}{5}, -\frac{1}{5}, 1\frac{9}{10}, \frac{8}{9}$$

$$-1\frac{2}{3}, -1\frac{2}{5}, -\frac{1}{5}, \frac{1}{5}, \frac{5}{8}, \frac{8}{9}, 1\frac{1}{2}, 1\frac{9}{10}$$



$$1\frac{1}{3}, \frac{3}{4}, -\frac{5}{6}, -1\frac{1}{7}, -\frac{3}{5}, \frac{1}{2}, 1\frac{3}{4}, \frac{1}{4}$$

$$-1\frac{1}{7}, -\frac{5}{6}, -\frac{3}{5}, \frac{1}{4}, \frac{1}{2}, \frac{3}{4}, 1\frac{1}{3}, 1\frac{3}{4}$$



$$1\frac{3}{7}, \frac{2}{3}, -\frac{3}{5}, -1\frac{4}{5}, -1\frac{1}{5}, 1\frac{3}{4}, 1\frac{1}{8}, \frac{1}{3}$$

$$-1\frac{4}{5}, -1\frac{1}{5}, -\frac{3}{5}, \frac{1}{3}, \frac{2}{3}, 1\frac{1}{8}, 1\frac{3}{7}, 1\frac{3}{4}$$

