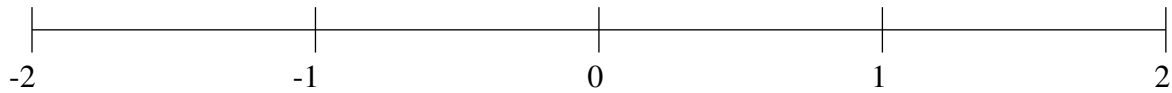


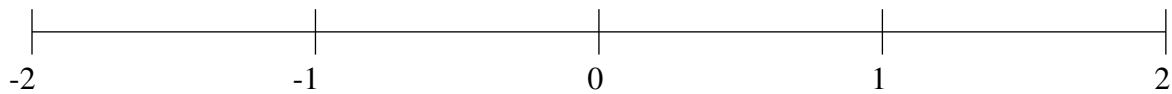
Ordenar Fracciones (J)

Ordene cada conjunto de fracciones usando la recta numérica.

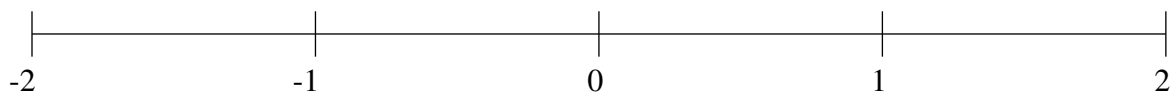
$$1\frac{1}{3}, -1\frac{1}{2}, \frac{1}{3}, \frac{7}{8}, \frac{1}{9}, -\frac{3}{5}, -\frac{2}{9}, 1\frac{3}{5}$$



$$1\frac{1}{2}, 1\frac{1}{5}, -\frac{1}{2}, -1\frac{1}{3}, -\frac{1}{4}, \frac{3}{8}, 1\frac{4}{5}, -1\frac{7}{8}$$



$$\frac{1}{5}, 1\frac{2}{7}, -1\frac{3}{8}, \frac{1}{2}, 1\frac{2}{3}, -\frac{5}{6}, -1\frac{5}{8}, -\frac{1}{2}$$

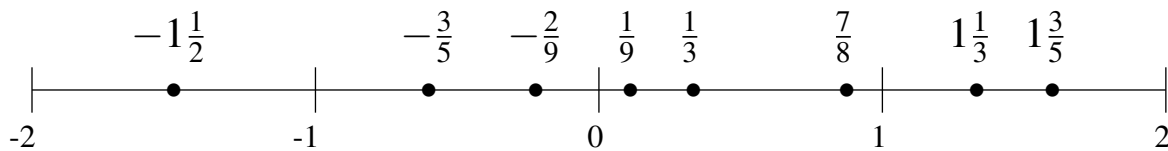


Ordenar Fracciones (J) Respuestas

Ordene cada conjunto de fracciones usando la recta numérica.

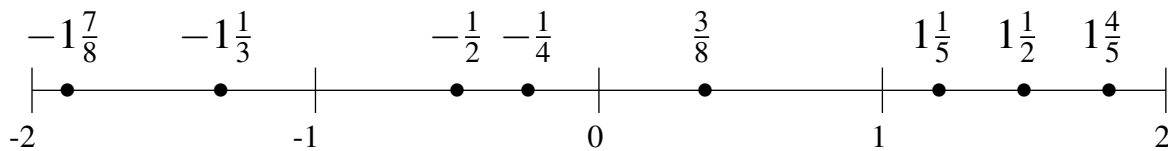
$$1\frac{1}{3}, -1\frac{1}{2}, \frac{1}{3}, \frac{7}{8}, \frac{1}{9}, -\frac{3}{5}, -\frac{2}{9}, 1\frac{3}{5}$$

$$-1\frac{1}{2}, -\frac{3}{5}, -\frac{2}{9}, \frac{1}{9}, \frac{1}{3}, \frac{7}{8}, 1\frac{1}{3}, 1\frac{3}{5}$$



$$1\frac{1}{2}, 1\frac{1}{5}, -\frac{1}{2}, -1\frac{1}{3}, -\frac{1}{4}, \frac{3}{8}, 1\frac{4}{5}, -1\frac{7}{8}$$

$$-1\frac{7}{8}, -1\frac{1}{3}, -\frac{1}{2}, -\frac{1}{4}, \frac{3}{8}, 1\frac{1}{5}, 1\frac{1}{2}, 1\frac{4}{5}$$



$$\frac{1}{5}, 1\frac{2}{7}, -1\frac{3}{8}, \frac{1}{2}, 1\frac{2}{3}, -\frac{5}{6}, -1\frac{5}{8}, -\frac{1}{2}$$

$$-1\frac{5}{8}, -1\frac{3}{8}, -\frac{5}{6}, -\frac{1}{2}, \frac{1}{5}, \frac{1}{2}, 1\frac{2}{7}, 1\frac{2}{3}$$

