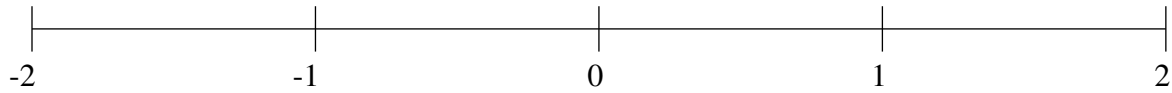


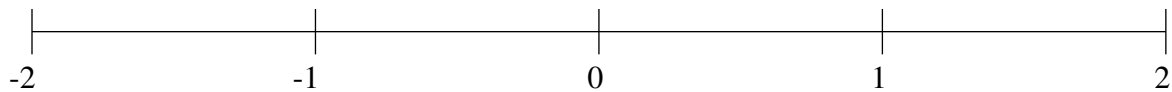
Ordenar Fracciones (A)

Ordene cada conjunto de fracciones usando la recta numérica.

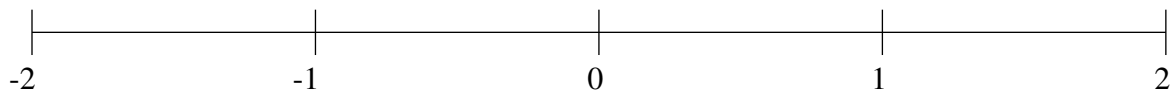
$$1\frac{5}{9}, -1\frac{5}{7}, -\frac{1}{9}, -1\frac{4}{9}, -1\frac{1}{5}, -\frac{1}{2}, -\frac{4}{5}, \frac{2}{3}$$



$$-1\frac{1}{10}, -\frac{1}{2}, 1\frac{2}{7}, -\frac{2}{7}, 1\frac{6}{7}, -1\frac{2}{5}, \frac{3}{10}, \frac{4}{7}$$



$$-1\frac{1}{2}, -\frac{2}{3}, 1\frac{2}{7}, -1\frac{3}{4}, -\frac{2}{5}, \frac{2}{3}, 1\frac{1}{2}, \frac{1}{6}$$

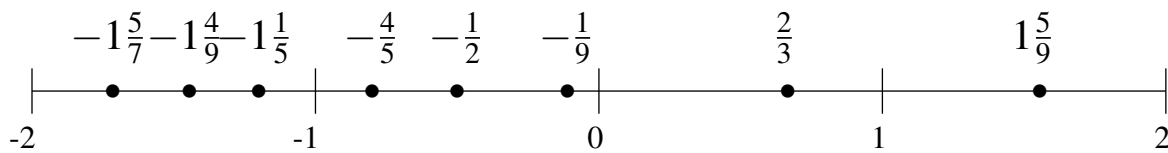


Ordenar Fracciones (A) Respuestas

Ordene cada conjunto de fracciones usando la recta numérica.

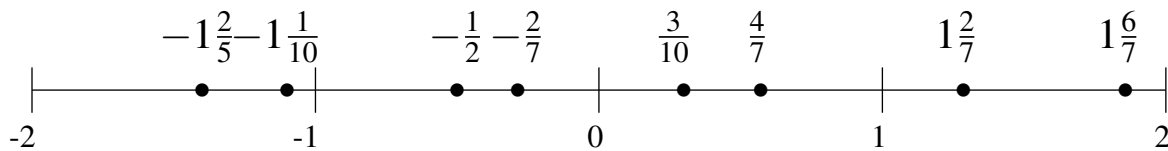
$$1\frac{5}{9}, -1\frac{5}{7}, -\frac{1}{9}, -1\frac{4}{9}, -1\frac{1}{5}, -\frac{1}{2}, -\frac{4}{5}, \frac{2}{3}$$

$$-1\frac{5}{7}, -1\frac{4}{9}, -1\frac{1}{5}, -\frac{4}{5}, -\frac{1}{2}, -\frac{1}{9}, \frac{2}{3}, 1\frac{5}{9}$$



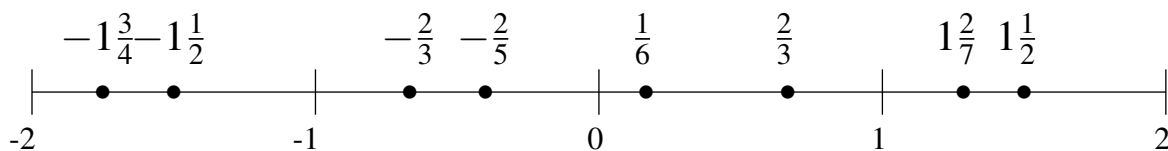
$$-1\frac{1}{10}, -\frac{1}{2}, 1\frac{2}{7}, -\frac{2}{7}, 1\frac{6}{7}, -1\frac{2}{5}, \frac{3}{10}, \frac{4}{7}$$

$$-1\frac{2}{5}, -1\frac{1}{10}, -\frac{1}{2}, -\frac{2}{7}, \frac{3}{10}, \frac{4}{7}, 1\frac{2}{7}, 1\frac{6}{7}$$



$$-1\frac{1}{2}, -\frac{2}{3}, 1\frac{2}{7}, -1\frac{3}{4}, -\frac{2}{5}, \frac{2}{3}, 1\frac{1}{2}, \frac{1}{6}$$

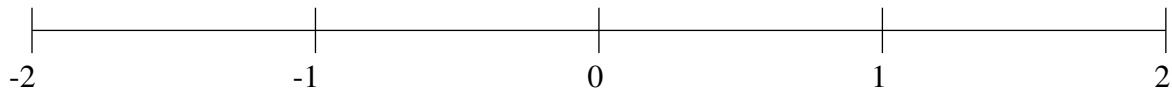
$$-1\frac{3}{4}, -1\frac{1}{2}, -\frac{2}{3}, -\frac{2}{5}, \frac{1}{6}, \frac{2}{3}, 1\frac{2}{7}, 1\frac{1}{2}$$



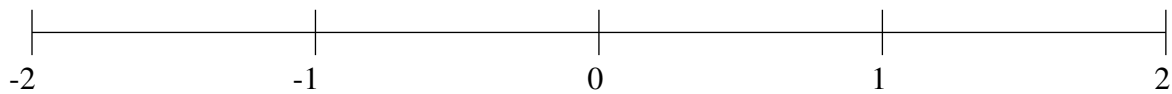
Ordenar Fracciones (B)

Ordene cada conjunto de fracciones usando la recta numérica.

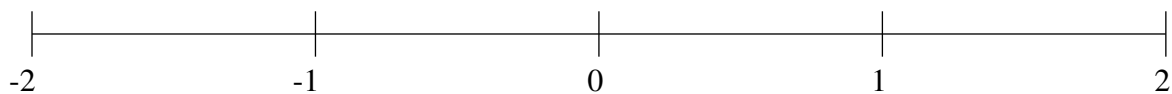
$$\frac{1}{4}, 1\frac{5}{6}, 1\frac{1}{7}, -1\frac{3}{5}, -\frac{5}{6}, -\frac{1}{10}, \frac{5}{6}, -1\frac{1}{7}$$



$$\frac{1}{2}, -1\frac{1}{2}, -\frac{2}{5}, -\frac{2}{3}, -1\frac{1}{5}, \frac{3}{4}, 1\frac{1}{2}, 1\frac{3}{4}$$



$$\frac{3}{4}, 1\frac{1}{5}, -1\frac{8}{9}, 1\frac{1}{2}, -1\frac{1}{6}, -\frac{2}{3}, -\frac{1}{3}, 1\frac{8}{9}$$

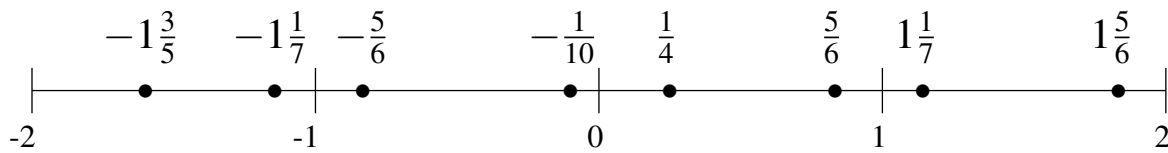


Ordenar Fracciones (B) Respuestas

Ordene cada conjunto de fracciones usando la recta numérica.

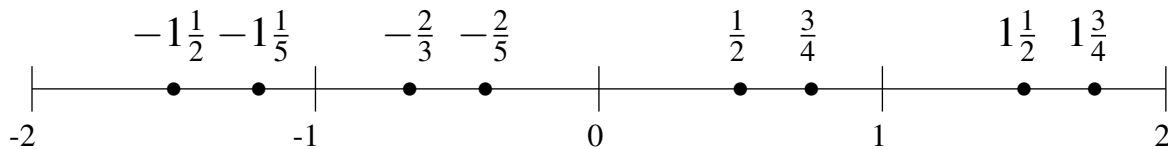
$$\frac{1}{4}, 1\frac{5}{6}, 1\frac{1}{7}, -1\frac{3}{5}, -\frac{5}{6}, -\frac{1}{10}, \frac{5}{6}, -1\frac{1}{7}$$

$$-1\frac{3}{5}, -1\frac{1}{7}, -\frac{5}{6}, -\frac{1}{10}, \frac{1}{4}, \frac{5}{6}, 1\frac{1}{7}, 1\frac{5}{6}$$



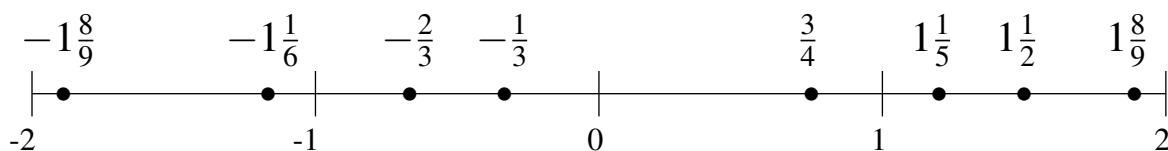
$$\frac{1}{2}, -1\frac{1}{2}, -\frac{2}{5}, -\frac{2}{3}, -1\frac{1}{5}, \frac{3}{4}, 1\frac{1}{2}, 1\frac{3}{4}$$

$$-1\frac{1}{2}, -1\frac{1}{5}, -\frac{2}{3}, -\frac{2}{5}, \frac{1}{2}, \frac{3}{4}, 1\frac{1}{2}, 1\frac{3}{4}$$



$$\frac{3}{4}, 1\frac{1}{5}, -1\frac{8}{9}, 1\frac{1}{2}, -1\frac{1}{6}, -\frac{2}{3}, -\frac{1}{3}, 1\frac{8}{9}$$

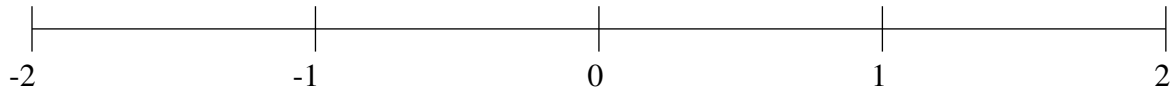
$$-1\frac{8}{9}, -1\frac{1}{6}, -\frac{2}{3}, -\frac{1}{3}, \frac{3}{4}, 1\frac{1}{5}, 1\frac{1}{2}, 1\frac{8}{9}$$



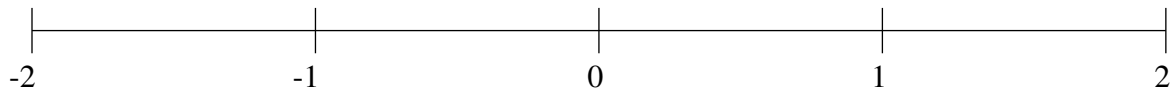
Ordenar Fracciones (C)

Ordene cada conjunto de fracciones usando la recta numérica.

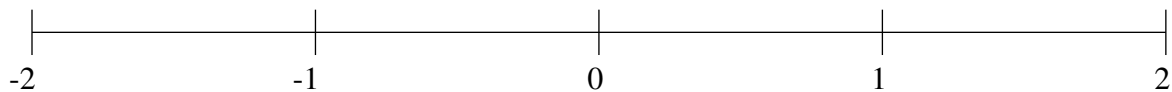
$$-1\frac{3}{4}, \frac{2}{3}, -\frac{2}{3}, 1\frac{5}{8}, 1\frac{1}{3}, -\frac{2}{5}, -\frac{1}{9}, -1\frac{3}{7}$$



$$\frac{1}{2}, -\frac{3}{10}, -1\frac{1}{2}, -1\frac{4}{5}, \frac{2}{7}, 1\frac{1}{4}, 1\frac{1}{2}, 1\frac{7}{8}$$



$$-\frac{1}{4}, 1\frac{1}{2}, \frac{1}{2}, -\frac{5}{6}, \frac{5}{7}, 1\frac{1}{5}, -1\frac{1}{2}, \frac{2}{7}$$

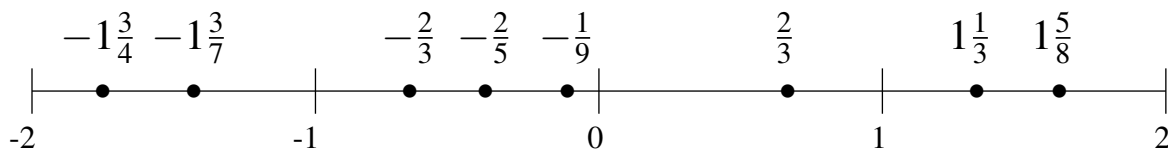


Ordenar Fracciones (C) Respuestas

Ordene cada conjunto de fracciones usando la recta numérica.

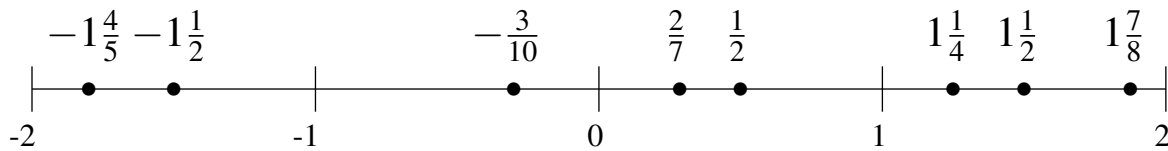
$$-1\frac{3}{4}, \frac{2}{3}, -\frac{2}{3}, 1\frac{5}{8}, 1\frac{1}{3}, -\frac{2}{5}, -\frac{1}{9}, -1\frac{3}{7}$$

$$-1\frac{3}{4}, -1\frac{3}{7}, -\frac{2}{3}, -\frac{2}{5}, -\frac{1}{9}, \frac{2}{3}, 1\frac{1}{3}, 1\frac{5}{8}$$



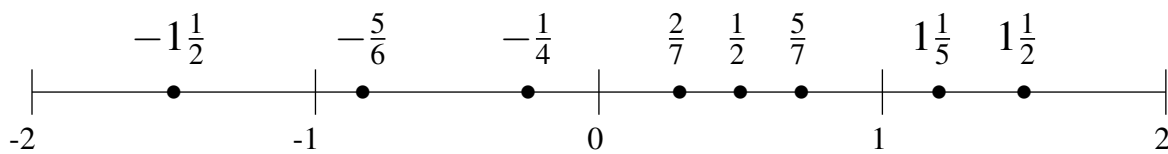
$$\frac{1}{2}, -\frac{3}{10}, -1\frac{1}{2}, -1\frac{4}{5}, \frac{2}{7}, 1\frac{1}{4}, 1\frac{1}{2}, 1\frac{7}{8}$$

$$-1\frac{4}{5}, -1\frac{1}{2}, -\frac{3}{10}, \frac{2}{7}, \frac{1}{2}, 1\frac{1}{4}, 1\frac{1}{2}, 1\frac{7}{8}$$



$$-\frac{1}{4}, 1\frac{1}{2}, \frac{1}{2}, -\frac{5}{6}, \frac{5}{7}, 1\frac{1}{5}, -1\frac{1}{2}, \frac{2}{7}$$

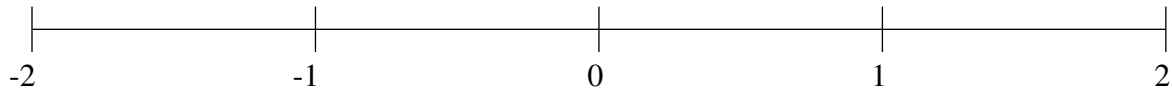
$$-1\frac{1}{2}, -\frac{5}{6}, -\frac{1}{4}, \frac{2}{7}, \frac{1}{2}, \frac{5}{7}, 1\frac{1}{5}, 1\frac{1}{2}$$



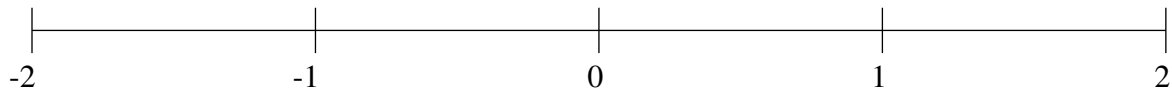
Ordenar Fracciones (D)

Ordene cada conjunto de fracciones usando la recta numérica.

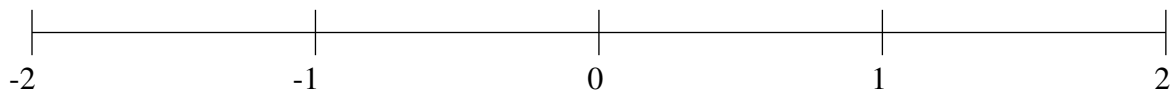
$$-1\frac{3}{4}, \frac{1}{4}, -\frac{3}{4}, \frac{1}{2}, -\frac{1}{3}, -1\frac{1}{2}, 1\frac{4}{5}, 1\frac{1}{4}$$



$$\frac{5}{6}, -1\frac{1}{2}, 1\frac{8}{9}, -\frac{1}{6}, \frac{1}{9}, -1\frac{2}{9}, \frac{5}{8}, -\frac{3}{4}$$



$$-1\frac{2}{9}, \frac{1}{4}, -1\frac{2}{3}, \frac{8}{9}, 1\frac{3}{5}, 1\frac{5}{6}, 1\frac{1}{4}, -\frac{1}{5}$$

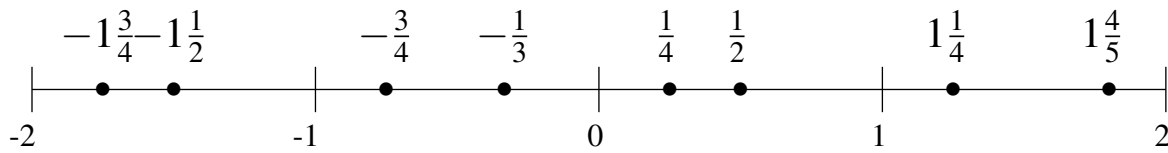


Ordenar Fracciones (D) Respuestas

Ordene cada conjunto de fracciones usando la recta numérica.

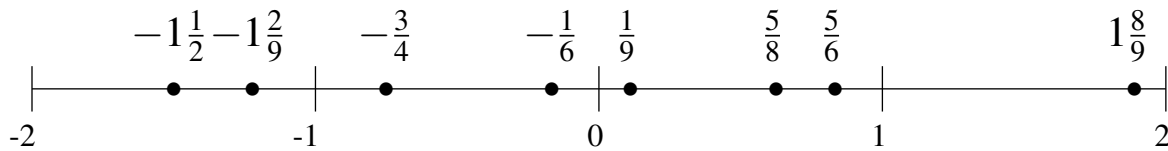
$$-1\frac{3}{4}, \frac{1}{4}, -\frac{3}{4}, \frac{1}{2}, -\frac{1}{3}, -1\frac{1}{2}, 1\frac{4}{5}, 1\frac{1}{4}$$

$$-1\frac{3}{4}, -1\frac{1}{2}, -\frac{3}{4}, -\frac{1}{3}, \frac{1}{4}, \frac{1}{2}, 1\frac{1}{4}, 1\frac{4}{5}$$



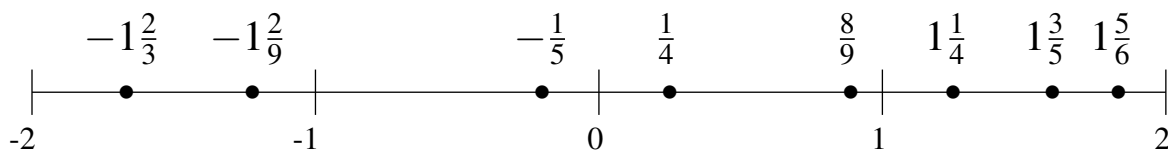
$$\frac{5}{6}, -1\frac{1}{2}, 1\frac{8}{9}, -\frac{1}{6}, \frac{1}{9}, -1\frac{2}{9}, \frac{5}{8}, -\frac{3}{4}$$

$$-1\frac{1}{2}, -1\frac{2}{9}, -\frac{3}{4}, -\frac{1}{6}, \frac{1}{9}, \frac{5}{8}, \frac{5}{6}, 1\frac{8}{9}$$



$$-1\frac{2}{9}, \frac{1}{4}, -1\frac{2}{3}, \frac{8}{9}, 1\frac{3}{5}, 1\frac{5}{6}, 1\frac{1}{4}, -\frac{1}{5}$$

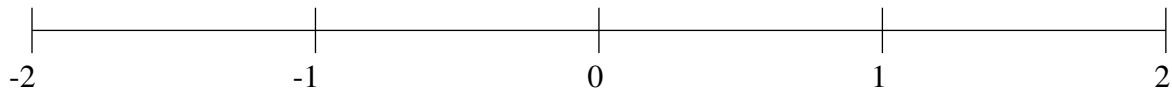
$$-1\frac{2}{3}, -1\frac{2}{9}, -\frac{1}{5}, \frac{1}{4}, \frac{8}{9}, 1\frac{1}{4}, 1\frac{3}{5}, 1\frac{5}{6}$$



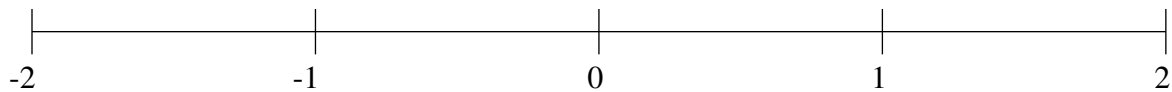
Ordenar Fracciones (E)

Ordene cada conjunto de fracciones usando la recta numérica.

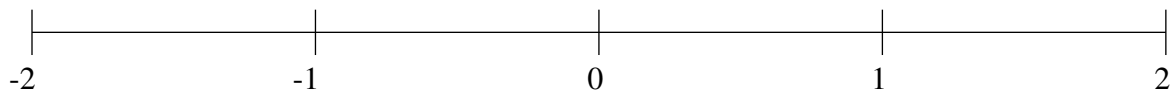
$$-1\frac{2}{5}, -\frac{7}{10}, 1\frac{1}{5}, 1\frac{6}{7}, \frac{1}{4}, -\frac{1}{5}, 1\frac{4}{7}, \frac{3}{4}$$



$$\frac{1}{10}, -1\frac{5}{6}, 1\frac{1}{3}, -\frac{1}{2}, \frac{1}{3}, -1\frac{1}{5}, 1\frac{1}{9}, \frac{7}{9}$$



$$-\frac{1}{3}, -1\frac{3}{4}, \frac{9}{10}, 1\frac{2}{3}, 1\frac{1}{4}, -\frac{2}{3}, -1\frac{1}{2}, \frac{1}{3}$$

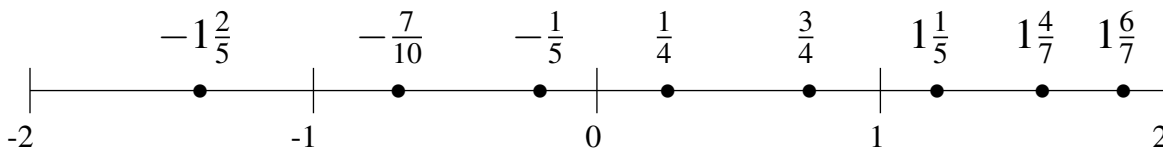


Ordenar Fracciones (E) Respuestas

Ordene cada conjunto de fracciones usando la recta numérica.

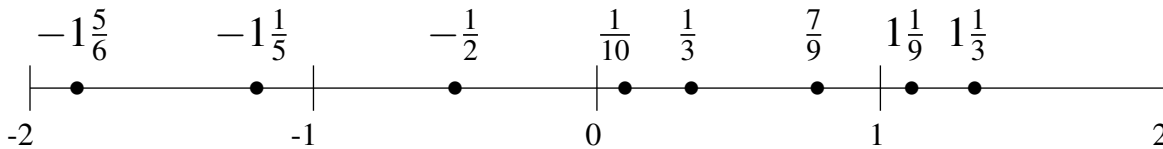
$$-1\frac{2}{5}, -\frac{7}{10}, 1\frac{1}{5}, 1\frac{6}{7}, \frac{1}{4}, -\frac{1}{5}, 1\frac{4}{7}, \frac{3}{4}$$

$$-1\frac{2}{5}, -\frac{7}{10}, -\frac{1}{5}, \frac{1}{4}, \frac{3}{4}, 1\frac{1}{5}, 1\frac{4}{7}, 1\frac{6}{7}$$



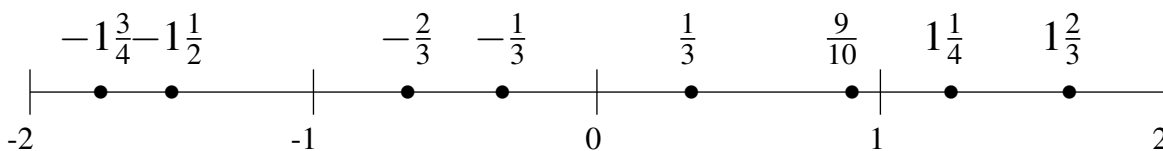
$$\frac{1}{10}, -1\frac{5}{6}, 1\frac{1}{3}, -\frac{1}{2}, \frac{1}{3}, -1\frac{1}{5}, 1\frac{1}{9}, \frac{7}{9}$$

$$-1\frac{5}{6}, -1\frac{1}{5}, -\frac{1}{2}, \frac{1}{10}, \frac{1}{3}, \frac{7}{9}, 1\frac{1}{9}, 1\frac{1}{3}$$



$$-\frac{1}{3}, -1\frac{3}{4}, \frac{9}{10}, 1\frac{2}{3}, 1\frac{1}{4}, -\frac{2}{3}, -1\frac{1}{2}, \frac{1}{3}$$

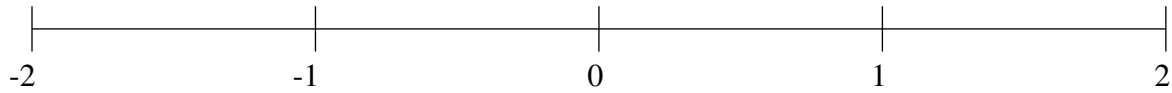
$$-1\frac{3}{4}, -1\frac{1}{2}, -\frac{2}{3}, -\frac{1}{3}, \frac{1}{3}, \frac{9}{10}, 1\frac{1}{4}, 1\frac{2}{3}$$



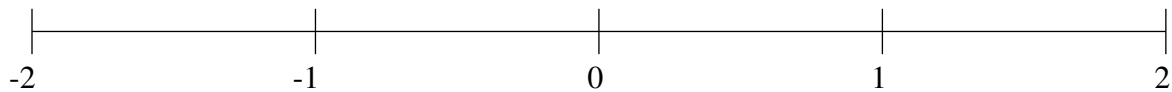
Ordenar Fracciones (F)

Ordene cada conjunto de fracciones usando la recta numérica.

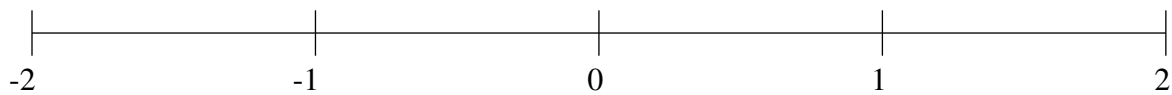
$$-1\frac{1}{8}, \frac{3}{4}, -\frac{1}{7}, \frac{1}{2}, 1\frac{4}{9}, -\frac{1}{2}, -1\frac{2}{5}, -1\frac{6}{7}$$



$$-1\frac{1}{2}, \frac{1}{7}, -1\frac{2}{9}, -\frac{1}{8}, 1\frac{3}{5}, \frac{2}{3}, -\frac{6}{7}, -\frac{4}{9}$$



$$1\frac{3}{7}, \frac{8}{9}, \frac{1}{2}, \frac{1}{4}, -1\frac{1}{2}, -1\frac{5}{6}, 1\frac{1}{6}, -\frac{2}{3}$$

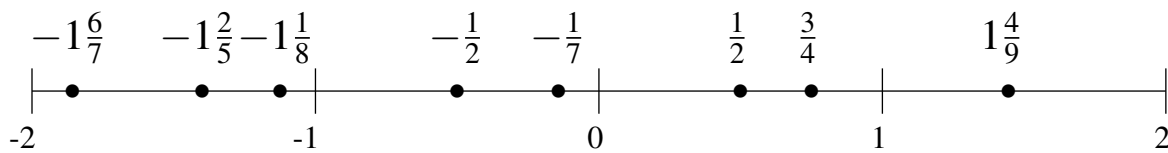


Ordenar Fracciones (F) Respuestas

Ordene cada conjunto de fracciones usando la recta numérica.

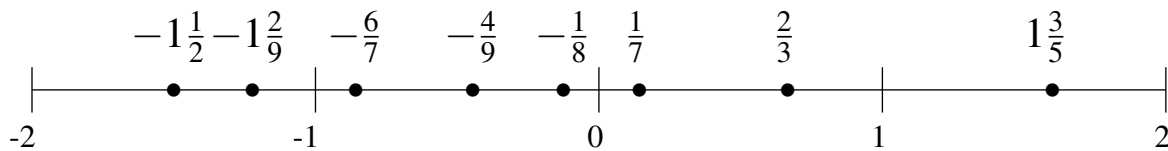
$$-1\frac{1}{8}, \frac{3}{4}, -\frac{1}{7}, \frac{1}{2}, 1\frac{4}{9}, -\frac{1}{2}, -1\frac{2}{5}, -1\frac{6}{7}$$

$$-1\frac{6}{7}, -1\frac{2}{5}, -1\frac{1}{8}, -\frac{1}{2}, -\frac{1}{7}, \frac{1}{2}, \frac{3}{4}, 1\frac{4}{9}$$



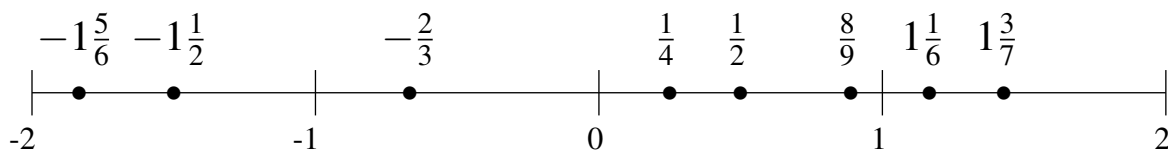
$$-1\frac{1}{2}, \frac{1}{7}, -1\frac{2}{9}, -\frac{1}{8}, 1\frac{3}{5}, \frac{2}{3}, -\frac{6}{7}, -\frac{4}{9}$$

$$-1\frac{1}{2}, -1\frac{2}{9}, -\frac{6}{7}, -\frac{4}{9}, -\frac{1}{8}, \frac{1}{7}, \frac{2}{3}, 1\frac{3}{5}$$



$$1\frac{3}{7}, \frac{8}{9}, \frac{1}{2}, \frac{1}{4}, -1\frac{1}{2}, -1\frac{5}{6}, 1\frac{1}{6}, -\frac{2}{3}$$

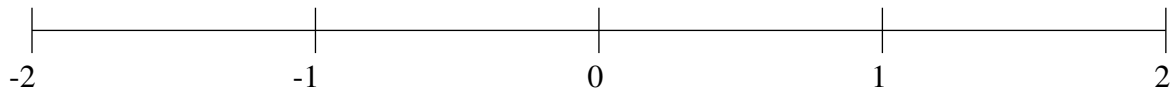
$$-1\frac{5}{6}, -1\frac{1}{2}, -\frac{2}{3}, \frac{1}{4}, \frac{1}{2}, \frac{8}{9}, 1\frac{1}{6}, 1\frac{3}{7}$$



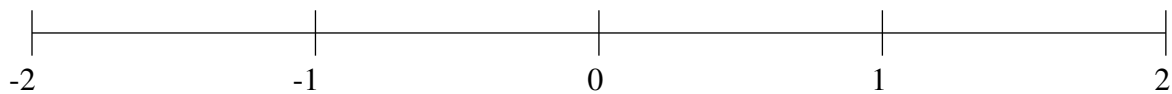
Ordenar Fracciones (G)

Ordene cada conjunto de fracciones usando la recta numérica.

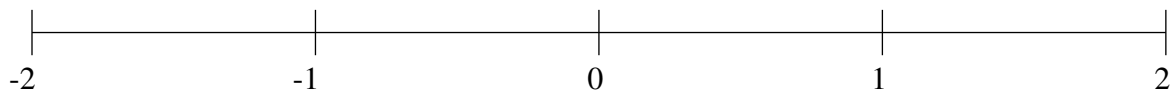
$$1\frac{1}{5}, 1\frac{3}{4}, \frac{5}{6}, -1\frac{1}{8}, -\frac{1}{5}, \frac{3}{5}, -\frac{4}{7}, \frac{1}{3}$$



$$-\frac{1}{5}, -1\frac{3}{8}, -\frac{1}{2}, -\frac{5}{6}, \frac{2}{3}, \frac{7}{8}, 1\frac{1}{3}, -1\frac{2}{3}$$



$$1\frac{1}{2}, -\frac{6}{7}, \frac{2}{3}, -1\frac{4}{5}, -\frac{1}{6}, \frac{1}{4}, 1\frac{4}{5}, -\frac{1}{2}$$

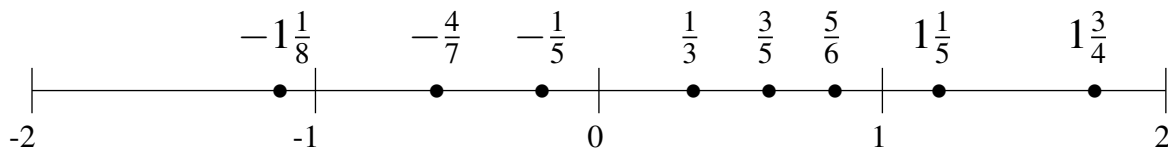


Ordenar Fracciones (G) Respuestas

Ordene cada conjunto de fracciones usando la recta numérica.

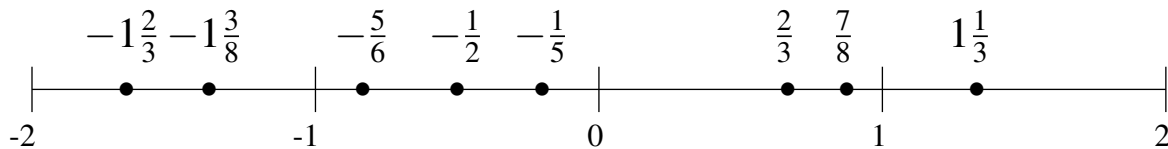
$$1\frac{1}{5}, 1\frac{3}{4}, \frac{5}{6}, -1\frac{1}{8}, -\frac{1}{5}, \frac{3}{5}, -\frac{4}{7}, \frac{1}{3}$$

$$-1\frac{1}{8}, -\frac{4}{7}, -\frac{1}{5}, \frac{1}{3}, \frac{3}{5}, \frac{5}{6}, 1\frac{1}{5}, 1\frac{3}{4}$$



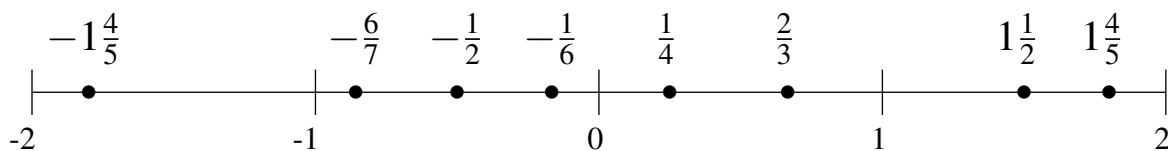
$$-\frac{1}{5}, -1\frac{3}{8}, -\frac{1}{2}, -\frac{5}{6}, \frac{2}{3}, \frac{7}{8}, 1\frac{1}{3}, -1\frac{2}{3}$$

$$-1\frac{2}{3}, -1\frac{3}{8}, -\frac{5}{6}, -\frac{1}{2}, -\frac{1}{5}, \frac{2}{3}, \frac{7}{8}, 1\frac{1}{3}$$



$$1\frac{1}{2}, -\frac{6}{7}, \frac{2}{3}, -1\frac{4}{5}, -\frac{1}{6}, \frac{1}{4}, 1\frac{4}{5}, -\frac{1}{2}$$

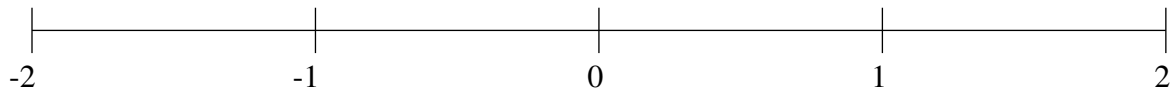
$$-1\frac{4}{5}, -\frac{6}{7}, -\frac{1}{2}, -\frac{1}{6}, \frac{1}{4}, \frac{2}{3}, 1\frac{1}{2}, 1\frac{4}{5}$$



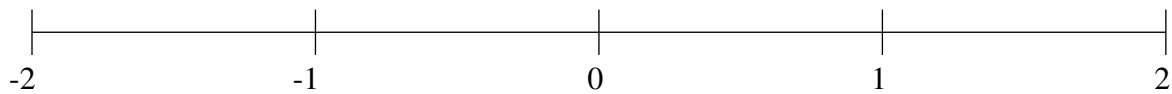
Ordenar Fracciones (H)

Ordene cada conjunto de fracciones usando la recta numérica.

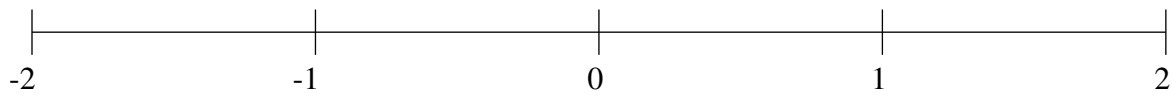
$$\frac{4}{5}, -1\frac{1}{5}, \frac{3}{7}, -1\frac{5}{6}, -\frac{1}{3}, -1\frac{1}{2}, -\frac{3}{5}, 1\frac{6}{7}$$



$$-1\frac{2}{3}, -\frac{1}{4}, -1\frac{1}{6}, 1\frac{2}{3}, 1\frac{1}{8}, -1\frac{3}{7}, \frac{1}{2}, \frac{4}{5}$$



$$\frac{1}{3}, 1\frac{4}{5}, -1\frac{1}{2}, -1\frac{3}{4}, \frac{5}{8}, \frac{5}{6}, -1\frac{1}{4}, 1\frac{2}{7}$$

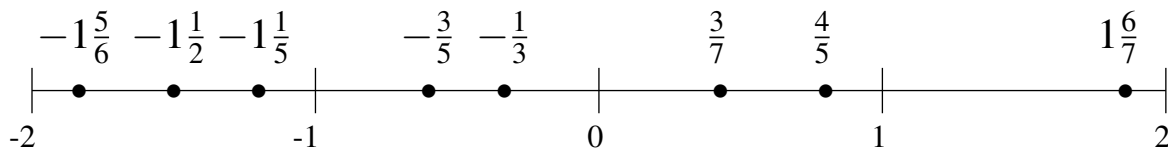


Ordenar Fracciones (H) Respuestas

Ordene cada conjunto de fracciones usando la recta numérica.

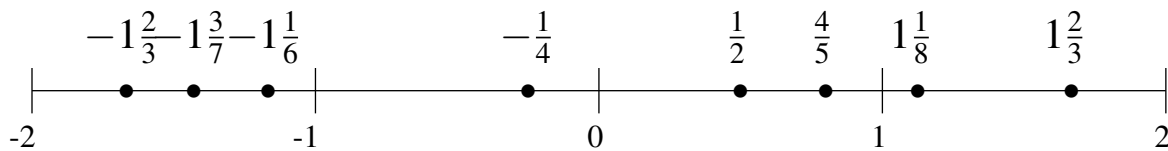
$$\frac{4}{5}, -1\frac{1}{5}, \frac{3}{7}, -1\frac{5}{6}, -\frac{1}{3}, -1\frac{1}{2}, -\frac{3}{5}, 1\frac{6}{7}$$

$$-1\frac{5}{6}, -1\frac{1}{2}, -1\frac{1}{5}, -\frac{3}{5}, -\frac{1}{3}, \frac{3}{7}, \frac{4}{5}, 1\frac{6}{7}$$



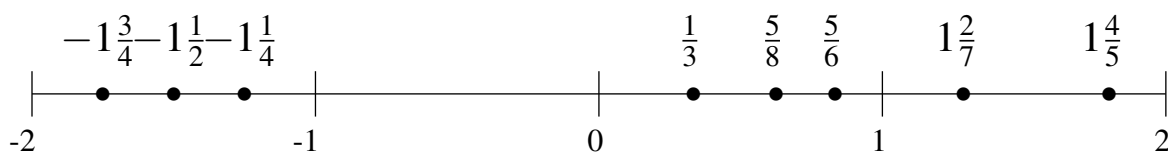
$$-1\frac{2}{3}, -\frac{1}{4}, -1\frac{1}{6}, 1\frac{2}{3}, 1\frac{1}{8}, -1\frac{3}{7}, \frac{1}{2}, \frac{4}{5}$$

$$-1\frac{2}{3}, -1\frac{3}{7}, -1\frac{1}{6}, -\frac{1}{4}, \frac{1}{2}, \frac{4}{5}, 1\frac{1}{8}, 1\frac{2}{3}$$



$$\frac{1}{3}, 1\frac{4}{5}, -1\frac{1}{2}, -1\frac{3}{4}, \frac{5}{8}, \frac{5}{6}, -1\frac{1}{4}, 1\frac{2}{7}$$

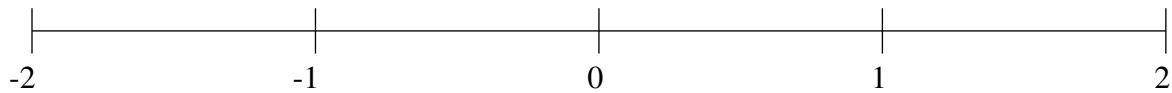
$$-1\frac{3}{4}, -1\frac{1}{2}, -1\frac{1}{4}, \frac{1}{3}, \frac{5}{8}, \frac{5}{6}, 1\frac{2}{7}, 1\frac{4}{5}$$



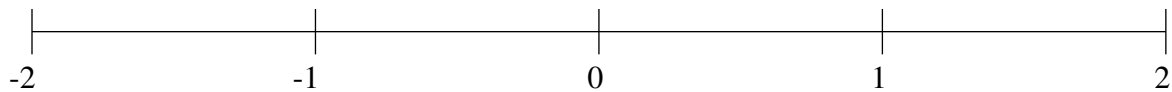
Ordenar Fracciones (I)

Ordene cada conjunto de fracciones usando la recta numérica.

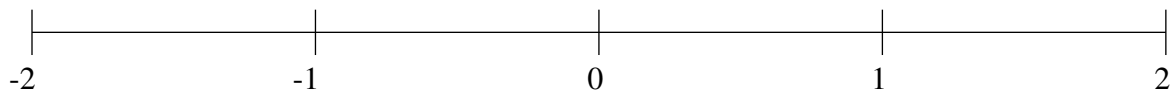
$$\frac{5}{8}, \frac{1}{5}, -1\frac{2}{3}, 1\frac{1}{2}, -1\frac{2}{5}, -\frac{1}{5}, 1\frac{9}{10}, \frac{8}{9}$$



$$1\frac{1}{3}, \frac{3}{4}, -\frac{5}{6}, -1\frac{1}{7}, -\frac{3}{5}, \frac{1}{2}, 1\frac{3}{4}, \frac{1}{4}$$



$$1\frac{3}{7}, \frac{2}{3}, -\frac{3}{5}, -1\frac{4}{5}, -1\frac{1}{5}, 1\frac{3}{4}, 1\frac{1}{8}, \frac{1}{3}$$

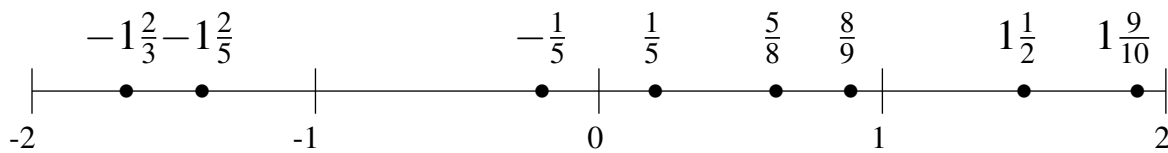


Ordenar Fracciones (I) Respuestas

Ordene cada conjunto de fracciones usando la recta numérica.

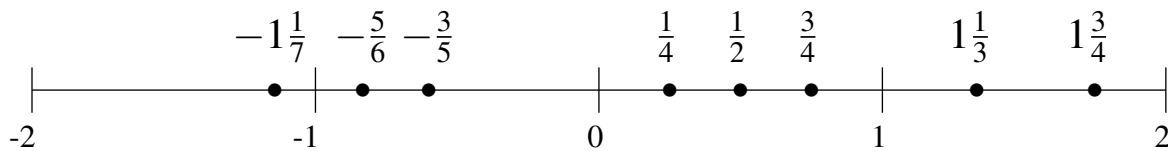
$$\frac{5}{8}, \frac{1}{5}, -1\frac{2}{3}, 1\frac{1}{2}, -1\frac{2}{5}, -\frac{1}{5}, 1\frac{9}{10}, \frac{8}{9}$$

$$-1\frac{2}{3}, -1\frac{2}{5}, -\frac{1}{5}, \frac{1}{5}, \frac{5}{8}, \frac{8}{9}, 1\frac{1}{2}, 1\frac{9}{10}$$



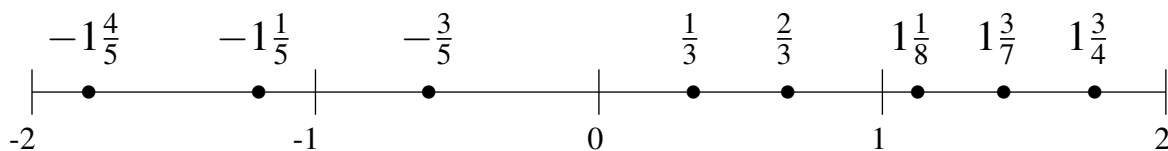
$$1\frac{1}{3}, \frac{3}{4}, -\frac{5}{6}, -1\frac{1}{7}, -\frac{3}{5}, \frac{1}{2}, 1\frac{3}{4}, \frac{1}{4}$$

$$-1\frac{1}{7}, -\frac{5}{6}, -\frac{3}{5}, \frac{1}{4}, \frac{1}{2}, \frac{3}{4}, 1\frac{1}{3}, 1\frac{3}{4}$$



$$1\frac{3}{7}, \frac{2}{3}, -\frac{3}{5}, -1\frac{4}{5}, -1\frac{1}{5}, 1\frac{3}{4}, 1\frac{1}{8}, \frac{1}{3}$$

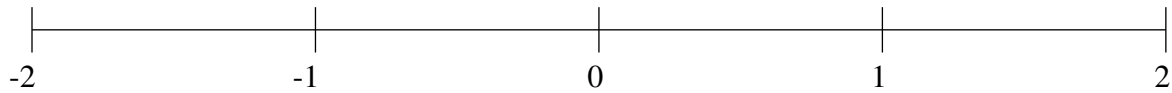
$$-1\frac{4}{5}, -1\frac{1}{5}, -\frac{3}{5}, \frac{1}{3}, \frac{2}{3}, 1\frac{1}{8}, 1\frac{3}{7}, 1\frac{3}{4}$$



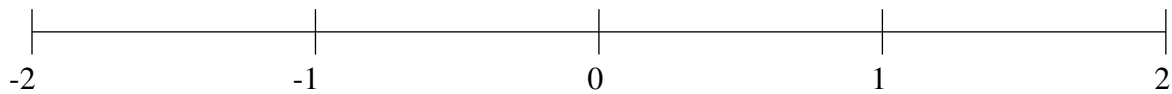
Ordenar Fracciones (J)

Ordene cada conjunto de fracciones usando la recta numérica.

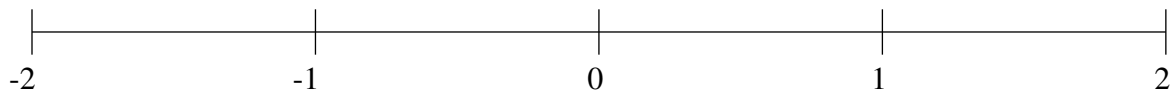
$$1\frac{1}{3}, -1\frac{1}{2}, \frac{1}{3}, \frac{7}{8}, \frac{1}{9}, -\frac{3}{5}, -\frac{2}{9}, 1\frac{3}{5}$$



$$1\frac{1}{2}, 1\frac{1}{5}, -\frac{1}{2}, -1\frac{1}{3}, -\frac{1}{4}, \frac{3}{8}, 1\frac{4}{5}, -1\frac{7}{8}$$



$$\frac{1}{5}, 1\frac{2}{7}, -1\frac{3}{8}, \frac{1}{2}, 1\frac{2}{3}, -\frac{5}{6}, -1\frac{5}{8}, -\frac{1}{2}$$

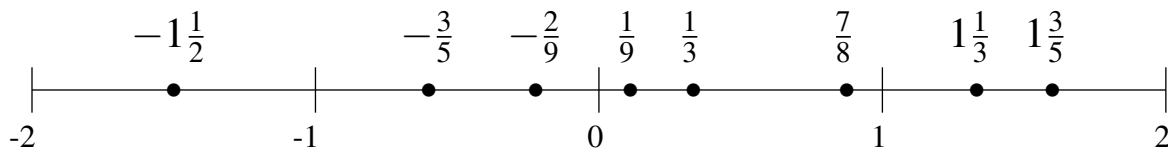


Ordenar Fracciones (J) Respuestas

Ordene cada conjunto de fracciones usando la recta numérica.

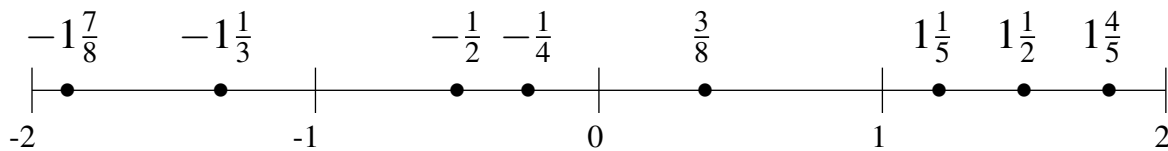
$$1\frac{1}{3}, -1\frac{1}{2}, \frac{1}{3}, \frac{7}{8}, \frac{1}{9}, -\frac{3}{5}, -\frac{2}{9}, 1\frac{3}{5}$$

$$-1\frac{1}{2}, -\frac{3}{5}, -\frac{2}{9}, \frac{1}{9}, \frac{1}{3}, \frac{7}{8}, 1\frac{1}{3}, 1\frac{3}{5}$$



$$1\frac{1}{2}, 1\frac{1}{5}, -\frac{1}{2}, -1\frac{1}{3}, -\frac{1}{4}, \frac{3}{8}, 1\frac{4}{5}, -1\frac{7}{8}$$

$$-1\frac{7}{8}, -1\frac{1}{3}, -\frac{1}{2}, -\frac{1}{4}, \frac{3}{8}, 1\frac{1}{5}, 1\frac{1}{2}, 1\frac{4}{5}$$



$$\frac{1}{5}, 1\frac{2}{7}, -1\frac{3}{8}, \frac{1}{2}, 1\frac{2}{3}, -\frac{5}{6}, -1\frac{5}{8}, -\frac{1}{2}$$

$$-1\frac{5}{8}, -1\frac{3}{8}, -\frac{5}{6}, -\frac{1}{2}, \frac{1}{5}, \frac{1}{2}, 1\frac{2}{7}, 1\frac{2}{3}$$

