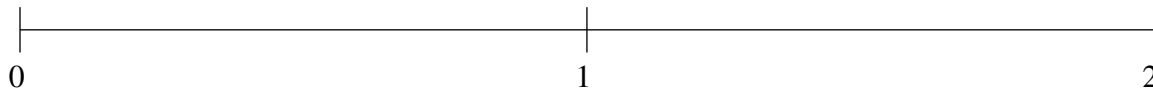


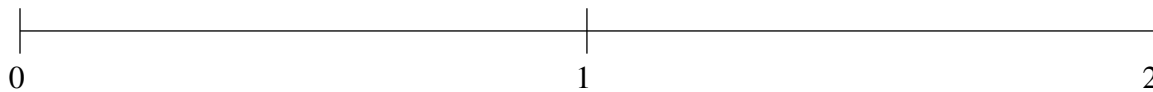
Ordenar Fracciones (A)

Ordene cada conjunto de fracciones usando la recta numérica.

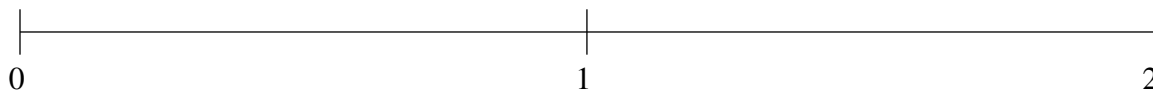
$$1\frac{2}{5}, \frac{1}{2}, 1\frac{7}{8}, \frac{1}{4}, 1\frac{1}{9}$$



$$\frac{1}{3}, \frac{2}{3}, 1\frac{5}{6}, 1\frac{1}{8}, 1\frac{1}{2}$$



$$1\frac{1}{4}, \frac{3}{4}, \frac{1}{10}, \frac{1}{2}, 1\frac{2}{3}$$

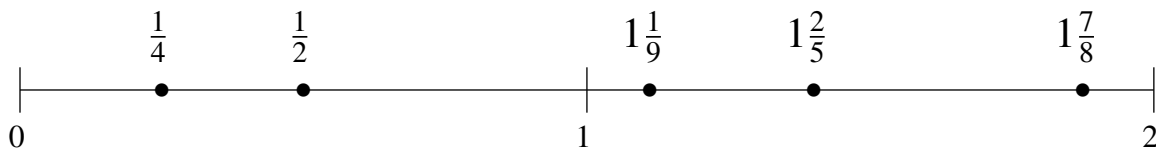


Ordenar Fracciones (A) Respuestas

Ordene cada conjunto de fracciones usando la recta numérica.

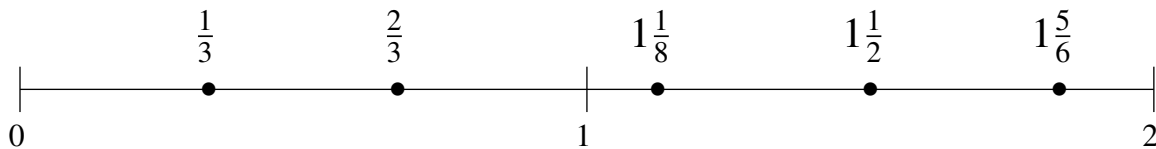
$$1\frac{2}{5}, \frac{1}{2}, 1\frac{7}{8}, \frac{1}{4}, 1\frac{1}{9}$$

$$\frac{1}{4}, \frac{1}{2}, 1\frac{1}{9}, 1\frac{2}{5}, 1\frac{7}{8}$$



$$\frac{1}{3}, \frac{2}{3}, 1\frac{5}{6}, 1\frac{1}{8}, 1\frac{1}{2}$$

$$\frac{1}{3}, \frac{2}{3}, 1\frac{1}{8}, 1\frac{1}{2}, 1\frac{5}{6}$$



$$1\frac{1}{4}, \frac{3}{4}, \frac{1}{10}, \frac{1}{2}, 1\frac{2}{3}$$

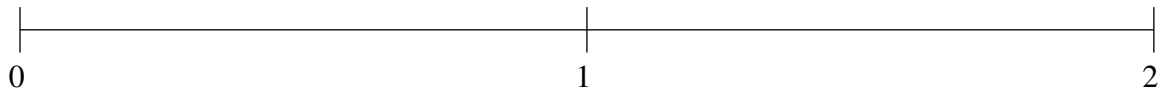
$$\frac{1}{10}, \frac{1}{2}, \frac{3}{4}, 1\frac{1}{4}, 1\frac{2}{3}$$



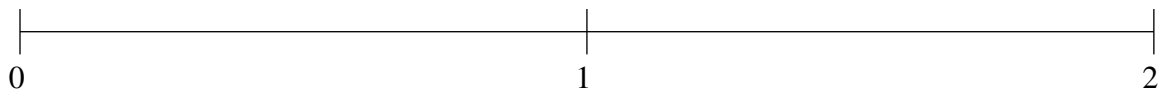
Ordenar Fracciones (B)

Ordene cada conjunto de fracciones usando la recta numérica.

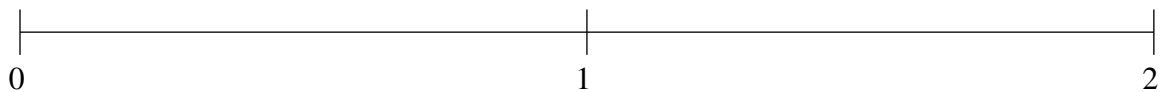
$$\frac{1}{3}, \frac{7}{8}, \frac{4}{7}, 1\frac{8}{9}, 1\frac{1}{2}$$



$$1\frac{1}{2}, \frac{2}{3}, \frac{1}{3}, 1\frac{3}{4}, \frac{1}{8}$$



$$\frac{2}{3}, \frac{1}{3}, \frac{8}{9}, 1\frac{1}{2}, 1\frac{5}{7}$$

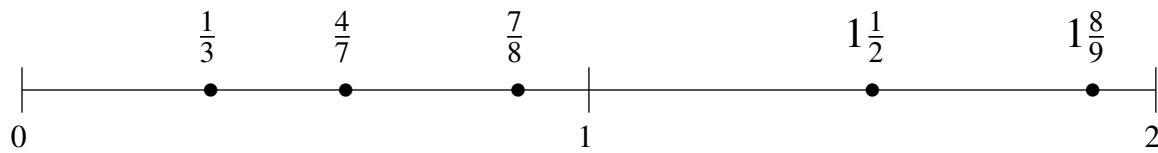


Ordenar Fracciones (B) Respuestas

Ordene cada conjunto de fracciones usando la recta numérica.

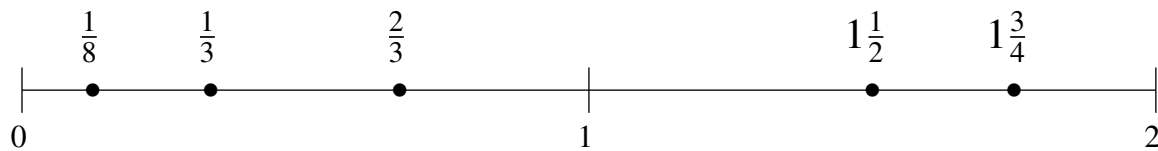
$$\frac{1}{3}, \frac{7}{8}, \frac{4}{7}, 1\frac{8}{9}, 1\frac{1}{2}$$

$$\frac{1}{3}, \frac{4}{7}, \frac{7}{8}, 1\frac{1}{2}, 1\frac{8}{9}$$



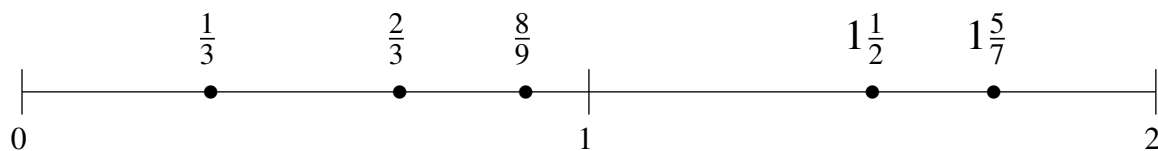
$$1\frac{1}{2}, \frac{2}{3}, \frac{1}{3}, 1\frac{3}{4}, \frac{1}{8}$$

$$\frac{1}{8}, \frac{1}{3}, \frac{2}{3}, 1\frac{1}{2}, 1\frac{3}{4}$$



$$\frac{2}{3}, \frac{1}{3}, \frac{8}{9}, 1\frac{1}{2}, 1\frac{5}{7}$$

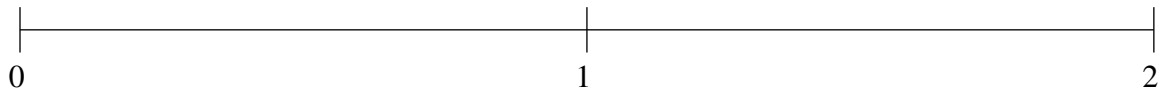
$$\frac{1}{3}, \frac{2}{3}, \frac{8}{9}, 1\frac{1}{2}, 1\frac{5}{7}$$



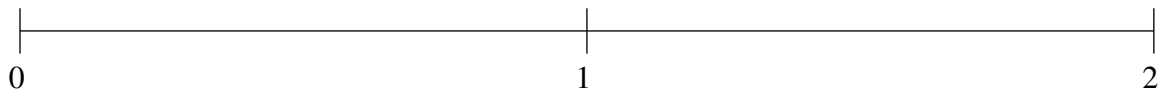
Ordenar Fracciones (C)

Ordene cada conjunto de fracciones usando la recta numérica.

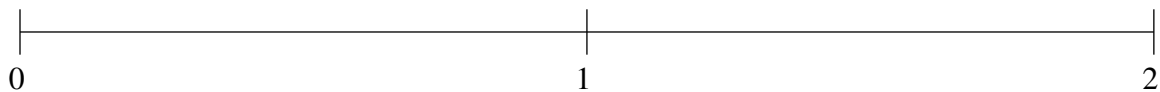
$$\frac{1}{5}, \frac{8}{9}, 1\frac{1}{4}, \frac{2}{3}, 1\frac{4}{5}$$



$$\frac{1}{2}, 1\frac{1}{5}, \frac{5}{7}, 1\frac{2}{3}, \frac{1}{6}$$



$$1\frac{2}{3}, 1\frac{1}{5}, \frac{1}{5}, \frac{2}{3}, \frac{3}{7}$$

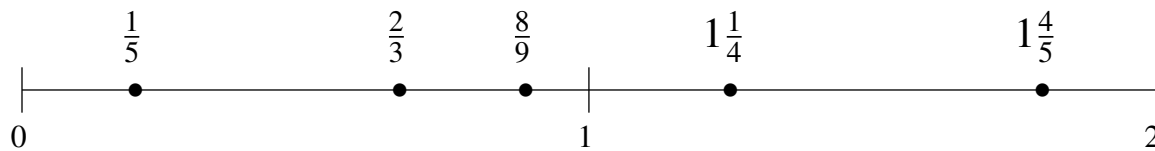


Ordenar Fracciones (C) Respuestas

Ordene cada conjunto de fracciones usando la recta numérica.

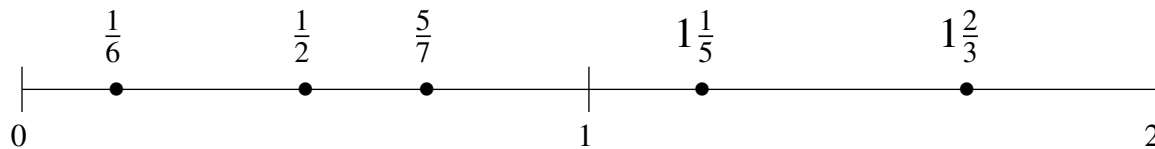
$$\frac{1}{5}, \frac{8}{9}, 1\frac{1}{4}, \frac{2}{3}, 1\frac{4}{5}$$

$$\frac{1}{5}, \frac{2}{3}, \frac{8}{9}, 1\frac{1}{4}, 1\frac{4}{5}$$



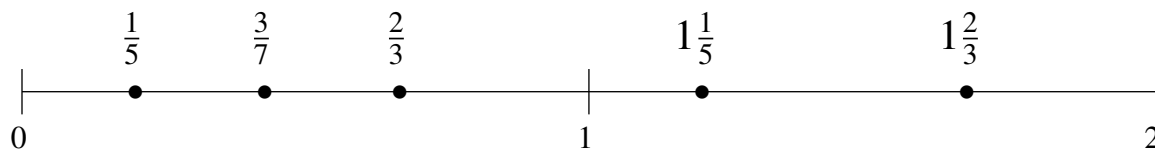
$$\frac{1}{2}, 1\frac{1}{5}, \frac{5}{7}, 1\frac{2}{3}, \frac{1}{6}$$

$$\frac{1}{6}, \frac{1}{2}, \frac{5}{7}, 1\frac{1}{5}, 1\frac{2}{3}$$



$$1\frac{2}{3}, 1\frac{1}{5}, \frac{1}{5}, \frac{2}{3}, \frac{3}{7}$$

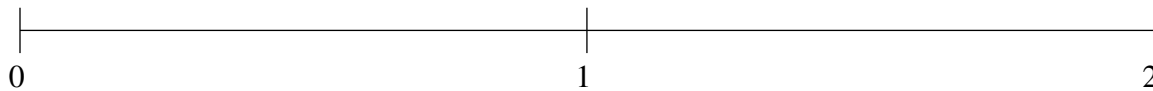
$$\frac{1}{5}, \frac{3}{7}, \frac{2}{3}, 1\frac{1}{5}, 1\frac{2}{3}$$



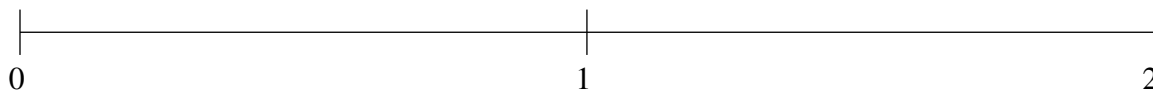
Ordenar Fracciones (D)

Ordene cada conjunto de fracciones usando la recta numérica.

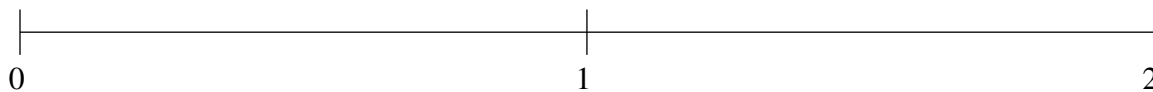
$$\frac{6}{7}, \frac{1}{4}, 1\frac{5}{6}, \frac{1}{2}, 1\frac{1}{5}$$



$$\frac{1}{2}, \frac{1}{8}, \frac{4}{5}, 1\frac{1}{2}, 1\frac{1}{4}$$



$$\frac{1}{4}, 1\frac{5}{7}, 1\frac{1}{4}, \frac{2}{3}, 1\frac{1}{2}$$

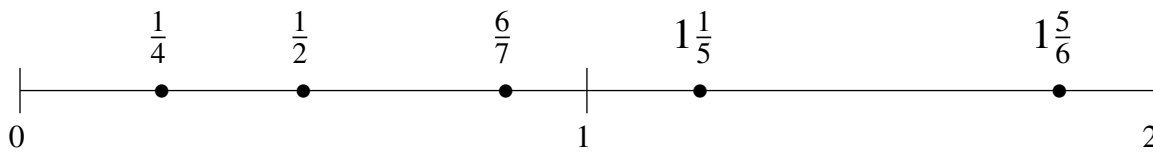


Ordenar Fracciones (D) Respuestas

Ordene cada conjunto de fracciones usando la recta numérica.

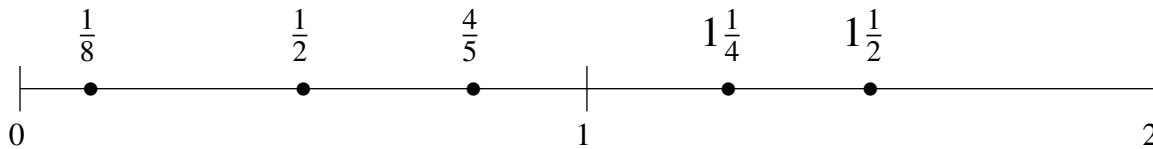
$$\frac{6}{7}, \frac{1}{4}, 1\frac{5}{6}, \frac{1}{2}, 1\frac{1}{5}$$

$$\frac{1}{4}, \frac{1}{2}, \frac{6}{7}, 1\frac{1}{5}, 1\frac{5}{6}$$



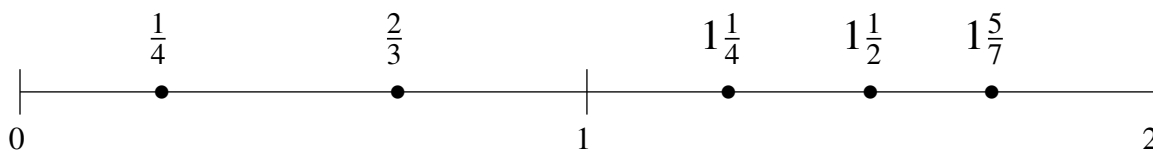
$$\frac{1}{2}, \frac{1}{8}, \frac{4}{5}, 1\frac{1}{2}, 1\frac{1}{4}$$

$$\frac{1}{8}, \frac{1}{2}, \frac{4}{5}, 1\frac{1}{4}, 1\frac{1}{2}$$



$$\frac{1}{4}, 1\frac{5}{7}, 1\frac{1}{4}, \frac{2}{3}, 1\frac{1}{2}$$

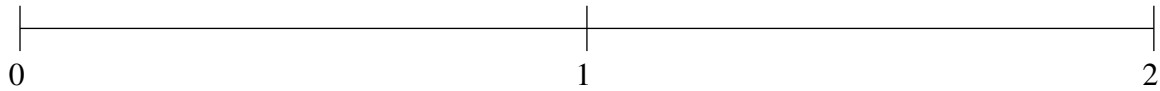
$$\frac{1}{4}, \frac{2}{3}, 1\frac{1}{4}, 1\frac{1}{2}, 1\frac{5}{7}$$



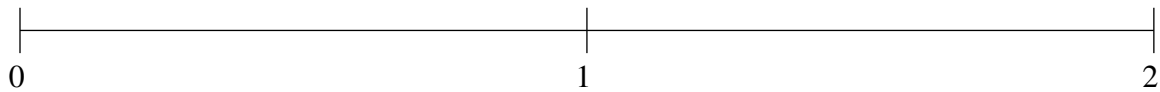
Ordenar Fracciones (E)

Ordene cada conjunto de fracciones usando la recta numérica.

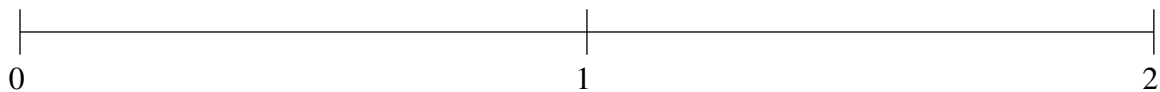
$$\frac{1}{2}, 1\frac{1}{7}, 1\frac{1}{2}, \frac{1}{5}, \frac{6}{7}$$



$$\frac{7}{8}, 1\frac{1}{2}, 1\frac{3}{4}, 1\frac{1}{4}, \frac{1}{2}$$



$$1\frac{7}{8}, 1\frac{4}{7}, \frac{7}{8}, \frac{1}{2}, 1\frac{2}{9}$$

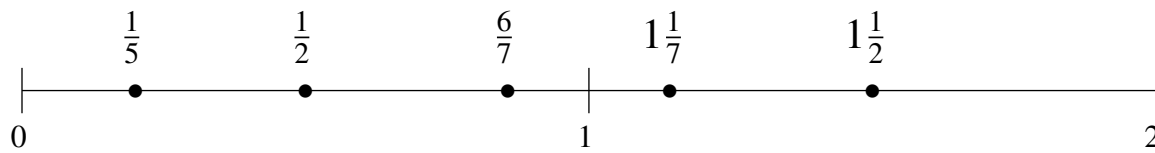


Ordenar Fracciones (E) Respuestas

Ordene cada conjunto de fracciones usando la recta numérica.

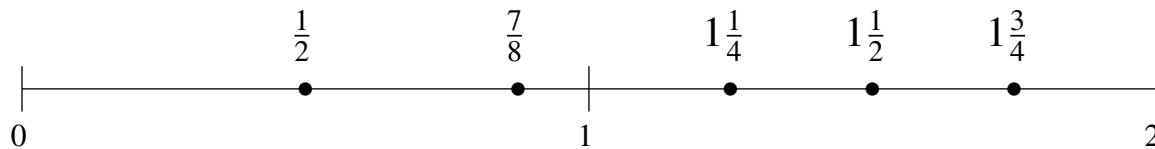
$$\frac{1}{2}, 1\frac{1}{7}, 1\frac{1}{2}, \frac{1}{5}, \frac{6}{7}$$

$$\frac{1}{5}, \frac{1}{2}, \frac{6}{7}, 1\frac{1}{7}, 1\frac{1}{2}$$



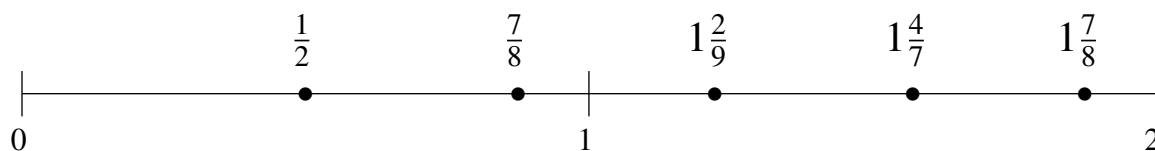
$$\frac{7}{8}, 1\frac{1}{2}, 1\frac{3}{4}, 1\frac{1}{4}, \frac{1}{2}$$

$$\frac{1}{2}, \frac{7}{8}, 1\frac{1}{4}, 1\frac{1}{2}, 1\frac{3}{4}$$



$$1\frac{7}{8}, 1\frac{4}{7}, \frac{7}{8}, \frac{1}{2}, 1\frac{2}{9}$$

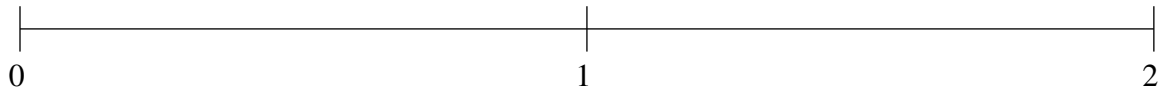
$$\frac{1}{2}, \frac{7}{8}, 1\frac{2}{9}, 1\frac{4}{7}, 1\frac{7}{8}$$



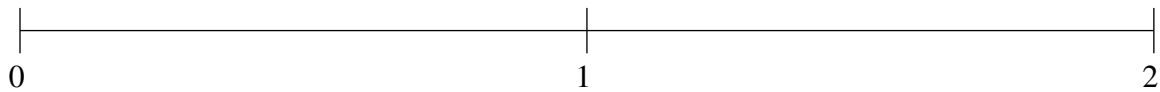
Ordenar Fracciones (F)

Ordene cada conjunto de fracciones usando la recta numérica.

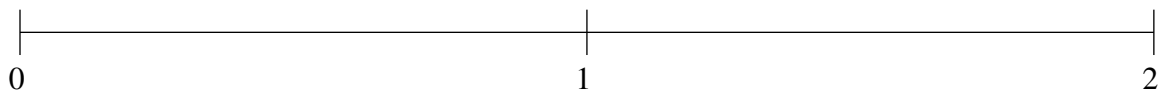
$$1\frac{2}{9}, \frac{1}{9}, \frac{3}{5}, 1\frac{6}{7}, 1\frac{1}{2}$$



$$\frac{1}{3}, 1\frac{1}{2}, 1\frac{1}{4}, 1\frac{3}{4}, \frac{7}{8}$$



$$1\frac{2}{3}, 1\frac{1}{4}, \frac{6}{7}, \frac{1}{8}, \frac{1}{2}$$

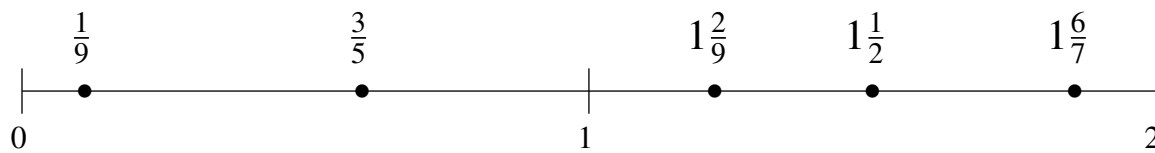


Ordenar Fracciones (F) Respuestas

Ordene cada conjunto de fracciones usando la recta numérica.

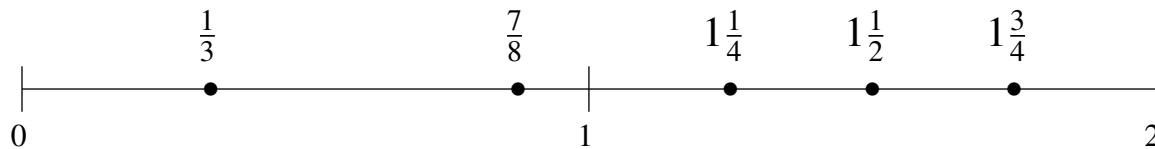
$$1\frac{2}{9}, \frac{1}{9}, \frac{3}{5}, 1\frac{6}{7}, 1\frac{1}{2}$$

$$\frac{1}{9}, \frac{3}{5}, 1\frac{2}{9}, 1\frac{1}{2}, 1\frac{6}{7}$$



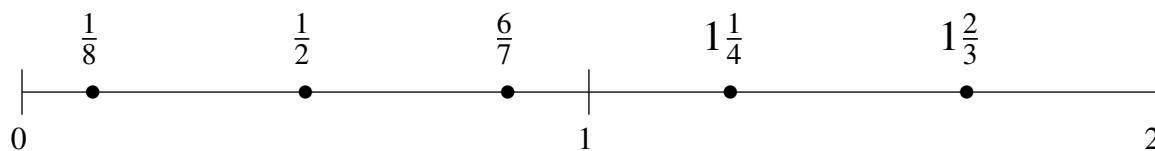
$$\frac{1}{3}, 1\frac{1}{2}, 1\frac{1}{4}, 1\frac{3}{4}, \frac{7}{8}$$

$$\frac{1}{3}, \frac{7}{8}, 1\frac{1}{4}, 1\frac{1}{2}, 1\frac{3}{4}$$



$$1\frac{2}{3}, 1\frac{1}{4}, \frac{6}{7}, \frac{1}{8}, \frac{1}{2}$$

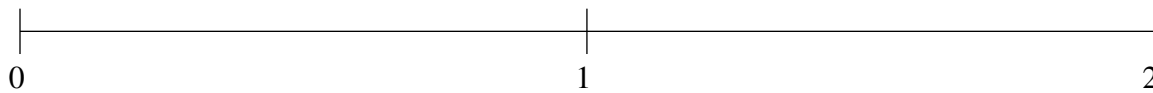
$$\frac{1}{8}, \frac{1}{2}, \frac{6}{7}, 1\frac{1}{4}, 1\frac{2}{3}$$



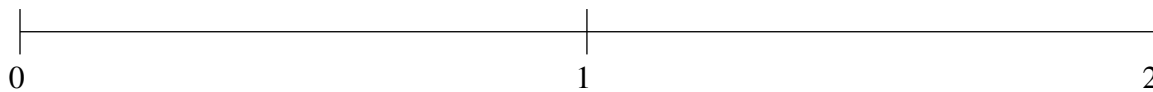
Ordenar Fracciones (G)

Ordene cada conjunto de fracciones usando la recta numérica.

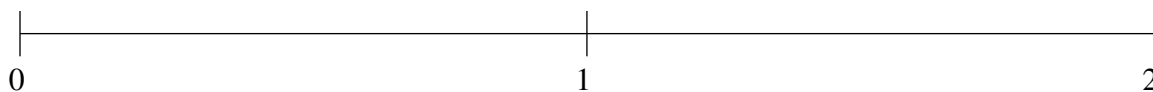
$$1\frac{2}{5}, \frac{3}{5}, 1\frac{1}{6}, \frac{1}{8}, \frac{1}{3}$$



$$1\frac{2}{3}, \frac{1}{3}, \frac{4}{7}, 1\frac{1}{3}, \frac{9}{10}$$



$$\frac{3}{4}, \frac{2}{7}, 1\frac{4}{9}, \frac{1}{2}, 1\frac{2}{3}$$

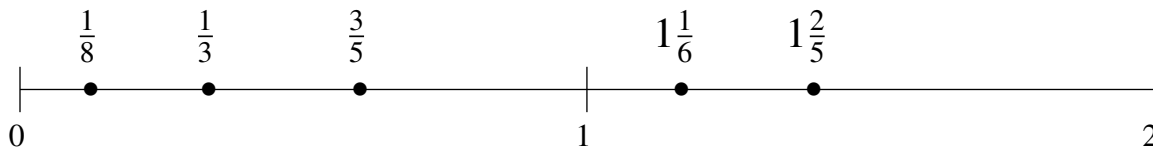


Ordenar Fracciones (G) Respuestas

Ordene cada conjunto de fracciones usando la recta numérica.

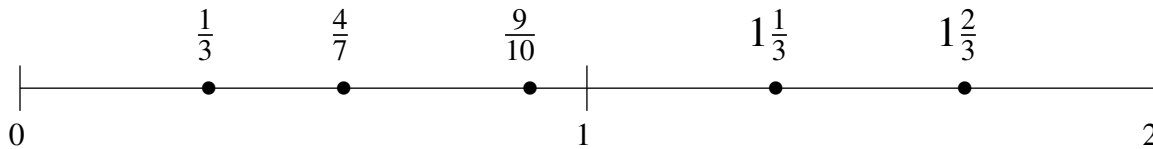
$$1\frac{2}{5}, \frac{3}{5}, 1\frac{1}{6}, \frac{1}{8}, \frac{1}{3}$$

$$\frac{1}{8}, \frac{1}{3}, \frac{3}{5}, 1\frac{1}{6}, 1\frac{2}{5}$$



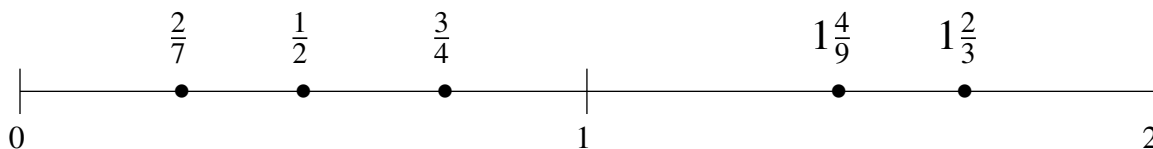
$$1\frac{2}{3}, \frac{1}{3}, \frac{4}{7}, 1\frac{1}{3}, \frac{9}{10}$$

$$\frac{1}{3}, \frac{4}{7}, \frac{9}{10}, 1\frac{1}{3}, 1\frac{2}{3}$$



$$\frac{3}{4}, \frac{2}{7}, 1\frac{4}{9}, \frac{1}{2}, 1\frac{2}{3}$$

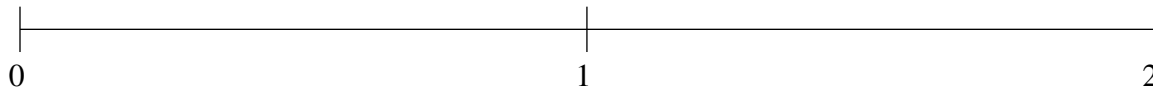
$$\frac{2}{7}, \frac{1}{2}, \frac{3}{4}, 1\frac{4}{9}, 1\frac{2}{3}$$



Ordenar Fracciones (H)

Ordene cada conjunto de fracciones usando la recta numérica.

$$\frac{3}{4}, \frac{1}{6}, 1\frac{4}{7}, 1\frac{4}{5}, 1\frac{1}{3}$$



$$1\frac{2}{7}, 1\frac{1}{2}, \frac{1}{2}, \frac{5}{6}, 1\frac{5}{6}$$



$$\frac{1}{2}, 1\frac{2}{3}, 1\frac{1}{4}, \frac{2}{7}, \frac{4}{5}$$



Ordenar Fracciones (H) Respuestas

Ordene cada conjunto de fracciones usando la recta numérica.

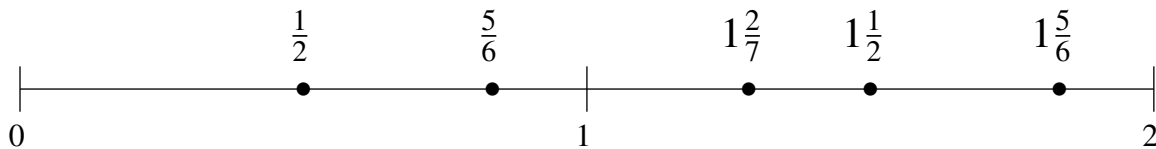
$$\frac{3}{4}, \frac{1}{6}, 1\frac{4}{7}, 1\frac{4}{5}, 1\frac{1}{3}$$

$$\frac{1}{6}, \frac{3}{4}, 1\frac{1}{3}, 1\frac{4}{7}, 1\frac{4}{5}$$



$$1\frac{2}{7}, 1\frac{1}{2}, \frac{1}{2}, \frac{5}{6}, 1\frac{5}{6}$$

$$\frac{1}{2}, \frac{5}{6}, 1\frac{2}{7}, 1\frac{1}{2}, 1\frac{5}{6}$$



$$\frac{1}{2}, 1\frac{2}{3}, 1\frac{1}{4}, \frac{2}{7}, \frac{4}{5}$$

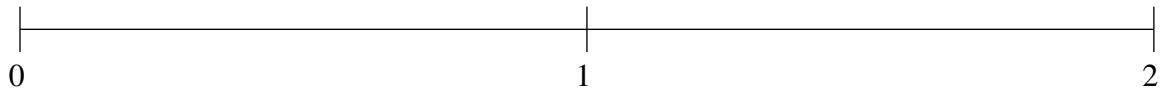
$$\frac{2}{7}, \frac{1}{2}, \frac{4}{5}, 1\frac{1}{4}, 1\frac{2}{3}$$



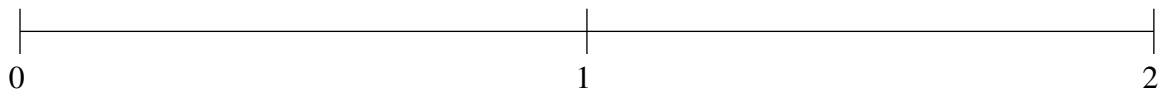
Ordenar Fracciones (I)

Ordene cada conjunto de fracciones usando la recta numérica.

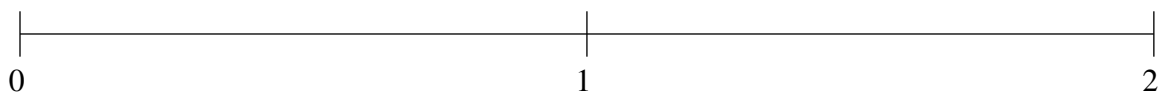
$$\frac{1}{6}, 1\frac{1}{8}, 1\frac{4}{5}, 1\frac{1}{2}, \frac{2}{3}$$



$$\frac{1}{5}, \frac{1}{2}, 1\frac{7}{8}, 1\frac{2}{3}, 1\frac{3}{7}$$



$$\frac{1}{2}, 1\frac{3}{5}, \frac{1}{9}, 1\frac{6}{7}, \frac{9}{10}$$

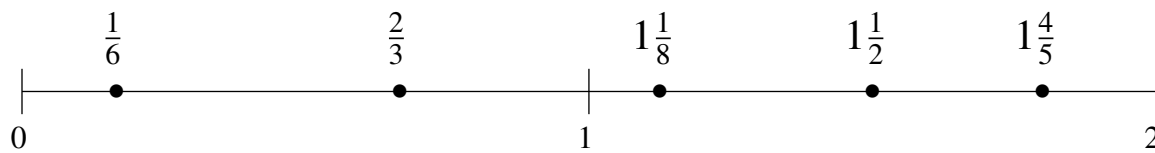


Ordenar Fracciones (I) Respuestas

Ordene cada conjunto de fracciones usando la recta numérica.

$$\frac{1}{6}, 1\frac{1}{8}, 1\frac{4}{5}, 1\frac{1}{2}, \frac{2}{3}$$

$$\frac{1}{6}, \frac{2}{3}, 1\frac{1}{8}, 1\frac{1}{2}, 1\frac{4}{5}$$



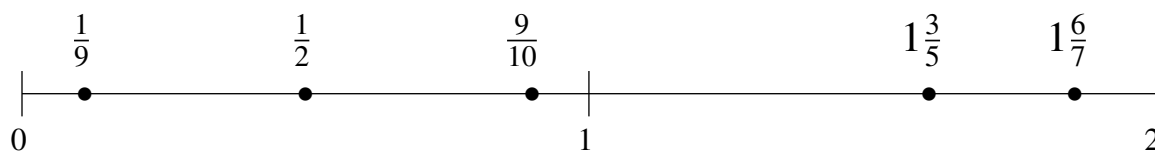
$$\frac{1}{5}, \frac{1}{2}, 1\frac{7}{8}, 1\frac{2}{3}, 1\frac{3}{7}$$

$$\frac{1}{5}, \frac{1}{2}, 1\frac{3}{7}, 1\frac{2}{3}, 1\frac{7}{8}$$



$$\frac{1}{2}, 1\frac{3}{5}, \frac{1}{9}, 1\frac{6}{7}, \frac{9}{10}$$

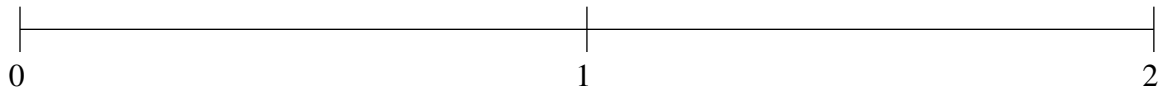
$$\frac{1}{9}, \frac{1}{2}, \frac{9}{10}, 1\frac{3}{5}, 1\frac{6}{7}$$



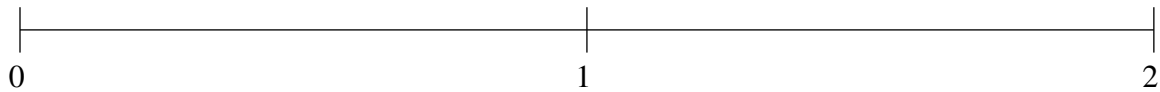
Ordenar Fracciones (J)

Ordene cada conjunto de fracciones usando la recta numérica.

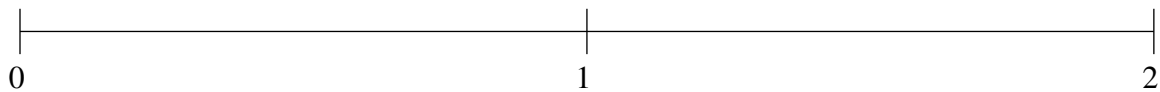
$$1\frac{1}{2}, \frac{2}{7}, 1\frac{1}{7}, 1\frac{3}{4}, \frac{3}{5}$$



$$\frac{7}{8}, \frac{1}{5}, \frac{1}{2}, 1\frac{1}{6}, 1\frac{2}{5}$$



$$1\frac{1}{2}, \frac{7}{8}, \frac{2}{3}, 1\frac{3}{4}, \frac{1}{3}$$

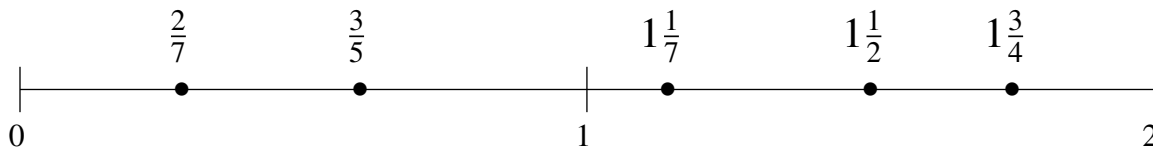


Ordenar Fracciones (J) Respuestas

Ordene cada conjunto de fracciones usando la recta numérica.

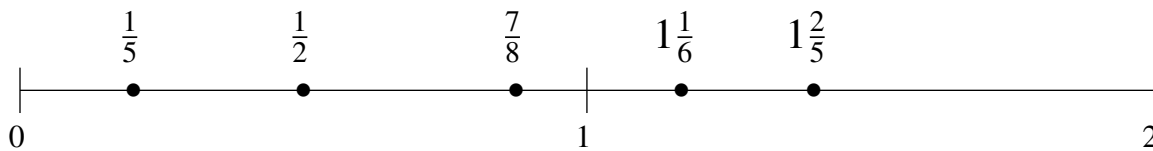
$$1\frac{1}{2}, \frac{2}{7}, 1\frac{1}{7}, 1\frac{3}{4}, \frac{3}{5}$$

$$\frac{2}{7}, \frac{3}{5}, 1\frac{1}{7}, 1\frac{1}{2}, 1\frac{3}{4}$$



$$\frac{7}{8}, \frac{1}{5}, \frac{1}{2}, 1\frac{1}{6}, 1\frac{2}{5}$$

$$\frac{1}{5}, \frac{1}{2}, \frac{7}{8}, 1\frac{1}{6}, 1\frac{2}{5}$$



$$1\frac{1}{2}, \frac{7}{8}, \frac{2}{3}, 1\frac{3}{4}, \frac{1}{3}$$

$$\frac{1}{3}, \frac{2}{3}, \frac{7}{8}, 1\frac{1}{2}, 1\frac{3}{4}$$

