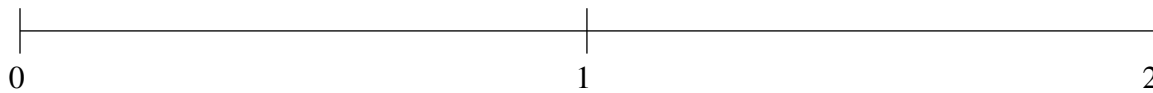


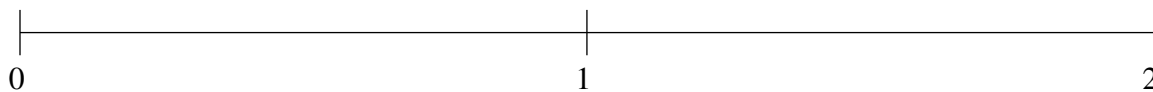
## Ordenar Fracciones (B)

Ordene cada conjunto de fracciones usando la recta numérica.

$$\frac{1}{2}, 1\frac{1}{7}, \frac{16}{19}, \frac{1}{16}, 1\frac{2}{3}$$



$$\frac{1}{5}, \frac{1}{2}, 1\frac{4}{5}, \frac{11}{13}, 1\frac{1}{6}$$



$$1\frac{1}{3}, 1\frac{5}{8}, \frac{5}{6}, \frac{1}{7}, \frac{1}{2}$$

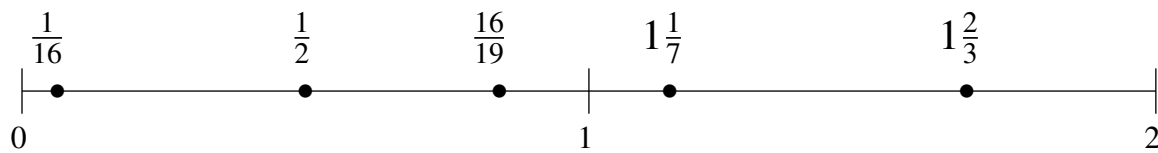


## Ordenar Fracciones (B) Respuestas

Ordene cada conjunto de fracciones usando la recta numérica.

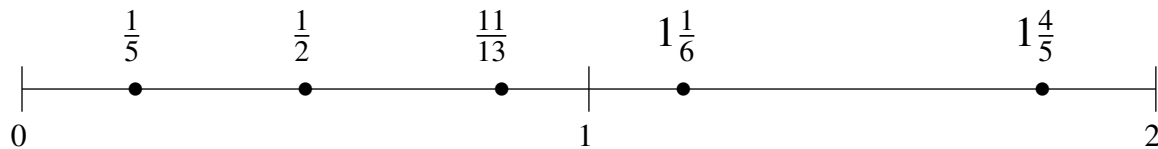
$$\frac{1}{2}, 1\frac{1}{7}, \frac{16}{19}, \frac{1}{16}, 1\frac{2}{3}$$

$$\frac{1}{16}, \frac{1}{2}, \frac{16}{19}, 1\frac{1}{7}, 1\frac{2}{3}$$



$$\frac{1}{5}, \frac{1}{2}, 1\frac{4}{5}, \frac{11}{13}, 1\frac{1}{6}$$

$$\frac{1}{5}, \frac{1}{2}, \frac{11}{13}, 1\frac{1}{6}, 1\frac{4}{5}$$



$$1\frac{1}{3}, 1\frac{5}{8}, \frac{5}{6}, \frac{1}{7}, \frac{1}{2}$$

$$\frac{1}{7}, \frac{1}{2}, \frac{5}{6}, 1\frac{1}{3}, 1\frac{5}{8}$$

