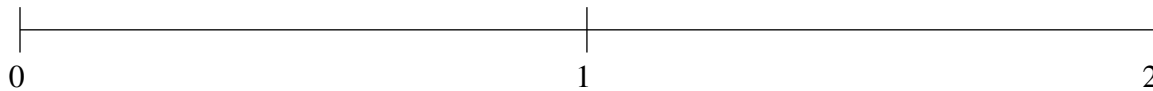


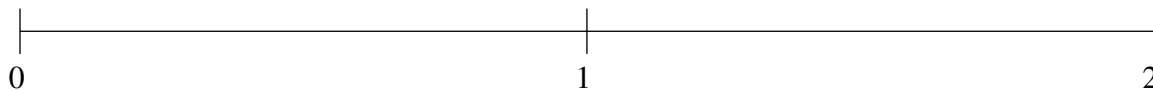
Ordenar Fracciones (C)

Ordene cada conjunto de fracciones usando la recta numérica.

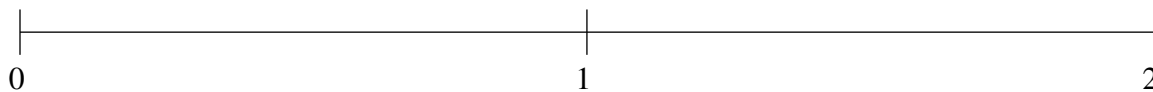
$$1\frac{1}{2}, 1\frac{2}{9}, 1\frac{7}{8}, \frac{4}{17}, \frac{12}{19}$$



$$1\frac{1}{6}, \frac{1}{6}, 1\frac{8}{9}, 1\frac{3}{5}, \frac{5}{12}$$



$$\frac{7}{11}, 1\frac{19}{22}, 1\frac{1}{6}, 1\frac{3}{7}, \frac{2}{5}$$



Ordenar Fracciones (C) Respuestas

Ordene cada conjunto de fracciones usando la recta numérica.

$$1\frac{1}{2}, 1\frac{2}{9}, 1\frac{7}{8}, \frac{4}{17}, \frac{12}{19}$$

$$\frac{4}{17}, \frac{12}{19}, 1\frac{2}{9}, 1\frac{1}{2}, 1\frac{7}{8}$$



$$1\frac{1}{6}, \frac{1}{6}, 1\frac{8}{9}, 1\frac{3}{5}, \frac{5}{12}$$

$$\frac{1}{6}, \frac{5}{12}, 1\frac{1}{6}, 1\frac{3}{5}, 1\frac{8}{9}$$



$$\frac{7}{11}, 1\frac{19}{22}, 1\frac{1}{6}, 1\frac{3}{7}, \frac{2}{5}$$

$$\frac{2}{5}, \frac{7}{11}, 1\frac{1}{6}, 1\frac{3}{7}, 1\frac{19}{22}$$

