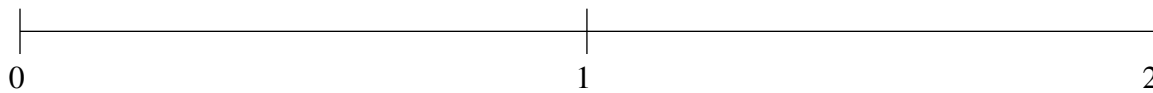


Ordenar Fracciones (D)

Ordene cada conjunto de fracciones usando la recta numérica.

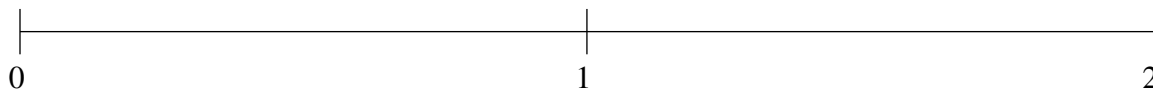
$$1\frac{1}{6}, \frac{3}{4}, 1\frac{2}{3}, \frac{3}{17}, \frac{7}{16}$$



$$1\frac{8}{9}, 1\frac{1}{2}, \frac{9}{10}, \frac{1}{2}, \frac{1}{7}$$



$$1\frac{2}{7}, \frac{10}{11}, 1\frac{4}{5}, 1\frac{1}{2}, \frac{3}{5}$$

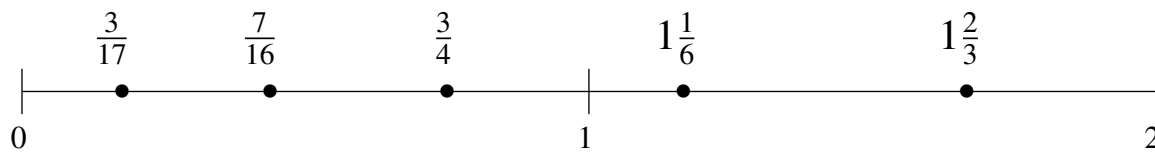


Ordenar Fracciones (D) Respuestas

Ordene cada conjunto de fracciones usando la recta numérica.

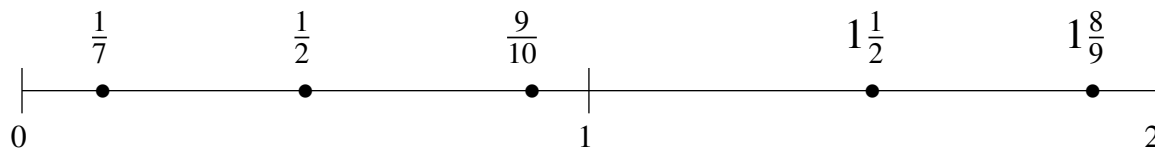
$$1\frac{1}{6}, \frac{3}{4}, 1\frac{2}{3}, \frac{3}{17}, \frac{7}{16}$$

$$\frac{3}{17}, \frac{7}{16}, \frac{3}{4}, 1\frac{1}{6}, 1\frac{2}{3}$$



$$1\frac{8}{9}, 1\frac{1}{2}, \frac{9}{10}, \frac{1}{2}, \frac{1}{7}$$

$$\frac{1}{7}, \frac{1}{2}, \frac{9}{10}, 1\frac{1}{2}, 1\frac{8}{9}$$



$$1\frac{2}{7}, \frac{10}{11}, 1\frac{4}{5}, 1\frac{1}{2}, \frac{3}{5}$$

$$\frac{3}{5}, \frac{10}{11}, 1\frac{2}{7}, 1\frac{1}{2}, 1\frac{4}{5}$$

