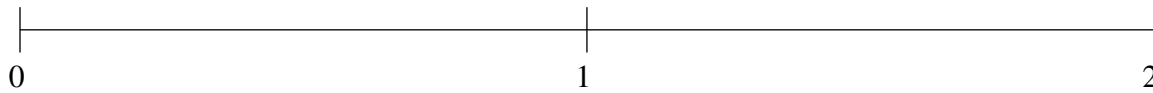


Ordenar Fracciones (E)

Ordene cada conjunto de fracciones usando la recta numérica.

$$1\frac{4}{11}, 1\frac{2}{17}, \frac{4}{7}, \frac{2}{9}, 1\frac{7}{11}$$



$$\frac{12}{13}, \frac{1}{2}, 1\frac{3}{5}, 1\frac{6}{7}, 1\frac{3}{14}$$



$$1\frac{16}{17}, 1\frac{1}{3}, \frac{3}{4}, \frac{1}{3}, 1\frac{5}{9}$$

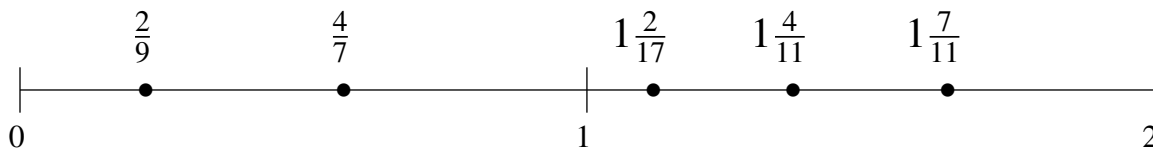


Ordenar Fracciones (E) Respuestas

Ordene cada conjunto de fracciones usando la recta numérica.

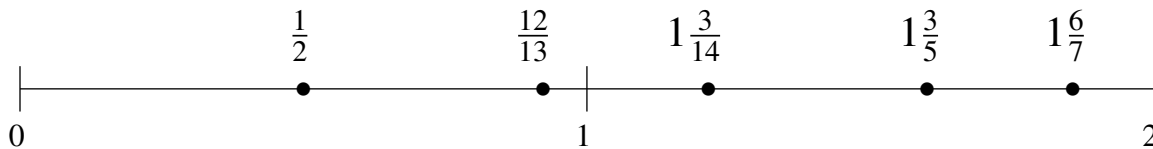
$$1\frac{4}{11}, 1\frac{2}{17}, \frac{4}{7}, \frac{2}{9}, 1\frac{7}{11}$$

$$\frac{2}{9}, \frac{4}{7}, 1\frac{2}{17}, 1\frac{4}{11}, 1\frac{7}{11}$$



$$\frac{12}{13}, \frac{1}{2}, 1\frac{3}{5}, 1\frac{6}{7}, 1\frac{3}{14}$$

$$\frac{1}{2}, \frac{12}{13}, 1\frac{3}{14}, 1\frac{3}{5}, 1\frac{6}{7}$$



$$1\frac{16}{17}, 1\frac{1}{3}, \frac{3}{4}, \frac{1}{3}, 1\frac{5}{9}$$

$$\frac{1}{3}, \frac{3}{4}, 1\frac{1}{3}, 1\frac{5}{9}, 1\frac{16}{17}$$

