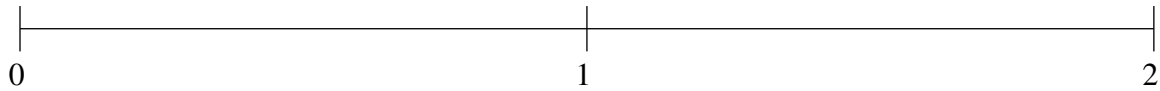


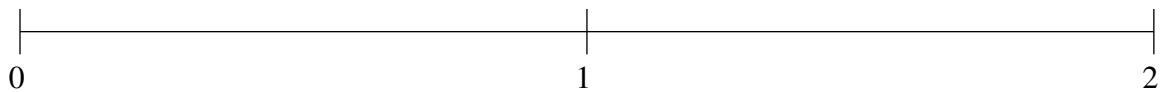
## Ordenar Fracciones (F)

Ordene cada conjunto de fracciones usando la recta numérica.

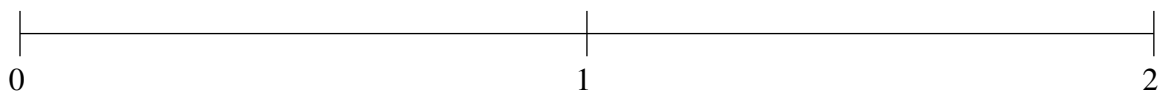
$$\frac{1}{4}, 1\frac{1}{2}, 1\frac{1}{7}, \frac{1}{2}, \frac{11}{12}$$



$$\frac{11}{23}, 1\frac{9}{10}, \frac{1}{4}, 1\frac{2}{3}, \frac{8}{9}$$



$$1\frac{3}{7}, 1\frac{10}{11}, 1\frac{1}{17}, \frac{4}{9}, 1\frac{2}{3}$$

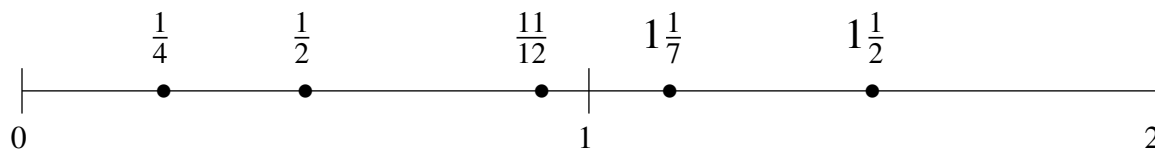


## Ordenar Fracciones (F) Respuestas

Ordene cada conjunto de fracciones usando la recta numérica.

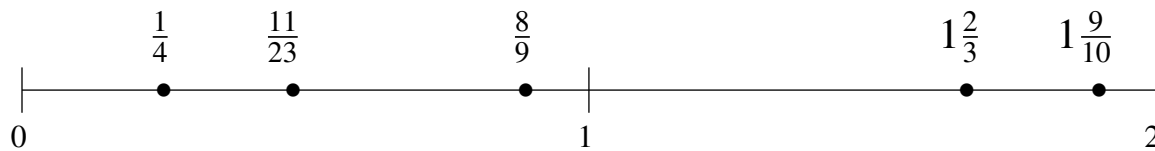
$$\frac{1}{4}, 1\frac{1}{2}, 1\frac{1}{7}, \frac{1}{2}, \frac{11}{12}$$

$$\frac{1}{4}, \frac{1}{2}, \frac{11}{12}, 1\frac{1}{7}, 1\frac{1}{2}$$



$$\frac{11}{23}, 1\frac{9}{10}, \frac{1}{4}, 1\frac{2}{3}, \frac{8}{9}$$

$$\frac{1}{4}, \frac{11}{23}, \frac{8}{9}, 1\frac{2}{3}, 1\frac{9}{10}$$



$$1\frac{3}{7}, 1\frac{10}{11}, 1\frac{1}{17}, \frac{4}{9}, 1\frac{2}{3}$$

$$\frac{4}{9}, 1\frac{1}{17}, 1\frac{3}{7}, 1\frac{2}{3}, 1\frac{10}{11}$$

