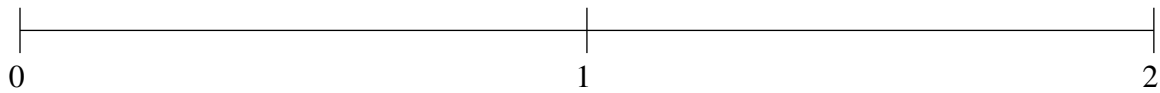


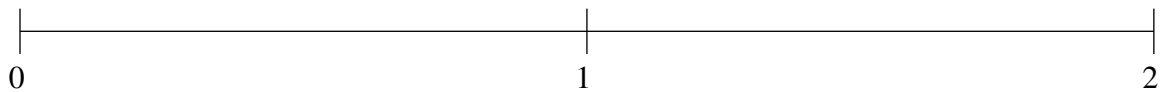
Ordenar Fracciones (G)

Ordene cada conjunto de fracciones usando la recta numérica.

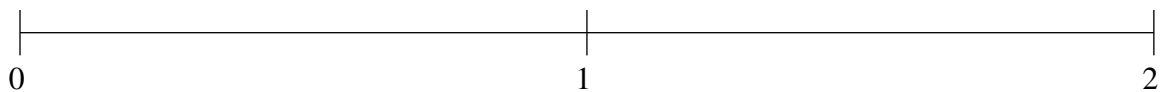
$$1\frac{1}{6}, \frac{1}{2}, 1\frac{3}{7}, 1\frac{2}{3}, \frac{5}{17}$$



$$\frac{2}{19}, \frac{1}{3}, 1\frac{5}{6}, 1\frac{12}{23}, 1\frac{1}{5}$$



$$\frac{1}{10}, \frac{3}{5}, 1\frac{5}{14}, 1\frac{6}{7}, \frac{5}{13}$$

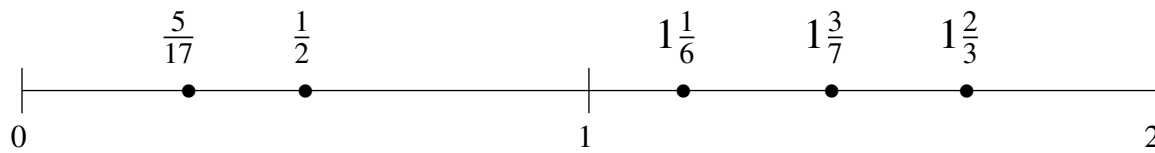


Ordenar Fracciones (G) Respuestas

Ordene cada conjunto de fracciones usando la recta numérica.

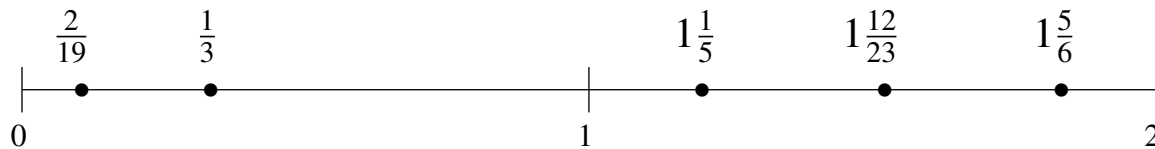
$$1\frac{1}{6}, \frac{1}{2}, 1\frac{3}{7}, 1\frac{2}{3}, \frac{5}{17}$$

$$\frac{5}{17}, \frac{1}{2}, 1\frac{1}{6}, 1\frac{3}{7}, 1\frac{2}{3}$$



$$\frac{2}{19}, \frac{1}{3}, 1\frac{5}{6}, 1\frac{12}{23}, 1\frac{1}{5}$$

$$\frac{2}{19}, \frac{1}{3}, 1\frac{1}{5}, 1\frac{12}{23}, 1\frac{5}{6}$$



$$\frac{1}{10}, \frac{3}{5}, 1\frac{5}{14}, 1\frac{6}{7}, \frac{5}{13}$$

$$\frac{1}{10}, \frac{5}{13}, \frac{3}{5}, 1\frac{5}{14}, 1\frac{6}{7}$$

