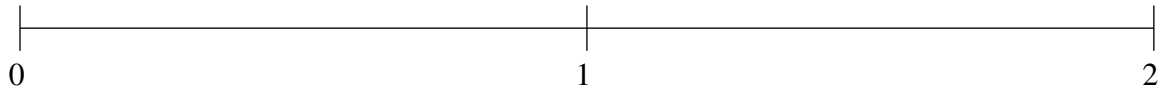


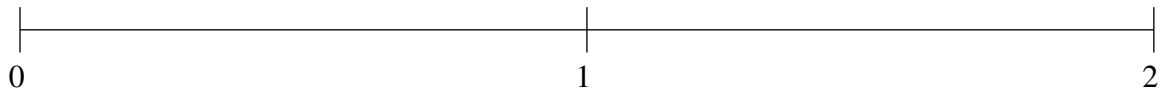
Ordenar Fracciones (B)

Ordene cada conjunto de fracciones usando la recta numérica.

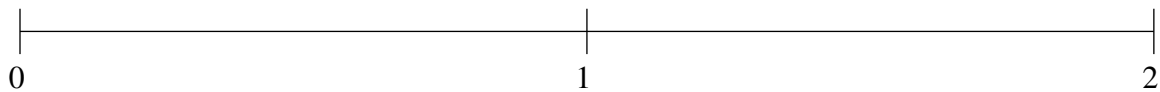
$$\frac{1}{4}, 1\frac{3}{4}, \frac{1}{2}, 1\frac{1}{12}, 1\frac{1}{2}$$



$$\frac{5}{6}, \frac{1}{2}, 1\frac{2}{3}, \frac{1}{6}, 1\frac{1}{3}$$



$$1\frac{1}{6}, 1\frac{1}{2}, \frac{1}{2}, 1\frac{3}{4}, \frac{3}{4}$$

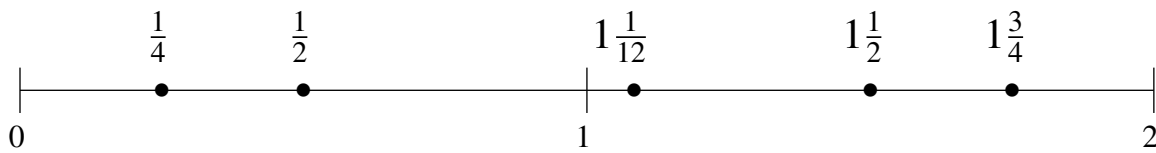


Ordenar Fracciones (B) Respuestas

Ordene cada conjunto de fracciones usando la recta numérica.

$$\frac{1}{4}, 1\frac{3}{4}, \frac{1}{2}, 1\frac{1}{12}, 1\frac{1}{2}$$

$$\frac{1}{4}, \frac{1}{2}, 1\frac{1}{12}, 1\frac{1}{2}, 1\frac{3}{4}$$



$$\frac{5}{6}, \frac{1}{2}, 1\frac{2}{3}, \frac{1}{6}, 1\frac{1}{3}$$

$$\frac{1}{6}, \frac{1}{2}, \frac{5}{6}, 1\frac{1}{3}, 1\frac{2}{3}$$



$$1\frac{1}{6}, 1\frac{1}{2}, \frac{1}{2}, 1\frac{3}{4}, \frac{3}{4}$$

$$\frac{1}{2}, \frac{3}{4}, 1\frac{1}{6}, 1\frac{1}{2}, 1\frac{3}{4}$$

